

Please check the examination details below before entering your candidate information

Candidate surname				Other names			
Centre Number				Candidate Number			
Pearson Edexcel International GCSE (9–1)							
Tuesday 7 May 2019							
Morning (Time: 1 hour 45 minutes)				Paper Reference 4HB1/01R			
Human Biology							
Unit: 4HB1							
Paper: 01R							
You must have: Ruler Calculator						Total Marks	

Instructions

- Use **black** ink or ball-point pen.
- **Fill in the boxes** at the top of this page with your name, centre number and candidate number.
- Answer **all** questions.
- Answer the questions in the spaces provided
– *there may be more space than you need.*
- Show all the steps in any calculations and state the units.
- Some questions must be answered with a cross in a box ☒. If you change your mind about an answer, put a line through the box ☒ and then mark your new answer with a cross ☒.

Information

- The total mark for this paper is 90.
- The marks for **each** question are shown in brackets
– *use this as a guide as to how much time to spend on each question.*

Advice

- Read each question carefully before you start to answer it.
- Write your answers neatly and in good English.
- Try to answer every question.
- Check your answers if you have time at the end.

Turn over ►

P60186A

©2019 Pearson Education Ltd.

1/1/1/1/1/




Pearson



DO NOT WRITE IN THIS AREA

DO NOT WRITE IN THIS AREA

DO NOT WRITE IN THIS AREA

DO NOT WRITE IN THIS AREA

DO NOT WRITE IN THIS AREA

DO NOT WRITE IN THIS AREA

BLANK PAGE



Answer ALL questions.

1 The table lists blood components and their features.

Place ticks (✓) in boxes to show the features of each blood component.

(6)

Blood component	Feature					
	has a nucleus	contains haemoglobin	carries hormones	engulfs pathogens	produces antibodies	helps blood clotting
red blood cell						
phagocyte						
lymphocyte						
platelets						
plasma						

(Total for Question 1 = 6 marks)

DO NOT WRITE IN THIS AREA

DO NOT WRITE IN THIS AREA

DO NOT WRITE IN THIS AREA

DO NOT WRITE IN THIS AREA

DO NOT WRITE IN THIS AREA

DO NOT WRITE IN THIS AREA





2 Humans need a balanced diet.

(a) Vitamins are needed in a balanced diet.

State four other components of a balanced diet.

(2)

- 1
- 2
- 3
- 4

(b) Explain why vitamin C is needed in a balanced diet.

(2)

-
-
-
-

DO NOT WRITE IN THIS AREA

DO NOT WRITE IN THIS AREA

DO NOT WRITE IN THIS AREA

DO NOT WRITE IN THIS AREA

DO NOT WRITE IN THIS AREA

DO NOT WRITE IN THIS AREA





3 Ebola is a disease that has become an epidemic in some countries.

(a) Which of these causes Ebola?

(1)

- A a bacterium
- B a mosquito
- C a protozoan
- D a virus

(b) State three precautions that can be taken to prevent the spread of Ebola.

(3)

1

.....

2

.....

3

.....

(c) Symptoms of Ebola only appear two to three weeks after infection.

Explain why the symptoms do not appear immediately.

(3)

.....

.....

.....

.....

.....

.....

DO NOT WRITE IN THIS AREA

DO NOT WRITE IN THIS AREA

DO NOT WRITE IN THIS AREA

DO NOT WRITE IN THIS AREA

DO NOT WRITE IN THIS AREA

DO NOT WRITE IN THIS AREA



4 The blood is filtered by the kidneys.

The filtrate formed passes through the kidney tubules and is changed into urine.

(a) The table lists the masses of different substances in blood, filtrate and urine passing through the kidneys in one day.

Substance	Mass of substance in g per day		
	in blood	in filtrate	in urine
protein	8000	0	0
glucose	180	180	0
urea	53	53	25
uric acid	9	9	1

Use the information from the table to answer these questions.

(i) Which substance does not pass into the filtrate?

(1)

- A protein
- B glucose
- C urea
- D uric acid

(ii) The molecules of this substance do not pass into the filtrate.

What is the reason for this?

(1)

- A the molecules are too large
- B the molecules are reabsorbed
- C the molecules are a waste product
- D the concentration of the molecules in the blood is too low

DO NOT WRITE IN THIS AREA

DO NOT WRITE IN THIS AREA

DO NOT WRITE IN THIS AREA

DO NOT WRITE IN THIS AREA

DO NOT WRITE IN THIS AREA

DO NOT WRITE IN THIS AREA



(iii) A person has diabetes but is not receiving treatment.

Explain why the mass of glucose per day in the urine would be different for this person.

(3)

.....

.....

.....

.....

.....

.....

(iv) Calculate the mass of urea in the urine as a percentage of the mass of urea in the filtrate.

(2)

percentage = %

DO NOT WRITE IN THIS AREA

DO NOT WRITE IN THIS AREA

DO NOT WRITE IN THIS AREA

DO NOT WRITE IN THIS AREA

DO NOT WRITE IN THIS AREA

DO NOT WRITE IN THIS AREA



DO NOT WRITE IN THIS AREA

DO NOT WRITE IN THIS AREA

DO NOT WRITE IN THIS AREA

DO NOT WRITE IN THIS AREA

DO NOT WRITE IN THIS AREA

DO NOT WRITE IN THIS AREA

BLANK PAGE



P 6 0 1 8 6 A 0 1 1 2 8

5 A student investigates the effect of temperature on the volume of sweat produced.

This is the student's method.

- sit a person in a room at 20°C
- measure the volume of sweat the person produces
- repeat with the room at different temperatures
- repeat again when the person is active

The table shows the student's results.

Temperature of room in °C	Volume of sweat produced in arbitrary units	
	Sitting	Active
20	1	2
22	2	6
24	2	8
26	2	11
28	3	14
30	4	22

DO NOT WRITE IN THIS AREA

DO NOT WRITE IN THIS AREA

DO NOT WRITE IN THIS AREA

DO NOT WRITE IN THIS AREA

DO NOT WRITE IN THIS AREA


DO NOT WRITE IN THIS AREA



(a) Plot the student's results on the grid.

Join the points with straight lines.

(5)



(b) Use your graph to determine the difference in the volume of sweat produced at 27°C when sitting and when active.

(2)

difference = arbitrary units

DO NOT WRITE IN THIS AREA

DO NOT WRITE IN THIS AREA

DO NOT WRITE IN THIS AREA

DO NOT WRITE IN THIS AREA

DO NOT WRITE IN THIS AREA

DO NOT WRITE IN THIS AREA





(c) Explain the difference between the volume of sweat produced when sitting and when active.

(3)

.....

.....

.....

.....

.....

.....

(Total for Question 5 = 10 marks)

DO NOT WRITE IN THIS AREA

DO NOT WRITE IN THIS AREA

DO NOT WRITE IN THIS AREA

DO NOT WRITE IN THIS AREA

DO NOT WRITE IN THIS AREA

DO NOT WRITE IN THIS AREA



DO NOT WRITE IN THIS AREA

DO NOT WRITE IN THIS AREA

DO NOT WRITE IN THIS AREA

DO NOT WRITE IN THIS AREA

DO NOT WRITE IN THIS AREA

DO NOT WRITE IN THIS AREA

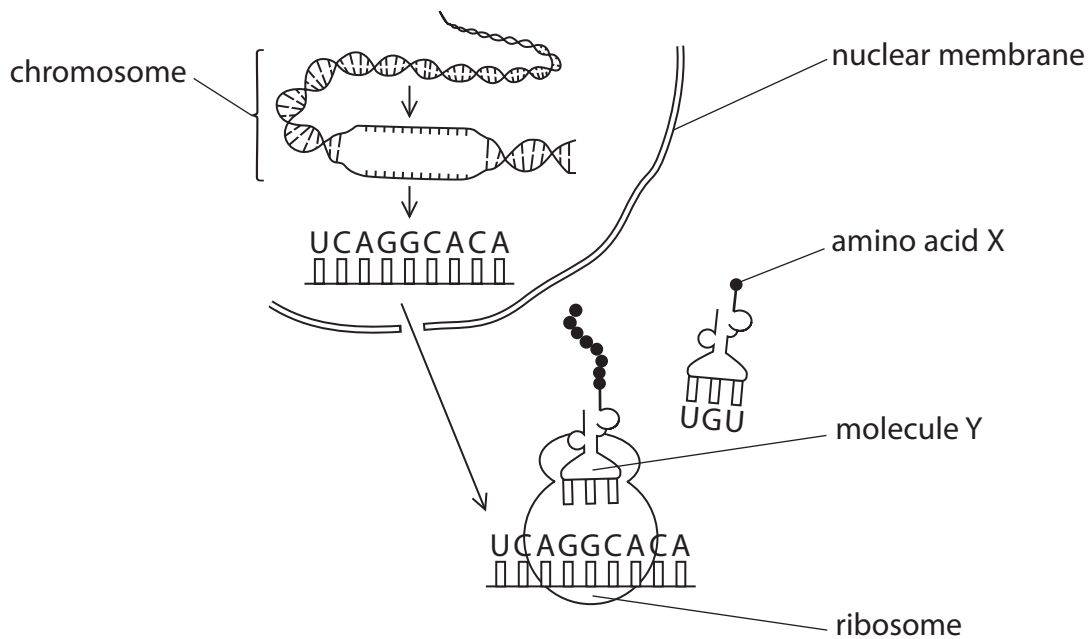
BLANK PAGE



P 6 0 1 8 6 A 0 1 5 2 8

6 Protein synthesis has a number of stages.

The diagram shows some of the stages.



The table lists the base triplets of DNA that code for some of the amino acids found in a protein.

Base triplet of DNA	Amino acid
AGT	serine
CCG	glycine
TGT	threonine
GTA	histidine
CAA	valine
TCC	arginine
ACA	cysteine

(a) Describe the function of the nuclear membrane.

(2)

.....

.....

.....

.....

DO NOT WRITE IN THIS AREA

DO NOT WRITE IN THIS AREA

DO NOT WRITE IN THIS AREA

DO NOT WRITE IN THIS AREA

DO NOT WRITE IN THIS AREA

DO NOT WRITE IN THIS AREA





(e) Describe how a mutation will affect a chromosome.

(2)

Four horizontal dotted lines for writing the answer.

(Total for Question 6 = 12 marks)

DO NOT WRITE IN THIS AREA

DO NOT WRITE IN THIS AREA

DO NOT WRITE IN THIS AREA

DO NOT WRITE IN THIS AREA

DO NOT WRITE IN THIS AREA

DO NOT WRITE IN THIS AREA



DO NOT WRITE IN THIS AREA

DO NOT WRITE IN THIS AREA

DO NOT WRITE IN THIS AREA

DO NOT WRITE IN THIS AREA

DO NOT WRITE IN THIS AREA

DO NOT WRITE IN THIS AREA

BLANK PAGE



P 6 0 1 8 6 A 0 1 9 2 8

7 Cheese is processed from milk. During this process, an enzyme is used to convert the lactose in milk into lactic acid.

A student uses this method to investigate the process.

- dissolve lactose in water to produce a solution
- put the lactose solution into three different test tubes
- keep the first test tube at 2°C, the second test tube at 25°C and the third test tube at 55°C
- add enzyme solution to the lactose solution in each test tube
- measure the amount of lactic acid in the solution every 10 hours for a total of 60 hours

The table shows the student's results.

Time after adding enzyme in hours	Amount of lactic acid in the solution in arbitrary units		
	2°C	25°C	55°C
0	0.1	0.1	0.1
10	0.1	0.2	0.2
20	0.1	0.3	0.2
30	0.2	0.8	0.4
40	0.3	1.8	0.7
50	0.4	2.2	1.0
60	0.6	2.3	1.3

(a) Describe what additional information another student would need to repeat this investigation.

(4)

.....

.....

.....

.....

.....

.....

.....

.....

.....

.....

DO NOT WRITE IN THIS AREA

DO NOT WRITE IN THIS AREA

DO NOT WRITE IN THIS AREA

DO NOT WRITE IN THIS AREA

DO NOT WRITE IN THIS AREA

DO NOT WRITE IN THIS AREA



(b) (i) Estimate the optimum temperature for this enzyme.

(1)

.....

(ii) Explain why it is not possible to give an accurate value for the optimum temperature using the student's method.

(2)

.....

.....

.....

(c) The student continued the investigation for a further 60 hours.

Explain the results that would be obtained.

(3)

.....

.....

.....

.....

.....

.....

.....

.....

DO NOT WRITE IN THIS AREA

DO NOT WRITE IN THIS AREA

DO NOT WRITE IN THIS AREA

DO NOT WRITE IN THIS AREA

DO NOT WRITE IN THIS AREA

DO NOT WRITE IN THIS AREA

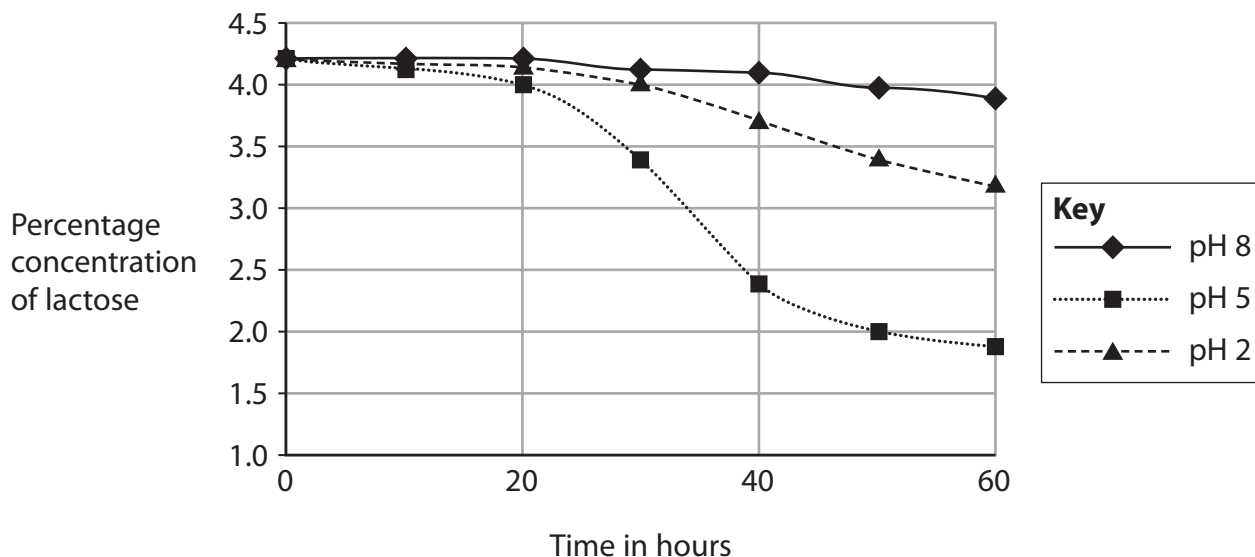


P 6 0 1 8 6 A 0 2 1 2 8



(d) The student uses the same enzyme to investigate the effect of pH on the conversion of the lactose into lactic acid.

The student's results are shown in the graph.



The student wants to determine the most effective conditions for the conversion of lactose into lactic acid in cheese manufacture.

DO NOT WRITE IN THIS AREA

DO NOT WRITE IN THIS AREA

DO NOT WRITE IN THIS AREA

DO NOT WRITE IN THIS AREA

DO NOT WRITE IN THIS AREA

DO NOT WRITE IN THIS AREA



8 The table shows the rate of blood flow through different organs when a person is at rest. The table also shows the masses of these organs.

Organ	Mass in kg	Rate of blood flow in cm ³ per minute	
		through the whole organ	per 100g of the organ
kidneys	0.3	1200	
skeletal muscles	25.0		3
liver	1.5	1500	100

(a) Calculate the missing values and put them in the table.

(4)

(b) Explain why the liver has a high rate of blood flow.

(4)

.....

.....

.....

.....

.....

.....

.....

.....

DO NOT WRITE IN THIS AREA

DO NOT WRITE IN THIS AREA

DO NOT WRITE IN THIS AREA

DO NOT WRITE IN THIS AREA

DO NOT WRITE IN THIS AREA

DO NOT WRITE IN THIS AREA



(c) Explain any changes that would occur in the blood flow through these organs during vigorous exercise.

(4)

Area with horizontal dotted lines for writing the answer to question (c).

(Total for Question 8 = 12 marks)

TOTAL FOR PAPER = 90 MARKS

DO NOT WRITE IN THIS AREA

DO NOT WRITE IN THIS AREA

DO NOT WRITE IN THIS AREA

DO NOT WRITE IN THIS AREA

DO NOT WRITE IN THIS AREA

DO NOT WRITE IN THIS AREA





DO NOT WRITE IN THIS AREA

DO NOT WRITE IN THIS AREA

DO NOT WRITE IN THIS AREA

DO NOT WRITE IN THIS AREA

DO NOT WRITE IN THIS AREA

DO NOT WRITE IN THIS AREA

BLANK PAGE



DO NOT WRITE IN THIS AREA

DO NOT WRITE IN THIS AREA

DO NOT WRITE IN THIS AREA

DO NOT WRITE IN THIS AREA

DO NOT WRITE IN THIS AREA

DO NOT WRITE IN THIS AREA

BLANK PAGE



P 6 0 1 8 6 A 0 2 7 2 8



DO NOT WRITE IN THIS AREA

DO NOT WRITE IN THIS AREA

DO NOT WRITE IN THIS AREA

BLANK PAGE

