



Cambridge International AS & A Level

CHEMISTRY

9701/11

Paper 1 Multiple Choice

May/June 2022

1 hour 15 minutes

You must answer on the multiple choice answer sheet.

You will need: Multiple choice answer sheet
Soft clean eraser
Soft pencil (type B or HB is recommended)

INSTRUCTIONS

- There are **forty** questions on this paper. Answer **all** questions.
- For each question there are four possible answers **A, B, C** and **D**. Choose the **one** you consider correct and record your choice in soft pencil on the multiple choice answer sheet.
- Follow the instructions on the multiple choice answer sheet.
- Write in soft pencil.
- Write your name, centre number and candidate number on the multiple choice answer sheet in the spaces provided unless this has been done for you.
- Do **not** use correction fluid.
- Do **not** write on any bar codes.
- You may use a calculator.

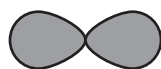
INFORMATION

- The total mark for this paper is 40.
- Each correct answer will score one mark.
- Any rough working should be done on this question paper.
- The Periodic Table is printed in the question paper.
- Important values, constants and standards are printed in the question paper.

This document has **16** pages.



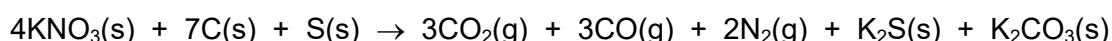
- 1 Which atom has its outermost electron in an orbital of the shape shown, with principal quantum number 3?



- A sodium
B chlorine
C calcium
D bromine
- 2 Which atom has the same number of electrons as the hydroxide ion, OH⁻?
- A F B Ne C Na D Mg
- 3 In separate experiments, 5.0 g samples of each of four s-block metals are added to an excess of water. The gas evolved is collected and its volume measured under the same conditions of temperature and pressure for each sample.
- Which metal produces the largest volume of gas?
- A calcium
B potassium
C rubidium
D strontium
- 4 A student reacts 1 mol of copper with concentrated nitric acid to produce 1 mol of copper(II) nitrate, 2 mol of water and substance X. No other product is formed.
- Substance X does not contain copper or hydrogen.
- What could be substance X?
- A N₂ B N₂O C NO D NO₂
- 5 In which structure are three atoms bonded together in a straight line?
- A poly(ethene), $-(\text{CH}_2\text{CH}_2)_n-$
B propane, C₃H₈
C silicon tetrachloride, SiCl₄
D sulfur hexafluoride, SF₆

- 6 Which statement about aluminium chloride is correct?
- A Aluminium chloride has a much higher melting point than magnesium chloride due to the small size of the aluminium ion.
- B Anhydrous aluminium chloride reacts vigorously with water to form a solution with a pH greater than 7.
- C Each Al_2Cl_6 molecule found in aluminium chloride vapour contains two coordinate bonds.
- D The bonding between aluminium and chlorine is strongly ionic due to the large difference in electronegativity.

- 7 'Black powder' is a mixture of potassium nitrate, carbon and sulfur. The mixture reacts as shown.



A sealed tube containing black powder has a volume of 10.0 cm^3 . When all of the black powder reacts, the reaction causes a pressure of $2 \times 10^6 \text{ Pa}$ and a temperature of 2500 K .

The volume of the K_2CO_3 and K_2S produced can be ignored.

How many moles of KNO_3 are contained in the sealed tube?

- A 4.81×10^{-4} B 9.63×10^{-4} C 1.93×10^{-3} D 9.63×10^{-1}
- 8 For which pair is the boiling point of the first compound **higher** than the boiling point of the second compound?
- A CH_3CH_2OH and CH_3CH_2SH
- B $CH_3CO_2CH_3$ and $CH_3CH_2CO_2H$
- C CH_3OCH_3 and CH_3CH_2OH
- D CH_3CH_2CHO and $CH_3CH_2CO_2H$

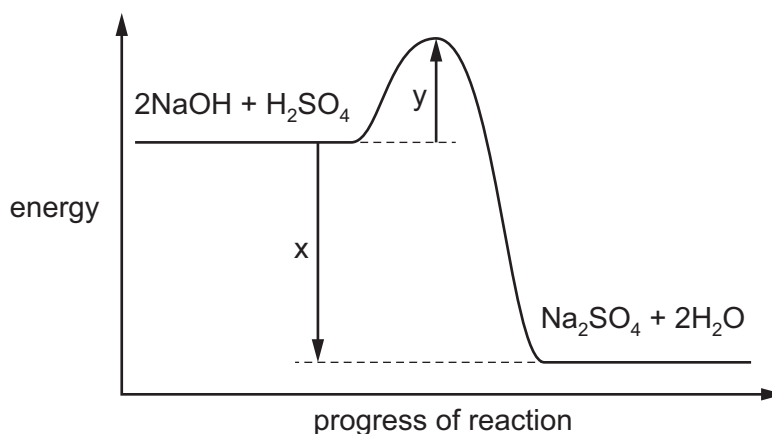
- 9 The equation for an enthalpy change is shown. The enthalpy change is Q.



What is the correct expression to calculate Q?

- A $2 \times \Delta H_c^\ominus [CO_2(g)] - 3 \times \Delta H_f^\ominus [H_2(g)]$
- B $3 \times \Delta H_f^\ominus [H_2O(g)] + 2 \times \Delta H_c^\ominus [CO_2(g)]$
- C $2 \times \Delta H_f^\ominus [CO_2(g)] - 3 \times \Delta H_f^\ominus [H_2(g)]$
- D $3 \times \Delta H_f^\ominus [H_2O(l)] + 2 \times \Delta H_f^\ominus [CO_2(g)]$

- 10 A reaction pathway diagram for the reaction of aqueous sodium hydroxide and dilute sulfuric acid is shown.



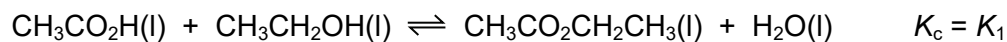
What is the value of the enthalpy change of neutralisation, ΔH_{neut} ?

- A** x **B** $x - y$ **C** $\frac{x}{2}$ **D** $\frac{(x - y)}{2}$
- 11 A student reacts 4 mol of ammonia with oxygen to produce an oxide of nitrogen and water only. Each nitrogen atom increases its oxidation state by 5 in the reaction.
- How many moles of oxygen gas react with 4 mol of ammonia in this reaction?
- A** 4 mol **B** 5 mol **C** 7 mol **D** 10 mol
- 12 In the treatment of domestic water supplies, chlorine is added to water to kill bacteria. Some ClO^- ions are formed.
- What is the change in oxidation number of chlorine when forming the ClO^- ion from aqueous chlorine?
- A** -1 **B** 0 **C** $+1$ **D** $+2$

13 Ethanoic acid is mixed with ethanol.

The ethanol is contaminated with a small amount of methanol.

The following equilibria are established.



Which statement about the equilibrium mixture is correct?

- A** Only ethyl ethanoate will be formed because there is much more ethanol present than methanol.
- B** In this mixture $\frac{[\text{CH}_3\text{CO}_2\text{CH}_2\text{CH}_3]}{[\text{CH}_3\text{CO}_2\text{CH}_3]} = \frac{K_1}{K_2}$.
- C** Adding water to the mixture will alter the mole ratio of the two esters.
- D** Adding methyl ethanoate to the mixture will increase the number of moles of ethyl ethanoate.

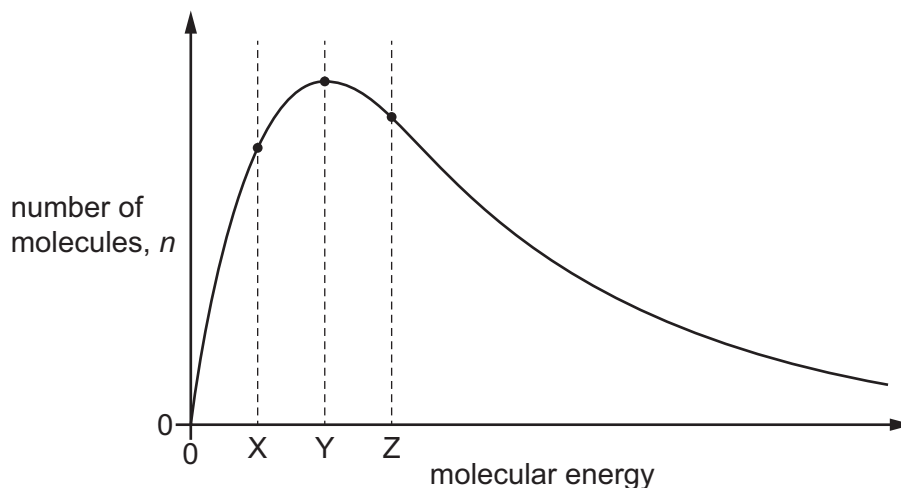
14 SO_3 is manufactured from SO_2 and O_2 in the Contact process.

The reaction is exothermic.

Which row shows the effect on the equilibrium yield obtained in the Contact process of increasing the temperature and of adding a vanadium(V) oxide catalyst?

	increasing the temperature	adding vanadium(V) oxide as catalyst
A	equilibrium yield decreases	equilibrium yield increases
B	equilibrium yield decreases	equilibrium yield unchanged
C	equilibrium yield increases	equilibrium yield unchanged
D	equilibrium yield increases	equilibrium yield increases

- 15 The Boltzmann distribution for a gas at a constant temperature of 50 °C is shown.

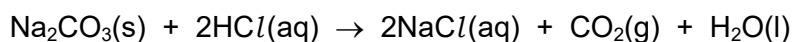


If the temperature of the gas is **reduced** by 10 °C, the graph changes shape.

What happens to the values of n for the molecular energies X, Y and Z?

	X	Y	Z
A	higher	lower	higher
B	higher	lower	lower
C	lower	higher	lower
D	lower	lower	lower

- 16 A 3.0 g sample of Na_2CO_3 powder is stirred into 50 cm³ of 1.0 mol dm⁻³ HCl. The volume of CO_2 produced is 600 cm³.



[M_r : Na_2CO_3 , 106.0]

Which volume of CO_2 is produced if 1.0 g of Na_2CO_3 powder is stirred into 50 cm³ of 1.0 mol dm⁻³ HCl under the same conditions?

- A 600 cm³ B 452 cm³ C 226 cm³ D 200 cm³
- 17 Solid sodium iodide reacts with concentrated sulfuric acid to form more than one product that contains sulfur.

What is the lowest oxidation number of sulfur in these products?

- A -2 B 0 C +4 D +6

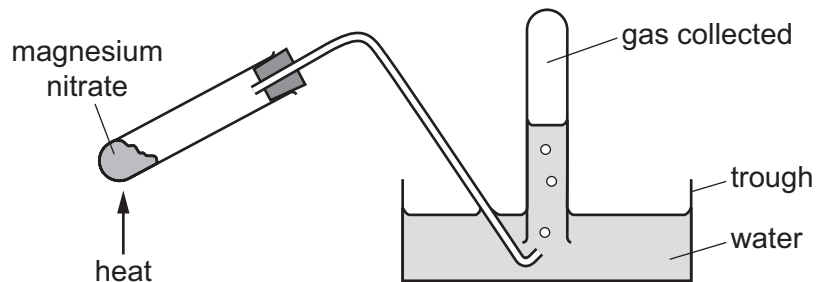
- 18 Which statement for the element in Period 3 and Group 13 of the Periodic Table is correct?
- A** It has the highest melting point of the elements in its period.
- B** It has exactly one electron in its shell with principal quantum number 3.
- C** It forms an oxide that reacts with aqueous sodium hydroxide.
- D** It forms a chloride that dissolves in water to give a neutral solution.
- 19 A student reacts 0.100 mol of each of sodium, magnesium and phosphorus atoms separately with an excess of oxygen.

Which rows are correct?

	oxide	mass of oxide formed / g
1	sodium	3.10
2	magnesium	4.03
3	phosphorus	7.10

- A** 1, 2 and 3 **B** 1 and 2 only **C** 1 and 3 only **D** 2 and 3 only
- 20 A mixture contains magnesium carbonate and barium carbonate only. A sample of the mixture is dissolved in nitric acid to produce a solution.
- How could this solution be processed into a magnesium compound and a separate barium compound?
- A** Add $\text{HCl}(\text{aq})$, filter off the solid barium chloride.
- B** Add $\text{HCl}(\text{aq})$, filter off the solid magnesium chloride.
- C** Add $\text{H}_2\text{SO}_4(\text{aq})$, filter off the solid barium sulfate.
- D** Add $\text{H}_2\text{SO}_4(\text{aq})$, filter off the solid magnesium sulfate.

21 A sample of magnesium nitrate is heated in the apparatus shown.



The pH of the solution in the trough is measured.

The gas collected is tested with a glowing splint.

What are the results?

	pH of solution in trough	splint test
A	8	relights
B	2	relights
C	8	extinguished
D	2	extinguished

22 The results of tests performed on a white crystalline solid, X, are given in the table.

reagent and conditions	observation
X is gently heated	X sublimes
X is shaken with H ₂ O	a colourless solution, Y, forms
Y is warmed with NaOH(aq)	a gas is given off
AgNO ₃ (aq) is added to Y	a white precipitate, Z, forms
Z is shaken with NH ₃ (aq)	a colourless solution forms

What is the identity of X?

- A** aluminium bromide
- B** aluminium chloride
- C** ammonium bromide
- D** ammonium chloride

23 Silicon is heated in an excess of chlorine, producing compound J.

An excess of water is added to the sample of J produced.

Which row is correct?

	structure of J	Is HCl produced when water is added to J?
A	giant molecular	no
B	giant molecular	yes
C	simple molecular	no
D	simple molecular	yes

24 In a catalytic converter, 5.6 g of carbon monoxide react with an excess of nitrogen monoxide.

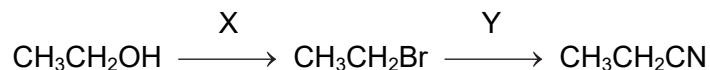
What is produced in this reaction?

- A** 2.4 g of C and 6.0 g of NO_2
- B** 2.4 g of C and 9.2 g of NO_2
- C** 8.8 g of CO_2 and 1.4 g of N_2
- D** 8.8 g of CO_2 and 2.8 g of N_2

25 Which reaction mixture produces an acidic gas?

- A** aqueous ammonium nitrate and solid calcium oxide
- B** calcium and aqueous hydrochloric acid
- C** potassium chloride and concentrated sulfuric acid
- D** sodium oxide and water

26 Ethanol can be used to make propanenitrile in two steps.



What types of reaction are X and Y?

	X	Y
A	free-radical substitution	electrophilic substitution
B	free-radical substitution	nucleophilic substitution
C	nucleophilic substitution	nucleophilic substitution
D	nucleophilic substitution	electrophilic substitution

27 Which compound will react with LiAlH_4 to form two optical isomers?

- A** $\text{CH}_3\text{CH}_2\text{COCH}_3$
- B** $\text{CH}_3\text{CH}_2\text{CH}_2\text{CHO}$
- C** $\text{CH}_3\text{CH}_2\text{COCH}_2\text{CH}_3$
- D** $\text{CH}_3\text{CH}(\text{CH}_3)\text{CH}_2\text{CO}_2\text{H}$

28 How many esters have the molecular formula $\text{C}_4\text{H}_8\text{O}_2$?

- A** 2 **B** 3 **C** 4 **D** 5

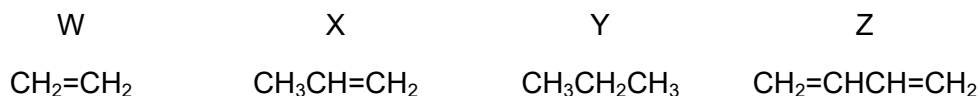
29 Carbon monoxide, CO , nitrogen dioxide, NO_2 , and sulfur dioxide, SO_2 , are all atmospheric pollutants.

Which reaction occurs in the atmosphere?

- A** CO is spontaneously oxidised to CO_2 .
- B** NO_2 is reduced to NO by SO_2 .
- C** NO_2 is reduced to NO by CO .
- D** SO_2 is oxidised to SO_3 by CO_2 .

30 Oct-1-ene, $\text{CH}_3(\text{CH}_2)_5\text{CH}=\text{CH}_2$, can be thermally cracked.

Which of the compounds W, X, Y and Z can be obtained by thermally cracking oct-1-ene?



- A W, X, Y and Z
 B W, X and Y only
 C W, X and Z only
 D W and X only

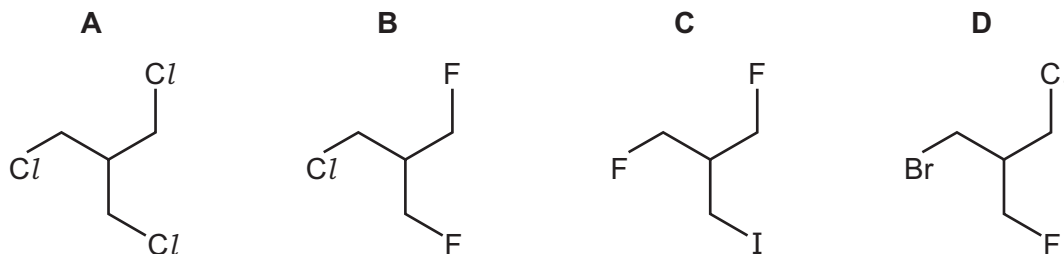
31 Structural isomerism and stereoisomerism should be taken into account when answering this question.

How many isomeric alkenes with formula C_5H_8 are present in the mixture produced when 1,4-dibromopentane is reacted with NaOH in ethanol?

- A 1 B 2 C 3 D 4

32 The presence of a halogen in an organic compound may be detected by warming the organic compound with aqueous silver nitrate.

Which compound would be the quickest to produce a precipitate?



33 17.6 g of pentan-1-ol is completely combusted.

Which volume of gaseous products is formed when measured at s.t.p.?

- A 22.4 dm^3 B 24.0 dm^3 C 49.3 dm^3 D 52.8 dm^3

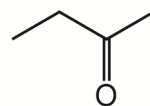
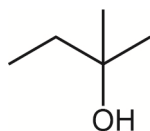
34 Crotyl alcohol, $\text{CH}_3\text{CH}=\text{CHCH}_2\text{OH}$, is a colourless liquid which is used as a solvent.

Crotyl alcohol will react separately with Br_2 , $\text{K}_2\text{Cr}_2\text{O}_7/\text{H}^+$, conc. KMnO_4/H^+ and PCl_5 under suitable conditions.

Which row is correct?

	reactant	conditions	main product
A	Br_2	room temperature	$\text{CH}_3\text{CH}=\text{CHCH}_2\text{Br}$
B	$\text{K}_2\text{Cr}_2\text{O}_7/\text{H}^+$	heat under reflux	$\text{CH}_3\text{CH}=\text{CHCHO}$
C	conc. KMnO_4/H^+	heat under reflux	$\text{CH}_3\text{CH}=\text{CHCO}_2\text{H}$
D	PCl_5	room temperature	$\text{CH}_3\text{CH}=\text{CHCH}_2\text{Cl}$

35 The skeletal formulae of two organic compounds are shown.



Which reagents can be used to distinguish these two compounds?

- 1 alkaline $\text{I}_2(\text{aq})$
- 2 acidified $\text{K}_2\text{Cr}_2\text{O}_7$
- 3 2,4-dinitrophenylhydrazine (2,4-DNPH reagent)

A 1, 2 and 3 **B** 1 and 3 only **C** 2 and 3 only **D** 2 only

36 A carbonyl compound, X, reacts with HCN in the presence of NaCN to make a compound with M_r 85. Compound X does **not** react with Fehling's reagent.

What is compound X?

- A** butanal
- B** butanone
- C** propanal
- D** propanone

37 Which compound produces butan-2-ol and ethanoic acid on hydrolysis?

- A $\text{CH}_3\text{CO}_2\text{CH}(\text{CH}_3)_2$
 B $\text{CH}_3\text{CO}_2\text{CH}(\text{CH}_3)\text{CH}_2\text{CH}_3$
 C $\text{CH}_3\text{CH}(\text{CH}_3)\text{CO}_2\text{CH}_2\text{CH}_3$
 D $\text{CH}_3\text{CH}_2\text{CO}_2\text{CH}(\text{CH}_3)\text{CH}_2\text{CH}_3$

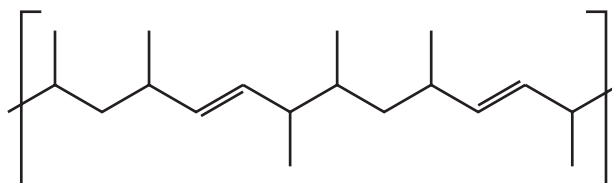
38 Two 1g samples of Y are reacted separately and completely with sodium and with sodium carbonate. The volumes of the gases produced are collected and measured.

	relative volumes of gases	
	with Na	with Na_2CO_3
Y	2	1

What could Y be?

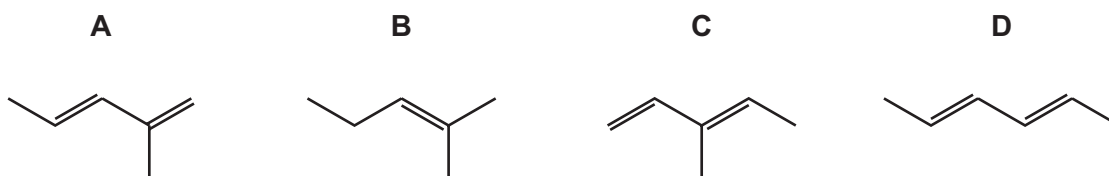
- A $\text{CH}_3\text{CH}(\text{OH})\text{CH}_2\text{OH}$
 B $\text{CH}_3\text{CH}(\text{OH})\text{CO}_2\text{H}$
 C $\text{CH}_3\text{COCH}_2\text{OH}$
 D $\text{CH}_3\text{COCO}_2\text{H}$

39 The diagram shows a section of an addition polymer formed from two different monomers.



One of the monomers is propene.

What is the other monomer?



- 40 A scientist chooses either infrared spectroscopy or mass spectrometry to find a particular piece of information.

In which row has the **best** choice been made?

	target information	analytic method used
A	identities of functional groups in an organic compound	infrared spectroscopy
B	identities of functional groups in an organic compound	mass spectrometry
C	values of successive ionisation energies of Na	infrared spectroscopy
D	values of successive ionisation energies of Na	mass spectrometry

Important values, constants and standards

molar gas constant	$R = 8.31 \text{ J K}^{-1} \text{ mol}^{-1}$
Faraday constant	$F = 9.65 \times 10^4 \text{ C mol}^{-1}$
Avogadro constant	$L = 6.02 \times 10^{23} \text{ mol}^{-1}$
electronic charge	$e = -1.60 \times 10^{-19} \text{ C}$
molar volume of gas	$V_m = 22.4 \text{ dm}^3 \text{ mol}^{-1}$ at s.t.p. (101 kPa and 273 K) $V_m = 24.0 \text{ dm}^3 \text{ mol}^{-1}$ at room conditions
ionic product of water	$K_w = 1.00 \times 10^{-14} \text{ mol}^2 \text{ dm}^{-6}$ (at 298 K (25 °C))
specific heat capacity of water	$c = 4.18 \text{ kJ kg}^{-1} \text{ K}^{-1}$ ($4.18 \text{ J g}^{-1} \text{ K}^{-1}$)

Permission to reproduce items where third-party owned material protected by copyright is included has been sought and cleared where possible. Every reasonable effort has been made by the publisher (UCLES) to trace copyright holders, but if any items requiring clearance have unwittingly been included, the publisher will be pleased to make amends at the earliest possible opportunity.

To avoid the issue of disclosure of answer-related information to candidates, all copyright acknowledgements are reproduced online in the Cambridge Assessment International Education Copyright Acknowledgements Booklet. This is produced for each series of examinations and is freely available to download at www.cambridgeinternational.org after the live examination series.

Cambridge Assessment International Education is part of Cambridge Assessment. Cambridge Assessment is the brand name of the University of Cambridge Local Examinations Syndicate (UCLES), which is a department of the University of Cambridge.

The Periodic Table of Elements

		Group																																																																															
1	2	3	4	5	6	7	8	9	10	11	12	13	14	15	16	17	18																																																																
		<table border="1" style="margin: auto;"> <tr> <td style="text-align: center;">1</td> <td style="text-align: center;">H hydrogen 1.0</td> </tr> </table>																1	H hydrogen 1.0																																																														
1	H hydrogen 1.0																																																																																
		<table border="1" style="margin: auto;"> <tr> <td style="text-align: center;">Key</td> <td style="text-align: center;">atomic number</td> <td style="text-align: center;">atomic symbol</td> <td style="text-align: center;">name</td> <td style="text-align: center;">relative atomic mass</td> </tr> </table>																Key	atomic number	atomic symbol	name	relative atomic mass																																																											
Key	atomic number	atomic symbol	name	relative atomic mass																																																																													
3	4	11	12	13	14	15	16	17	18	19	20	21	22	23	24	25	26	27	28	29	30	31	32	33	34	35	36	37	38	39	40	41	42	43	44	45	46	47	48	49	50	51	52	53	54	55	56	57-71	72	73	74	75	76	77	78	79	80	81	82	83	84	85	86	87	88	89-103	104	105	106	107	108	109	110	111	112	113	114	115	116	117	118
Li lithium 6.9	Be beryllium 9.0	Na sodium 23.0	Mg magnesium 24.3	K potassium 39.1	Ca calcium 40.1	Sc scandium 45.0	Ti titanium 47.9	V vanadium 50.9	Cr chromium 52.0	Mn manganese 54.9	Fe iron 55.8	Ru ruthenium 101.1	Rh rhodium 102.9	Pd palladium 106.4	Ag silver 107.9	Cd cadmium 112.4	In indium 114.8	Sn tin 118.7	Sb antimony 121.8	Te tellurium 127.6	I iodine 126.9	Xe xenon 131.3	Cs caesium 132.9	Ba barium 137.3	La lanthanum 138.9	Hf hafnium 178.5	Ta tantalum 180.9	W tungsten 183.8	Re rhenium 186.2	Os osmium 190.2	Ir iridium 192.2	Pt platinum 195.1	Au gold 197.0	Hg mercury 200.6	Tl thallium 204.4	Pb lead 207.2	Bi bismuth 209.0	Po polonium —	At astatine —	Rn radon —	Fr francium —	Ra radium —	Ac actinoids —	Rf rutherfordium —	Db dubnium —	Sg seaborgium —	Bh bohrium —	Hs hassium —	Mt meitnerium —	Ds darmstadtium —	Rg roentgenium —	Cn copernicium —	Nh nihonium —	Fh fermium —	Mc moscovium —	Lv livermorium —	Ts tennessine —	Og oganeson —																							

lanthanoids

actinoids

57	58	59	60	61	62	63	64	65	66	67	68	69	70	71
La lanthanum 138.9	Ce cerium 140.1	Pr praseodymium 140.9	Nd neodymium 144.4	Pm promethium —	Sm samarium 150.4	Eu europium 152.0	Gd gadolinium 157.3	Tb terbium 158.9	Dy dysprosium 162.5	Ho holmium 164.9	Er erbium 167.3	Tm thulium 168.9	Yb ytterbium 173.1	Lu lutetium 175.0
89	90	91	92	93	94	95	96	97	98	99	100	101	102	103
Ac actinium —	Th thorium 232.0	Pa protactinium 231.0	U uranium 238.0	Np neptunium —	Pu plutonium —	Am americium —	Cm curium —	Bk berkelium —	Cf californium —	Es einsteinium —	Fm fermium —	Md mendelevium —	No nobelium —	Lr lawrencium —