



UNIVERSITY OF CAMBRIDGE INTERNATIONAL EXAMINATIONS
General Certificate of Education
Advanced Subsidiary Level and Advanced Level

CANDIDATE
NAME

--

CENTRE
NUMBER

--	--	--	--	--

CANDIDATE
NUMBER

--	--	--	--



CHEMISTRY

9701/22

Paper 2 Structured Questions AS Core

May/June 2013

1 hour 15 minutes

Candidates answer on the Question Paper.

Additional Materials: Data Booklet

READ THESE INSTRUCTIONS FIRST

Write your Centre number, candidate number and name on all the work you hand in.

Write in dark blue or black pen.

You may use a soft pencil for any diagrams, graphs or rough working.

Do not use staples, paper clips, highlighters, glue or correction fluid.

DO NOT WRITE IN ANY BARCODES.

Answer **all** questions.

Electronic calculators may be used.

You may lose marks if you do not show your working or if you do not use appropriate units.

A Data Booklet is provided.

At the end of the examination, fasten all your work securely together.

The number of marks is given in brackets [] at the end of each question or part question.

For Examiner's Use	
1	
2	
3	
4	
5	
Total	

This document consists of **11** printed pages and **1** blank page.



Answer **all** the questions in the spaces provided.

For
Examiner's
Use

- 1 Ammonium sulfate is a fertiliser which is manufactured by the reaction between ammonia and sulfuric acid.

- (a) Ammonia is described as a weak base and sulfuric acid as a strong acid.

By using an equation, explain clearly what is meant by the term *weak base*.

.....

.....

.....

.....

..... [3]

- (b) Ammonia and sulfuric acid are both manufactured by processes which involve chemical equilibria.

- (i) Sulfuric acid is produced from sulfur trioxide which is made by the Contact process.

State **three** important operating conditions for the Contact process for the manufacture of sulfur trioxide.

For **each** of your conditions, you should avoid the use of vague phrases such as 'high temperature'.

condition 1

.....

condition 2

.....

condition 3

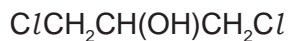
.....

- (ii) How is the sulfur trioxide produced converted into sulfuric acid?

.....

..... [4]

- (c) Chloropropanols such as 1,3-dichloropropan-2-ol (1,3-DCP) are present in some foods.



1,3-DCP

- (i) What will be produced when 1,3-DCP is reacted separately with the following reagents under suitable conditions?
In each case give the **structural** formula.

concentrated sulfuric acid

an excess of ammonia

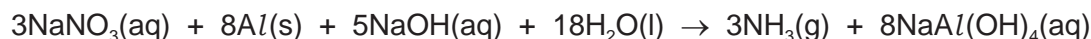
- (ii) Describe as fully as you can what type of reaction occurs with ammonia.

.....
[4]

[Total: 11]

- 2 Chile saltpetre is a mineral found in Chile and Peru, and which mainly consists of sodium nitrate, NaNO_3 . The mineral is purified to concentrate the NaNO_3 which is used as a fertiliser and in some fireworks.

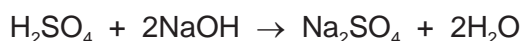
In order to find the purity of a sample of sodium nitrate, the compound is heated in NaOH(aq) with Devarda's alloy which contains aluminium. This reduces the sodium nitrate to ammonia which is boiled off and then dissolved in acid.



The ammonia gas produced is dissolved in an excess of H_2SO_4 of known concentration.



The amount of unreacted H_2SO_4 is then determined by back-titration with NaOH of known concentration.



- (a) A 1.64 g sample of impure NaNO_3 was reacted with an excess of Devarda's alloy. The NH_3 produced was dissolved in 25.0 cm^3 of $1.00 \text{ mol dm}^{-3} \text{ H}_2\text{SO}_4$. When all of the NH_3 had dissolved, the resulting solution was titrated with NaOH(aq) . For neutralisation, 16.2 cm^3 of $2.00 \text{ mol dm}^{-3} \text{ NaOH}$ were required.
- (i) Calculate the amount, in moles, of H_2SO_4 present in the 25.0 cm^3 of $1.00 \text{ mol dm}^{-3} \text{ H}_2\text{SO}_4$.
- (ii) Calculate the amount, in moles, of NaOH present in 16.2 cm^3 of $2.00 \text{ mol dm}^{-3} \text{ NaOH}$.
- (iii) Use your answer to (ii) to calculate the amount, in moles, of H_2SO_4 that reacted with 16.2 cm^3 of $2.00 \text{ mol dm}^{-3} \text{ NaOH}$.
- (iv) Use your answers to (i) and (iii) to calculate the amount, in moles, of H_2SO_4 that reacted with the NH_3 .

(v) Use your answer to (iv) to calculate the amount, in moles, of NH_3 that reacted with the H_2SO_4 .

(vi) Use your answer to (v) to calculate the amount, in moles, of NaNO_3 that reacted with the Devarda's alloy.

(vii) Hence calculate the mass of NaNO_3 that reacted.

(viii) Use your answer to (vii) to calculate the percentage by mass of NaNO_3 present in the impure sample.
Write your answer to a suitable number of significant figures.

[9]

(b) The above reaction is an example of a redox reaction.
What are the oxidation numbers of nitrogen in NaNO_3 and in NH_3 ?

 NaNO_3 NH_3

[1]

[Total: 10]

- 3 This question refers to the elements in the section of the Periodic Table shown below.

For
Examiner's
Use

		H						He	
Li	Be			B	C	N	O	F	Ne
Na	Mg			Al	Si	P	S	Cl	Ar
K	Ca transition elements		Ga	Ge	As	Se	Br	Kr

- (a) From this list of elements, identify in **each** case **one** element that has the property described. Give the **symbol** of the element.

- (i) An element that when placed in cold water sinks and reacts readily.

.....

- (ii) An element whose molecules contain π bonding.

.....

- (iii) An element that forms a gaseous toxic oxide.

.....

- (iv) The element which has a giant molecular structure **and** forms an oxide which also has a giant molecular structure.

.....

- (v) An element that forms a covalent chloride which dissolves in water to give a conducting solution.

.....

- (vi) The element in Period 3 (Na to Ar) with the greatest electrical conductivity.

.....

[6]

- (b) Some of the elements in Period 3 (Na to Ar) burn with a coloured flame when heated in oxygen or chlorine.

- (i) Give the symbol of **one** such element, the formula of the **oxide** formed, and state the flame colour that would be seen.

symbol of element

formula of oxide

flame colour

- (ii) For the element you have used in (i), give the formula of the chloride formed, and state the pH of the solution produced when this chloride is shaken with water.

formula of chloride

pH of solution

[4]

- (c) Chlorine reacts with both bromine and iodine to form BrCl and ICl respectively. The melting points of chlorine and the two chlorides are shown in the table.

substance	Cl_2	BrCl	ICl
m.p./°C	-101	-66	24

- (i) Showing outer electrons only draw a 'dot-and-cross' diagram of the bonding in ICl .

- (ii) Suggest why the melting points increase from Cl_2 to ICl .

.....

- (iii) Suggest which of these three molecules has the largest permanent dipole. Explain your answer.

.....

[5]

[Total: 15]

4 Crotyl alcohol, $\text{CH}_3\text{CH}=\text{CHCH}_2\text{OH}$, is a colourless liquid which is used as a solvent.

- (a) In the boxes below, write the **structural formula** of the organic compound formed when crotyl alcohol is reacted separately with each reagent under suitable conditions. If you think no reaction occurs, write 'NO REACTION' in the box.

A	Br_2 in an inert organic solvent	
B	PCl_5	
C	H_2 and Ni catalyst	
D	NaBH_4	
E	$\text{K}_2\text{Cr}_2\text{O}_7/\text{H}^+$ heat under reflux	

[5]

- (b) Draw the **displayed formula** of the organic compound formed when crotyl alcohol is reacted with cold, dilute acidified potassium manganate(VII).

[1]

- (c) Draw the **skeletal formula** of the compound formed in reaction E.

[2]

(d) Crotyl alcohol is obtained from crotonaldehyde, $\text{CH}_3\text{CH}=\text{CHCHO}$.

- (i) Describe one test that would confirm the presence of a small amount of unreacted crotonaldehyde in the crotyl alcohol.

Give the name of the reagent used and state what you would see.

reagent

observation

- (ii) What *type of reaction* is the conversion of crotonaldehyde into crotyl alcohol?

.....
[3]

- (e) Compound **P**, another unsaturated compound, is found in some blue cheeses.
The percentage composition by mass of compound **P** is C: 73.7%; H: 12.3%; O: 14.0%.

Calculate the empirical formula of compound **P**.

[2]

[Total: 13]

- 5 A student reacted together an alcohol and a carboxylic acid under appropriate conditions to produce an ester.
A sweet smelling organic liquid, **Q**, with the empirical formula C_2H_4O was produced.
The M_r of **Q** was found by experiment to be 87.5.

(a) What is the molecular formula of **Q**?

..... [1]

(b) In the boxes below, draw the structural formulae of **four** isomers with this formula that are esters.

W	X
Y	Z

[4]

A sample of **Q** was hydrolysed by heating with aqueous sulfuric acid.
The resulting mixture was heated under reflux with acidified potassium dichromate(VI) to give a **single** organic product, **R**.
The product, **R**, was collected and subjected to the following tests.

A sample of **R** gave no reaction with Tollens' reagent.

A second sample of **R** gave no reaction with 2,4-dinitrophenylhydrazine reagent.

A third sample of **R** gave an effervescence with sodium carbonate.

(c) (i) What does the result of the test with Tollens' reagent show about **R**?

.....

(ii) What does the result of the test with 2,4-dinitrophenylhydrazine reagent show about **R**?

.....

(iii) What functional group does the result of the test with sodium carbonate show to be present in **R**?

.....

[3]

(d) (i) What is the identity of the single organic compound, **R**?

.....

(ii) Which of your structures, **W**, **X**, **Y** or **Z**, represents the ester, **Q**?

.....

[2]

(e) Which, if any, of your esters, **W**, **X**, **Y** or **Z**, is chiral?

.....

..... [1]

[Total: 11]

BLANK PAGE

Permission to reproduce items where third-party owned material protected by copyright is included has been sought and cleared where possible. Every reasonable effort has been made by the publisher (UCLES) to trace copyright holders, but if any items requiring clearance have unwittingly been included the publisher will be pleased to make amends at the earliest possible opportunity.

University of Cambridge International Examinations is part of the Cambridge Assessment Group. Cambridge Assessment is the brand name of University of Cambridge Local Examinations Syndicate (UCLES), which is itself a department of the University of Cambridge.