



# Cambridge International AS & A Level

## CHEMISTRY

9701/12

Paper 1 Multiple Choice

February/March 2025

1 hour 15 minutes

You must answer on the multiple choice answer sheet.

You will need: Multiple choice answer sheet  
Soft clean eraser  
Soft pencil (type B or HB is recommended)

### INSTRUCTIONS

- There are **forty** questions on this paper. Answer **all** questions.
- For each question there are four possible answers **A, B, C** and **D**. Choose the **one** you consider correct and record your choice in soft pencil on the multiple choice answer sheet.
- Follow the instructions on the multiple choice answer sheet.
- Write in soft pencil.
- Write your name, centre number and candidate number on the multiple choice answer sheet in the spaces provided unless this has been done for you.
- Do **not** use correction fluid.
- Do **not** write on any bar codes.
- You may use a calculator.

### INFORMATION

- The total mark for this paper is 40.
- Each correct answer will score one mark.
- Any rough working should be done on this question paper.
- The Periodic Table is printed in the question paper.
- Important values, constants and standards are printed in the question paper.

This document has **20** pages. Any blank pages are indicated.

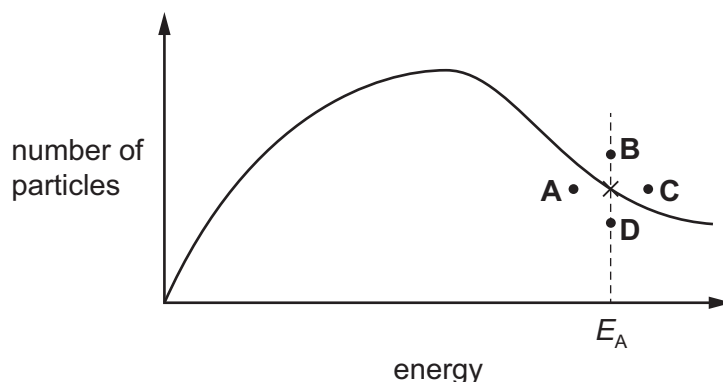


- 1 A Boltzmann distribution for a sample of a reacting gas at a constant temperature is shown. The activation energy,  $E_A$ , for the reaction is marked.

Point  $\times$  shows the number of particles whose energy is equal to the activation energy.

The temperature of the sample of gas is decreased. The shape of the distribution curve changes.

Which point could show the number of particles whose energy is the same as the activation energy at the new temperature?



- 2 Crystals of copper(II) nitrate are prepared by adding an excess of malachite to nitric acid.

The formula of malachite is  $\text{Cu}(\text{OH})_2 \cdot \text{CuCO}_3$ . ( $M_r = 221.0$ )

12.0 g of malachite is added to 30.0 cm<sup>3</sup> of 1.50 mol dm<sup>-3</sup> nitric acid.

Which mass of malachite is left unreacted when the reaction is complete?

- A** 2.05 g      **B** 2.49 g      **C** 7.03 g      **D** 9.51 g

- 3 X and Y are elements from the same group of the Periodic Table.

The 5th to 9th ionisation energies for X and Y are shown.

	ionisation energy / kJ mol <sup>-1</sup>				
	5th	6th	7th	8th	9th
element X	11 020	15 160	17 870	92 040	106 437
element Y	6 540	9 360	11 020	33 360	38 600

Which row identifies elements X and Y?

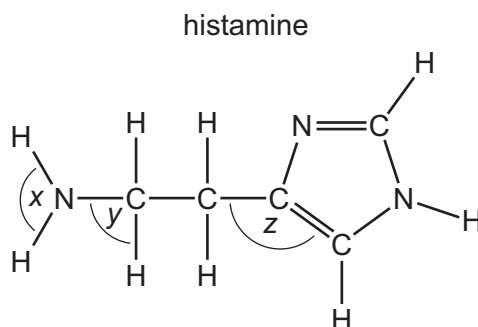
	element X	element Y
<b>A</b>	argon	neon
<b>B</b>	chlorine	fluorine
<b>C</b>	fluorine	chlorine
<b>D</b>	neon	argon

- 4 An ion with a charge of 2<sup>-</sup> contains 10 electrons and 14 neutrons.

What is its nucleon number?

- A** 14                      **B** 22                      **C** 24                      **D** 26

- 5 The structure of the hormone histamine is shown.



Which row contains the bond angles  $x$ ,  $y$  and  $z$  in histamine in the correct order from the smallest to the largest?

	smallest bond angle	→	largest bond angle
<b>A</b>	$x$	$y$	$z$
<b>B</b>	$y$	$x$	$z$
<b>C</b>	$y$	$z$	$x$
<b>D</b>	$z$	$y$	$x$

- 6 When an organic acid reacts with an alcohol, a reversible reaction takes place producing an ester and water.

0.40 mol of an organic acid and 0.30 mol of an alcohol are mixed and allowed to stand at 25 °C until equilibrium is reached.

At equilibrium, 0.20 mol of ester is produced.

What is the value of the equilibrium constant,  $K_c$ , under the conditions used?

- A** 0.33                      **B** 0.50                      **C** 2.0                      **D** 10

- 7 Information about two substances is given.

substance	electrical conductivity	effect of adding to water	melting point / K
P	good when solid and when molten	reacts vigorously to produce an alkaline solution	454
Q	does not conduct in any state	reacts vigorously to produce an acidic solution	317

Which row describes the structure and bonding in substances P and Q?

	P	Q
<b>A</b>	giant metallic	simple molecular
<b>B</b>	simple molecular	giant metallic
<b>C</b>	giant ionic	simple molecular
<b>D</b>	giant metallic	giant ionic

- 8 An excess of zinc reacts with  $x \text{ cm}^3$  of  $2.00 \text{ mol dm}^{-3}$  hydrochloric acid.

The gas produced is dried and collected.

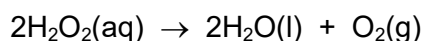
The gas occupies  $1.534 \text{ dm}^3$  at  $101\,000 \text{ Pa}$  and  $293 \text{ K}$ .

The gas produced behaves as an ideal gas.

What is the value of  $x$ ?

- A**  $31.8 \text{ cm}^3$       **B**  $34.7 \text{ cm}^3$       **C**  $63.6 \text{ cm}^3$       **D**  $69.4 \text{ cm}^3$

- 9 An aqueous solution of hydrogen peroxide is placed in a flask and decomposes, as shown.



The total volume of oxygen gas evolved is  $180 \text{ cm}^3$  after 90 seconds, measured under room conditions.

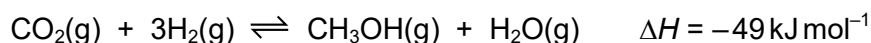
The rate of the reaction is calculated using the equation shown.

$$\text{rate} = \frac{\text{change in moles of } \text{H}_2\text{O}_2}{\text{time}}$$

What is the average rate of the reaction, measured in  $\text{mol min}^{-1}$ , over the duration of the experiment?

- A**  $8.33 \times 10^{-5}$       **B**  $1.67 \times 10^{-4}$       **C**  $0.0050$       **D**  $0.010$

- 10 Methanol is manufactured by reacting carbon dioxide and hydrogen together.



What increases the equilibrium yield of methanol in this process?

- A increasing the pressure
- B adding an excess of steam
- C adding a catalyst
- D increasing the temperature

- 11 The equation for a reaction of  $\text{KClO}_3$  is shown.



Which row is correct?

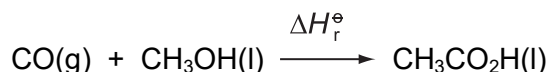
	disproportionation reaction	oxidation number of chlorine in $\text{KClO}_4$
A	yes	+4
B	yes	+7
C	no	+4
D	no	+7

- 12 A student mixes  $25.0 \text{ cm}^3$  of  $0.100 \text{ mol dm}^{-3}$  sodium hydroxide solution with  $25.0 \text{ cm}^3$  of  $0.100 \text{ mol dm}^{-3}$  hydrochloric acid and the student records a temperature rise of  $2.50^\circ\text{C}$ .

What is the enthalpy change of the reaction per mole of  $\text{NaOH}$ ?

- A  $-209 \text{ kJ mol}^{-1}$
- B  $-104.5 \text{ kJ mol}^{-1}$
- C  $-209 \text{ J mol}^{-1}$
- D  $-522.5 \text{ J mol}^{-1}$

- 13 Carbon monoxide and methanol can react together to form ethanoic acid.



Standard enthalpy changes of combustion are given in the table.

compound	standard enthalpy change of combustion, $\Delta H_c^\ominus$
CO	$-283.0 \text{ kJ mol}^{-1}$
CH <sub>3</sub> OH	$-726.0 \text{ kJ mol}^{-1}$
CH <sub>3</sub> CO <sub>2</sub> H	$-874.1 \text{ kJ mol}^{-1}$

What is the value for  $\Delta H_r^\ominus$  for the reaction between carbon monoxide and methanol?

- A  $-1883.1 \text{ kJ mol}^{-1}$   
 B  $-134.9 \text{ kJ mol}^{-1}$   
 C  $+134.9 \text{ kJ mol}^{-1}$   
 D  $+1883.1 \text{ kJ mol}^{-1}$
- 14 Copper reacts with nitric acid under certain conditions. The products are copper(II) nitrate, water and an oxide of nitrogen.

3 mol of copper reacts with exactly 8 mol of nitric acid.

What is the oxidation state of nitrogen in the oxide produced?

- A +1                      B +2                      C +3                      D +4
- 15 All the reactants and products of an exothermic reaction are gaseous.

Which statement about this reaction is correct?

- A The total bond energy of the products is less than the total bond energy of the reactants, and  $\Delta H$  for the reaction is negative.  
 B The total bond energy of the products is less than the total bond energy of the reactants, and  $\Delta H$  for the reaction is positive.  
 C The total bond energy of the products is more than the total bond energy of the reactants, and  $\Delta H$  for the reaction is negative.  
 D The total bond energy of the products is more than the total bond energy of the reactants, and  $\Delta H$  for the reaction is positive.

- 16 Propene, hydrogen cyanide and carbon dioxide each contain  $\pi$  bonds.

Which molecules contain two  $\pi$  bonds?

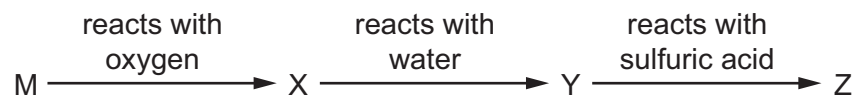
- A carbon dioxide and hydrogen cyanide
- B carbon dioxide and propene
- C hydrogen cyanide and propene
- D hydrogen cyanide only

- 17 Q, R and S are consecutive elements in Period 3 of the Periodic Table. Element R has the highest first ionisation energy and the lowest melting point of these three elements.

What are the identities of Q, R and S?

	Q	R	S
A	Na	Mg	Al
B	Mg	Al	Si
C	Al	Si	P
D	Si	P	S

- 18 A reaction scheme for a Group 2 metal, M, is shown.



Which row is correct as M descends Group 2 from Mg to Ba?

	solubility of Y in water	solubility of Z in water
A	decreases	decreases
B	decreases	increases
C	increases	decreases
D	increases	increases

- 19 U, V and W represent different halogens. The table shows the results of nine experiments in which aqueous solutions of  $U_2$ ,  $V_2$  and  $W_2$  were separately added to separate aqueous solutions containing  $U^-$ ,  $V^-$  and  $W^-$  ions.

	$U^-(aq)$	$V^-(aq)$	$W^-(aq)$
$U_2(aq)$	no reaction	no reaction	no reaction
$V_2(aq)$	$U_2$ formed	no reaction	$W_2$ formed
$W_2(aq)$	$U_2$ formed	no reaction	no reaction

Which row contains the ions  $U^-$ ,  $V^-$  and  $W^-$  in order of their **decreasing** strength as reducing agents?

	strongest	→	weakest
<b>A</b>	$U^-$		$W^-$
<b>B</b>	$U^-$		$V^-$
<b>C</b>	$V^-$		$U^-$
<b>D</b>	$W^-$		$V^-$

- 20 J is either  $MgCl_2$  or  $AlCl_3$ .

K is either  $SiO_2$  or  $SiCl_4$ .

$J(aq)$   $\xrightarrow[\text{sodium hydroxide}]{\text{add drops of aqueous}}$  white precipitate  $\xrightarrow[\text{sodium hydroxide}]{\text{add an excess of aqueous}}$  precipitate dissolves

K  $\xrightarrow{\text{add water}}$  misty white fumes and a white precipitate in a solution with pH less than 7

Which row is correct?

	identity of J	identity of K
<b>A</b>	$AlCl_3$	$SiCl_4$
<b>B</b>	$AlCl_3$	$SiO_2$
<b>C</b>	$MgCl_2$	$SiCl_4$
<b>D</b>	$MgCl_2$	$SiO_2$

- 21 River water in an agricultural area contains  $NH_4^+$ ,  $CO_3^{2-}$ ,  $HCO_3^-$ ,  $Cl^-$  and  $NO_3^-$  ions. This water is treated by adding a calculated quantity of calcium hydroxide.

What is precipitated from the river water when calcium hydroxide is added?

- A**  $CaCl_2$       **B**  $CaCO_3$       **C**  $Ca(NO_3)_2$       **D**  $NH_4OH$



22 Four atmospheric pollutants are listed.

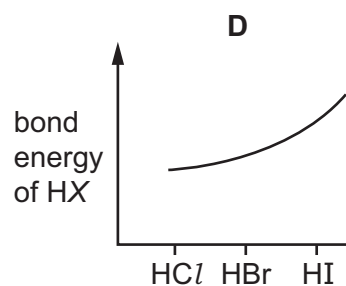
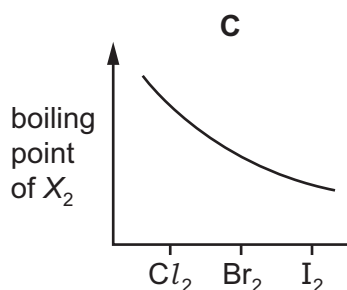
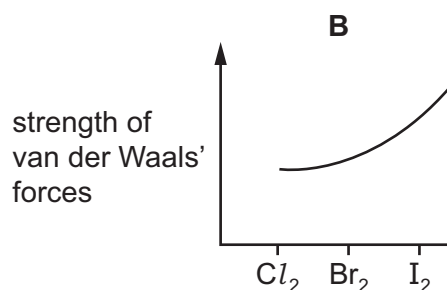
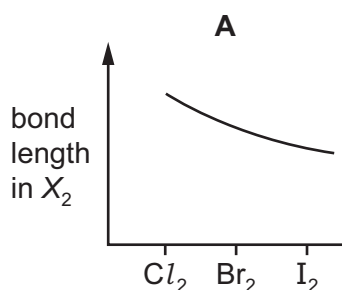
- 1 nitrogen oxides
- 2 carbon monoxide
- 3 unburnt hydrocarbons
- 4 sulfur dioxide

Which pair of pollutants react to form peroxyacetyl nitrate, PAN?

- A** 1 and 3      **B** 1 and 4      **C** 2 and 3      **D** 2 and 4

23 Which graph correctly describes a trend found in Group 17?

[X represents a halogen atom.]

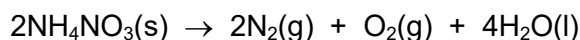
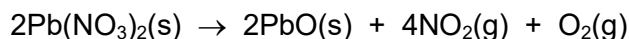


24 Gas M is produced when  $NH_4Cl(aq)$  is heated with  $CaO(s)$ .

Which row is correct?

	type of reaction	identity of M
<b>A</b>	acid–base	$N_2$
<b>B</b>	redox	$NH_3$
<b>C</b>	acid–base	$NH_3$
<b>D</b>	redox	$N_2$

25 Two nitrates decompose on heating according to the equations shown.



One mole of each nitrate is heated separately. The gas produced in each reaction is bubbled through NaOH(aq).

The volume of any gas that does not react with NaOH(aq) is then collected and measured.

Which nitrate:

- shows the greater percentage loss in mass
- produces the greater volume of gas collected?

	greater percentage loss of mass	greater volume of gas collected
<b>A</b>	$\text{NH}_4\text{NO}_3$	$\text{NH}_4\text{NO}_3$
<b>B</b>	$\text{NH}_4\text{NO}_3$	$\text{Pb}(\text{NO}_3)_2$
<b>C</b>	$\text{Pb}(\text{NO}_3)_2$	$\text{NH}_4\text{NO}_3$
<b>D</b>	$\text{Pb}(\text{NO}_3)_2$	$\text{Pb}(\text{NO}_3)_2$

26 Organic compound X has the empirical formula  $\text{C}_2\text{H}_4\text{O}$ .

Compound X is reduced by  $\text{LiAlH}_4$ , but **not** by  $\text{NaBH}_4$ .

What is compound X?

- A** ethanoic acid
- B** ethanal
- C** butan-1-ol
- D** butanoic acid

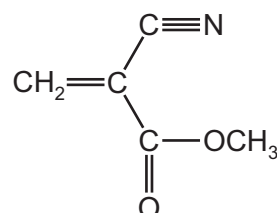
27 What is the mechanism of the reaction of hydrogen cyanide with propanone?

- A** electrophilic addition
- B** electrophilic substitution
- C** nucleophilic addition
- D** nucleophilic substitution

28 Which compound may be synthesised from an alkene, with formula  $C_4H_8$ , by an addition reaction?

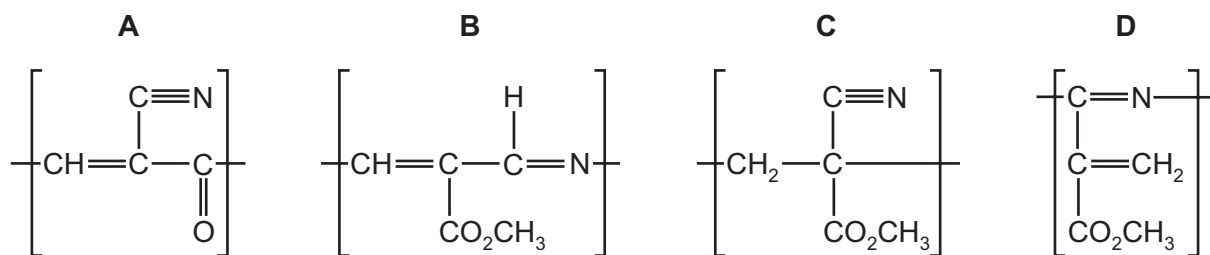
- A 1,1-dibromobutane
- B 1,2-dibromobutane
- C 1,3-dibromobutane
- D 1,3-dibromomethylpropane

29 The structure of compound G is shown.



Compound G undergoes addition polymerisation.

Which diagram shows the repeat unit of the polymer formed?



30 Compound T is tested with three reagents and gives the results shown.

reagent	result
2,4-DNPH	orange precipitate
Fehling's solution	no reaction
acidified $K_2Cr_2O_7$	no reaction

What is compound T?

- A  $(CH_3)_2CHCHO$
- B  $(CH_3)_2CHCH_2OH$
- C  $CH_3CH(OH)COCH_3$
- D  $(CH_3)_2CHCOCH_3$

- 31 Reagent X is added separately to 2-methylbutan-1-ol and 3-methylbutan-2-ol.

The visible results are different.

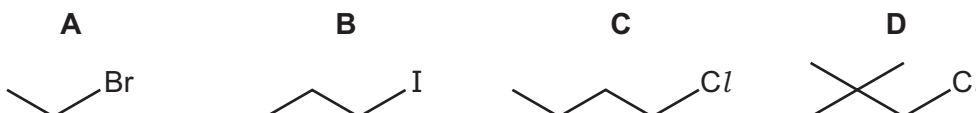
What is reagent X?

- A** Na(s)  
**B** alkaline  $I_2(aq)$   
**C**  $PCl_5$   
**D** acidified  $KMnO_4$

- 32 Compound Y is hydrolysed by warm aqueous silver nitrate to form a precipitate that is soluble in dilute aqueous ammonia.

Compound Y undergoes an elimination reaction to form an alkene.

What is the skeletal formula of compound Y?

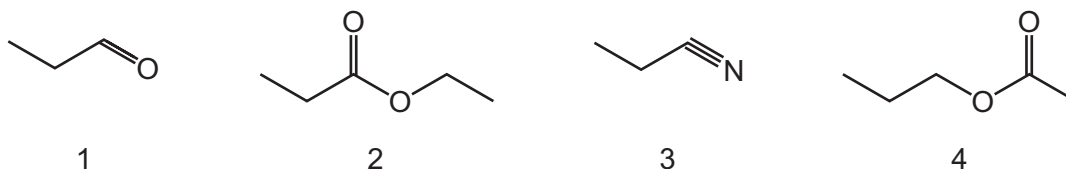


- 33 Propan-2-ol can be converted into 2-chloropropane using reagent M followed by reagent N.

Which row is correct?

	reagent M	reagent N
<b>A</b>	concentrated NaOH	$Cl_2$
<b>B</b>	concentrated $H_2SO_4$	$Cl_2$
<b>C</b>	concentrated $H_3PO_4$	HCl
<b>D</b>	concentrated NaOH	HCl

- 34 Skeletal formulae of four organic compounds are shown.



Which two compounds when separately heated with dilute sulfuric acid produce propanoic acid as one of the products?

- A** 1 and 2      **B** 1 and 4      **C** 2 and 3      **D** 3 and 4

- 35 1-chloro-2-methylpropane and 2-bromo-2-methylbutane react separately with aqueous silver nitrate in ethanol.

Both reactions proceed via nucleophilic substitution and a precipitate is formed.

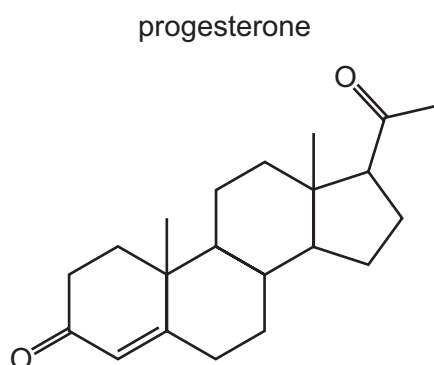
The time taken for 1-chloro-2-methylpropane to form a precipitate is  $T_1$ .

The time taken for 2-bromo-2-methylbutane to form a precipitate is  $T_2$ .

Which row is correct?

	compound	main reaction mechanism	time taken for precipitate to appear
<b>A</b>	1-chloro-2-methylpropane	$S_N1$	$T_2 > T_1$
<b>B</b>	1-chloro-2-methylpropane	$S_N2$	$T_1 > T_2$
<b>C</b>	2-bromo-2-methylbutane	$S_N1$	$T_2 > T_1$
<b>D</b>	2-bromo-2-methylbutane	$S_N2$	$T_1 > T_2$

- 36 The diagram shows the structure of progesterone.



Which statement about progesterone is correct?

- A** One molecule contains four chiral carbon atoms only; the molecular formula is  $C_{19}H_{26}O_2$ .
- B** One molecule contains four chiral carbon atoms only; the molecular formula is  $C_{21}H_{30}O_2$ .
- C** One molecule contains six chiral carbon atoms; the molecular formula is  $C_{19}H_{26}O_2$ .
- D** One molecule contains six chiral carbon atoms; the molecular formula is  $C_{21}H_{30}O_2$ .

37 A molecule of hexane can be cracked in a number of different ways.

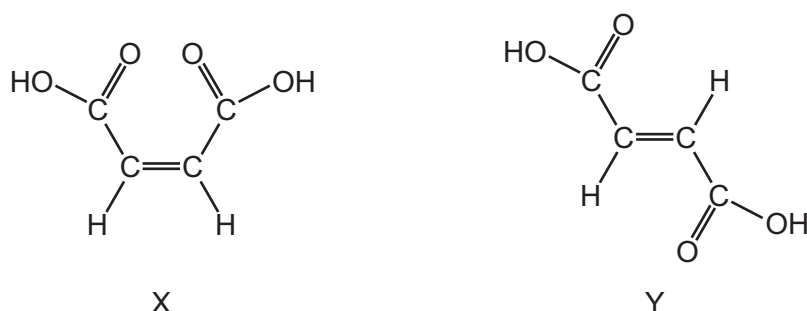
Three compounds are listed.

- 1  $\text{C}_3\text{H}_8$
- 2  $\text{C}_4\text{H}_8$
- 3  $\text{C}_5\text{H}_{12}$

Which compounds are found in the mixture of products from the cracking of hexane molecules?

- A** 1, 2 and 3      **B** 1 and 2 only      **C** 1 and 3 only      **D** 2 and 3 only

38 The diagrams show the structures of two isomeric dicarboxylic acids, X and Y.



X can be reduced to compound P with empirical formula  $\text{C}_2\text{H}_5\text{O}$ .

Y can be reduced to compound Q, also with empirical formula  $\text{C}_2\text{H}_5\text{O}$ .

Which statement is correct?

- A** X is a cis isomer; compound P and compound Q are identical.
- B** X is a cis isomer; compound P and compound Q are isomers of each other.
- C** X is a trans isomer; compound P and compound Q are identical.
- D** X is a trans isomer; compound P and compound Q are isomers of each other.

39 What is the total number of  $\text{sp}^3$  hybridised atomic orbitals used in the bonding of but-2-ene?

- A** 2                      **B** 4                      **C** 6                      **D** 8

- 40 Compound L contains carbon atoms. It is analysed in a mass spectrometer.

The table shows the relative abundance of the only two peaks recorded with  $m/e$  greater than 127.

$m/e$	relative abundance
128	50
129	5.5

How many carbon atoms are present in one molecule of compound L?

- A** 5                      **B** 7                      **C** 8                      **D** 10

**BLANK PAGE**



**BLANK PAGE**

**BLANK PAGE**

## Important values, constants and standards

molar gas constant	$R = 8.31 \text{ J K}^{-1} \text{ mol}^{-1}$
Faraday constant	$F = 9.65 \times 10^4 \text{ C mol}^{-1}$
Avogadro constant	$L = 6.022 \times 10^{23} \text{ mol}^{-1}$
electronic charge	$e = -1.60 \times 10^{-19} \text{ C}$
molar volume of gas	$V_m = 22.4 \text{ dm}^3 \text{ mol}^{-1}$ at s.t.p. (101 kPa and 273 K) $V_m = 24.0 \text{ dm}^3 \text{ mol}^{-1}$ at room conditions
ionic product of water	$K_w = 1.00 \times 10^{-14} \text{ mol}^2 \text{ dm}^{-6}$ (at 298 K (25 °C))
specific heat capacity of water	$c = 4.18 \text{ kJ kg}^{-1} \text{ K}^{-1}$ (4.18 J g <sup>-1</sup> K <sup>-1</sup> )

Permission to reproduce items where third-party owned material protected by copyright is included has been sought and cleared where possible. Every reasonable effort has been made by the publisher (UCLES) to trace copyright holders, but if any items requiring clearance have unwittingly been included, the publisher will be pleased to make amends at the earliest possible opportunity.

To avoid the issue of disclosure of answer-related information to candidates, all copyright acknowledgements are reproduced online in the Cambridge Assessment International Education Copyright Acknowledgements Booklet. This is produced for each series of examinations and is freely available to download at [www.cambridgeinternational.org](http://www.cambridgeinternational.org) after the live examination series.

Cambridge Assessment International Education is part of Cambridge Assessment. Cambridge Assessment is the brand name of the University of Cambridge Local Examinations Syndicate (UCLES), which is a department of the University of Cambridge.

The Periodic Table of Elements

Group																									
1	2	Key										13	14	15	16	17	18								
		atomic number atomic symbol name relative atomic mass										1 H hydrogen 1.0													
3	4																								
Li lithium 6.9	Be beryllium 9.0																								
11	12																								
Na sodium 23.0	Mg magnesium 24.3																								
19	20																								
K potassium 39.1	Ca calcium 40.1																								
37	38																								
Rb rubidium 85.5	Sr strontium 87.6																								
55	56																								
Cs caesium 132.9	Ba barium 137.3																								
87	88																								
Fr francium —	Ra radium —																								

lanthanoids

57	La	lanthanum	138.9	58	Ce	cerium	140.1	59	Pr	praseodymium	140.9	60	Nd	neodymium	144.2	61	Pm	promethium	—	62	Sm	samarium	150.4	63	Eu	euroium	152.0	64	Gd	gadolinium	157.3	65	Tb	terbium	158.9	66	Dy	dysprosium	162.5	67	Ho	holmium	164.9	68	Er	erbium	167.3	69	Tm	thulium	168.9	70	Yb	ytterbium	173.1	71	Lu	lutetium	175.0
89	Ac	actinium	—	90	Th	thorium	232.0	91	Pa	protactinium	231.0	92	U	uranium	238.0	93	Np	neptunium	—	94	Pu	plutonium	—	95	Am	americium	—	96	Cm	curium	—	97	Bk	berkelium	—	98	Cf	californium	—	99	Es	einsteinium	—	100	Fm	fermium	—	101	Md	mendelevium	—	102	No	nobelium	—	103	Lr	lawrencium	—

actinoids