



Cambridge International AS & A Level

CANDIDATE
NAME

CENTRE
NUMBER

| | | | | |
|--|--|--|--|--|
| | | | | |
|--|--|--|--|--|

CANDIDATE
NUMBER

| | | | |
|--|--|--|--|
| | | | |
|--|--|--|--|



INFORMATION TECHNOLOGY

9626/32

Paper 3 Advanced Theory

October/November 2022

1 hour 45 minutes

You must answer on the question paper.

No additional materials are needed.

INSTRUCTIONS

- Answer **all** questions.
- Use a black or dark blue pen.
- Write your name, centre number and candidate number in the boxes at the top of the page.
- Write your answer to each question in the space provided.
- Do **not** use an erasable pen or correction fluid.
- Do **not** write on any bar codes.
- You may use an HB pencil for any diagrams, graphs or rough working.
- Calculators must **not** be used in this paper.

INFORMATION

- The total mark for this paper is 70.
- The number of marks for each question or part question is shown in brackets [].

This document has **12** pages.

1 Data can be sent over computer networks and the internet using tunneling.

(a) Give **two** reasons why tunneling is used for sending data.

1

.....

.....

2

.....

.....

[2]

(b) Describe how tunneling transfers data over the internet.

.....

.....

.....

.....

.....

.....

.....

.....

.....

.....

.....

[3]

4 Mobile devices can use Near Field Communication (NFC) and Bluetooth to exchange data.

(a) Describe **three** uses of NFC in mobile devices.

1

.....

.....

2

.....

.....

3

.....

.....

[3]

(b) Discuss the differences between NFC and Bluetooth when used for exchanging data between mobile devices.

.....

.....

.....

.....

.....

.....

.....

.....

.....

.....

.....

.....

.....

[6]

- 8 Draw the correct symbol around each of the elements shown in the DFD in Fig. 8.1. One element, Teacher, has been done for you.

Draw the correct symbols on this DFD:

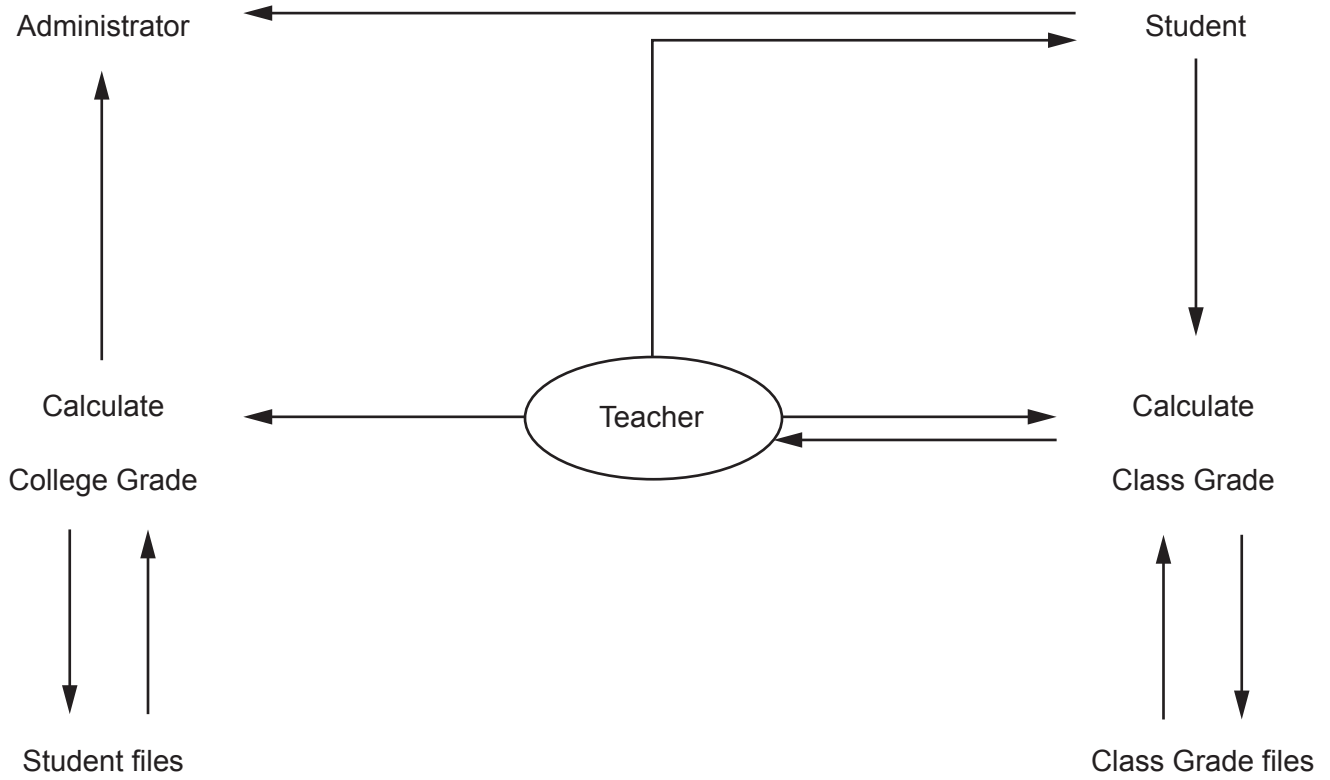


Fig. 8.1

[3]

- 9 A programmer is writing some JavaScript code to display this text on a web page:

This is "Cambridge International IT 9626 Paper 3"

The programmer uses strings in the code.

- (a) Describe the purpose of strings in JavaScript.

.....

.....

..... [1]

- (b) The programmer's first attempt at the HTML and JavaScript code is shown in Fig. 9.1. Line numbers are shown only for your use when referring to the code.

```

1  <!DOCTYPE html>
2  <html>
3  <body>
4
5  <h2>This is "Cambridge Assessment International Education"</h2>
6
7  <p id="string"></p>
8
9  <script>
10 var x = "This is "Cambridge International IT 9626 Paper 3"";
11 document.getElementById("string").innerHTML = x;
12 </script>
13
14 </body>
15 </html>

```

Fig. 9.1

When run in a web browser the HTML code outputs the heading in line 5 on the page. The browser executes the JavaScript code shown in lines 9 to 12.

The expected output of the code on the web page is shown in Fig. 9.2 but the actual output is shown in Fig. 9.3.




Fig. 9.2

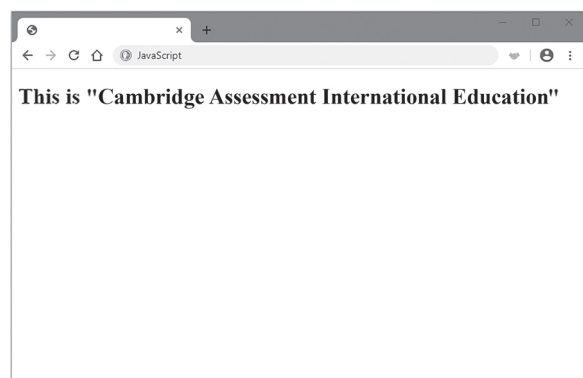


Fig. 9.3

10 Image editing software has tools for altering digital images.

Explain why a graphic designer might use each of the following tools to alter a digital image.

(a) layer tool

.....

.....

.....

.....

.....

.....

.....

.....

.....

.....

.....

..... [3]

(b) flatten tool

.....

.....

.....

.....

.....

.....

.....

.....

.....

.....

..... [2]

Permission to reproduce items where third-party owned material protected by copyright is included has been sought and cleared where possible. Every reasonable effort has been made by the publisher (UCLES) to trace copyright holders, but if any items requiring clearance have unwittingly been included, the publisher will be pleased to make amends at the earliest possible opportunity.

To avoid the issue of disclosure of answer-related information to candidates, all copyright acknowledgements are reproduced online in the Cambridge Assessment International Education Copyright Acknowledgements Booklet. This is produced for each series of examinations and is freely available to download at www.cambridgeinternational.org after the live examination series.

Cambridge Assessment International Education is part of Cambridge Assessment. Cambridge Assessment is the brand name of the University of Cambridge Local Examinations Syndicate (UCLES), which is a department of the University of Cambridge.