



UNIVERSITY OF CAMBRIDGE INTERNATIONAL EXAMINATIONS
General Certificate of Education Ordinary Level

CHEMISTRY

5070/01

Paper 1 Multiple Choice

October/November 2009

1 hour

Additional Materials: Multiple Choice Answer Sheet
 Soft clean eraser
 Soft pencil (type B or HB recommended)



READ THESE INSTRUCTIONS FIRST

Write in soft pencil.

Do not use staples, paper clips, highlighters, glue or correction fluid.

Write your name, Centre number and candidate number on the Answer Sheet in the spaces provided unless this has been done for you.

There are **forty** questions on this paper. Answer **all** questions. For each question there are four possible answers **A, B, C** and **D**.

Choose the **one** you consider correct and record your choice in **soft pencil** on the separate Answer Sheet.

Read the instructions on the Answer Sheet very carefully.

Each correct answer will score one mark. A mark will not be deducted for a wrong answer.

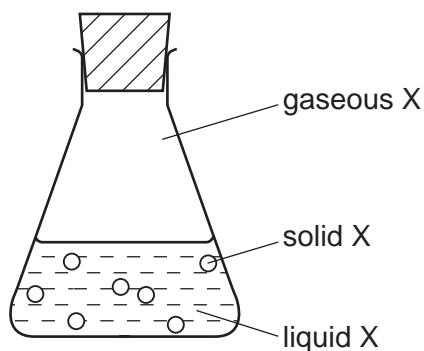
Any rough working should be done in this booklet.

A copy of the Periodic Table is printed on page 16.

This document consists of **13** printed pages and **3** blank pages.



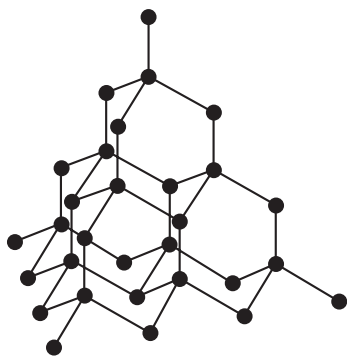
- 1 In which option do the three particles each have the same number of electrons?
- A** Cl^- Br^- I^-
- B** F^- Ne Na^+
- C** K^+ Ca^{2+} Br^-
- D** Li^+ Na^+ K^+
- 2 Why does neon gas, Ne, diffuse faster than carbon dioxide gas, CO_2 ?
- A** Neon atoms have the lower mass.
- B** Neon does not form molecules.
- C** Neon is a noble gas.
- D** Neon is less dense than air.
- 3 Which reagent could be used to distinguish between dilute nitric acid and dilute hydrochloric acid?
- A** aqueous barium chloride
- B** aqueous silver nitrate
- C** aqueous sodium hydroxide
- D** copper(II) carbonate
- 4 The conical flask contains compound X which is present in solid, liquid and gaseous states.



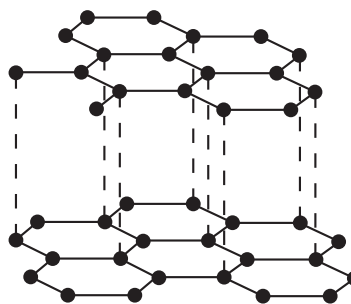
Which statement is correct?

- A** A gaseous X molecule has a lower mass than a liquid X molecule.
- B** Energy is released when X changes from liquid to solid.
- C** Liquid X is at a higher temperature than solid X.
- D** Liquid X molecules vibrate about fixed positions.

- 5 Which statement is always true when two atoms join together by a covalent bond?
- A One atom is a metal, the other atom is a non-metal.
 - B One atom loses one electron, the other atom gains one electron.
 - C The two atoms share one electron.
 - D The two atoms share two electrons.
- 6 The diagram shows the structures of diamond and graphite.



diamond



graphite

Which property do these substances have in common?

- A They are giant structures.
 - B They can act as lubricants.
 - C They can conduct electricity.
 - D They contain only covalent bonds.
- 7 Calcium reacts with phosphorus to form the ionic compound calcium phosphide.

Which ions will this compound contain?

- A Ca^{2+} and P^{3-}
- B Ca^{2+} and P^{5-}
- C Ca^{2-} and P^{3+}
- D Ca^{2-} and P^{5+}

- 8 All of the following substances can conduct electricity.

Which substance's conductivity is **not** due to the movement of electrons?

- A aluminium
- B graphite
- C lithium chloride
- D mercury

- 9 A sample of hydrogen is a mixture of the two isotopes ${}^1_1\text{H}$ and ${}^2_1\text{H}$.

The relative atomic mass of oxygen is 16.

What are possible values of the relative molecular mass of different molecules of water formed by the combination of oxygen and hydrogen?

- 1 18
- 2 19
- 3 20

- A 1 only
- B 1 and 2 only
- C 1 and 3 only
- D 1, 2 and 3

- 10 Calcium reacts with water as shown.



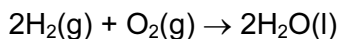
What is the total mass of the solution that remains when 40 g of calcium reacts with 100 g of water?

- A 58g
- B 74g
- C 138g
- D 140g

- 11 What products are formed when concentrated aqueous potassium chloride is electrolysed?

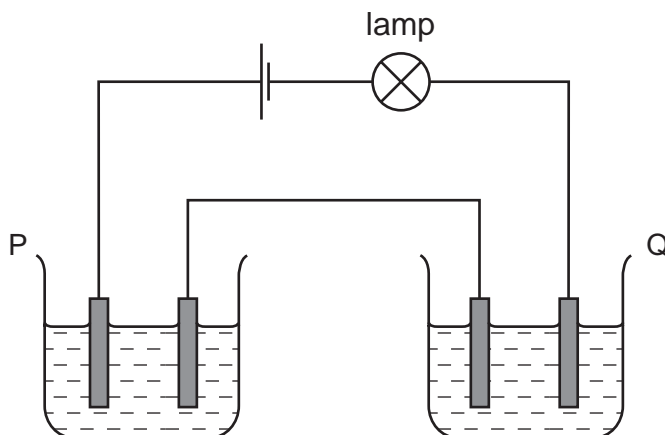
	at the anode (positive)	at the cathode (negative)
A	chlorine	hydrogen
B	chlorine	potassium
C	oxygen	hydrogen
D	oxygen	potassium

- 12 Hydrogen reacts with oxygen as shown in the equation below.



How much gas will remain if 2 dm³ of hydrogen are reacted with 1 dm³ of oxygen at room temperature?

- A 0 dm³ B 1 dm³ C 2 dm³ D 3 dm³
- 13 Two cells, P and Q, containing different liquids, were connected in series with a battery, a suitable lamp and inert electrodes, as shown in the diagram.



For which pair of liquids did the lamp light up?

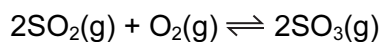
	in P	in Q
A	concentrated sodium chloride solution	concentrated sugar solution
B	copper(II) sulfate solution	propanol
C	ethanol	molten lead(II) bromide
D	mercury	dilute hydrochloric acid

- 14 The burning of hydrogen is an exothermic reaction.

Which statement explains this?

- A More bonds are broken than are formed.
 B More bonds are formed than are broken.
 C Overall, the bonds broken are stronger than those formed.
 D Overall, the bonds formed are stronger than those broken.

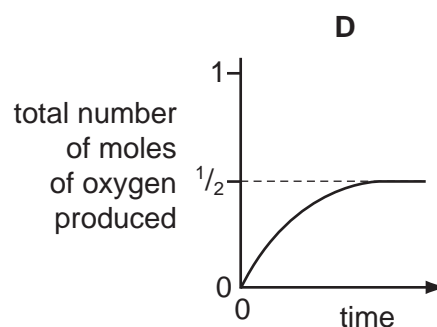
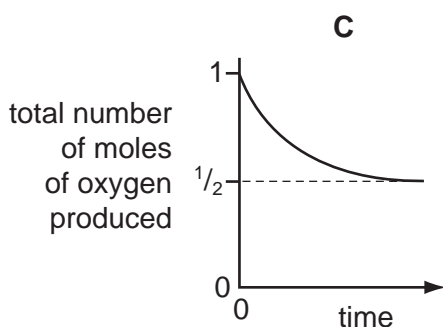
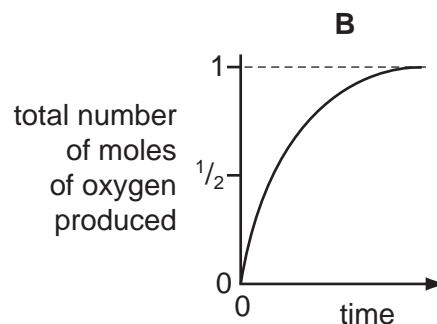
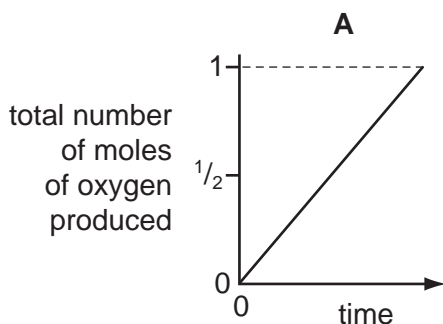
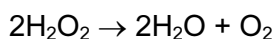
- 15 In the Contact process for making sulfuric acid, one step involves the oxidation of sulfur dioxide to sulfur trioxide.



The forward reaction is exothermic.

Which change would increase the amount of sulfur trioxide produced at equilibrium?

- A** adding a catalyst
B decreasing the pressure
C decreasing the temperature
D increasing the temperature
- 16 Which graph corresponds to the catalytic decomposition of 1 mole of hydrogen peroxide?



- 17 Which row in the table describes the processes occurring at the electrodes when molten sodium chloride is electrolysed?

	anode (positive)	cathode (negative)
A	oxidation	reduction
B	reduction	oxidation
C	oxidation	oxidation
D	reduction	reduction

18 Lithium and rubidium are both in Group I of the Periodic Table.

Which statement is correct?

- A Lithium atoms and rubidium atoms have the same number of electrons in their outer shell.
- B Lithium atoms are larger than rubidium ions.
- C Lithium ions and rubidium ions have the same number of electrons in their outer shell.
- D Rubidium ions are larger than rubidium atoms.

19 Which mixture would react with dilute sulfuric acid to form two **different** gases?

- A copper and magnesium carbonate
- B copper(II) carbonate and magnesium
- C copper(II) carbonate and magnesium oxide
- D copper(II) oxide and magnesium

20 Which salts are soluble in water?

- 1 ammonium carbonate, $(\text{NH}_4)_2\text{CO}_3$
- 2 calcium carbonate, CaCO_3
- 3 lead(II) carbonate, PbCO_3
- 4 sodium carbonate, Na_2CO_3

- A 1 only B 1 and 2 C 1 and 4 D 2 and 3

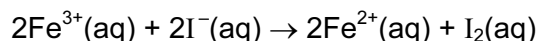
21 Which compound in a 1 mol/dm^3 solution has the lowest pH value?

- A ethanoic acid
- B hydrogen chloride
- C sodium chloride
- D sodium hydroxide

22 In the Periodic Table, how many periods include the elements of atomic numbers 1-18?

- A 2 B 3 C 6 D 8

- 23 The ionic equation shows the reaction between potassium iodide and iron(III) chloride.



Which terms describe the changes to the iron(III) ions and iodide ions?

	iron(III) ions	iodide ions
A	oxidised	reduced
B	oxidised	oxidised
C	reduced	oxidised
D	reduced	reduced

- 24 Element Z is in Group VI of the Periodic Table.

Which formula is **incorrect**?

- A** Z^{2-} **B** Z_2O_3 **C** ZO_4^{2-} **D** ZO_3

- 25 Which is a property of aqueous potassium iodide?

- A** It does not conduct electricity.
B It is a purple solution.
C It is decolourised by chlorine.
D It reacts with aqueous bromine to form iodine.

- 26 The carbonate of metal X is a white solid.

It decomposes when heated to form carbon dioxide and a yellow solid oxide.

What is metal X?

- A** copper
B iron
C lead
D sodium

- 27 In which reaction do the products formed **not** include a salt?

- A** calcium(II) carbonate with hydrochloric acid
B copper(II) oxide with hydrogen
C copper(II) oxide with sulfuric acid
D copper(II) sulfate with sodium hydroxide

- 28 In the manufacture of iron, using a blast furnace, which reaction generates heat?
- A $\text{CaCO}_3 \rightarrow \text{CaO} + \text{CO}_2$
- B $\text{Fe}_2\text{O}_3 + 3\text{CO} \rightarrow 2\text{Fe} + 3\text{CO}_2$
- C $\text{C} + \text{O}_2 \rightarrow \text{CO}_2$
- D $\text{C} + \text{CO}_2 \rightarrow 2\text{CO}$
- 29 Which oxide is **most** readily reduced to the metal by heating in a stream of hydrogen?
- A calcium oxide
- B lead(II) oxide
- C sodium oxide
- D zinc oxide
- 30 Which ionic equation represents the reaction taking place at the anode during the electrolysis of molten aluminium oxide?
- A $\text{Al}^{3+} + 3\text{e}^- \rightarrow \text{Al}$
- B $2\text{Al}^{3+} + 3\text{O}_2 \rightarrow \text{Al}_2\text{O}_3$
- C $\text{O}^{2-} - 2\text{e}^- \rightarrow \text{O}_2$
- D $2\text{O}^{2-} - 4\text{e}^- \rightarrow \text{O}_2$
- 31 Which type of compound will liberate ammonia when heated with ammonium sulfate?
- A an acid
- B an alkali
- C a reducing agent
- D a salt
- 32 What is the concentration of hydrogen ions in 0.05 mol/dm^3 sulfuric acid?
- A 0.025 g/dm^3 B 0.05 g/dm^3 C 0.10 g/dm^3 D 2.0 g/dm^3

33 Four current problems in our atmosphere are listed.

- 1 acid rain
- 2 depletion of the ozone layer
- 3 presence of greenhouse gases
- 4 incomplete combustion of carbon compounds

Which atmospheric pollutant is responsible for each problem?

W chlorofluorocarbons

X sulfur dioxide

Y carbon monoxide

Z carbon dioxide

	1	2	3	4
A	W	X	Z	Y
B	X	W	Z	Y
C	X	Z	W	Y
D	Z	Y	X	W

34 Which process takes place during photosynthesis?

- A Carbohydrate is decomposed and oxygen is formed.
- B Carbon dioxide is taken in and oxygen is formed.
- C Oxygen is taken in and carbohydrate is formed.
- D Oxygen is taken in and carbon dioxide is formed.

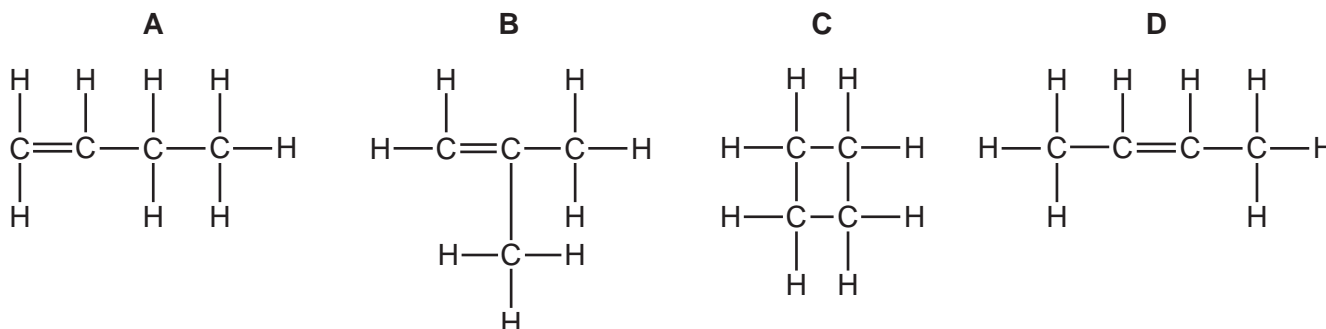
35 Cholesterol is an organic molecule that occurs in the blood stream.

What type of compound is cholesterol?

- A an acid
- B an alcohol
- C an alkane
- D an alkene

36 Substance X, molecular formula C_4H_8 , does **not** react with hydrogen.

What is the structural formula of X?

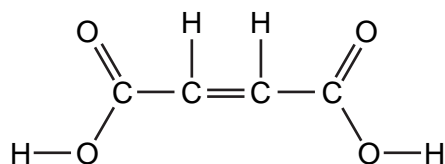


37 Natural gas, petroleum and diesel are all used as energy sources.

Which gas is **not** produced when these sources are burned?

- A** carbon dioxide
- B** carbon monoxide
- C** hydrogen
- D** water

38 The structural formula of butenedioic acid is shown.



Which statement about butenedioic acid is **not** correct?

- A** It decolourises aqueous bromine.
- B** Its aqueous solution reacts with sodium carbonate.
- C** Its empirical formula is the same as its molecular formula.
- D** Its relative molecular mass is 116.

39 A mixture of four gases, methane, ethane, propane and butane is cooled until the first drop of liquid is formed.

What compound is most likely to be present in this drop?

- A** butane
- B** ethane
- C** methane
- D** propane

40 Which statement about *Terylene* is correct?

- A** It is an addition polymer.
- B** It is an alkene.
- C** It is a polyamide.
- D** It is a polyester.

BLANK PAGE

BLANK PAGE

BLANK PAGE

DATA SHEET
The Periodic Table of the Elements

		Group																																																
		I	II	III	IV	V	VI	VII	0																																									
		<table border="1"> <tr> <td colspan="10">1 H Hydrogen 1</td> <td colspan="2">4 He Helium 2</td> </tr> </table>										1 H Hydrogen 1										4 He Helium 2																												
1 H Hydrogen 1										4 He Helium 2																																								
7 Li Lithium 3	9 Be Beryllium 4	<table border="1"> <tr> <td>11 B Boron 5</td> <td>12 C Carbon 6</td> <td>13 Al Aluminium 13</td> <td>14 Si Silicon 14</td> <td>15 P Phosphorus 15</td> <td>16 S Sulfur 16</td> <td>17 Cl Chlorine 17</td> <td>18 Ar Argon 18</td> <td>19 K Potassium 19</td> <td>20 Ca Calcium 20</td> <td>21 Sc Scandium 21</td> <td>22 Ti Titanium 22</td> <td>23 V Vanadium 23</td> <td>24 Cr Chromium 24</td> <td>25 Mn Manganese 25</td> <td>26 Fe Iron 26</td> <td>27 Co Cobalt 27</td> <td>28 Ni Nickel 28</td> <td>29 Cu Copper 29</td> <td>30 Zn Zinc 30</td> <td>31 Ga Gallium 31</td> <td>32 Ge Germanium 32</td> <td>33 As Arsenic 33</td> <td>34 Se Selenium 34</td> <td>35 Br Bromine 35</td> <td>36 Kr Krypton 36</td> </tr> </table>										11 B Boron 5	12 C Carbon 6	13 Al Aluminium 13	14 Si Silicon 14	15 P Phosphorus 15	16 S Sulfur 16	17 Cl Chlorine 17	18 Ar Argon 18	19 K Potassium 19	20 Ca Calcium 20	21 Sc Scandium 21	22 Ti Titanium 22	23 V Vanadium 23	24 Cr Chromium 24	25 Mn Manganese 25	26 Fe Iron 26	27 Co Cobalt 27	28 Ni Nickel 28	29 Cu Copper 29	30 Zn Zinc 30	31 Ga Gallium 31	32 Ge Germanium 32	33 As Arsenic 33	34 Se Selenium 34	35 Br Bromine 35	36 Kr Krypton 36													
11 B Boron 5	12 C Carbon 6	13 Al Aluminium 13	14 Si Silicon 14	15 P Phosphorus 15	16 S Sulfur 16	17 Cl Chlorine 17	18 Ar Argon 18	19 K Potassium 19	20 Ca Calcium 20	21 Sc Scandium 21	22 Ti Titanium 22	23 V Vanadium 23	24 Cr Chromium 24	25 Mn Manganese 25	26 Fe Iron 26	27 Co Cobalt 27	28 Ni Nickel 28	29 Cu Copper 29	30 Zn Zinc 30	31 Ga Gallium 31	32 Ge Germanium 32	33 As Arsenic 33	34 Se Selenium 34	35 Br Bromine 35	36 Kr Krypton 36																									
23 Na Sodium 11	24 Mg Magnesium 12	<table border="1"> <tr> <td>37 Rb Rubidium 37</td> <td>38 Sr Strontium 38</td> <td>39 Y Yttrium 39</td> <td>40 Zr Zirconium 40</td> <td>41 Nb Niobium 41</td> <td>42 Mo Molybdenum 42</td> <td>43 Tc Technetium 43</td> <td>44 Ru Ruthenium 44</td> <td>45 Rh Rhodium 45</td> <td>46 Pd Palladium 46</td> <td>47 Ag Silver 47</td> <td>48 Cd Cadmium 48</td> <td>49 In Indium 49</td> <td>50 Sn Tin 50</td> <td>51 Sb Antimony 51</td> <td>52 Te Tellurium 52</td> <td>53 I Iodine 53</td> <td>54 Xe Xenon 54</td> <td>55 Cs Caesium 55</td> <td>56 Ba Barium 56</td> <td>57 La Lanthanum 57</td> <td>58-71 Lanthanoid series</td> <td>72 Hf Hafnium 72</td> <td>73 Ta Tantalum 73</td> <td>74 W Tungsten 74</td> <td>75 Re Rhenium 75</td> <td>76 Os Osmium 76</td> <td>77 Ir Iridium 77</td> <td>78 Pt Platinum 78</td> <td>79 Au Gold 79</td> <td>80 Hg Mercury 80</td> <td>81 Tl Thallium 81</td> <td>82 Pb Lead 82</td> <td>83 Bi Bismuth 83</td> <td>84 Po Polonium 84</td> <td>85 At Astatine 85</td> <td>86 Rn Radon 86</td> </tr> </table>										37 Rb Rubidium 37	38 Sr Strontium 38	39 Y Yttrium 39	40 Zr Zirconium 40	41 Nb Niobium 41	42 Mo Molybdenum 42	43 Tc Technetium 43	44 Ru Ruthenium 44	45 Rh Rhodium 45	46 Pd Palladium 46	47 Ag Silver 47	48 Cd Cadmium 48	49 In Indium 49	50 Sn Tin 50	51 Sb Antimony 51	52 Te Tellurium 52	53 I Iodine 53	54 Xe Xenon 54	55 Cs Caesium 55	56 Ba Barium 56	57 La Lanthanum 57	58-71 Lanthanoid series	72 Hf Hafnium 72	73 Ta Tantalum 73	74 W Tungsten 74	75 Re Rhenium 75	76 Os Osmium 76	77 Ir Iridium 77	78 Pt Platinum 78	79 Au Gold 79	80 Hg Mercury 80	81 Tl Thallium 81	82 Pb Lead 82	83 Bi Bismuth 83	84 Po Polonium 84	85 At Astatine 85	86 Rn Radon 86		
37 Rb Rubidium 37	38 Sr Strontium 38	39 Y Yttrium 39	40 Zr Zirconium 40	41 Nb Niobium 41	42 Mo Molybdenum 42	43 Tc Technetium 43	44 Ru Ruthenium 44	45 Rh Rhodium 45	46 Pd Palladium 46	47 Ag Silver 47	48 Cd Cadmium 48	49 In Indium 49	50 Sn Tin 50	51 Sb Antimony 51	52 Te Tellurium 52	53 I Iodine 53	54 Xe Xenon 54	55 Cs Caesium 55	56 Ba Barium 56	57 La Lanthanum 57	58-71 Lanthanoid series	72 Hf Hafnium 72	73 Ta Tantalum 73	74 W Tungsten 74	75 Re Rhenium 75	76 Os Osmium 76	77 Ir Iridium 77	78 Pt Platinum 78	79 Au Gold 79	80 Hg Mercury 80	81 Tl Thallium 81	82 Pb Lead 82	83 Bi Bismuth 83	84 Po Polonium 84	85 At Astatine 85	86 Rn Radon 86														
87 Fr Francium 87	88 Ra Radium 88	89 Ac Actinium 89	<table border="1"> <tr> <td>89 Y Yttrium 39</td> <td>90 Th Thorium 90</td> <td>91 Pa Protactinium 91</td> <td>92 U Uranium 92</td> <td>93 Np Neptunium 93</td> <td>94 Pu Plutonium 94</td> <td>95 Am Americium 95</td> <td>96 Cm Curium 96</td> <td>97 Bk Berkelium 97</td> <td>98 Cf Californium 98</td> <td>99 Es Einsteinium 99</td> <td>100 Fm Fermium 100</td> <td>101 Md Mendelevium 101</td> <td>102 No Nobelium 102</td> <td>103 Lr Lawrencium 103</td> </tr> </table>										89 Y Yttrium 39	90 Th Thorium 90	91 Pa Protactinium 91	92 U Uranium 92	93 Np Neptunium 93	94 Pu Plutonium 94	95 Am Americium 95	96 Cm Curium 96	97 Bk Berkelium 97	98 Cf Californium 98	99 Es Einsteinium 99	100 Fm Fermium 100	101 Md Mendelevium 101	102 No Nobelium 102	103 Lr Lawrencium 103																							
89 Y Yttrium 39	90 Th Thorium 90	91 Pa Protactinium 91	92 U Uranium 92	93 Np Neptunium 93	94 Pu Plutonium 94	95 Am Americium 95	96 Cm Curium 96	97 Bk Berkelium 97	98 Cf Californium 98	99 Es Einsteinium 99	100 Fm Fermium 100	101 Md Mendelevium 101	102 No Nobelium 102	103 Lr Lawrencium 103																																				
		133 Cs Caesium 55	137 Ba Barium 56	139 La Lanthanum 57	140 Ce Cerium 58	141 Pr Praseodymium 59	144 Nd Neodymium 60	146 Pm Promethium 61	150 Sm Samarium 62	152 Eu Europium 63	157 Gd Gadolinium 64	162 Dy Dysprosium 66	165 Ho Holmium 67	167 Er Erbium 68	169 Tm Thulium 69	173 Yb Ytterbium 70	175 Lu Lutetium 71	177 Yb Ytterbium 70	179 No Nobelium 102																															

The volume of one mole of any gas is 24 dm³ at room temperature and pressure (r.t.p.).

Key

a	X
---	---

a = relative atomic mass
X = atomic symbol
b = proton (atomic) number

Permission to reproduce items where third-party owned material protected by copyright is included has been sought and cleared where possible. Every reasonable effort has been made by the publisher (UCLES) to trace copyright holders, but if any items requiring clearance have unwittingly been included, the publisher will be pleased to make amends at the earliest possible opportunity.

University of Cambridge International Examinations is part of the Cambridge Assessment Group. Cambridge Assessment is the brand name of University of Cambridge Local Examinations Syndicate (UCLES), which is itself a department of the University of Cambridge.