

Centre Number	Candidate Number	Name
---------------	------------------	------

UNIVERSITY OF CAMBRIDGE INTERNATIONAL EXAMINATIONS
General Certificate of Education Ordinary Level

CHEMISTRY

5070/02

Paper 2 Theory

May/June 2004

1 hour 30 minutes

Candidates answer on the Question Paper.

Additional Materials: Answer Paper

READ THESE INSTRUCTIONS FIRST

Write your Centre number, candidate number and name on all the work you hand in.

Write in blue or black pen.

Do not use staples, paper clips, highlighters, glue or correction fluid.

You may use a calculator.

Sections A

Answer **all** questions.

Write your answers in the spaces provided on the Question Paper.

Section B

Answer any **three** questions.

Write your answers on any lined pages and/or separate answer paper.

At the end of the examination, fasten all your work securely together.

The number of marks is given in brackets [] at the end of each question or part question.

A copy of the Periodic Table is printed on page 16.

If you have been given a label, look at the details. If any details are incorrect or missing, please fill in your correct details in the space given at the top of this page.

Stick your personal label here, if provided.

For Examiner's Use	
Section A	
B7	
B8	
B9	
B10	
Total	

This document consists of **15** printed pages and **1** lined page.



Section A

Answer **all** the questions in this section in the spaces provided.

A1 Choose from the following substances to answer the questions below.

argon

calcium phosphate

ethene

lead(II) nitrate

methane

phosphorus oxide

potassium nitrate

sulphur dioxide

Each substance can be used once, more than once, or not at all.

Name a substance which,

(a) is a greenhouse gas produced by the decay of vegetable matter,

.....[1]

(b) contains **two** of the essential elements needed by plants,

.....[1]

(c) reacts with warm aqueous sodium hydroxide and aluminium powder to form a gas that turns moist red litmus blue,

.....[1]

(d) dissolves in water to form a solution which neutralises sodium hydroxide.

.....[1]

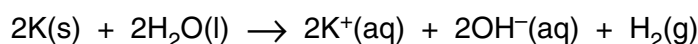
A2 Two isotopes of potassium are ${}^{39}_{19}\text{K}$ and ${}^{40}_{19}\text{K}$.

- (a) Complete the table about the number of particles found in one atom of each of these isotopes.

	protons	number of electrons	neutrons
${}^{39}_{19}\text{K}$			
${}^{40}_{19}\text{K}$			

[2]

- (b) Potassium reacts with water as shown in the equation.



Describe what you would see when potassium reacts with water.

.....

[2]

- (c) A sample of 0.195 g of potassium was added to 500 cm³ of cold water. When the reaction was finished, 100 cm³ of 0.100 mol/dm³ hydrochloric acid was added to form solution X.

- (i) Calculate the number of moles of hydroxide ions formed when the potassium was added to water.

- (ii) Calculate the number of moles of hydrogen ions in 100 cm³ of 0.100 mol/dm³ hydrochloric acid.

- (iii) Give an ionic equation to represent the neutralisation reaction.

.....

- (iv) Suggest a pH value for solution X.
Explain your answer.

.....

[4]

(d) Potassium oxide is an ionic solid.

Draw the electronic structure of both a potassium ion and an oxide ion.
Include the charge on each ion.

Potassium ion

Oxide ion

[2]

A3 More than 60 000 plastic materials, or polymers, are in use.

The table gives some information about five important polymers.

polymer	density in kg/m ³	maximum useable temperature / °C	solubility in organic solvents
low density poly(ethene)	920	85	soluble above 80 °C
high density poly(ethene)	960	120	soluble above 80 °C
poly(phenylethene)	1050	65	soluble
poly(chloroethene)	1390	60	soluble
poly(propene)	900	150	insoluble

(a) Which polymer would be most suited for making a pipe to carry lubricating oil at 100 °C?
Give **two** reasons for your answer.

answer

reasons

.....

.....[2]

(b) State **one** use for poly(ethene).

.....[1]

(c) Describe some of the problems of the disposal of waste polymers.

.....

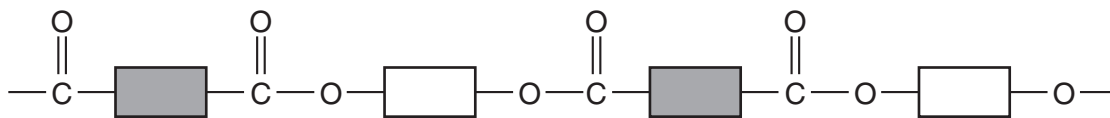
.....

.....[2]

(d) Poly(propene) is made from the monomer propene.
Draw the structure of poly(propene).

[2]

- (e) *Terylene* is a condensation polymer.
The structure of *Terylene* is shown below.



- (i) What is the name of the linkage shown in the structure of *Terylene*?
-
- (ii) Name a natural macromolecule that contains the same linkage as *Terylene*.
-
- [2]
- (f) Draw the structure of a polyamide such as nylon.

[1]

A4 The exhaust fumes from the internal combustion engines of motor vehicles contribute to the poor quality of air in many cities. The exhaust fumes contain atmospheric pollutants such as nitric oxide, NO, and carbon monoxide, CO.

(a) Nitric oxide, NO, is formed when oxygen and nitrogen from the air react in an internal combustion engine.

(i) Construct a balanced equation for this reaction.

.....

(ii) Explain why, in terms of collisions between particles, the rate of this reaction increases as the concentration of oxygen increases.

.....

.....

(iii) Explain why the rate of this reaction increases as the engine temperature increases.

.....

.....

[4]

(b) Explain how carbon monoxide is formed in an internal combustion engine.

.....

.....[1]

(c) Nitric oxide and carbon monoxide in the exhaust gases react together in the catalytic converter of a motor vehicle.

(i) Write a balanced equation for this reaction.

.....

(ii) Explain why the catalyst should be in the form of a powder supported on a mesh.

.....

.....

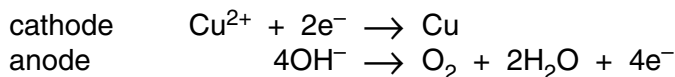
.....

[3]

A5 Electrolysis is the decomposition of a liquid by the passage of an electrical current.

- (a)** Aqueous copper(II) sulphate contains the following ions, Cu^{2+} , H^+ , OH^- and SO_4^{2-} .
Aqueous copper(II) sulphate can be electrolysed using inert electrodes.

The electrode reactions are represented below.



- (i)** Explain why copper, **not** hydrogen, is formed at the cathode.

.....
.....

- (ii)** Explain why the formation of oxygen at the anode is an example of oxidation.

.....
.....

- (iii)** The electrolysis of aqueous copper(II) sulphate using copper electrodes has a different anode reaction.
Give the equation for the electrode reaction at the anode.

.....
[3]

(b) Molten lead(II) bromide decomposes when an electric current is passed through it.

- (i)** Explain why solid lead(II) bromide will not conduct electricity but molten lead(II) bromide will.

.....
.....
.....

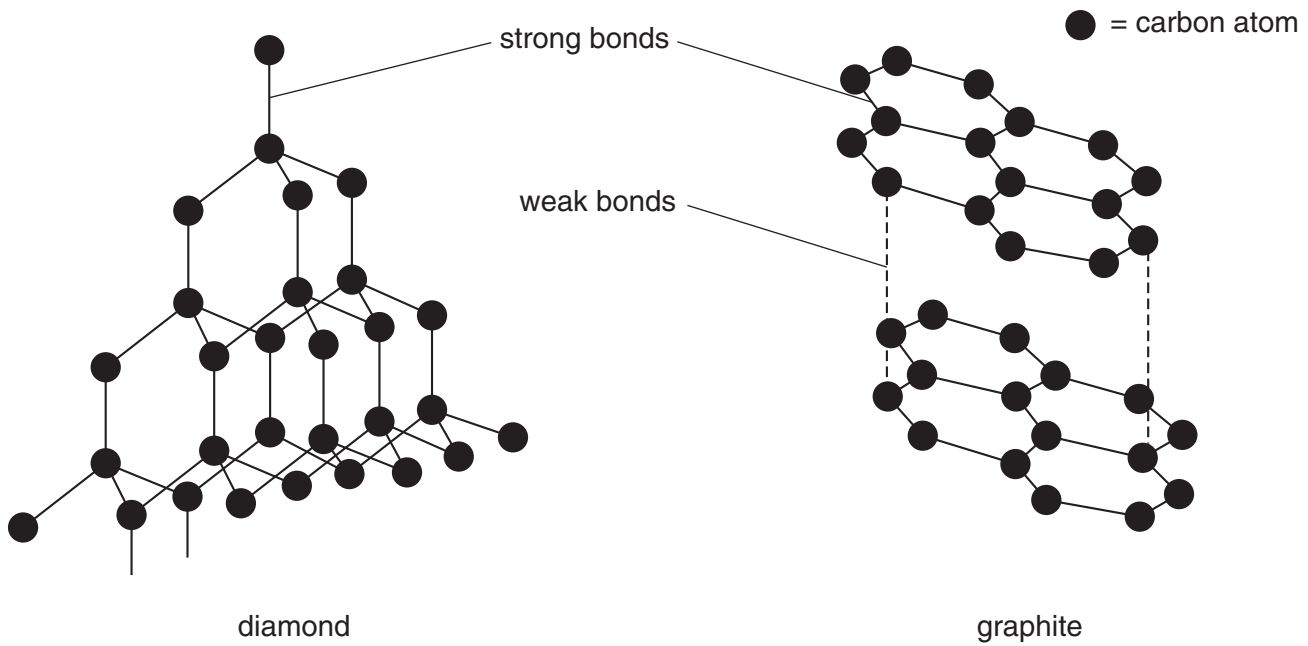
- (ii)** Construct the equations for the two electrode reactions.

cathode

anode

[4]

A6 The structures of diamond and graphite are drawn below.



(a) Name the type of strong bond shown on the diagram.

.....[1]

(b) Diamond has a melting point of about 3700 °C and graphite has a melting point of about 3300 °C.

(i) Explain why both diamond and graphite have very high melting points.

.....
.....
.....

(ii) Suggest why the melting point of graphite is lower than that of diamond.

.....
.....

[3]

(c) Compare the electrical conductivity of diamond and graphite.
Explain your answer.

.....
.....
.....[2]

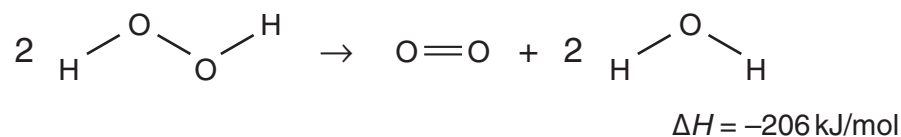
Section B

Answer **three** questions from this section.

B7 Aqueous hydrogen peroxide is used to sterilise contact lenses.

At room temperature aqueous hydrogen peroxide decomposes very slowly to form water and oxygen.

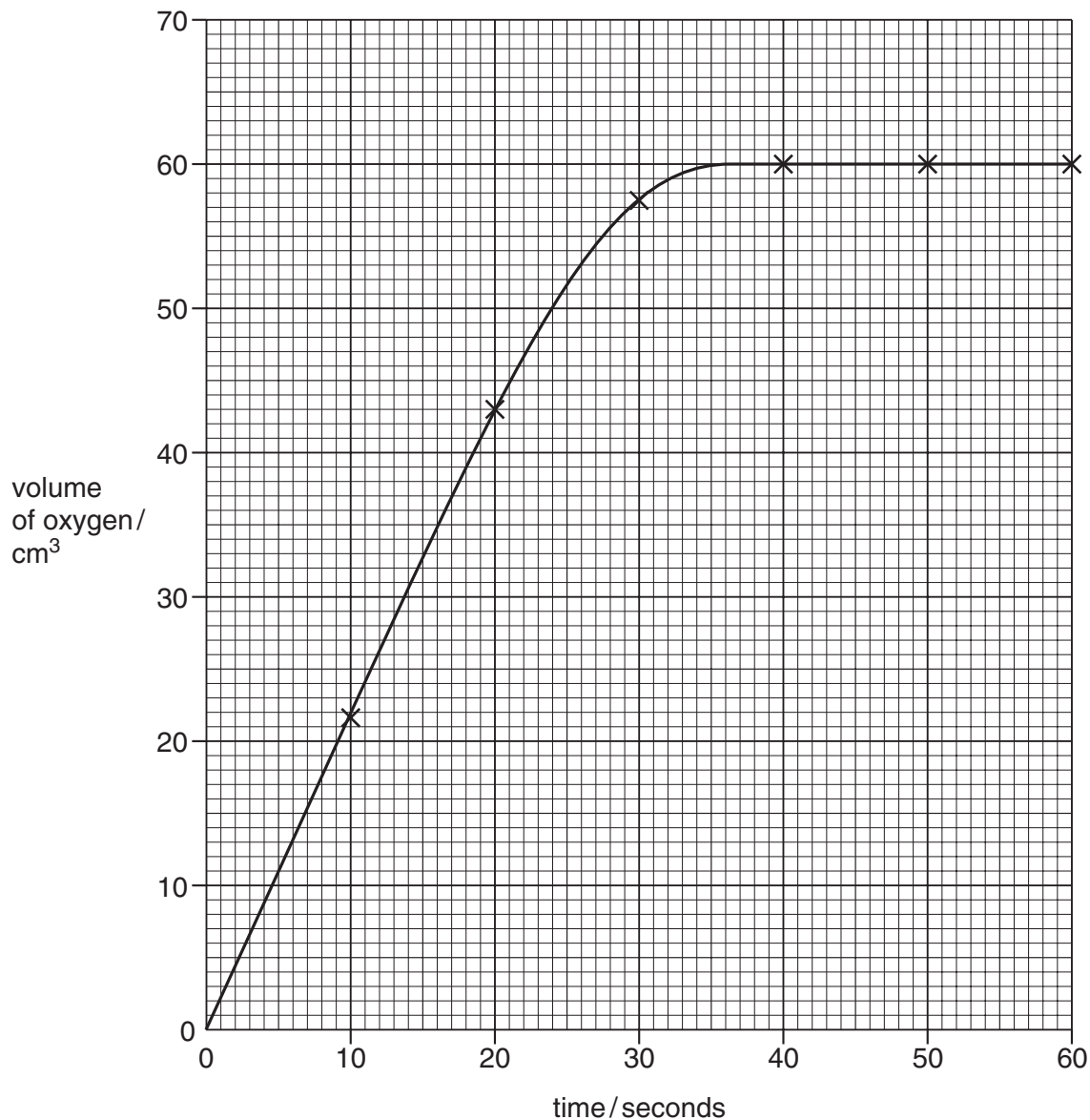
The decomposition can be represented by the equation below.



- (a) Explain why this reaction is exothermic in terms of the energy changes that take place during bond breaking and bond making. [2]
- (b) Draw the energy profile diagram for the decomposition of hydrogen peroxide. Label on the diagram the activation energy and the enthalpy change. [3]

- (c) Manganese(IV) oxide catalyses the decomposition of aqueous hydrogen peroxide. In an experiment 50.0 cm^3 of aqueous hydrogen peroxide was mixed with 0.50 g of manganese(IV) oxide. The total volume of oxygen formed was measured every 10 seconds.

The results of the experiment are shown in the graph.



- (i) After how many seconds did the decomposition of hydrogen peroxide finish?
- (ii) How many moles of oxygen were produced at the end of the decomposition? [At room temperature and pressure one mole of oxygen occupies 24000 cm^3 .]
- (iii) Use your answer to (ii) to calculate the concentration, in mol/dm^3 , of the 50.0 cm^3 of aqueous hydrogen peroxide used in the experiment.

[5]

B8 Nickel is a transition element. It is manufactured in a four-stage process from nickel(II) sulphide, NiS.

- Stage 1 – nickel(II) sulphide is heated in air to form nickel(II) oxide and sulphur dioxide.
- Stage 2 – nickel(II) oxide is heated with carbon to give impure nickel.
- Stage 3 – impure nickel is reacted with carbon monoxide to make nickel tetracarbonyl, Ni(CO)₄.
- Stage 4 – nickel tetracarbonyl is decomposed to give pure nickel.

(a) (i) Construct the balanced equation for the reaction in stage 1.

(ii) Calculate the mass of sulphur dioxide that is formed when 182 kg of nickel sulphide is heated in air. [3]

(b) Nickel tetracarbonyl is a liquid with a boiling point of 43 °C. Suggest, with a reason, the type of bonding in nickel tetracarbonyl. [2]

(c) Suggest **one** possible environmental consequence of the manufacture of nickel. [1]

(d) Give an example of the use of nickel as a catalyst. [1]

(e) In an experiment, small amounts of three metals were added to three aqueous metal nitrate solutions.

The results are shown in the table.

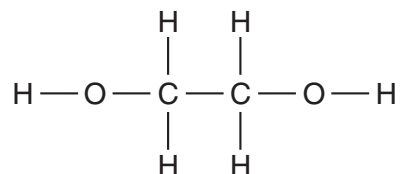
	aqueous zinc nitrate Zn(NO ₃) ₂	aqueous nickel(II) nitrate, Ni(NO ₃) ₂	aqueous copper(II) nitrate, Cu(NO ₃) ₂
zinc	no reaction	green solution went colourless and zinc coated with a silver solid	blue solution went colourless and zinc coated with a pink solid
nickel		no reaction	
copper	no reaction	no reaction	no reaction

Predict the observations when nickel is added to separate solutions of zinc nitrate and copper(II) nitrate.

Write an ionic equation for **one** of the reactions that takes place. [3]

B9 Ethene is an important starting material for the production of chemicals such as ethanol, ethanoic acid and ethane-1,2-diol. Ethene, C_2H_4 , is manufactured by the cracking of long chain hydrocarbons such as dodecane, $C_{12}H_{26}$.

- (a) Construct an equation to show the cracking of dodecane to make ethene. [1]
- (b) Draw a 'dot and cross' diagram for ethene. You only need to draw the valence (outer shell) electrons. [1]
- (c) Ethene can also be converted into a compound that contains carbon, hydrogen and oxygen. A sample of the compound was analysed and found to contain 0.72 g of carbon, 0.18 g of hydrogen and 0.96 g of oxygen. Show that the empirical formula of the compound is CH_3O . [3]
- (d) Describe how ethene can be converted industrially into ethanol. [2]
- (e) Ethanol reacts with hot acidified potassium dichromate(VI) to form ethanoic acid.
- (i) Describe the colour change that occurs during this reaction and draw the structure of ethanoic acid.
- (ii) Ethane-1,2-diol has the structure drawn below.



Suggest the structure of the product of the reaction between ethane-1,2-diol and hot acidified potassium dichromate(VI).

[3]

B10 The table below shows some of the ores of iron.

ore	formula
haematite	Fe_2O_3
magnetite	Fe_3O_4
siderite	FeCO_3

- (a) Which ore in the table contains the greatest percentage by mass of iron? Explain your answer. [2]
- (b) Give the equations for the **redox** reactions taking place in the extraction of iron from haematite.
In each case state which substance is oxidised and which is reduced. [4]
- (c) Iron is malleable. Describe how this property can be explained in terms of its structure. [2]
- (d) State and explain how the properties of iron can be changed by the addition of carbon. [2]

.....

.....

.....

.....

.....

.....

.....

.....

.....

.....

.....

.....

.....

.....

.....

.....

.....

.....

.....

.....

.....

.....

.....

DATA SHEET
The Periodic Table of the Elements

		Group											
	I	II	III	IV	V	VI	VII	VIII	IX	X	XI	XII	
	1 H Hydrogen 1											2 He Helium 2	
3 Li Lithium 3	4 Be Beryllium 4											5 B Boron 5	
11 Na Sodium 11	12 Mg Magnesium 12											13 Al Aluminium 13	
19 K Potassium 19	20 Ca Calcium 20	21 Sc Scandium 21	22 Ti Titanium 22	23 V Vanadium 23	24 Cr Chromium 24	25 Mn Manganese 25	26 Fe Iron 26	27 Co Cobalt 27	28 Ni Nickel 28	29 Cu Copper 29	30 Zn Zinc 30	31 Ga Gallium 31	
37 Rb Rubidium 37	38 Sr Strontium 38	39 Y Yttrium 39	40 Zr Zirconium 40	41 Nb Niobium 41	42 Mo Molybdenum 42	43 Tc Technetium 43	44 Ru Ruthenium 44	45 Rh Rhodium 45	46 Pd Palladium 46	47 Ag Silver 47	48 Cd Cadmium 48	49 In Indium 49	
55 Cs Caesium 55	56 Ba Barium 56	57 La Lanthanum 57	72 Hf Hafnium 72	73 Ta Tantalum 73	74 W Tungsten 74	75 Re Rhenium 75	76 Os Osmium 76	77 Ir Iridium 77	78 Pt Platinum 78	79 Au Gold 79	80 Hg Mercury 80	81 Tl Thallium 81	
87 Fr Francium 87	88 Ra Radium 88	89 Ac Actinium 89											86 Rn Radon 86

140 Ce Cerium 58	141 Pr Praseodymium 59	144 Nd Neodymium 60	150 Sm Samarium 62	152 Eu Europium 63	157 Gd Gadolinium 64	162 Dy Dysprosium 66	165 Ho Holmium 67	167 Er Erbium 68	169 Tm Thulium 69	173 Yb Ytterbium 70	175 Lu Lutetium 71		
232 Th Thorium 90	238 Pa Protactinium 91	238 U Uranium 92	238 Pu Plutonium 94	238 Np Neptunium 93	238 Am Americium 95	238 Cm Curium 96	238 Bk Berkelium 97	238 Cf Californium 98	238 Es Einsteinium 99	238 Fm Fermium 100	238 Md Mendelevium 101	238 No Nobelium 102	238 Lr Lawrencium 103

*58-71 Lanthanoid series
†90-103 Actinoid series

	a
X	
b	

Key
a = relative atomic mass
X = atomic symbol
b = proton (atomic) number

The volume of one mole of any gas is 24 dm³ at room temperature and pressure (r.t.p.).