



Cambridge International Examinations
Cambridge International General Certificate of Secondary Education

CANDIDATE
NAME

CENTRE
NUMBER

--	--	--	--	--

CANDIDATE
NUMBER

--	--	--	--



ENVIRONMENTAL MANAGEMENT

0680/43

Paper 4

October/November 2018

1 hour 30 minutes

Candidates answer on the Question Paper.

No Additional Materials are required.

READ THESE INSTRUCTIONS FIRST

Write your Centre number, candidate number and name on all the work you hand in.

Write in dark blue or black pen.

You may use an HB pencil for any diagrams or graphs.

Do not use staples, paper clips, glue or correction fluid.

DO NOT WRITE IN ANY BARCODES.

Answer **all** questions.

Electronic calculators may be used.

You may lose marks if you do not show your working or if you do not use appropriate units.

Study the appropriate source materials before you start to write your answers.

Credit will be given for appropriate selection and use of data in your answers and for relevant interpretation of these data. Suggestions for data sources are given in some questions.

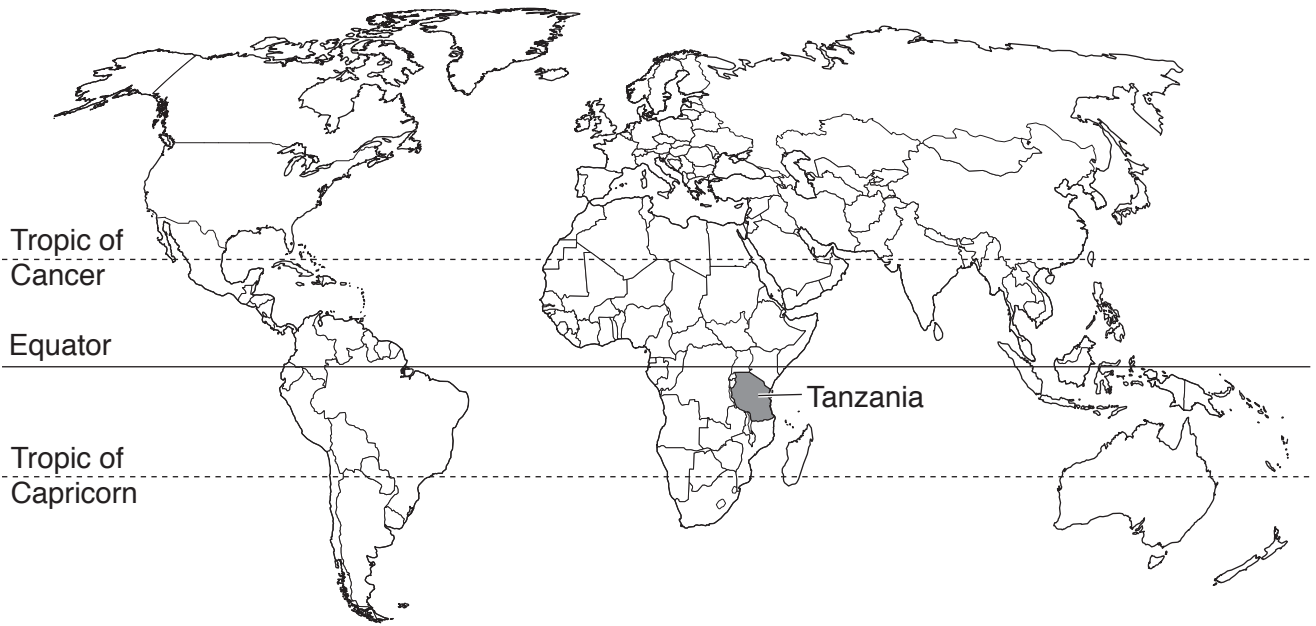
You may use the source data to draw diagrams and graphs or to do calculations to illustrate your answers.

At the end of the examination, fasten all your work securely together.

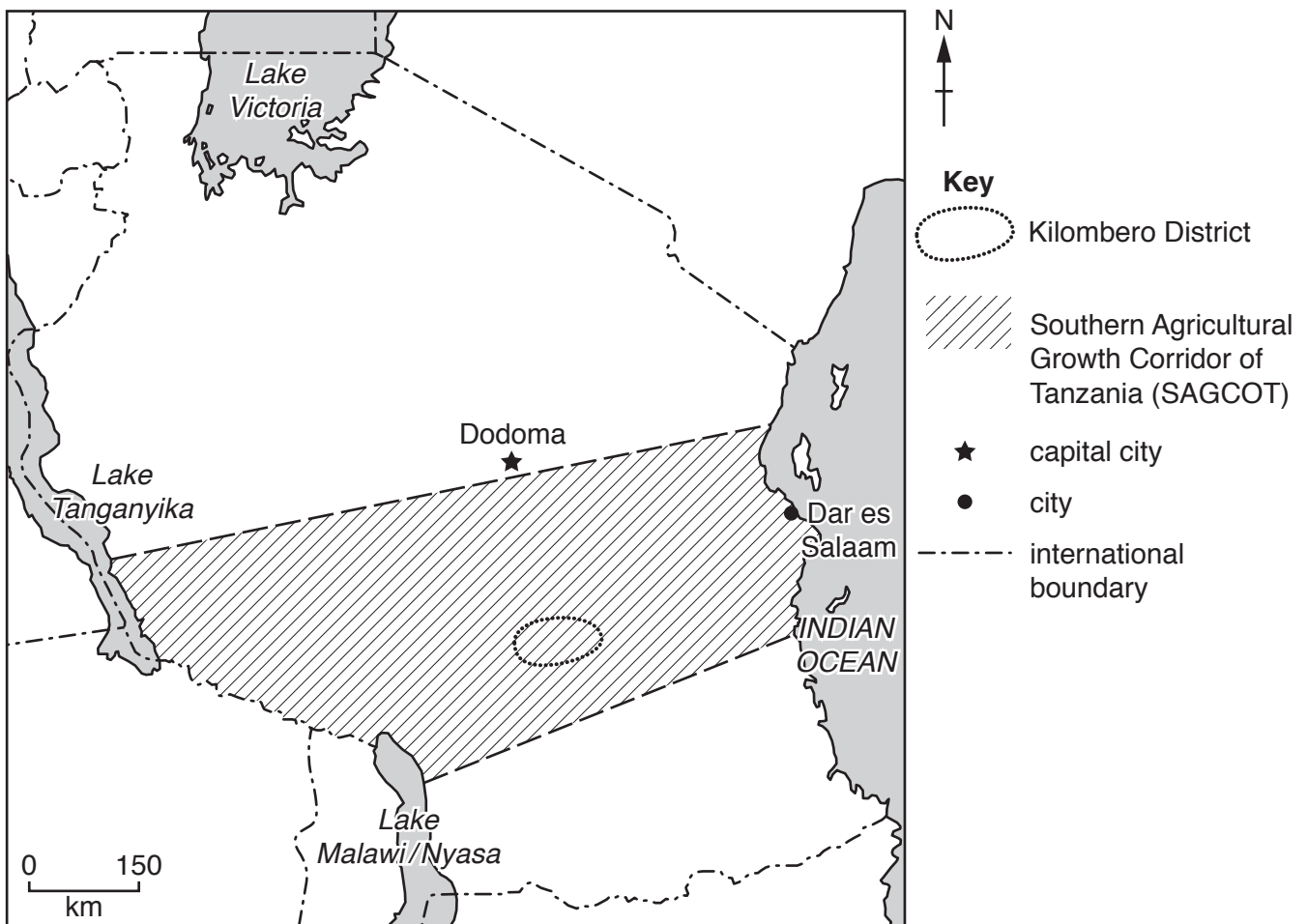
The number of marks is given in brackets [] at the end of each question or part question.

This document consists of **13** printed pages and **3** blank pages.

map of the world



map of Tanzania



area: 947 300 km²

population: 56 million (in 2016)

children per woman: 4.89

life expectancy: 61 years

currency: Tanzanian Shilling (2150 TZS = 1 USD)

languages: Swahili, English

climate: tropical, cooler in the highlands

terrain: coastal plain, central plateau, highlands in the south and north

main exports: gold, coffee, cashew nuts, cotton, other manufactured goods

1 All the land in Tanzania is owned by the government. The government leases land for up to 99 years. The economy depends on agriculture, which employs 80% of the work force and produces 85% of exports and 25% of GDP. Most people work as farm labourers or lease small farms. The demand for agricultural products is increasing worldwide. The government has set up the Southern Agricultural Growth Corridor of Tanzania (SAGCOT) to increase the sustainable production of crops. This includes management of the environment.

(a) Suggest reasons why the government wants to increase crop production.

.....
.....
.....
.....
.....
.....
.....[3]

(b) Over the next 25 years the SAGCOT strategies aim to increase food production by more than two million tonnes per year.

SAGCOT strategies

- 1. to increase crop production
- 2. to reduce waste and pollution
- 3. to increase farm profitability
- 4. to conserve natural resources

(i) Soil is a natural resource. Describe how trees help to protect the soil.

.....
.....
.....
.....
.....
.....[3]

(ii) Suggest why improving farm profitability is important for farmers.

.....
.....
.....
.....[2]

(iii) Suggest how crop production could be increased without damaging the environment.

.....
.....
.....
..... [2]

(c) The Kilombero District is a wetland area in Tanzania.

Look at the map of Tanzania **on page 3**.

Measure the distance in kilometres between the Kilombero District and Dar es Salaam.

..... km [1]

(d) A scientist wanted to find out how productive the wetland areas in southern Tanzania were before any changes were made by SAGCOT strategies. The scientist used this method.

- Identify all the districts with wetland areas in southern Tanzania.
- Identify villages near these wetland areas.
- Select 20 of these villages.
- Select 30 households from each village.
- Interview the head of each household using a questionnaire.

(i) Calculate the total number of households sampled.

..... [1]

(ii) Explain why a large number of households were sampled.

.....
..... [1]

(iii) Suggest a method for selecting 30 households from a village of 75 households.

.....
..... [1]

- (e) One of the questions in the questionnaire was about income from natural resources gathered in the wetland area. The findings are shown in the table.

natural resource gathered from wetland area	average household income for each natural resource / TZS per year
fruits	1800
medicinal plants	15 900
wooden poles	6800
grasses	23 400
firewood	3700
total

(i) Complete the table. [1]

(ii) Calculate the percentage of average household income that is provided by medicinal plants.

Space for working.

.....% [2]

(iii) Suggest a use for each of the following natural resources.


fruits

medicinal plants

grasses

[3]

(iv) Draw a bar graph to show the average household income from each natural resource.



[4]

(f) Medicinal plants have local names. The scientist paid the villagers for samples of each type of medicinal plant. The samples were carefully packed and sent to a botanical garden for scientific identification.

(i) Suggest why the scientist paid the villagers for the medicinal plants.

.....
.....[1]

(ii) Suggest advantages to the scientist of knowing the scientific names of the medicinal plants.

.....
.....
.....
.....[2]

- (g) A student wanted to find out more about the types of medicinal plants collected by the villagers. The student proposed two plans that could be used to estimate the number of medicinal plants collected each day.

plan one

Ask 10 villagers how many medicinal plants they collected in one day. Record this information in a notebook.

plan two

Ask 10 villagers how many of each type of medicinal plant they collected in one day. Repeat this on two more days. Record the results in a notebook.

- (i) Explain why **plan two** is better than **plan one**.

.....
.....
.....
.....[2]

- (ii) The student took photographs of the plants collected each day.
Suggest an advantage of taking photographs of the plants collected.

.....
.....[1]

(iii) The student's notebook shows the information collected from **plan two**. This information is not complete.

day one
10 different species
Total 32 plants

day
7 species
18 plants in total

day three
27
different species 8

Draw and complete a table to show the information from the pages of the student's notebook.

[4]

(iv) Which part of **plan two** did the student **not** record?

.....
.....[1]

(v) Suggest **one** other piece of information the student could have collected.

.....
.....[1]

2 (a) The government is completing the building of some roads to support SAGCOT strategies. These roads will connect inland areas with the coast.

(i) Explain the benefits of these roads to the people of Tanzania.

.....

.....

.....

.....

.....

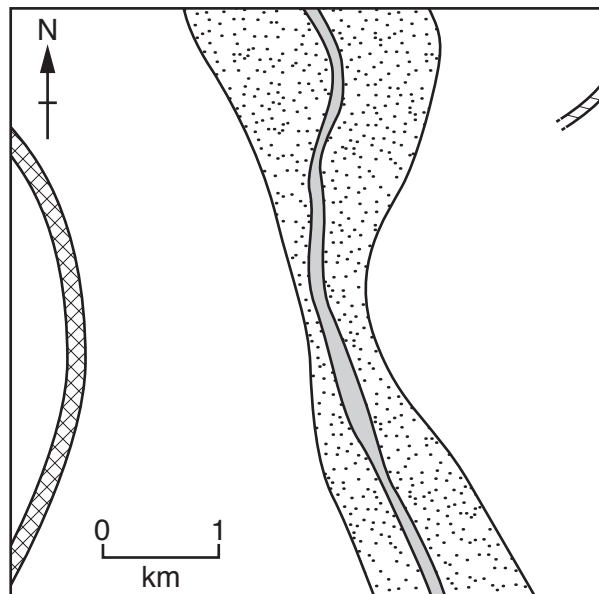
.....

.....[3]

(ii) The map shows one road to be completed in the Kilombero District. Look at all the information shown on the map.

Using the symbols in the key, draw on the map:

- a bridge to cross the river
- the best route for the road to be completed so that it connects with the main road.



Key

- river
- road to be completed
- main road
- wetland area
- grazing land
- bridge

[3]

(iii) Explain why you decided to locate the road and bridge in the position you have drawn on the map.

.....
.....
.....
.....
.....
.....
.....[3]

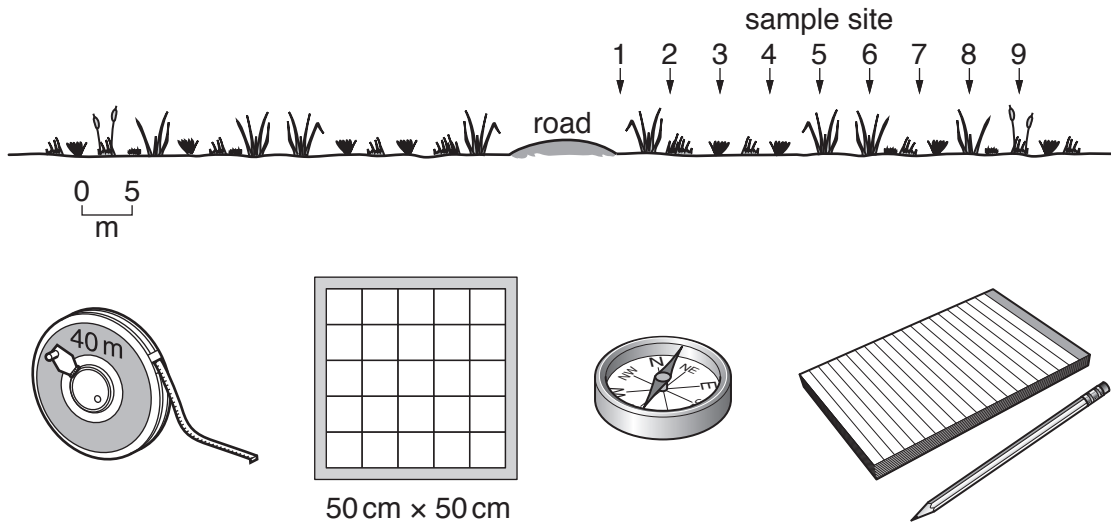
(iv) The road builders were given instructions to reduce damage to the local environment. Complete the instructions. The first instruction has been done for you.

Instructions to road builders to reduce damage to the local environment:

1. Do not spill oil.
2. Do not
3. Do not
4. Do not

[3]

- (b) A student carried out a survey of the plants growing over a distance of 40 metres from one side of a road.



The results are shown in the table.

sample point	1	2	3	4	5	6	7	8	9
distance from road/m	0	5	10	15	20	25	30	35	40
number of plant species	2	4	4	6	7	8	7	8	7
total number of plants	6	10	16	9	18	24	25	25	24

- (i) Describe the change in the number of plant species between 0 and 40 metres distance from the road.

.....

 [2]

- (ii) Which result for the total number of plants did the student think was an unexpected result? Suggest a possible reason for this result.

result at sample point number

reason

[2]

BLANK PAGE

BLANK PAGE

BLANK PAGE

Permission to reproduce items where third-party owned material protected by copyright is included has been sought and cleared where possible. Every reasonable effort has been made by the publisher (UCLES) to trace copyright holders, but if any items requiring clearance have unwittingly been included, the publisher will be pleased to make amends at the earliest possible opportunity.

To avoid the issue of disclosure of answer-related information to candidates, all copyright acknowledgements are reproduced online in the Cambridge International Examinations Copyright Acknowledgements Booklet. This is produced for each series of examinations and is freely available to download at www.cie.org.uk after the live examination series.

Cambridge International Examinations is part of the Cambridge Assessment Group. Cambridge Assessment is the brand name of University of Cambridge Local Examinations Syndicate (UCLES), which is itself a department of the University of Cambridge.