



UNIVERSITY OF CAMBRIDGE INTERNATIONAL EXAMINATIONS  
International General Certificate of Secondary Education


CANDIDATE  
NAME

CENTRE  
NUMBER

--	--	--	--	--	--

CANDIDATE  
NUMBER

--	--	--	--	--



**PHYSICS**

Paper 6 Alternative to Practical

**0625/61**

**May/June 2013**

**1 hour**

Candidates answer on the Question Paper.

No Additional Materials are required.

**READ THESE INSTRUCTIONS FIRST**

Write your Centre number, candidate number and name on all the work you hand in.

Write in dark blue or black pen.

You may use a pencil for any diagrams or graphs.

Do not use staples, paper clips, highlighters, glue or correction fluid.

**DO NOT WRITE IN ANY BARCODES.**

Answer **all** questions.

Electronic calculators may be used.

You may lose marks if you do not show your working or if you do not use appropriate units.

At the end of the examination, fasten all your work securely together.

The number of marks is given in brackets [ ] at the end of each question or part question.

For Examiner's Use	
1	
2	
3	
4	
5	
<b>Total</b>	

This document consists of **11** printed pages and **1** blank page.



1 The IGCSE class is investigating the stability of a block of wood.

Figs. 1.1 and 1.2 show the dimensions of the block.




Fig. 1.1




Fig. 1.2

(a) (i) On Figs. 1.1 and 1.2, measure the height  $h$ , width  $w$  and depth  $d$  of the block.

$h =$  .....

$w =$  .....

$d =$  .....

[2]

(ii) On Fig. 1.2, draw the line **AC**.

[1]

(iii) Measure and record the angle  $\alpha$  between lines **AD** and **AC**.

$\alpha =$  ..... [1]

(b) A student places the block on the edge of the bench, as shown in Fig. 1.3.

For  
Examiner's  
Use

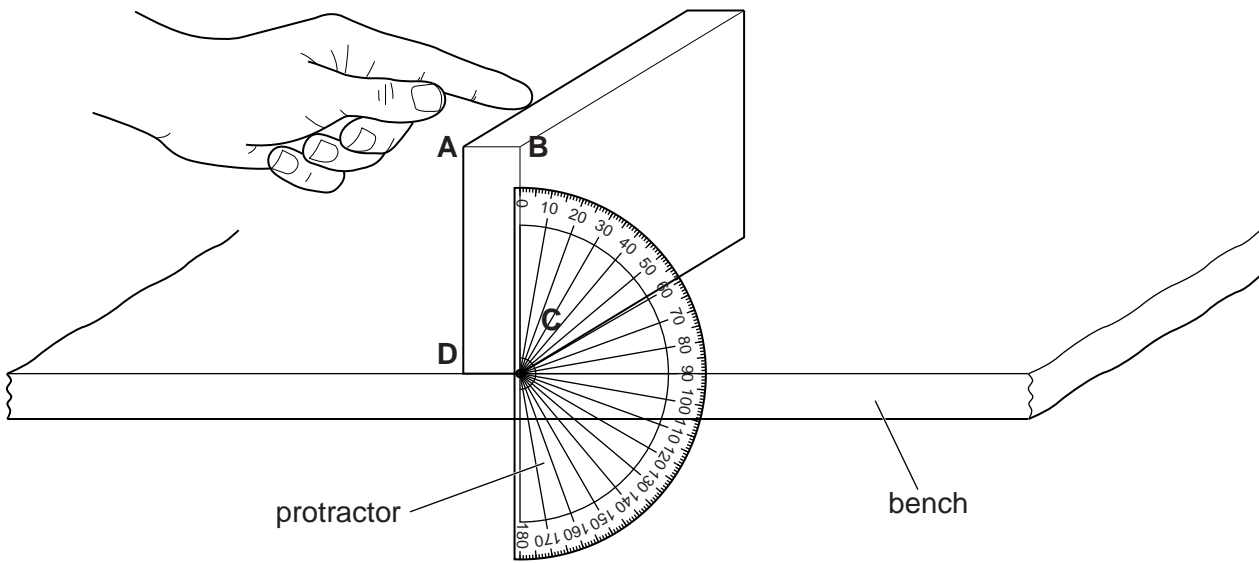


Fig. 1.3

He holds the protractor next to face **ABCD** of the block, as shown in Fig. 1.3. He gently pushes the top of the block (as indicated in Fig. 1.3) so that the block tips over.

He records the angle  $\theta$  between side **BC** of the block and the vertical line on the protractor. The angle  $\theta$  is when the block just tips over. He repeats this procedure a suitable number of times.

Suggest the number of measurements of  $\theta$  that you think would be suitable for this experiment.

number = .....[1]

(c) The student calculates the average value  $\theta_{av}$  of all his values for  $\theta$ .

$$\theta_{av} = \dots\dots\dots 20^\circ$$

He suggests that  $\theta_{av}$  should be equal to  $\alpha$ . State whether the results support this suggestion. Justify your statement by reference to the results.

statement .....

justification .....

.....

.....

[2]

[Total: 7]

2 The IGCSE class is investigating the scale of a thermometer.

(a) Record room temperature  $\theta_R$  as shown on the thermometer in Fig. 2.1.

For  
Examiner's  
Use

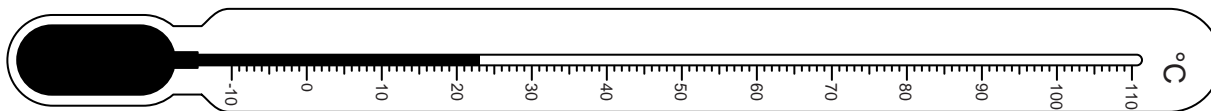


Fig. 2.1

$$\theta_R = \dots\dots\dots [1]$$

A student pours hot water into a beaker. She measures the temperature  $\theta$  of the water in the beaker every 30 s. The readings are shown in Table 2.1.

Table 2.1

$t/$	$\theta/$	$d/$
0	80	
30	74	
60	69	
90	65	
120	63	
150	61	
180	60	

(b) (i) Using Fig. 2.2, measure, and record in the table, the distance  $d$  from the end of the thermometer to the position of the liquid in the thermometer at the first temperature reading in the table.

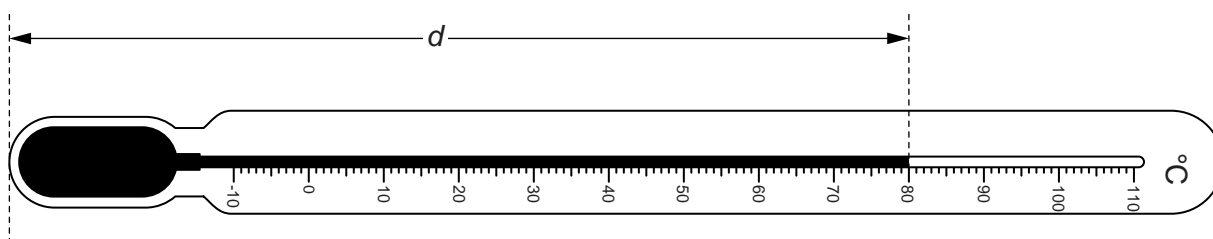


Fig. 2.2

(ii) Repeat the measurement in (b)(i) for all the other temperature readings. [2]

(iii) Complete the column headings in the table. [1]

- (c) The student plotted a graph of  $\theta$  against  $d$ . A sketch of the graph obtained is shown in Fig. 2.3.

For  
Examiner's  
Use

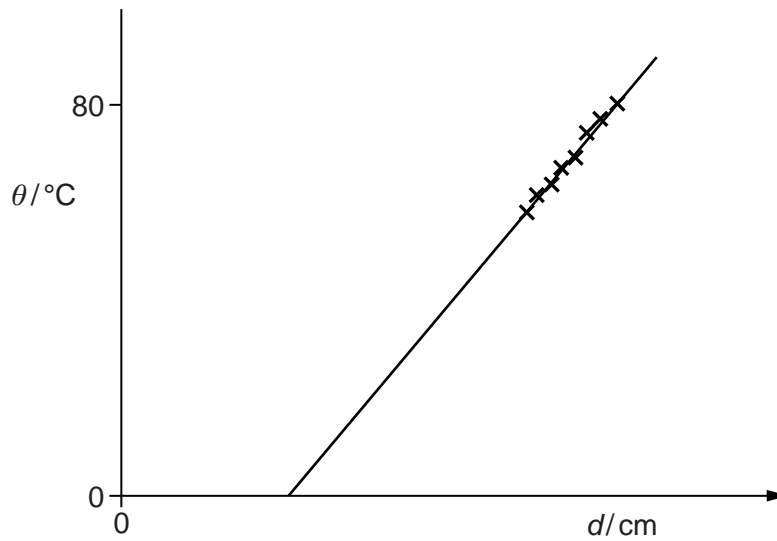


Fig. 2.3

- (i) Explain how the graph line shows that  $\theta$  is not directly proportional to  $d$ .

.....  
 ..... [1]

- (ii) Suggest why, when  $\theta = 0^\circ\text{C}$ , the value of  $d$  is not zero.

.....  
 .....  
 ..... [1]

- (d) Determine, as accurately as possible, the distance  $x$  between the  $1^\circ\text{C}$  marks on the thermometer shown in Fig. 2.2. Show your working.

$x =$  ..... [3]

[Total: 9]

- 3 The IGCSE class is investigating the resistance of a wire.

The circuit used is shown in Fig. 3.1.

For  
Examiner's  
Use

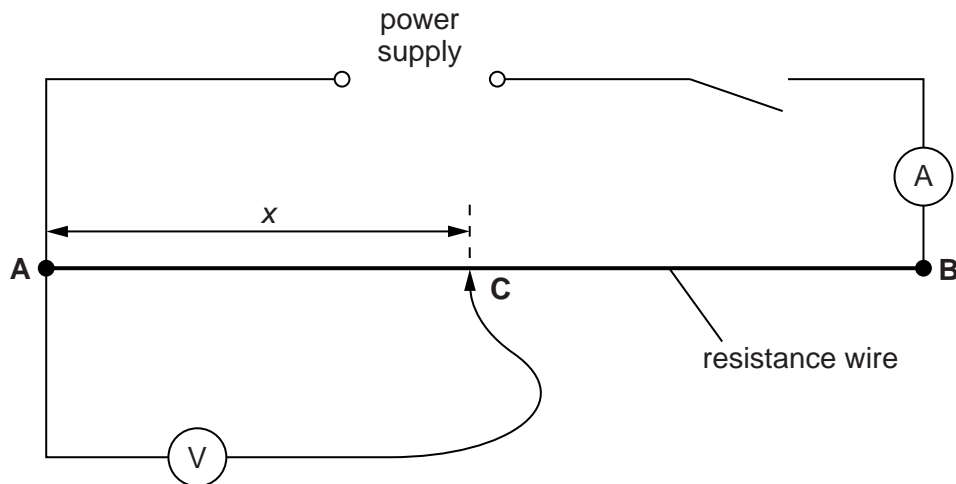


Fig. 3.1

A student moves contact **C** to give a range of values of the length  $x$ . For each length  $x$ , the current  $I$  and potential difference  $V$  are measured and recorded in Table 3.1.

- (a) (i) Calculate the resistance  $R$  of 10.0 cm of the resistance wire using the equation  $R = \frac{V}{I}$ . Record this value of  $R$  in the table.
- (ii) Repeat step (i) for each of the other values of  $x$ .
- (iii) Complete the column headings in the table.


Table 3.1

$x/$	$V/$	$I/$	$R/$
10.0	0.20	0.33	
30.0	0.60	0.33	
50.0	1.01	0.32	
70.0	1.41	0.33	
90.0	1.81	0.33	

[3]

(b) Plot a graph of  $V/V$  ( $y$ -axis) against  $R/\Omega$  ( $x$ -axis).

For  
Examiner's  
Use



[5]

(c) Determine the gradient  $G$  of the graph. Show clearly on the graph how you obtained the necessary information.

$G = \dots\dots\dots$  [3]

[Total: 11]

4 The IGCSE class is investigating the position of the image in a plane mirror.

A student's ray-trace sheet is shown in Fig. 4.1.

For  
Examiner's  
Use

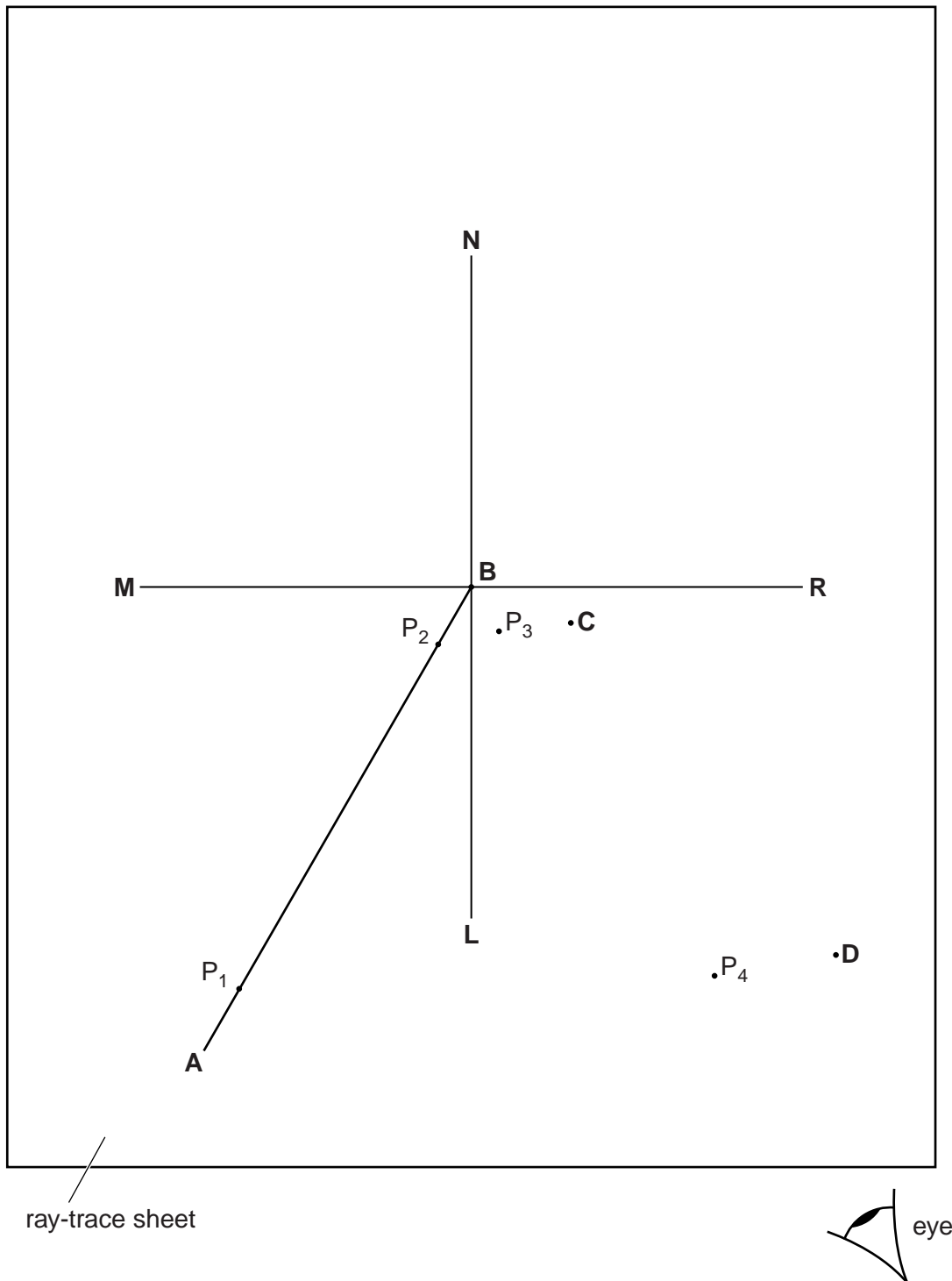


Fig. 4.1



The line **MR** shows the position of a plane mirror. **NL** is the normal at the centre of the mirror.

**AB** marks the position of an incident ray.

The student pushes two pins,  $P_1$  and  $P_2$  into this line. She views the images of pins  $P_1$  and  $P_2$  from the direction indicated by the eye in Fig. 4.1.

She places two pins  $P_3$  and  $P_4$  some distance apart so that pins  $P_4$  and  $P_3$ , and the images of  $P_2$  and of  $P_1$ , all appear exactly one behind the other. The positions of  $P_3$  and  $P_4$  are labelled.

(a) Draw in the line joining the positions of  $P_3$  and  $P_4$ . Continue the line until it crosses **MR** and extends at least 8.0 cm beyond **MR**. [1]

(b) The student repeats the procedure without moving pin  $P_1$  but using a different angle of incidence. On Fig. 4.1, the new positions of pins  $P_3$  and  $P_4$  are marked **C** and **D**.

(i) Draw in the line joining the positions **C** and **D**. Continue the line until it extends at least 8.0 cm beyond **MR**.

(ii) Label with a **Y** the point where the two lines beyond **MR** cross. [1]

(c) (i) Draw a line from  $P_1$  to **MR** that meets **MR** at a right angle. Measure and record the length  $a$  of this line.

$a = \dots\dots\dots$

(ii) Draw a line from the point labelled **Y** to **MR** that meets **MR** at a right angle. Measure and record the length  $b$  of this line.

$b = \dots\dots\dots$

[2]

(d) A student suggests that the length of  $a$  should equal the length of  $b$ .

State whether your results support this suggestion. Justify your statement by reference to your results.

statement .....

justification .....

.....

.....

[2]

(e) Suggest a precaution that you would take, when placing the pins, in order to obtain reliable results.

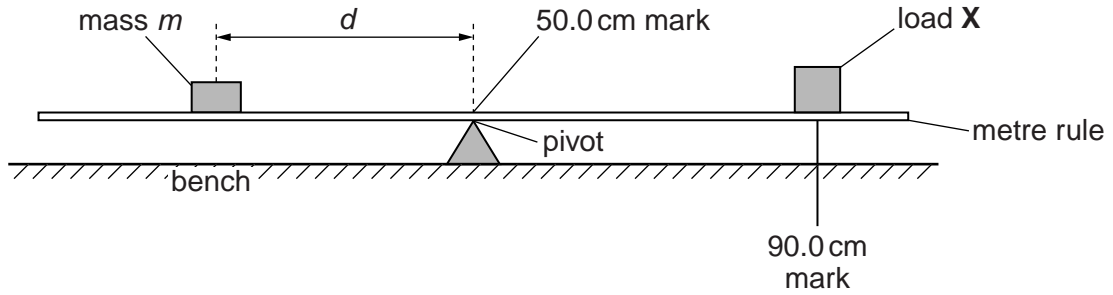
.....

..... [1]

[Total: 7]

5 The IGCSE class is determining the mass of a load **X** using a balancing method.

Fig. 5.1 shows the apparatus.



**Fig. 5.1**

The centre of the load **X** is fixed at the 90.0 cm mark on the rule.

A student uses a range of values of the mass  $m$  and determines the distance  $d$  from the pivot where the mass must be placed to balance the rule.

The readings are shown in Table 5.1.

**Table 5.1**

$m/g$	$d/cm$
40	30.2
50	23.9
60	20.0
70	17.1
80	15.1

(a) Calculate the distance  $x$  between the centre of the load **X** and the centre of the rule.

$x = \dots\dots\dots [1]$

(b) Suggest a reason for the student using a range of  $m$  values.

.....  
 .....  
 ..... [1]

- (c) Using each set of readings and the value of  $x$ , the student calculates values for the mass of the load **X**.

He writes his results: 30.2 g, 29.875 g, 30 g, 29.925 g, 30.2 g.

Use these results to calculate an average value for the mass of **X** and give it to a suitable number of significant figures for this type of experiment.

average value for the mass of **X** = ..... [2]

- (d) This type of balancing experiment is difficult to carry out.

Suggest one practical difficulty and one way to try to overcome the difficulty. You may draw a diagram, if you wish.

practical difficulty .....

.....

.....

way to overcome the difficulty

.....

.....

[2]

[Total: 6]

**BLANK PAGE**

---

Permission to reproduce items where third-party owned material protected by copyright is included has been sought and cleared where possible. Every reasonable effort has been made by the publisher (UCLES) to trace copyright holders, but if any items requiring clearance have unwittingly been included, the publisher will be pleased to make amends at the earliest possible opportunity.

University of Cambridge International Examinations is part of the Cambridge Assessment Group. Cambridge Assessment is the brand name of University of Cambridge Local Examinations Syndicate (UCLES), which is itself a department of the University of Cambridge.