



Cambridge IGCSE™

BIOLOGY

0610/12

Paper 1 Multiple Choice (Core)

May/June 2023

45 minutes

You must answer on the multiple choice answer sheet.

You will need: Multiple choice answer sheet
Soft clean eraser
Soft pencil (type B or HB is recommended)

INSTRUCTIONS

- There are **forty** questions on this paper. Answer **all** questions.
- For each question there are four possible answers **A**, **B**, **C** and **D**. Choose the **one** you consider correct and record your choice in soft pencil on the multiple choice answer sheet.
- Follow the instructions on the multiple choice answer sheet.
- Write in soft pencil.
- Write your name, centre number and candidate number on the multiple choice answer sheet in the spaces provided unless this has been done for you.
- Do **not** use correction fluid.
- Do **not** write on any bar codes.
- You may use a calculator.

INFORMATION

- The total mark for this paper is 40.
- Each correct answer will score one mark.
- Any rough working should be done on this question paper.

This document has **16** pages. Any blank pages are indicated.



- 1 Living animals release carbon dioxide.

This is an example of which life process?

- A excretion
- B movement
- C nutrition
- D sensitivity

- 2 Some statements about species are given.

- 1 Members of a species all look identical.
- 2 Members of a species belong to the same genus.
- 3 Members of a species can produce fertile offspring.
- 4 Species are named using an international system.

Which statements are correct?

- A 1, 2, 3 and 4
- B 1, 2 and 3 only
- C 2 and 4 only
- D 2, 3 and 4 only

- 3 The table shows some features of different animals.

Which animal is a reptile?

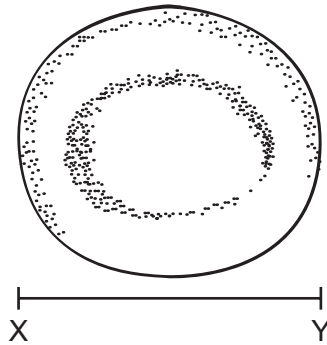
| | wings | hair | scales |
|---|-------|------|--------|
| A | x | x | ✓ |
| B | x | x | x |
| C | ✓ | x | ✓ |
| D | x | ✓ | x |

- 4 Which structures are found in the cells of all living organisms?

- 1 cell membrane
- 2 chloroplast
- 3 cytoplasm

- A 1, 2 and 3
- B 1 and 2 only
- C 1 and 3 only
- D 2 and 3 only

- 5 A diagram of a human red blood cell is shown. The length of line XY on the diagram is 40 mm. The actual width of the cell is 0.008 mm.



What is the magnification of the diagram?

- A $\times 500$ B $\times 5000$ C $\times 50\,000$ D $\times 500\,000$

- 6 Which statements are correct for **both** diffusion and osmosis?

| | involves movement of water only | requires energy from respiration | molecules move from higher concentration to lower concentration |
|---|---------------------------------|----------------------------------|---|
| A | ✓ | ✓ | ✓ |
| B | ✓ | ✓ | ✗ |
| C | ✗ | ✗ | ✓ |
| D | ✗ | ✗ | ✗ |

key

✓ = yes

✗ = no

- 7 What is a role of water in digestion?

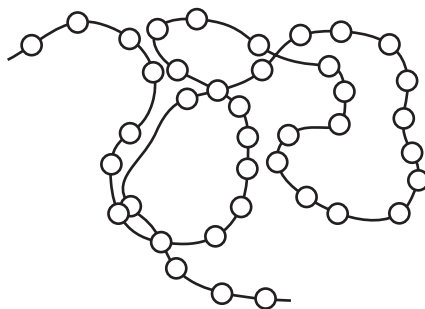
- A It is an enzyme.
B It is a solvent.
C It is soluble.
D It is a mineral.

- 8 The concentration of sodium ions in the soil is lower than the concentration inside root hair cells.

Which process will be used when sodium ions are taken into root hair cells from the soil?

- A active transport
B diffusion
C osmosis
D transpiration

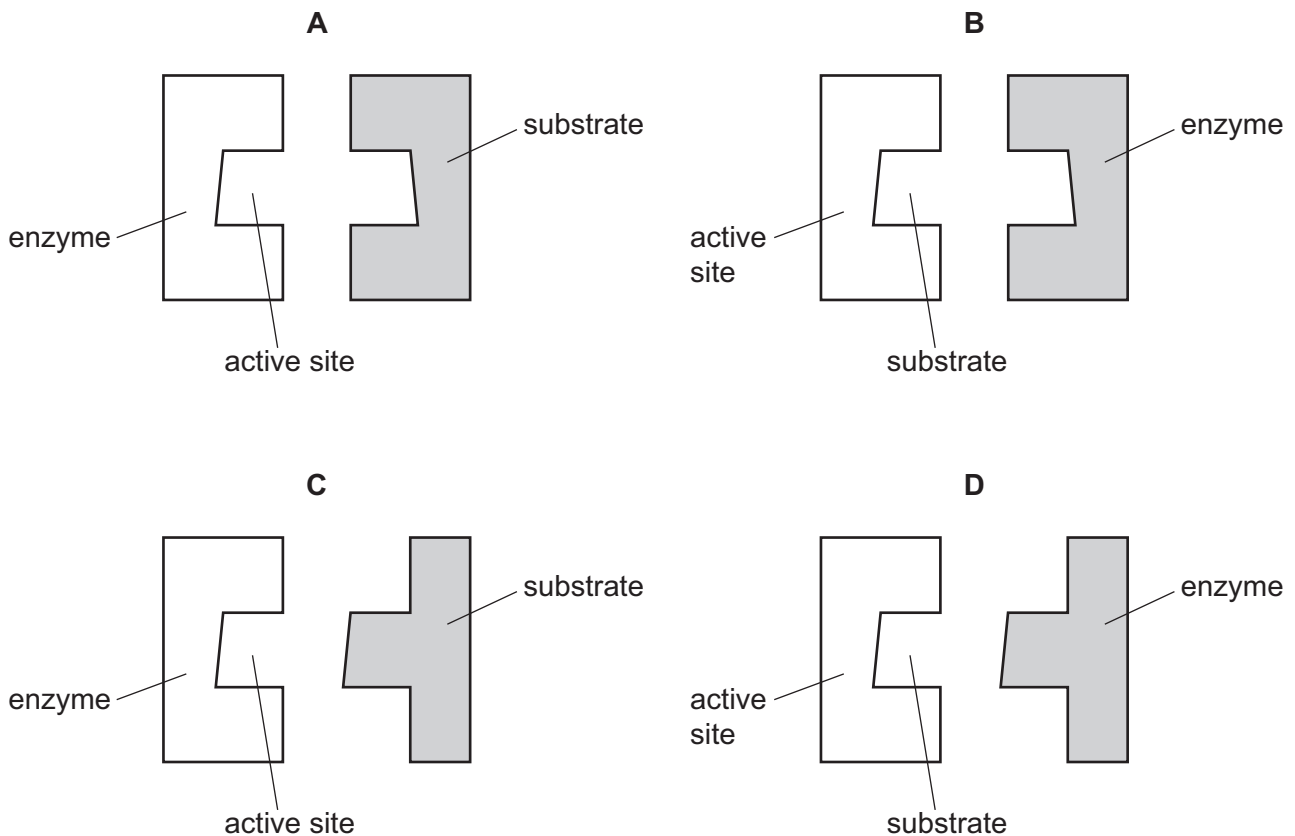
- 9 The diagram represents a protein molecule.



What do the small circles represent?

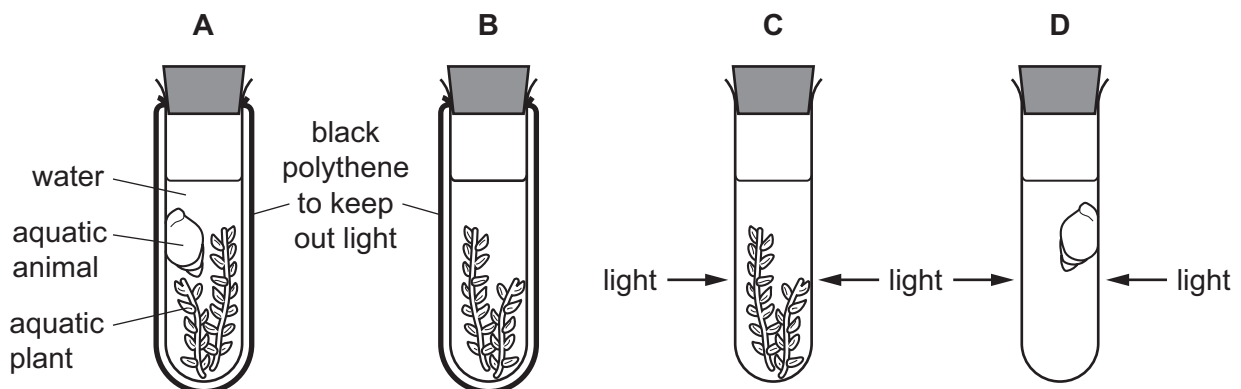
- A amino acids
 - B fatty acids
 - C glycerol
 - D simple sugars
- 10 Which processes depend on the action of enzymes?
- 1 digestion
 - 2 osmosis
 - 3 respiration
- A 1 and 2 B 1 and 3 C 1 only D 2 and 3

11 Which diagram of an enzyme, active site and substrate is correct?



12 Four test-tubes are set up as shown.

Which test-tube contains the least carbon dioxide after one hour?



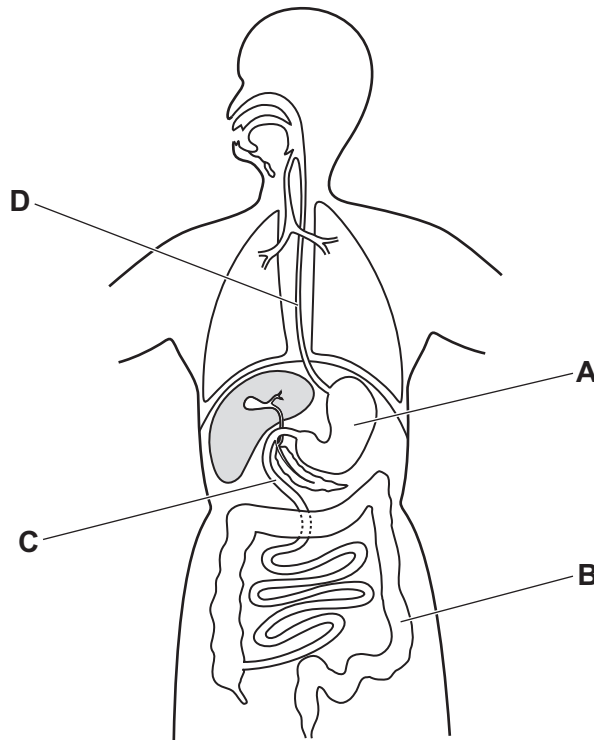
13 Which row shows the uses of some carbohydrates in plants?

| | glucose | starch | sucrose |
|----------|----------------|----------------|----------------|
| A | cell walls | transport | energy storage |
| B | energy storage | cell walls | respiration |
| C | respiration | energy storage | transport |
| D | transport | respiration | cell walls |

14 The lack of which component of a balanced diet will lead to the development of scurvy?

- A** calcium
- B** iron
- C** vitamin C
- D** vitamin D

15 Which structure is the duodenum?



- 16** The food label is from a packet of cereal.

The label can help someone who is concerned about their diet.

| Nutrition | |
|--------------------|--------------------|
| Typical values | 100 g contains |
| Energy | 985 kJ 235 kcal |
| Fat | 1.5 g |
| of which saturates | 0.3 g |
| Carbohydrate | 45.5 g |
| of which sugars | 3.8 g |
| Fibre | 2.8 g |
| Protein | 7.7 g |
| Salt | 0.5 g |
| | |

A person eats 45 g of cereal.

One of the food types listed in the label can help prevent constipation.

How many grams of this food type does the person eat?

- A** 1.3 g **B** 2.8 g **C** 3.5 g **D** 7.7 g

- 17** Which pathway is taken by water through a plant?

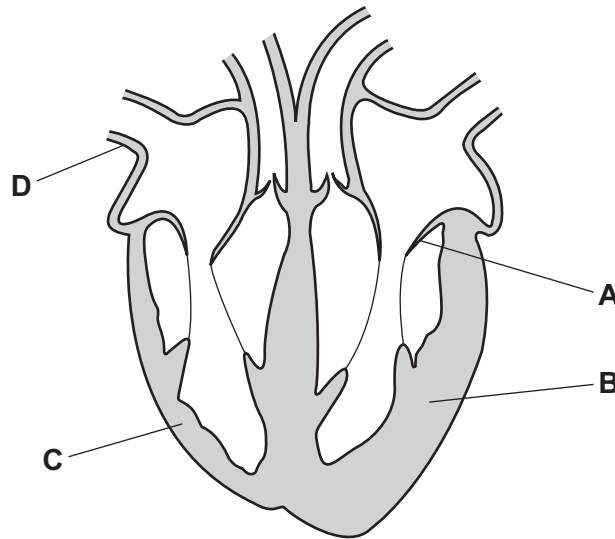
- A** root hair → root cortex → xylem → mesophyll → stomata
B root hair → xylem → mesophyll → root cortex → stomata
C stomata → root cortex → xylem → mesophyll → root hair
D stomata → root hair → root cortex → xylem → mesophyll

- 18** Which row shows the transpiration rate for the conditions described?

| | wind speed | atmospheric temperature | transpiration rate |
|----------|------------|-------------------------|--------------------|
| A | low | low | fast |
| B | high | high | slow |
| C | low | high | slow |
| D | low | low | slow |

19 The diagram shows the human heart.

Which label shows the left ventricle?



20 Which row shows the features of an artery or a vein?

| | blood vessel | diameter of lumen | thickness of wall |
|----------|--------------|-------------------|-------------------|
| A | artery | large | thick |
| B | artery | small | thin |
| C | vein | large | thin |
| D | vein | small | thick |

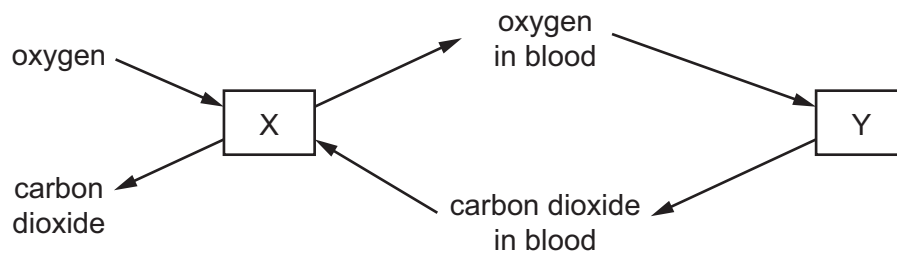
21 What are features of gas exchange surfaces in animals?

- A** thick-walled and large surface area
- B** thick-walled and small surface area
- C** thin-walled and small surface area
- D** thin-walled and large surface area

22 Which chemical can be used to show the presence of carbon dioxide gas?

- A** Benedict's solution
- B** biuret solution
- C** ethanol
- D** limewater

- 23** The diagram represents the exchange of gases during breathing and during respiration in the body.

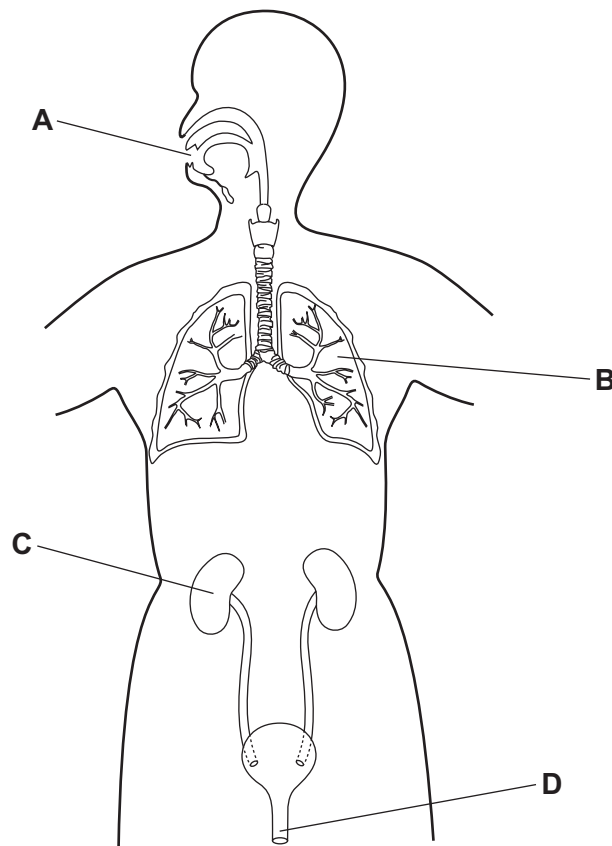


What is represented by X?

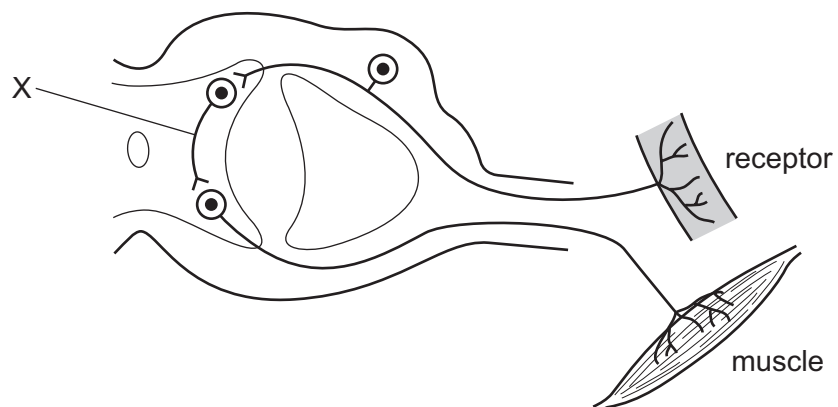
- A** heart
 - B** kidneys
 - C** liver
 - D** lungs
- 24** Which molecule is produced by anaerobic respiration in yeast?
- A** carbon dioxide
 - B** lactic acid
 - C** oxygen
 - D** water

25 The diagram shows the human body and some of its organs.

Which structure removes urea from the blood?



26 The diagram shows the structures in a reflex arc.



What is X?

- A** effector
- B** relay neurone
- C** sensory neurone
- D** synapse

- 27 Changes in light intensity cause changes in the diameter of the pupil in the eye.

Which rows show the pupil reflex?

| | light intensity | pupil diameter |
|---|-----------------|----------------|
| 1 | high | increases |
| 2 | high | decreases |
| 3 | low | increases |
| 4 | low | decreases |

- A 1 and 3 B 1 and 4 C 2 and 3 D 2 and 4

- 28 A hormone is injected into a person to reduce their blood glucose concentration.

Which endocrine gland is **not** functioning properly in a person who needs to have this injection?

- A adrenal gland
B ovary
C pancreas
D testis

- 29 The table shows which antibiotics are effective against different types of bacteria.

The shaded areas show the antibiotic is effective against that type of bacteria.

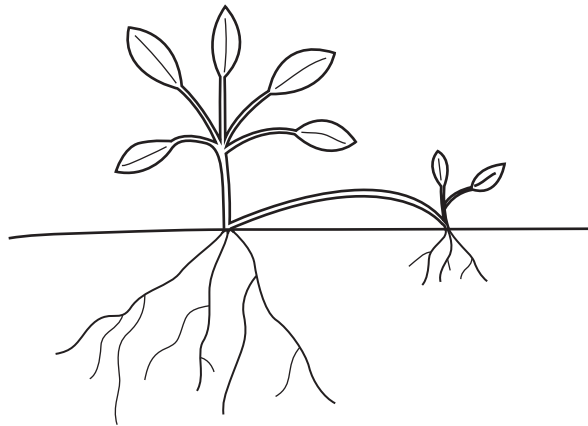
| antibiotic | type of bacteria | | | |
|------------|------------------|----------------------|--------------------|------------------|
| | MRSA | <i>Streptococcus</i> | <i>Pseudomonas</i> | <i>Anaerobes</i> |
| 1 | | | | |
| 2 | | | | |
| 3 | | | | |
| 4 | | | | |
| 5 | | | | |
| 6 | | | | |

A person has a disease caused by a type of *Streptococcus* bacteria and a second infection caused by a type of *Pseudomonas* bacteria.

Which antibiotic should be taken?

- A 1 or 6 B 2 or 4 C 3 or 4 D 5 or 6

30 The diagram shows one way that a plant can reproduce.



What is a feature of this type of reproduction?

- A The offspring show genetic variation.
- B Only one parent is required.
- C Offspring are easily dispersed over a wide area.
- D Pollination by insects is required.

31 Which human characteristics are inherited?

| | blood group | eye colour | language | sex |
|---|-------------|------------|----------|-----|
| A | ✓ | ✓ | x | ✓ |
| B | ✓ | ✓ | ✓ | x |
| C | x | ✓ | x | ✓ |
| D | ✓ | x | ✓ | ✓ |

key

✓ = inherited

x = not inherited

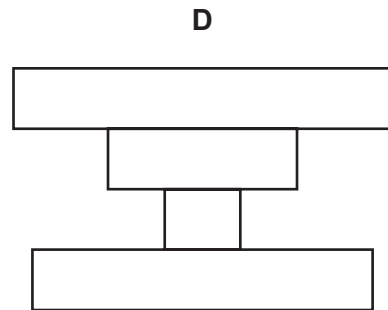
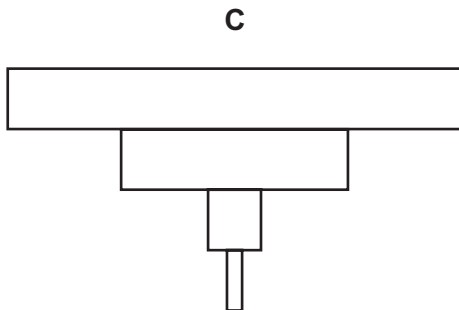
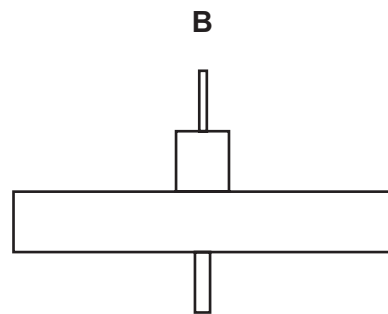
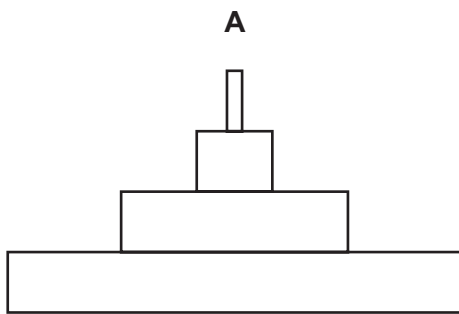
32 In a sperm cell, which structure contains enzymes that can digest the jelly coat of an egg cell?

- A acrosome
- B flagellum
- C mitochondria
- D nucleus

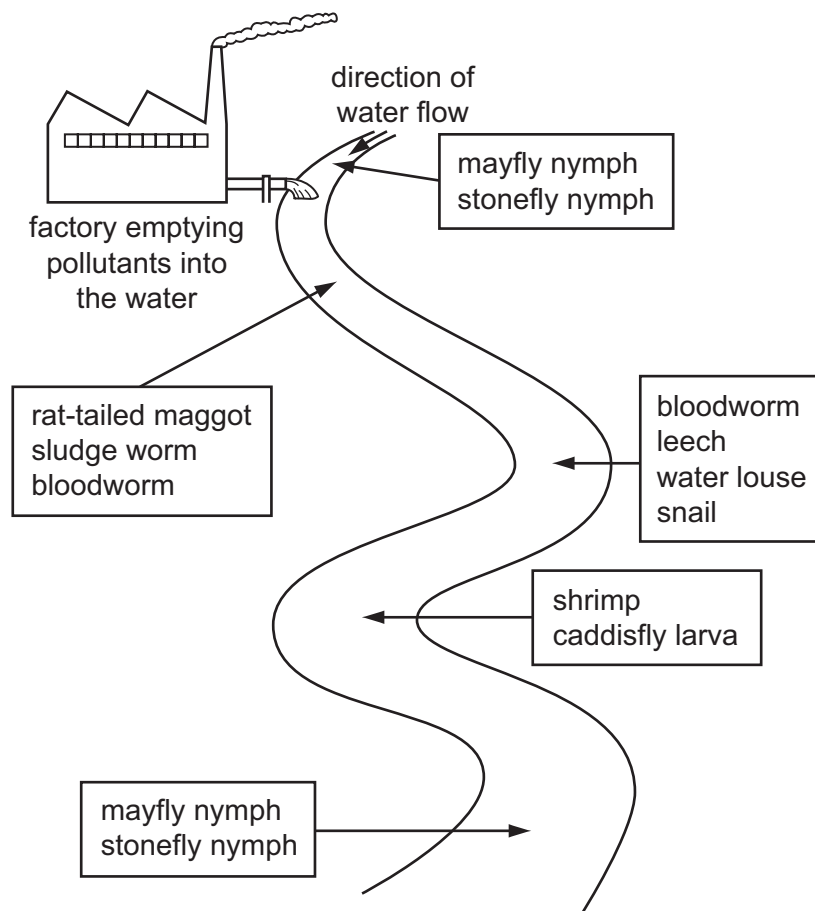
- 33** When breeding, which pair of parents will be pure-breeding for a particular characteristic?
- A** a heterozygous and a homozygous individual
 - B** two heterozygous individuals
 - C** two homozygous individuals
 - D** two individuals with the same phenotype
- 34** In a pea plant, the allele for round seeds, R, is dominant to the allele for wrinkled seeds, r.
- If plants with the genotype Rr are crossed, what are the likely proportions of offspring?
- A** all with round seeds
 - B** all with wrinkled seeds
 - C** 1 with round seeds : 1 with wrinkled seeds
 - D** 3 with round seeds : 1 with wrinkled seeds
- 35** Which definition of continuous variation is correct?
- A** variation that results in a limited number of phenotypes between two extremes
 - B** variation that results in a limited number of phenotypes with no intermediates
 - C** variation that results in a range of phenotypes between two extremes
 - D** variation that results in a range of phenotypes with no intermediates
- 36** Which term is used to describe an organism that makes its own organic nutrients?
- A** carnivore
 - B** decomposer
 - C** herbivore
 - D** producer
- 37** What is the principal source of energy for most food chains?
- A** carbon dioxide gas
 - B** glucose
 - C** oxygen
 - D** sunlight

- 38** A single tree is food for a large population of caterpillars. Several small birds eat the caterpillars. The small birds are eaten by a bird of prey.

Which is the pyramid of biomass?



- 39 The diagram shows the results of a survey on the types of animals found along a stretch of river near to a factory.



Which animal lives in the least polluted water?

- A bloodworm
 - B caddisfly larva
 - C leech
 - D stonefly nymph
- 40 Bacteria are useful for manufacturing products for human use.

Which statement explains why they are useful?

- A Bacteria can be grown without nutrients.
- B Bacteria do not have a nucleus.
- C Bacteria infect human cells.
- D Bacteria reproduce very rapidly.

BLANK PAGE

Permission to reproduce items where third-party owned material protected by copyright is included has been sought and cleared where possible. Every reasonable effort has been made by the publisher (UCLES) to trace copyright holders, but if any items requiring clearance have unwittingly been included, the publisher will be pleased to make amends at the earliest possible opportunity.

To avoid the issue of disclosure of answer-related information to candidates, all copyright acknowledgements are reproduced online in the Cambridge Assessment International Education Copyright Acknowledgements Booklet. This is produced for each series of examinations and is freely available to download at www.cambridgeinternational.org after the live examination series.

Cambridge Assessment International Education is part of Cambridge Assessment. Cambridge Assessment is the brand name of the University of Cambridge Local Examinations Syndicate (UCLES), which is a department of the University of Cambridge.