



Cambridge IGCSE™

CANDIDATE
NAME

--

CENTRE
NUMBER

--	--	--	--	--

CANDIDATE
NUMBER

--	--	--	--



MATHEMATICS

0580/22

Paper 2 (Extended)

October/November 2021

1 hour 30 minutes

You must answer on the question paper.

You will need: Geometrical instruments

INSTRUCTIONS

- Answer **all** questions.
- Use a black or dark blue pen. You may use an HB pencil for any diagrams or graphs.
- Write your name, centre number and candidate number in the boxes at the top of the page.
- Write your answer to each question in the space provided.
- Do **not** use an erasable pen or correction fluid.
- Do **not** write on any bar codes.
- You should use a calculator where appropriate.
- You may use tracing paper.
- You must show all necessary working clearly.
- Give non-exact numerical answers correct to 3 significant figures, or 1 decimal place for angles in degrees, unless a different level of accuracy is specified in the question.
- For π , use either your calculator value or 3.142.

INFORMATION

- The total mark for this paper is 70.
- The number of marks for each question or part question is shown in brackets [].

This document has **12** pages.

- 1 The temperature at midnight is -8.5°C .
The temperature at 11 am is -1°C .

Work out the difference between the temperature at midnight and the temperature at 11 am.

..... $^{\circ}\text{C}$ [1]

- 2 The stem-and-leaf diagram shows the age, in years, of each of 15 women.

3	1 5 8 9
4	1 1 2 3 5 6 9
5	0 2 3 8

Key: 3 | 1 represents 31 years

Complete these statements.

The modal age is

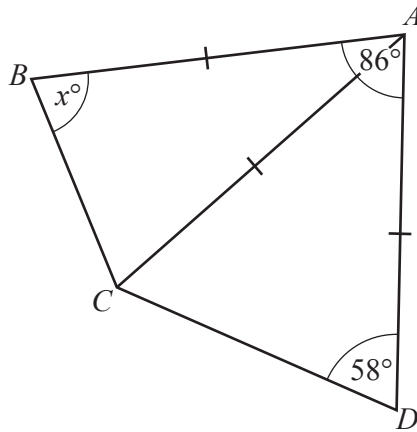
The median age is

The percentage of women that are older than 51 years is%. [3]

- 3 Change 2.15 hours into minutes.

..... min [1]

4



NOT TO SCALE

Triangle ABC and triangle ACD are isosceles.
 Angle $DAB = 86^\circ$ and angle $ADC = 58^\circ$.

Find the value of x .

$x = \dots\dots\dots$ [3]

- 5 Angelique rents a room for a party.
 The cost of renting the room is \$15.50 for the first hour and then \$7.25 for each additional hour.
 She pays \$95.25 in total.

Work out the total number of hours she rents the room for.

$\dots\dots\dots$ hours [3]

- 6 Without using a calculator, work out $\frac{1}{3} \div \frac{7}{6} + \frac{1}{5}$.

You must show all your working and give your answer as a fraction in its simplest form.

..... [4]

- 7 Katy has 5 white flowers, x red flowers and $(2x + 1)$ yellow flowers.
She picks a flower at random.

The probability that it is white is $\frac{1}{12}$.

Find the probability that it is yellow.

..... [4]

- 8 Calculate $\sqrt[4]{39\frac{1}{16}}$.

..... [1]

- 9 2.1×10^{-1} 0.2 22% $\sqrt{0.2}$ $\frac{24}{1000}$

Write these values in order of size, starting with the smallest.

..... < < < < [2]
smallest

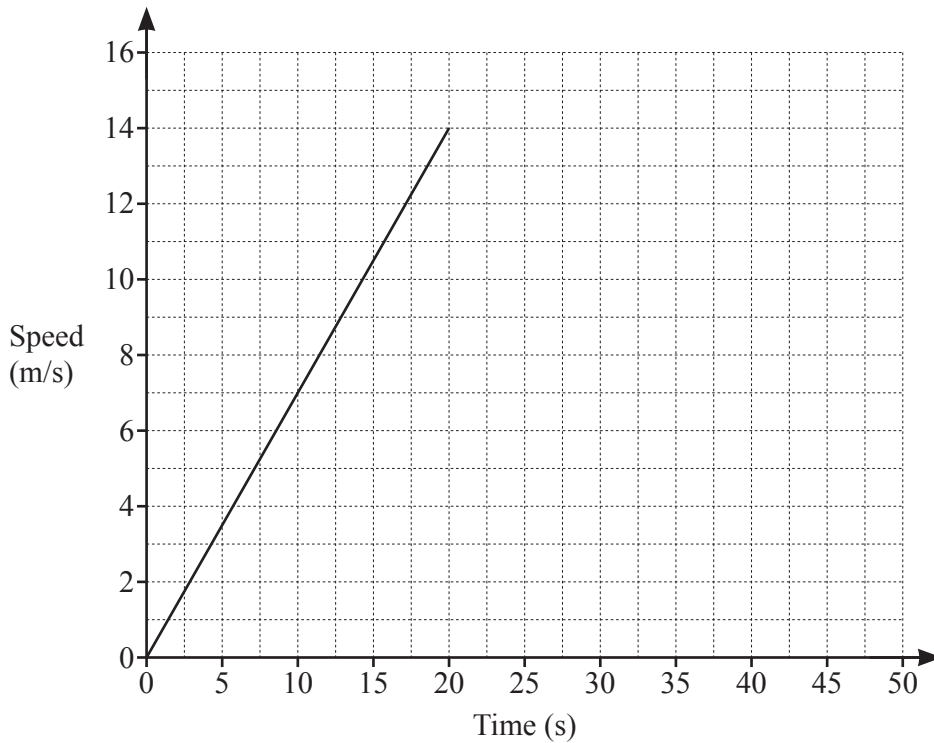
- 10 The interior angle of a regular polygon is 156° .

Work out the number of sides of this polygon.

..... [2]

- 11 A car starts its journey by accelerating from rest at a constant rate of 0.7 m/s^2 for 20 seconds, before reaching a constant speed of 14 m/s.
 It then travels at 14 m/s for a distance of 210 m.
 The car then decelerates at a constant rate of 1.4 m/s^2 , before coming to a stop.

On the grid, complete the speed–time graph for the car’s journey.



[3]

12 The table shows the first five terms of sequences A , B and C .

	1st term	2nd term	3rd term	4th term	5th term	n th term
Sequence A	8	3	-2	-7	-12	
Sequence B	2	$\frac{3}{2}$	$\frac{4}{3}$	$\frac{5}{4}$	$\frac{6}{5}$	
Sequence C	$\frac{1}{2}$	1	2	4	8	

Complete the table to show the n th term of each sequence.

[5]

13 (a) Write 243×27^{2n} as a single power of 3 in terms of n .

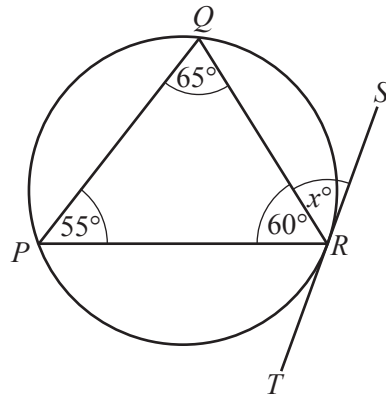
..... [2]

(b) $k = 2 \times 3^2 \times p^3$, where p is a prime number greater than 3.

Write $6k^2$ as a product of prime factors in terms of p .

..... [2]

14



NOT TO SCALE

P , Q and R are points on a circle.
 ST is a tangent to the circle at R .

- (a) Write down the value of x .
 Give a geometrical reason for your answer.

$x = \dots\dots\dots$ because $\dots\dots\dots$
 $\dots\dots\dots$ [2]

- (b) Another tangent from the point S touches the circle at V .

Give a geometrical reason why triangle SVR is isosceles.

$\dots\dots\dots$
 $\dots\dots\dots$ [1]

- 15 (a) A is the point $(3, 16)$ and B is the point $(8, 31)$.

Find the equation of the line that passes through A and B .
 Give your answer in the form $y = mx + c$.

$y = \dots\dots\dots$ [3]

- (b) The line CD has equation $y = 0.5x - 11$.

Find the gradient of a line that is perpendicular to the line CD .

$\dots\dots\dots$ [1]

- 16 Sachin picks a number at random from the first three multiples of 3. He then picks a number at random from the first three prime numbers. He adds the two numbers to find a score.

(a) Complete the table.

		Multiples of 3		
		3		9
Prime numbers	2	5		11
	3	6		

[2]

- (b) Given that the score is even, find the probability that one of the numbers he picks is 9.

..... [2]

- 17 Solve.

$$(5x - 3)(2x + 7) = 0$$

$x = \dots\dots\dots$ or $x = \dots\dots\dots$ [1]

- 18 Solve the simultaneous equations.
You must show all your working.

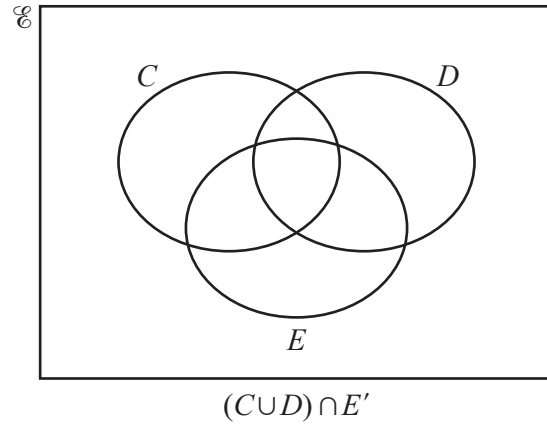
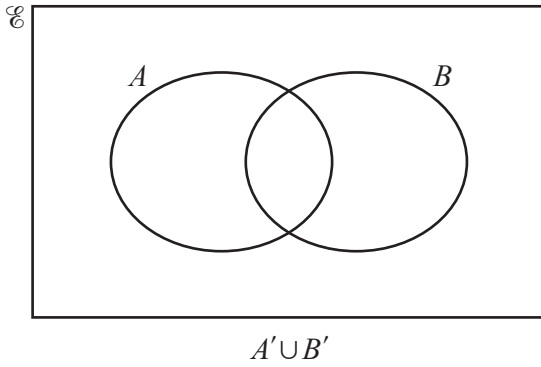
$$y = x^2 - 9x + 21$$

$$y = 2x - 3$$

$$x = \dots\dots\dots y = \dots\dots\dots$$

$$x = \dots\dots\dots y = \dots\dots\dots [5]$$

19 In these Venn diagrams, shade the given regions.



[2]

20 $f(x) = 2^{x-3}$ $g(x) = 2x - 1$ $h(x) = \frac{5}{x-4}$

(a) Find $ff(6)$.

..... [2]

(b) Find $g^{-1}g(x+21)$.

..... [1]

(c) Find x when $f(x) = h(84)$.

$x =$ [2]

21 Expand and simplify.

$$(x - 3)^2(2x + 5)$$

..... [3]

22 Solve the equation $7 \sin x + 2 = 0$ for $0^\circ \leq x \leq 360^\circ$.

..... [3]

Question 23 is printed on the next page.

23 Simplify.

$$\frac{3xy + 36y - 5x - 60}{2x^2 - 288}$$

..... [4]

Permission to reproduce items where third-party owned material protected by copyright is included has been sought and cleared where possible. Every reasonable effort has been made by the publisher (UCLES) to trace copyright holders, but if any items requiring clearance have unwittingly been included, the publisher will be pleased to make amends at the earliest possible opportunity.

To avoid the issue of disclosure of answer-related information to candidates, all copyright acknowledgements are reproduced online in the Cambridge Assessment International Education Copyright Acknowledgements Booklet. This is produced for each series of examinations and is freely available to download at www.cambridgeinternational.org after the live examination series.

Cambridge Assessment International Education is part of the Cambridge Assessment Group. Cambridge Assessment is the brand name of the University of Cambridge Local Examinations Syndicate (UCLES), which itself is a department of the University of Cambridge.