



# Cambridge IGCSE™

CANDIDATE  
NAME

--

CENTRE  
NUMBER

--	--	--	--	--

CANDIDATE  
NUMBER

--	--	--	--



**MATHEMATICS**

**0580/23**

Paper 2 (Extended)

**May/June 2022**

**1 hour 30 minutes**

You must answer on the question paper.

You will need: Geometrical instruments

## INSTRUCTIONS

- Answer **all** questions.
- Use a black or dark blue pen. You may use an HB pencil for any diagrams or graphs.
- Write your name, centre number and candidate number in the boxes at the top of the page.
- Write your answer to each question in the space provided.
- Do **not** use an erasable pen or correction fluid.
- Do **not** write on any bar codes.
- You should use a calculator where appropriate.
- You may use tracing paper.
- You must show all necessary working clearly.
- Give non-exact numerical answers correct to 3 significant figures, or 1 decimal place for angles in degrees, unless a different level of accuracy is specified in the question.
- For  $\pi$ , use either your calculator value or 3.142.

## INFORMATION

- The total mark for this paper is 70.
- The number of marks for each question or part question is shown in brackets [ ].

This document has **16** pages. Any blank pages are indicated.

- 1 The probability of picking a red sweet from a bag is 0.05 .

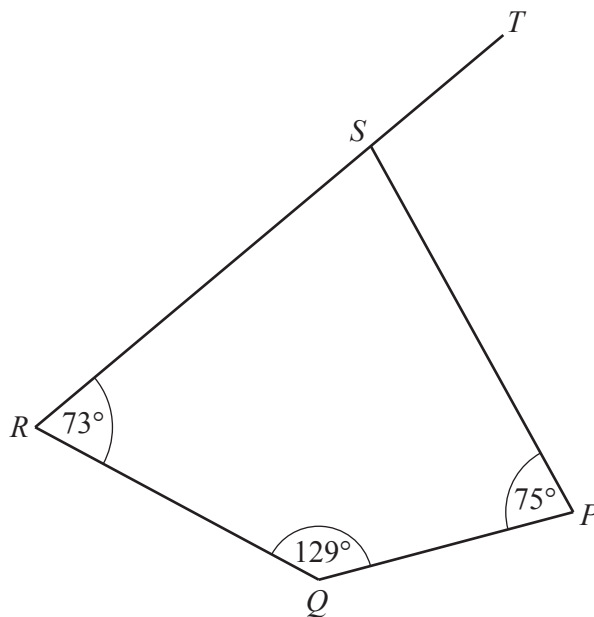
Find the probability of not picking a red sweet.

..... [1]

- 2 Work out the value of  $\frac{mk^3}{\sqrt{3}}$  when  $m = 4$  and  $k = 7$ .

..... [2]

3



NOT TO SCALE

*PQRS* is a quadrilateral.  
*RST* is a straight line.

Find angle *PST*.

Angle *PST* = ..... [2]

4 These are the masses, in kg, of 12 parcels.

0.3 0.4 1.2 0.8 1.1 2.1 1.7 1.8 1.2 2.3 0.7 1.1

(a) Complete the stem-and-leaf diagram for the 12 parcels.

0	3 4
1	
2	

Key: 0 | 3 represents 0.3 kg

[2]

(b) Find the median.

..... kg [1]

5 The  $n$ th term of a sequence is  $n^2 - 1$ .

Find the first three terms of this sequence.

....., ....., ..... [2]

6 Simplify.

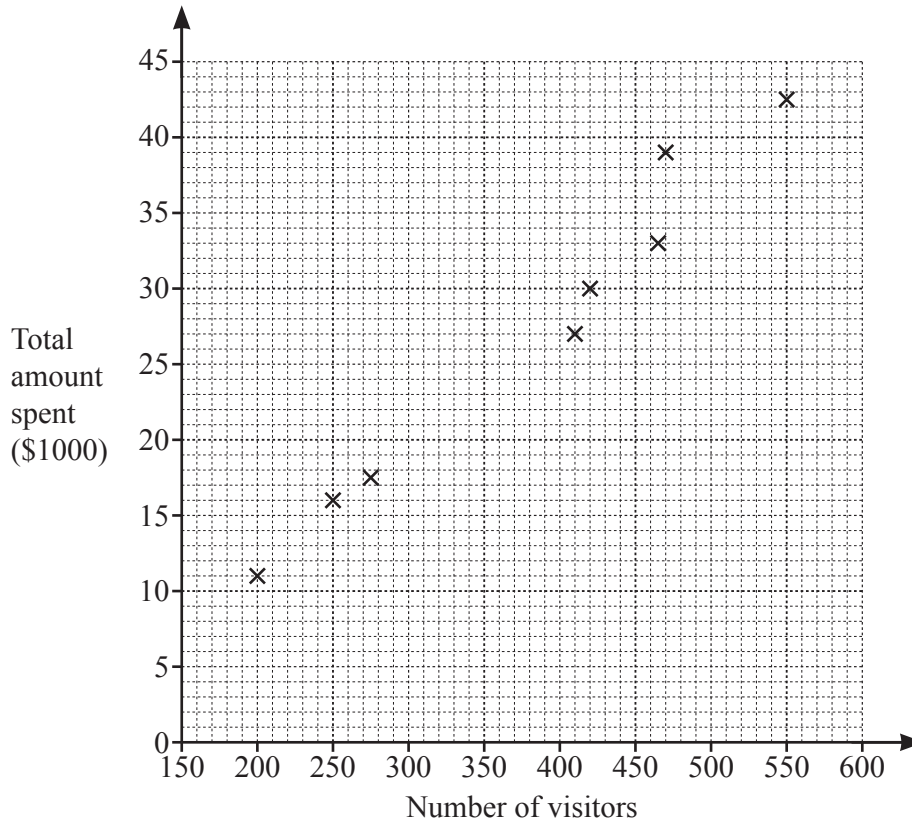
(a)  $y^3 \div y^5$

..... [1]

(b)  $7x^0$

..... [1]

- 7 The scatter diagram shows the number of visitors and the total amount spent, in thousands of dollars, at a zoo on each of eight days.



- (a) On one of the eight days there are 410 visitors.

Find the total amount spent by visitors during this day.

\$ ..... [1]

- (b) Information for the ninth day is shown in the table.

Number of visitors	175
Total amount spent (\$1000)	9

Plot this information on the scatter diagram. [1]

- (c) Draw a line of best fit on the scatter diagram. [1]

- (d) On the tenth day the total amount spent is \$22 000.

Estimate the number of visitors on this day.

..... [1]

8 Without using a calculator, work out  $\frac{2}{9} \div \frac{5}{6}$ .

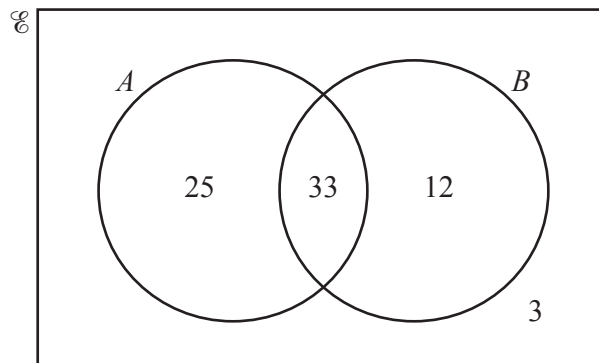
You must show all your working and give your answer as a fraction in its simplest form.

..... [2]

9 Change 300 m/min to km/h.

..... km/h [2]

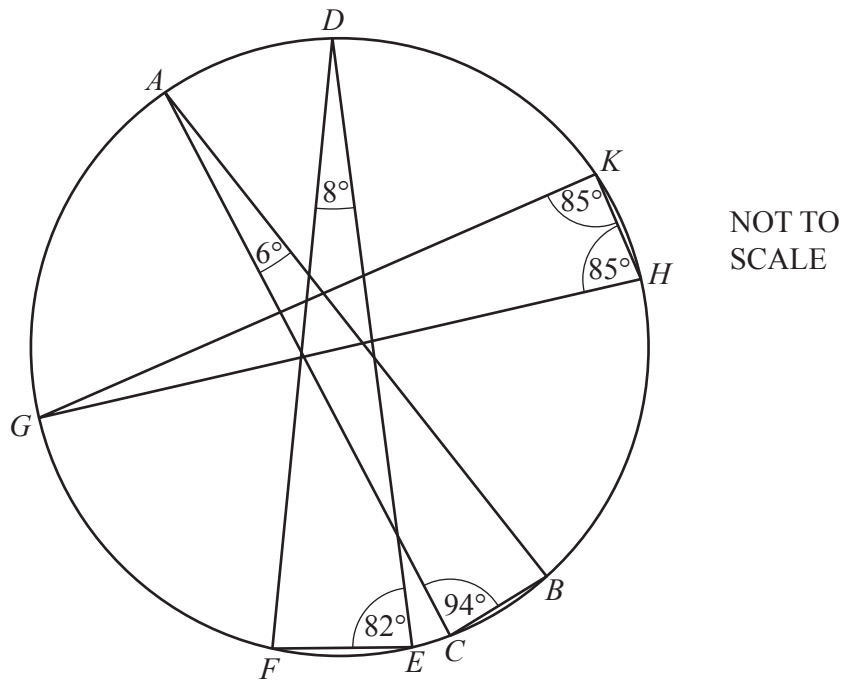
10



Find  $n(A \cap B)$ .

..... [1]

- 11  $ABC$ ,  $DEF$  and  $GHK$  are triangles with all vertices on the circumference of a circle.



From the list, draw a ring around the line that is a diameter of the circle.

- $AB$        $AC$        $DE$        $DF$        $GH$        $GK$

[1]

- 12  $f$  is a common factor of 14 and 28.  
 $m$  is a common multiple of 10 and 25.  
 $p$  is a prime number.

Work out the largest possible value of  $\frac{f}{mp}$ .

..... [4]

13 Factorise completely.

(a)  $18px - 27p$

..... [2]

(b)  $mt - n - m + nt$

..... [2]

14 Find the  $n$ th term of this sequence.

8, 17, 32, 53, 80, ...

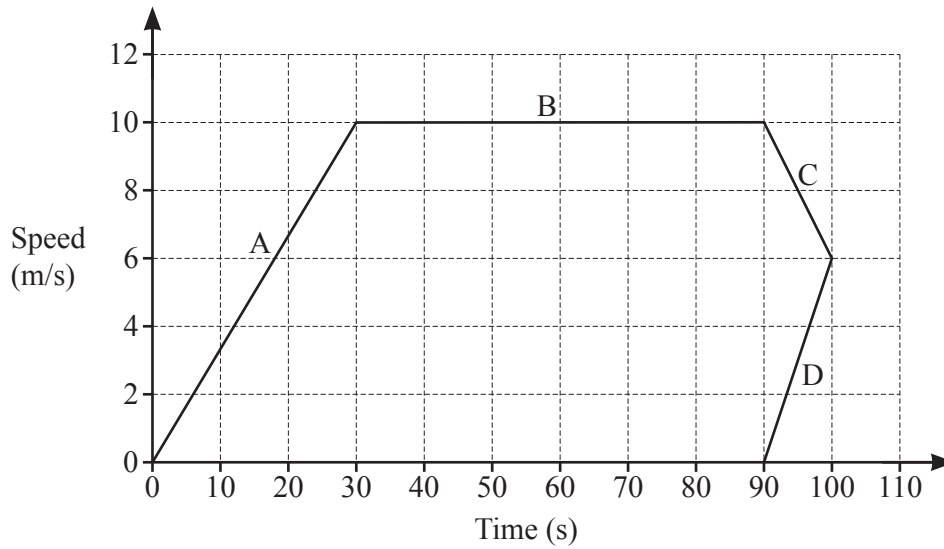
..... [2]

15 Solve.

$$12x - 3 \geq 4x + 13$$

..... [2]

- 16 Abdul draws this speed–time graph for a journey.  
The graph has four sections A, B, C and D.



Complete these statements about the speed–time graph.

Section ..... cannot be correct.

Section ..... shows constant speed.

Section ..... shows deceleration.

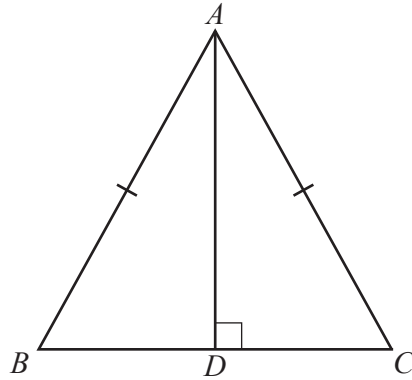
Section A shows acceleration of .....  $\text{m/s}^2$ .

The distance travelled in the first 30 seconds of the journey is ..... m.

[4]



17

NOT TO  
SCALE

In triangle  $ABC$ ,  $AC = AB$ .

$D$  is the point on  $BC$  such that  $AD$  is perpendicular to  $BC$ .

Complete the following statements to show that triangle  $ACD$  and triangle  $ABD$  are congruent.

$AD$  is perpendicular to  $BC$  so that Angle ..... = Angle ..... = .....  $^\circ$

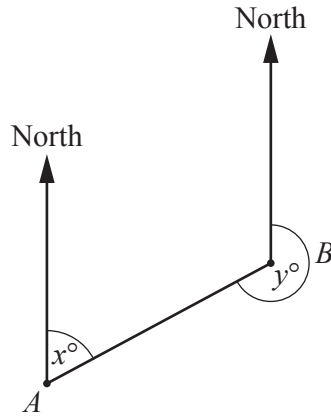
$AC = AB$  is given information.

Side ..... is common to both triangles.

Triangle  $ACD$  is congruent to triangle  $ABD$  because of the congruency criterion ..... [3]

- 18 The bearing of  $B$  from  $A$  is  $x^\circ$ .  
The bearing of  $A$  from  $B$  is  $y^\circ$ .  
 $x : y = 2 : 7$

Calculate the value of  $y$ .



NOT TO  
SCALE

$y = \dots\dots\dots$  [3]

19       $f(x) = kx^2$        $g(x) = \frac{1}{x}$        $h(x) = \frac{7x-2}{5}$        $j(x) = \frac{3-10x}{14}$

(a)  $f(-5k) = 675$

Find the value of  $k$ .

$k = \dots\dots\dots$  [2]

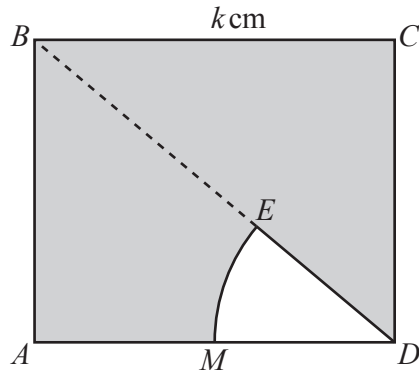
(b) Find  $gh(x)$ .

$\dots\dots\dots$  [1]

(c) Find  $h^{-1}(x) + j(x)$ .  
Give your answer in its simplest form.

$\dots\dots\dots$  [4]

20



NOT TO  
SCALE

The diagram shows a square  $ABCD$  with side length  $k$  cm.  
 $MDE$  is a sector of a circle, centre  $D$ .  
 $E$  lies on the diagonal,  $BD$ , of the square.  
 $M$  is the midpoint of  $AD$ .

Find the percentage of the square that is shaded.

..... % [4]

- 21 Neha has a piece of ribbon of length 23 cm, correct to the nearest cm.  
From this ribbon she cuts off a piece with length 87 mm, correct to the nearest mm.

Work out the lower bound and the upper bound for the length of the remaining ribbon.  
Give your answer in centimetres.

Lower bound = ..... cm

Upper bound = .....cm [3]

- 22 Simplify.

$$\frac{5x - x^2}{25 - x^2}$$

..... [3]

23 Solve the equation  $3 \sin x + 3 = 1$  for  $0^\circ \leq x \leq 360^\circ$ .

$x = \dots\dots\dots$  or  $x = \dots\dots\dots$  [3]

24  $y$  is inversely proportional to the cube of  $(x - 1)$ .  
 $y = 9.45$  when  $x = 3$ .

Find  $y$  when  $x = 4$ .

$y = \dots\dots\dots$  [3]

25  $m^{-\frac{1}{4}} = 27m^{-1}$

Find the value of  $m$ .

$m = \dots\dots\dots$  [3]

**BLANK PAGE**

---

Permission to reproduce items where third-party owned material protected by copyright is included has been sought and cleared where possible. Every reasonable effort has been made by the publisher (UCLES) to trace copyright holders, but if any items requiring clearance have unwittingly been included, the publisher will be pleased to make amends at the earliest possible opportunity.

To avoid the issue of disclosure of answer-related information to candidates, all copyright acknowledgements are reproduced online in the Cambridge Assessment International Education Copyright Acknowledgements Booklet. This is produced for each series of examinations and is freely available to download at [www.cambridgeinternational.org](http://www.cambridgeinternational.org) after the live examination series.

Cambridge Assessment International Education is part of Cambridge Assessment. Cambridge Assessment is the brand name of the University of Cambridge Local Examinations Syndicate (UCLES), which is a department of the University of Cambridge.