

Write your name here

Surname

Other names

**Pearson Edexcel**  
**International**  
**Advanced Level**

Centre Number

--	--	--	--	--	--

Candidate Number

--	--	--	--	--

# Chemistry

**Advanced Subsidiary**

**Unit 3: Chemistry Laboratory Skills I**

Tuesday 8 May 2018 – Afternoon

**Time: 1 hour 15 minutes**

Paper Reference

**WCH03/01**

**Candidates must have: Scientific calculator**

Total Marks

## Instructions

- Use **black** ink or **black** ball-point pen.
- **Fill in the boxes** at the top of this page with your name, centre number and candidate number.
- Answer **all** questions.
- Answer the questions in the spaces provided – *there may be more space than you need.*

## Information

- The total mark for this paper is 50.
- The marks for **each** question are shown in brackets – *use this as a guide as to how much time to spend on each question.*
- You will be assessed on your ability to organise and present information, ideas, descriptions and arguments clearly and logically, including your use of grammar, punctuation and spelling.
- A Periodic Table is printed on the back cover of this paper.

## Advice

- Read each question carefully before you start to answer it.
- Check your answers if you have time at the end.
- Show all your working in calculations and give units where appropriate.

Turn over ►

P51603A

©2018 Pearson Education Ltd.

5/5/4/5/5/2/2/



Pearson

Answer ALL the questions. Write your answers in the spaces provided.

- 1 The inorganic compounds **A** and **B** contain the same Group 2 cation but different anions.
- (a) Two tests were carried out on **A**. The observations made for each test are recorded in the table.
- (i) Complete the statements in the inference column in the table by writing the names or formulae of the ions.

(3)

Test	Observation	Inference
Dilute sulfuric acid was added to an aqueous solution of <b>A</b>	A white precipitate formed	Two possible <b>cations</b> in <b>A</b> are ..... .....
A sample of <b>A</b> was heated in a test tube	A brown gas was evolved	The <b>anion</b> in <b>A</b> is .....
A glowing splint was held in the mouth of the test tube	The splint relit	

- (ii) There were two gases evolved when **A** was heated; a brown gas **C**, and a gas **D** which relit the glowing splint. Identify the gases **C** and **D** by giving their name or formula.

(2)

Gas **C** .....Gas **D** .....

- (iii) Name a test that could be used to distinguish between the two cations identified in (a)(i). Include the expected result of the test for **both** cations.

(3)

.....

.....

.....

.....

.....

.....

DO NOT WRITE IN THIS AREA

DO NOT WRITE IN THIS AREA

DO NOT WRITE IN THIS AREA



(b) A test was carried out on **B**. The observations made for the test are recorded in the table.

- (i) Complete the statement in the inference column in the table by writing the **formula** of the anion. (1)

Test	Observation	Inference
Concentrated sulfuric acid was added to a sample of solid <b>B</b> in a test tube	An orange-brown gas <b>E</b> was evolved	The <b>formula</b> of the anion in <b>B</b> is .....

- (ii) Identify the orange-brown gas **E** by giving its name or formula. (1)

Gas **E** is .....

- (iii) Two colourless acidic gases were also evolved in the test in (b)(i).

These gases were dissolved in water.

Aqueous silver nitrate and dilute nitric acid were added to the solution and a cream precipitate formed.

Give the name or formula of the gas identified by this method. (1)

- (iv) Suggest the identity of the other acidic gas by giving its name or formula. (1)

**(Total for Question 1 = 12 marks)**



2 This question is about an organic compound **X**.

**Information about compound X**

Molecular formula:  $C_4H_{10}O$

**Test 1**

Phosphorus(V) chloride was added to **X**.  
Steamy fumes were formed.

- (a) (i) Use all the information about **X** to identify the type of functional group present in **X**.

(1)

- (ii) Draw the four possible structural isomers of **X**.  
Use your answer to (a)(i) and the molecular formula of **X**.

(4)


DO NOT WRITE IN THIS AREA

DO NOT WRITE IN THIS AREA

DO NOT WRITE IN THIS AREA



- (b) Another test was carried out on **X**.

**Test 2**

A few drops of acidified potassium dichromate(VI) solution were added to **X** and the mixture was heated.  
The mixture stayed orange.

Use the result of **Test 2** to further classify the functional group present in **X**.

(1)

- (c) Use your answer to (b) to identify which of the four isomers of  $C_4H_{10}O$  you have drawn in (a)(ii) is **X**.

(1)

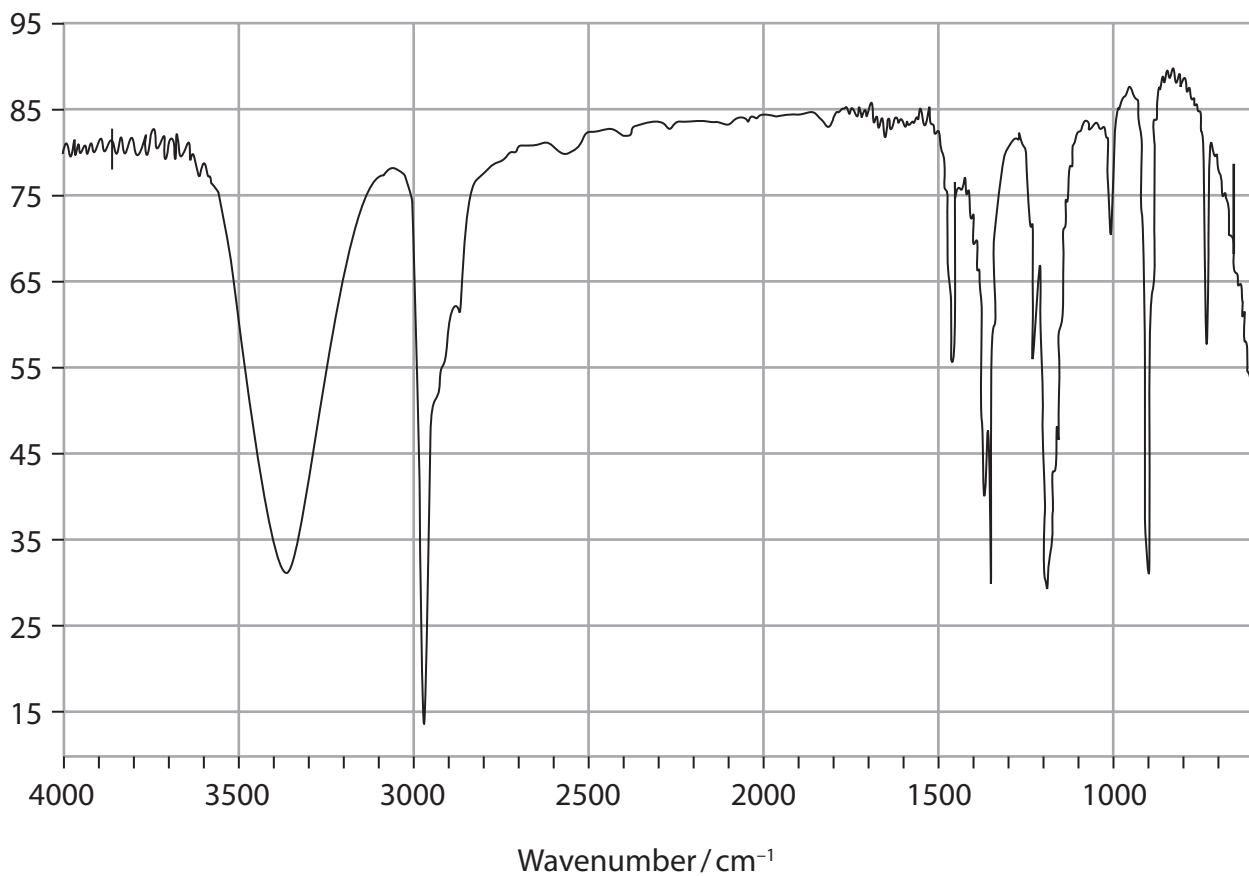
- (d) (i) Write the equation for the reaction between **X** and phosphorus(V) chloride. State symbols are not required.

(1)



(ii) The infrared spectrum of **X** is shown.

Transmittance (%)



Some data about infrared spectra are given in the table.

Group	Bond	Wavenumber/cm <sup>-1</sup>
alkane	C–H stretch	2962–2853
alkane	C–H bend	1485–1365
alcohol	O–H stretch	3750–3200

Circle the peak on the spectrum that will **not** be present in the infrared spectrum of the **organic product** of the reaction between **X** and phosphorus(V) chloride.

(1)

(Total for Question 2 = 9 marks)

DO NOT WRITE IN THIS AREA

DO NOT WRITE IN THIS AREA

DO NOT WRITE IN THIS AREA

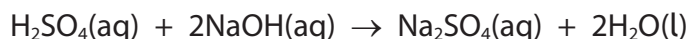


3 This question is about the preparation of crystals of hydrated sodium sulfate.

(a) You are provided with the following apparatus and materials to prepare a solution of sodium sulfate from sulfuric acid and aqueous sodium hydroxide:

- a burette, ready to use, filled with dilute sulfuric acid to the 0.00 cm<sup>3</sup> line
- an aqueous solution of sodium hydroxide
- methyl orange indicator
- access to other laboratory volumetric apparatus.

The equation for the reaction is



(i) A preliminary (rough) titration shows that about 18 cm<sup>3</sup> of sulfuric acid is required to react with 25.0 cm<sup>3</sup> of the aqueous sodium hydroxide.

Describe how you would carry out a second titration to find the accurate volume of sulfuric acid that reacts with 25.0 cm<sup>3</sup> of the aqueous sodium hydroxide.

In your answer, you should include the colour change of the indicator at the end-point.

(5)

.....

.....

.....

.....

.....

.....

.....

.....

.....

.....

.....

.....

.....

.....

.....

.....

.....

.....

.....

.....

.....

.....

.....



(ii) The results of three further titrations are shown in the table.

Titration number	Rough	1	2	3
Final burette reading / cm <sup>3</sup>	18.2	17.90	35.55	17.65
Initial burette reading / cm <sup>3</sup>	0.00	0.00	18.00	0.00
Titre / cm <sup>3</sup>	18.2	17.90	17.55	17.65
Used in mean (✓)				

Calculate the mean titre.


Show which titres you have used in your calculation by putting a tick (✓) in the appropriate boxes in the table.

(1)

mean titre ..... cm<sup>3</sup>

(iii) On the diagram of part of a burette, show the level of dilute sulfuric acid when the final burette reading is recorded in **Titration 3**.

(2)



DO NOT WRITE IN THIS AREA

DO NOT WRITE IN THIS AREA

DO NOT WRITE IN THIS AREA





(b) Using results from the table, briefly describe how to obtain a sample of pure crystals of hydrated sodium sulfate.

(2)

.....

.....

.....

.....

.....

.....

.....

**(Total for Question 3 = 10 marks)**

DO NOT WRITE IN THIS AREA

DO NOT WRITE IN THIS AREA

DO NOT WRITE IN THIS AREA

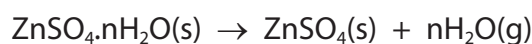


- 4 An experiment is carried out to determine the value of  $n$  in the formula of hydrated zinc sulfate,  $\text{ZnSO}_4 \cdot n\text{H}_2\text{O}$ .

The following procedure is used.

- Step 1 Weigh an empty crucible.
- Step 2 Add two spatula measures of hydrated zinc sulfate to the crucible. Reweigh the crucible with the hydrated zinc sulfate.
- Step 3 Heat the crucible and hydrated zinc sulfate to remove the water of crystallisation.
- Step 4 Allow the crucible to cool. Reweigh the crucible and the anhydrous zinc sulfate.

The equation for the reaction is



### Results

Measurement	Value / g
Mass of empty crucible	13.26
Mass of crucible + contents before heating	16.71
Mass of crucible + contents after heating	15.30
Mass of contents before heating	3.45
Mass of contents after heating	
Mass of water lost	

- (a) Draw a labelled diagram of the apparatus set up for heating in Step 3.

(2)

DO NOT WRITE IN THIS AREA

DO NOT WRITE IN THIS AREA

DO NOT WRITE IN THIS AREA



(b) Complete the table of results.

(1)

(c) (i) Calculate the amount, in moles, of anhydrous zinc sulfate,  $\text{ZnSO}_4$ , left after heating.

(1)

amount of anhydrous zinc sulfate left = ..... mol

(ii) Calculate the amount, in moles, of water lost during heating.

(1)

amount of water lost = ..... mol

(iii) Calculate the value of  $n$ , using your answers to (c)(i) and (ii).

(1)

$n = \dots\dots\dots$

DO NOT WRITE IN THIS AREA

DO NOT WRITE IN THIS AREA

DO NOT WRITE IN THIS AREA



(d) A data book gives the formula of hydrated zinc sulfate as  $ZnSO_4 \cdot 7H_2O$ .

Two possible errors that might occur during the experiment are:

**Error 1**

Some of the hydrated zinc sulfate was lost from the crucible during heating in Step 3.

**Error 2**

The crucible was not heated for long enough for all of the water of crystallisation to be lost.

- (i) Predict the effect, if any, each error will have on the measured mass of water lost and hence the calculated value of n. (2)

**Error 1**

Effect on measured mass of water lost.....

Effect on calculated value of n.....

**Error 2**

Effect on measured mass of water lost.....

Effect on calculated value of n.....

- (ii) Suggest how you could improve the experiment to stop the hydrated zinc sulfate from 'jumping out' of the crucible during heating. (1)

- (iii) Suggest how you could make sure that all the water of crystallisation is lost during heating. (1)

**(Total for Question 4 = 10 marks)**



DO NOT WRITE IN THIS AREA

DO NOT WRITE IN THIS AREA

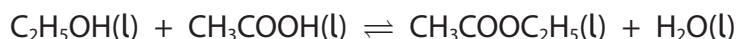
DO NOT WRITE IN THIS AREA

**BLANK PAGE**



P 5 1 6 0 3 A 0 1 3 1 6

- 5** Ethyl ethanoate is a colourless liquid with a boiling temperature of 77 °C. It can be prepared by reacting ethanol with ethanoic acid.



An outline procedure is given.

- Step 1** Mix 20 cm<sup>3</sup> of ethanol and 20 cm<sup>3</sup> of ethanoic acid in a pear-shaped flask and add anti-bumping granules.
- Step 2** Add 8 cm<sup>3</sup> of concentrated sulfuric acid slowly, and with cooling.
- Step 3** Set up the apparatus for reflux, with the flask partially immersed in a water bath. Heat under reflux for 15 minutes.
- Step 4** Allow the apparatus to cool, and then rearrange the apparatus for distillation. Collect all the distillate up to 80 °C.

- (a) Give a reason why anti-bumping granules are used in Step 1.

(1)

- (b) Suggest a reason why the mixture is cooled as the concentrated sulfuric acid is added in Step 2.

(1)

- (c) Give a reason why the flask is heated in a water bath, rather than directly with a Bunsen flame, in Step 3.

(1)

- (d) Give a reason why the mixture is heated under reflux in Step 3.

(1)

DO NOT WRITE IN THIS AREA

DO NOT WRITE IN THIS AREA

DO NOT WRITE IN THIS AREA



The ethyl ethanoate is purified as follows:

**Step 5** Place the distillate from **Step 4** in a separating funnel and add  $10\text{ cm}^3$  of sodium carbonate solution. Shake the separating funnel carefully, releasing the pressure at regular intervals. Allow the layers to separate and then remove the lower, aqueous layer.

**Step 6** Transfer the ethyl ethanoate to a dry flask. Add anhydrous calcium chloride, stopper the flask and leave to stand for 30 minutes.

**Step 7** Pour the ethyl ethanoate into a clean pear-shaped flask. Distil and collect the pure ethyl ethanoate.

(e) (i) Identify the gas released when sodium carbonate solution is added to the distillate in the separating funnel in **Step 5**. (1)

(ii) Describe how to release the pressure in the separating funnel in **Step 5**. (1)

(f) (i) Give a reason why anhydrous calcium chloride is added to the ethyl ethanoate in **Step 6**. (1)

(ii) Suggest a reagent that could be used as an alternative to anhydrous calcium chloride in **Step 6**. (1)

(g) Give a suitable temperature **range** over which to collect the pure ethyl ethanoate during the final distillation in **Step 7**. (1)

**(Total for Question 5 = 9 marks)**

**TOTAL FOR PAPER = 50 MARKS**



# The Periodic Table of Elements

1	2	3	4	5	6	7	0 (8)																																																																																																																																																																																																																																																																																																																																																																																																																																																																				
		(13)	(14)	(15)	(16)	(17)	(18)																																																																																																																																																																																																																																																																																																																																																																																																																																																																				
<table border="1"> <tr> <td>1.0</td> <td>H</td> </tr> <tr> <td>hydrogen</td> <td>1</td> </tr> </table>	1.0	H	hydrogen	1	<table border="1"> <tr> <td>9.0</td> <td>Be</td> </tr> <tr> <td>beryllium</td> <td>4</td> </tr> <tr> <td>24.3</td> <td>Mg</td> </tr> <tr> <td>magnesium</td> <td>12</td> </tr> </table>	9.0	Be	beryllium	4	24.3	Mg	magnesium	12	<table border="1"> <tr> <td>10.8</td> <td>B</td> <td>12.0</td> <td>C</td> <td>14.0</td> <td>N</td> <td>16.0</td> <td>O</td> <td>19.0</td> <td>F</td> <td>20.2</td> <td>Ne</td> </tr> <tr> <td>boron</td> <td>5</td> <td>carbon</td> <td>6</td> <td>nitrogen</td> <td>7</td> <td>oxygen</td> <td>8</td> <td>fluorine</td> <td>9</td> <td>neon</td> <td>10</td> </tr> <tr> <td>27.0</td> <td>Al</td> <td>28.1</td> <td>Si</td> <td>31.0</td> <td>P</td> <td>32.1</td> <td>S</td> <td>35.5</td> <td>Cl</td> <td>39.9</td> <td>Ar</td> </tr> <tr> <td>aluminium</td> <td>13</td> <td>silicon</td> <td>14</td> <td>phosphorus</td> <td>15</td> <td>sulfur</td> <td>16</td> <td>chlorine</td> <td>17</td> <td>argon</td> <td>18</td> </tr> </table>	10.8	B	12.0	C	14.0	N	16.0	O	19.0	F	20.2	Ne	boron	5	carbon	6	nitrogen	7	oxygen	8	fluorine	9	neon	10	27.0	Al	28.1	Si	31.0	P	32.1	S	35.5	Cl	39.9	Ar	aluminium	13	silicon	14	phosphorus	15	sulfur	16	chlorine	17	argon	18	<table border="1"> <tr> <td>45.0</td> <td>Sc</td> <td>47.9</td> <td>Ti</td> <td>50.9</td> <td>V</td> <td>52.0</td> <td>Cr</td> <td>54.9</td> <td>Mn</td> <td>55.8</td> <td>Fe</td> <td>58.9</td> <td>Co</td> <td>58.7</td> <td>Ni</td> <td>63.5</td> <td>Cu</td> <td>65.4</td> <td>Zn</td> </tr> <tr> <td>scandium</td> <td>21</td> <td>titanium</td> <td>22</td> <td>vanadium</td> <td>23</td> <td>chromium</td> <td>24</td> <td>manganese</td> <td>25</td> <td>iron</td> <td>26</td> <td>cobalt</td> <td>27</td> <td>nickel</td> <td>28</td> <td>copper</td> <td>29</td> <td>zinc</td> <td>30</td> </tr> <tr> <td>88.9</td> <td>Y</td> <td>91.2</td> <td>Zr</td> <td>92.9</td> <td>Nb</td> <td>95.9</td> <td>Mo</td> <td>[98]</td> <td>Tc</td> <td>101.1</td> <td>Ru</td> <td>102.9</td> <td>Rh</td> <td>106.4</td> <td>Pd</td> <td>107.9</td> <td>Ag</td> <td>112.4</td> <td>Cd</td> </tr> <tr> <td>yttrium</td> <td>39</td> <td>zirconium</td> <td>40</td> <td>niobium</td> <td>41</td> <td>molybdenum</td> <td>42</td> <td>technetium</td> <td>43</td> <td>ruthenium</td> <td>44</td> <td>rhodium</td> <td>45</td> <td>palladium</td> <td>46</td> <td>silver</td> <td>47</td> <td>cadmium</td> <td>48</td> </tr> <tr> <td>137.3</td> <td>Ba</td> <td>178.5</td> <td>Hf</td> <td>180.9</td> <td>Ta</td> <td>183.8</td> <td>W</td> <td>186.2</td> <td>Re</td> <td>190.2</td> <td>Os</td> <td>192.2</td> <td>Ir</td> <td>195.1</td> <td>Pt</td> <td>197.0</td> <td>Au</td> <td>200.6</td> <td>Hg</td> </tr> <tr> <td>barium</td> <td>56</td> <td>hafnium</td> <td>72</td> <td>tantalum</td> <td>73</td> <td>tungsten</td> <td>74</td> <td>rhenium</td> <td>75</td> <td>osmium</td> <td>76</td> <td>iridium</td> <td>77</td> <td>platinum</td> <td>78</td> <td>gold</td> <td>79</td> <td>mercury</td> <td>80</td> </tr> <tr> <td>[223]</td> <td>Fr</td> <td>[261]</td> <td>Rf</td> <td>[262]</td> <td>Db</td> <td>[266]</td> <td>Sg</td> <td>[264]</td> <td>Bh</td> <td>[277]</td> <td>Hs</td> <td>[268]</td> <td>Mt</td> <td>[271]</td> <td>Ds</td> <td>[272]</td> <td>Rg</td> <td></td> <td></td> </tr> <tr> <td>francium</td> <td>87</td> <td>rutherfordium</td> <td>104</td> <td>dubnium</td> <td>105</td> <td>seaborgium</td> <td>106</td> <td>bohrium</td> <td>107</td> <td>hassium</td> <td>108</td> <td>meitnerium</td> <td>109</td> <td>darmstadtium</td> <td>110</td> <td>roentgenium</td> <td>111</td> <td></td> <td></td> </tr> </table>	45.0	Sc	47.9	Ti	50.9	V	52.0	Cr	54.9	Mn	55.8	Fe	58.9	Co	58.7	Ni	63.5	Cu	65.4	Zn	scandium	21	titanium	22	vanadium	23	chromium	24	manganese	25	iron	26	cobalt	27	nickel	28	copper	29	zinc	30	88.9	Y	91.2	Zr	92.9	Nb	95.9	Mo	[98]	Tc	101.1	Ru	102.9	Rh	106.4	Pd	107.9	Ag	112.4	Cd	yttrium	39	zirconium	40	niobium	41	molybdenum	42	technetium	43	ruthenium	44	rhodium	45	palladium	46	silver	47	cadmium	48	137.3	Ba	178.5	Hf	180.9	Ta	183.8	W	186.2	Re	190.2	Os	192.2	Ir	195.1	Pt	197.0	Au	200.6	Hg	barium	56	hafnium	72	tantalum	73	tungsten	74	rhenium	75	osmium	76	iridium	77	platinum	78	gold	79	mercury	80	[223]	Fr	[261]	Rf	[262]	Db	[266]	Sg	[264]	Bh	[277]	Hs	[268]	Mt	[271]	Ds	[272]	Rg			francium	87	rutherfordium	104	dubnium	105	seaborgium	106	bohrium	107	hassium	108	meitnerium	109	darmstadtium	110	roentgenium	111			<table border="1"> <tr> <td>132.9</td> <td>Cs</td> <td>137.3</td> <td>Ba</td> <td>178.5</td> <td>Hf</td> <td>180.9</td> <td>Ta</td> <td>183.8</td> <td>W</td> <td>186.2</td> <td>Re</td> <td>190.2</td> <td>Os</td> <td>192.2</td> <td>Ir</td> <td>195.1</td> <td>Pt</td> <td>197.0</td> <td>Au</td> <td>200.6</td> <td>Hg</td> <td>204.4</td> <td>Tl</td> <td>207.2</td> <td>Pb</td> <td>209.0</td> <td>Bi</td> <td>210]</td> <td>Po</td> <td>216.9</td> <td>At</td> <td>222]</td> <td>Rn</td> </tr> <tr> <td>caesium</td> <td>55</td> <td>barium</td> <td>56</td> <td>hafnium</td> <td>72</td> <td>tantalum</td> <td>73</td> <td>tungsten</td> <td>74</td> <td>rhenium</td> <td>75</td> <td>osmium</td> <td>76</td> <td>iridium</td> <td>77</td> <td>platinum</td> <td>78</td> <td>gold</td> <td>79</td> <td>mercury</td> <td>80</td> <td>thallium</td> <td>81</td> <td>lead</td> <td>82</td> <td>bismuth</td> <td>83</td> <td>polonium</td> <td>84</td> <td>astatine</td> <td>85</td> <td>radon</td> <td>86</td> </tr> <tr> <td>85.5</td> <td>Rb</td> <td>87.6</td> <td>Sr</td> <td>88.9</td> <td>Y</td> <td>91.2</td> <td>Zr</td> <td>92.9</td> <td>Nb</td> <td>95.9</td> <td>Mo</td> <td>101.1</td> <td>Ru</td> <td>102.9</td> <td>Rh</td> <td>106.4</td> <td>Pd</td> <td>107.9</td> <td>Ag</td> <td>112.4</td> <td>Cd</td> <td>114.8</td> <td>In</td> <td>118.7</td> <td>Sn</td> <td>121.8</td> <td>Sb</td> <td>126.9</td> <td>I</td> <td>127.6</td> <td>Te</td> <td>131.3</td> <td>Xe</td> </tr> <tr> <td>rubidium</td> <td>37</td> <td>strontium</td> <td>38</td> <td>yttrium</td> <td>39</td> <td>zirconium</td> <td>40</td> <td>niobium</td> <td>41</td> <td>molybdenum</td> <td>42</td> <td>ruthenium</td> <td>44</td> <td>rhodium</td> <td>45</td> <td>palladium</td> <td>46</td> <td>silver</td> <td>47</td> <td>cadmium</td> <td>48</td> <td>indium</td> <td>49</td> <td>tin</td> <td>50</td> <td>antimony</td> <td>51</td> <td>tellurium</td> <td>52</td> <td>iodine</td> <td>53</td> <td>xenon</td> <td>54</td> </tr> </table>	132.9	Cs	137.3	Ba	178.5	Hf	180.9	Ta	183.8	W	186.2	Re	190.2	Os	192.2	Ir	195.1	Pt	197.0	Au	200.6	Hg	204.4	Tl	207.2	Pb	209.0	Bi	210]	Po	216.9	At	222]	Rn	caesium	55	barium	56	hafnium	72	tantalum	73	tungsten	74	rhenium	75	osmium	76	iridium	77	platinum	78	gold	79	mercury	80	thallium	81	lead	82	bismuth	83	polonium	84	astatine	85	radon	86	85.5	Rb	87.6	Sr	88.9	Y	91.2	Zr	92.9	Nb	95.9	Mo	101.1	Ru	102.9	Rh	106.4	Pd	107.9	Ag	112.4	Cd	114.8	In	118.7	Sn	121.8	Sb	126.9	I	127.6	Te	131.3	Xe	rubidium	37	strontium	38	yttrium	39	zirconium	40	niobium	41	molybdenum	42	ruthenium	44	rhodium	45	palladium	46	silver	47	cadmium	48	indium	49	tin	50	antimony	51	tellurium	52	iodine	53	xenon	54	<table border="1"> <tr> <td>140</td> <td>Ce</td> <td>141</td> <td>Pr</td> <td>144</td> <td>Nd</td> <td>150</td> <td>Sm</td> <td>152</td> <td>Eu</td> <td>157</td> <td>Tb</td> <td>159</td> <td>Dy</td> <td>163</td> <td>Ho</td> <td>165</td> <td>Er</td> <td>167</td> <td>Tm</td> <td>169</td> <td>Yb</td> <td>173</td> <td>Lu</td> </tr> <tr> <td>cerium</td> <td>58</td> <td>praseodymium</td> <td>59</td> <td>neodymium</td> <td>60</td> <td>samarium</td> <td>62</td> <td>europium</td> <td>63</td> <td>gadolinium</td> <td>64</td> <td>terbium</td> <td>65</td> <td>dysprosium</td> <td>66</td> <td>holmium</td> <td>67</td> <td>erbium</td> <td>68</td> <td>thulium</td> <td>69</td> <td>ytterbium</td> <td>70</td> <td>lutetium</td> </tr> <tr> <td>232</td> <td>Th</td> <td>[231]</td> <td>Pa</td> <td>238</td> <td>U</td> <td>[242]</td> <td>Pu</td> <td>[243]</td> <td>Am</td> <td>[247]</td> <td>Cm</td> <td>[245]</td> <td>Bk</td> <td>[251]</td> <td>Cf</td> <td>[254]</td> <td>Fm</td> <td>[253]</td> <td>Md</td> <td>[256]</td> <td>No</td> <td>[254]</td> <td>Lr</td> </tr> <tr> <td>thorium</td> <td>90</td> <td>protactinium</td> <td>91</td> <td>uranium</td> <td>92</td> <td>plutonium</td> <td>94</td> <td>americium</td> <td>95</td> <td>curium</td> <td>96</td> <td>berkelium</td> <td>97</td> <td>californium</td> <td>98</td> <td>fermium</td> <td>100</td> <td>meitnerium</td> <td>101</td> <td>nobelium</td> <td>102</td> <td>lawrencium</td> <td>103</td> </tr> </table>	140	Ce	141	Pr	144	Nd	150	Sm	152	Eu	157	Tb	159	Dy	163	Ho	165	Er	167	Tm	169	Yb	173	Lu	cerium	58	praseodymium	59	neodymium	60	samarium	62	europium	63	gadolinium	64	terbium	65	dysprosium	66	holmium	67	erbium	68	thulium	69	ytterbium	70	lutetium	232	Th	[231]	Pa	238	U	[242]	Pu	[243]	Am	[247]	Cm	[245]	Bk	[251]	Cf	[254]	Fm	[253]	Md	[256]	No	[254]	Lr	thorium	90	protactinium	91	uranium	92	plutonium	94	americium	95	curium	96	berkelium	97	californium	98	fermium	100	meitnerium	101	nobelium	102	lawrencium	103	<p>* Lanthanide series</p> <p>* Actinide series</p>
1.0	H																																																																																																																																																																																																																																																																																																																																																																																																																																																																										
hydrogen	1																																																																																																																																																																																																																																																																																																																																																																																																																																																																										
9.0	Be																																																																																																																																																																																																																																																																																																																																																																																																																																																																										
beryllium	4																																																																																																																																																																																																																																																																																																																																																																																																																																																																										
24.3	Mg																																																																																																																																																																																																																																																																																																																																																																																																																																																																										
magnesium	12																																																																																																																																																																																																																																																																																																																																																																																																																																																																										
10.8	B	12.0	C	14.0	N	16.0	O	19.0	F	20.2	Ne																																																																																																																																																																																																																																																																																																																																																																																																																																																																
boron	5	carbon	6	nitrogen	7	oxygen	8	fluorine	9	neon	10																																																																																																																																																																																																																																																																																																																																																																																																																																																																
27.0	Al	28.1	Si	31.0	P	32.1	S	35.5	Cl	39.9	Ar																																																																																																																																																																																																																																																																																																																																																																																																																																																																
aluminium	13	silicon	14	phosphorus	15	sulfur	16	chlorine	17	argon	18																																																																																																																																																																																																																																																																																																																																																																																																																																																																
45.0	Sc	47.9	Ti	50.9	V	52.0	Cr	54.9	Mn	55.8	Fe	58.9	Co	58.7	Ni	63.5	Cu	65.4	Zn																																																																																																																																																																																																																																																																																																																																																																																																																																																								
scandium	21	titanium	22	vanadium	23	chromium	24	manganese	25	iron	26	cobalt	27	nickel	28	copper	29	zinc	30																																																																																																																																																																																																																																																																																																																																																																																																																																																								
88.9	Y	91.2	Zr	92.9	Nb	95.9	Mo	[98]	Tc	101.1	Ru	102.9	Rh	106.4	Pd	107.9	Ag	112.4	Cd																																																																																																																																																																																																																																																																																																																																																																																																																																																								
yttrium	39	zirconium	40	niobium	41	molybdenum	42	technetium	43	ruthenium	44	rhodium	45	palladium	46	silver	47	cadmium	48																																																																																																																																																																																																																																																																																																																																																																																																																																																								
137.3	Ba	178.5	Hf	180.9	Ta	183.8	W	186.2	Re	190.2	Os	192.2	Ir	195.1	Pt	197.0	Au	200.6	Hg																																																																																																																																																																																																																																																																																																																																																																																																																																																								
barium	56	hafnium	72	tantalum	73	tungsten	74	rhenium	75	osmium	76	iridium	77	platinum	78	gold	79	mercury	80																																																																																																																																																																																																																																																																																																																																																																																																																																																								
[223]	Fr	[261]	Rf	[262]	Db	[266]	Sg	[264]	Bh	[277]	Hs	[268]	Mt	[271]	Ds	[272]	Rg																																																																																																																																																																																																																																																																																																																																																																																																																																																										
francium	87	rutherfordium	104	dubnium	105	seaborgium	106	bohrium	107	hassium	108	meitnerium	109	darmstadtium	110	roentgenium	111																																																																																																																																																																																																																																																																																																																																																																																																																																																										
132.9	Cs	137.3	Ba	178.5	Hf	180.9	Ta	183.8	W	186.2	Re	190.2	Os	192.2	Ir	195.1	Pt	197.0	Au	200.6	Hg	204.4	Tl	207.2	Pb	209.0	Bi	210]	Po	216.9	At	222]	Rn																																																																																																																																																																																																																																																																																																																																																																																																																																										
caesium	55	barium	56	hafnium	72	tantalum	73	tungsten	74	rhenium	75	osmium	76	iridium	77	platinum	78	gold	79	mercury	80	thallium	81	lead	82	bismuth	83	polonium	84	astatine	85	radon	86																																																																																																																																																																																																																																																																																																																																																																																																																																										
85.5	Rb	87.6	Sr	88.9	Y	91.2	Zr	92.9	Nb	95.9	Mo	101.1	Ru	102.9	Rh	106.4	Pd	107.9	Ag	112.4	Cd	114.8	In	118.7	Sn	121.8	Sb	126.9	I	127.6	Te	131.3	Xe																																																																																																																																																																																																																																																																																																																																																																																																																																										
rubidium	37	strontium	38	yttrium	39	zirconium	40	niobium	41	molybdenum	42	ruthenium	44	rhodium	45	palladium	46	silver	47	cadmium	48	indium	49	tin	50	antimony	51	tellurium	52	iodine	53	xenon	54																																																																																																																																																																																																																																																																																																																																																																																																																																										
140	Ce	141	Pr	144	Nd	150	Sm	152	Eu	157	Tb	159	Dy	163	Ho	165	Er	167	Tm	169	Yb	173	Lu																																																																																																																																																																																																																																																																																																																																																																																																																																																				
cerium	58	praseodymium	59	neodymium	60	samarium	62	europium	63	gadolinium	64	terbium	65	dysprosium	66	holmium	67	erbium	68	thulium	69	ytterbium	70	lutetium																																																																																																																																																																																																																																																																																																																																																																																																																																																			
232	Th	[231]	Pa	238	U	[242]	Pu	[243]	Am	[247]	Cm	[245]	Bk	[251]	Cf	[254]	Fm	[253]	Md	[256]	No	[254]	Lr																																																																																																																																																																																																																																																																																																																																																																																																																																																				
thorium	90	protactinium	91	uranium	92	plutonium	94	americium	95	curium	96	berkelium	97	californium	98	fermium	100	meitnerium	101	nobelium	102	lawrencium	103																																																																																																																																																																																																																																																																																																																																																																																																																																																				
		<p>Elements with atomic numbers 112-116 have been reported but not fully authenticated</p>																																																																																																																																																																																																																																																																																																																																																																																																																																																																									

DO NOT WRITE IN THIS AREA

DO NOT WRITE IN THIS AREA

DO NOT WRITE IN THIS AREA

