

Write your name here

Surname

Other names

Pearson
Edexcel GCE

Centre Number

--	--	--	--	--	--

Candidate Number

--	--	--	--	--	--

Chemistry

Advanced Subsidiary

Unit 1: The Core Principles of Chemistry

Friday 27 May 2016 – Morning

Time: 1 hour 30 minutes

Paper Reference

6CH01/01

Candidates may use a calculator.

Total Marks

Instructions

- Use **black** ink or ball-point pen.
- **Fill in the boxes** at the top of this page with your name, centre number and candidate number.
- Answer **all** questions.
- Answer the questions in the spaces provided
– *there may be more space than you need.*

Information

- The total mark for this paper is 80.
- The marks for **each** question are shown in brackets
– *use this as a guide as to how much time to spend on each question.*
- Questions labelled with an **asterisk** (*) are ones where the quality of your written communication will be assessed
– *you should take particular care with your spelling, punctuation and grammar, as well as the clarity of expression, on these questions.*
- A Periodic Table is printed on the back cover of this paper.

Advice

- Read each question carefully before you start to answer it.
- Keep an eye on the time.
- Try to answer every question.
- Check your answers if you have time at the end.

Turn over ►

P46656A

©2016 Pearson Education Ltd.

3/6/6/3/1/


PEARSON

SECTION A

Answer ALL the questions in this section. You should aim to spend no more than 20 minutes on this section. For each question, select one answer from A to D and put a cross in the box . If you change your mind, put a line through the box and then mark your new answer with a cross .

- 1 The mass of magnesium ions in 1 kg of sea water is 1.3 g.
The concentration in parts per million (ppm) is

- A 1.3×10^6
 B 1.3×10^3
 C 1.3×10^{-3}
 D 1.3×10^{-6}

(Total for Question 1 = 1 mark)

- 2 Calculate the total number of **ions** in 7.41 g of calcium hydroxide, $\text{Ca}(\text{OH})_2$.

The molar mass of calcium hydroxide is 74.1 g mol^{-1} .

The Avogadro constant is $6.0 \times 10^{23} \text{ mol}^{-1}$.

- A 6.0×10^{22}
 B 1.2×10^{23}
 C 1.8×10^{23}
 D 3.0×10^{23}

(Total for Question 2 = 1 mark)

- 3 Which of the following has the highest melting temperature?

- A Hg
 B K
 C $\text{C}_{10}\text{H}_{22}$
 D SiO_2

(Total for Question 3 = 1 mark)

DO NOT WRITE IN THIS AREA

DO NOT WRITE IN THIS AREA

DO NOT WRITE IN THIS AREA



4 Which of these has a dative covalent bond?

- A NH_3
 B OH^-
 C H_2O
 D H_3O^+

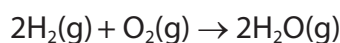
(Total for Question 4 = 1 mark)

5 What is the equation for the first electron affinity of sulfur?

- A $\text{S}(\text{s}) + \text{e}^- \rightarrow \text{S}^-(\text{g})$
 B $\text{S}(\text{g}) + \text{e}^- \rightarrow \text{S}^-(\text{g})$
 C $\text{S}(\text{s}) \rightarrow \text{S}^+(\text{g}) + \text{e}^-$
 D $\text{S}(\text{g}) \rightarrow \text{S}^+(\text{g}) + \text{e}^-$

(Total for Question 5 = 1 mark)

6 100 cm^3 of hydrogen is mixed with 25 cm^3 of oxygen at a temperature of 150°C .
The gases react as shown in the equation below.



The total volume of gas present at the end of the reaction is

- A 50 cm^3
 B 100 cm^3
 C 125 cm^3
 D 150 cm^3

(Total for Question 6 = 1 mark)

Use this space for rough working. Anything you write in this space will gain no credit.



7 Sodium nitrate decomposes on heating.



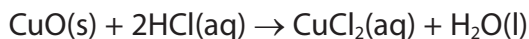
What is the maximum volume of oxygen, measured in dm^3 at room temperature and pressure, which could be obtained by heating 0.50 mol of sodium nitrate?

[Molar volume of a gas = $24 \text{ dm}^3 \text{ mol}^{-1}$ at room temperature and pressure]

- A 3
- B 6
- C 12
- D 24

(Total for Question 7 = 1 mark)

8 An excess of copper(II) oxide is mixed with 40.0 cm^3 of 2.50 mol dm^{-3} hydrochloric acid.



(a) If the mass of copper(II) chloride produced is 5.50 g, what is the percentage yield of copper(II) chloride?

[Molar mass of copper(II) chloride = 134.4 g mol^{-1}]

(1)

- A 81.8%
- B 67.2%
- C 40.9%
- D 20.4%

(b) The ionic equation for the reaction is

(1)

- A $\text{Cu}^{2+}(\text{s}) + 2\text{Cl}^{-}(\text{aq}) \rightarrow \text{CuCl}_2(\text{aq})$
- B $\text{CuO}(\text{s}) + 2\text{H}^{+}(\text{aq}) \rightarrow \text{Cu}^{2+}(\text{aq}) + \text{H}_2\text{O}(\text{l})$
- C $\text{CuO}(\text{s}) + 2\text{H}^{+}(\text{aq}) + 2\text{Cl}^{-}(\text{aq}) \rightarrow \text{Cu}^{2+}(\text{Cl}^{-})_2(\text{aq}) + \text{H}_2\text{O}(\text{l})$
- D $\text{CuO}(\text{s}) + 2\text{Cl}^{-}(\text{aq}) \rightarrow \text{CuCl}_2(\text{aq}) + \text{O}^{2-}(\text{l})$



(c) Some facts about copper(II) chloride are given below.

Which of these gives the **best** evidence that the bonding in copper(II) chloride is ionic?

(1)

- A It has a melting temperature of 620°C.
- B It does not conduct electricity as a solid.
- C It decomposes before it reaches its boiling temperature.
- D In the electron density map, there are no contour lines around more than one nucleus.

(Total for Question 8 = 3 marks)

9 The melting temperature of sodium is lower than the melting temperature of magnesium. The **best** explanation for this is

- A sodium atoms are smaller than magnesium atoms.
- B sodium ions have a larger charge density than magnesium ions.
- C the repulsion between the ions in sodium is less than in magnesium.
- D the number of delocalised electrons per atom is fewer in sodium than in magnesium.

(Total for Question 9 = 1 mark)

10 A trend going down Group 1 is that the

- A first ionization energy of the element decreases.
- B lattice energy of the chloride becomes more negative.
- C radius of the atom decreases.
- D melting temperature of the element increases.

(Total for Question 10 = 1 mark)

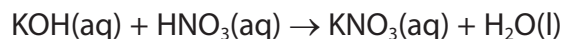
11 Which of the following ions has the biggest radius?

- A S^{2-}
- B Cl^-
- C K^+
- D Ca^{2+}

(Total for Question 11 = 1 mark)



- 12 When 0.1 mol of aqueous potassium hydroxide was added to 0.1 mol of nitric acid, 5200 J were transferred to the surroundings. What is the enthalpy change, in kJ mol^{-1} , for this reaction?



- A -52
 B -26
 C +26
 D +52

(Total for Question 12 = 1 mark)

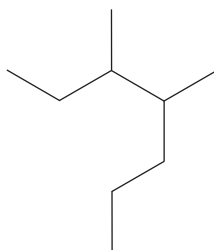
- 13 A compound has the composition 62.1% C, 10.3% H and 27.6% O.

What is its empirical formula?

- A CH_2O
 B $\text{C}_6\text{H}_2\text{O}$
 C $\text{C}_6\text{H}_3\text{O}$
 D $\text{C}_3\text{H}_6\text{O}$

(Total for Question 13 = 1 mark)

- 14 What is the systematic name of the following?



- A 3-methyl-2-propylpentane
 B 3-methyl-4-propylpentane
 C 3,4-dimethylheptane
 D 4,5-dimethylheptane

(Total for Question 14 = 1 mark)

DO NOT WRITE IN THIS AREA

DO NOT WRITE IN THIS AREA

DO NOT WRITE IN THIS AREA

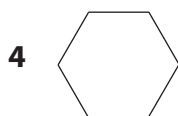
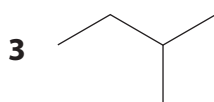
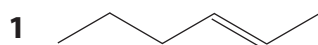


15 Which of the following shows geometric isomerism?

- A prop-1-ene
 B but-1-ene
 C 1,1-dichloroethene
 D 1,2-dichloroethene

(Total for Question 15 = 1 mark)

16 This question is about the organic compounds with skeletal formulae as shown.



(a) Which compounds are isomers?

(1)

- A 1 and 2
 B 1 and 3
 C 1 and 4
 D 2 and 3

(b) Which compound has the same molecular formula and empirical formula?

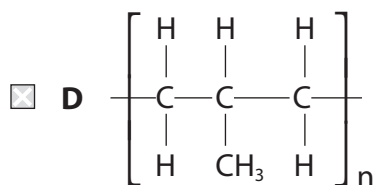
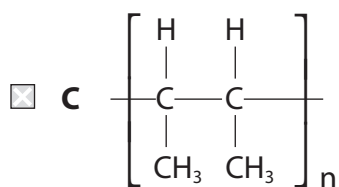
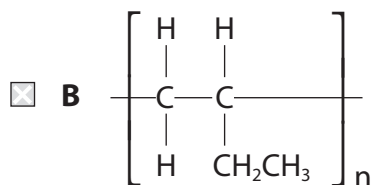
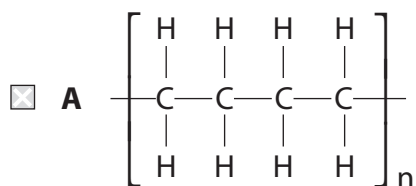
(1)

- A 1
 B 2
 C 3
 D 4

(Total for Question 16 = 2 marks)



17 What is the formula of poly(but-1-ene)?



(Total for Question 17 = 1 mark)

TOTAL FOR SECTION A = 20 MARKS

DO NOT WRITE IN THIS AREA

DO NOT WRITE IN THIS AREA

DO NOT WRITE IN THIS AREA



DO NOT WRITE IN THIS AREA

DO NOT WRITE IN THIS AREA

DO NOT WRITE IN THIS AREA

BLANK PAGE



SECTION B


Answer ALL the questions. Write your answers in the spaces provided.

18 A mass spectrometer was used to analyse a sample of oxygen gas in which the most abundant isotope was ^{16}O . The oxygen was ionized and the ions were accelerated by an electric field.

- (a) (i) Suggest the formulae of **two** different ions containing only the ^{16}O isotope, which might be formed in the mass spectrometer. (2)

- (ii) Which part of the mass spectrometer separates ions of different mass? (1)

- (iii) For the two ions you have chosen in (a)(i), sketch their paths in the mass spectrometer after leaving the electric field and as they approach the detector region. Label each path with the formula of the ion. (2)



DO NOT WRITE IN THIS AREA

DO NOT WRITE IN THIS AREA

DO NOT WRITE IN THIS AREA



(b) The following results were obtained for the atoms of oxygen in the sample.

Relative isotopic mass	Relative abundance
16	99.759
17	0.037
18	0.204

Calculate the relative atomic mass of oxygen atoms. Show your working and give your answer to **three** decimal places.

(2)

(c) In the first half of the twentieth century, oxygen was used as the standard for relative atomic mass. The unit of atomic mass was defined as $\frac{1}{16}$ the mass of an oxygen atom. This was based on samples of oxygen obtained from the air which consisted of a mixture of oxygen isotopes.

Suggest **one** reason why the use of this standard was discontinued.

(1)

.....

.....

.....

(d) Would you expect the first electron affinities of ^{16}O and ^{18}O to differ? Justify your answer.

(1)

.....

.....

.....

.....

(Total for Question 18 = 9 marks)



19 This question is about elements in Period 3 of the Periodic Table.

- (a) Write the equation, including state symbols, which represents the first ionization energy of magnesium.

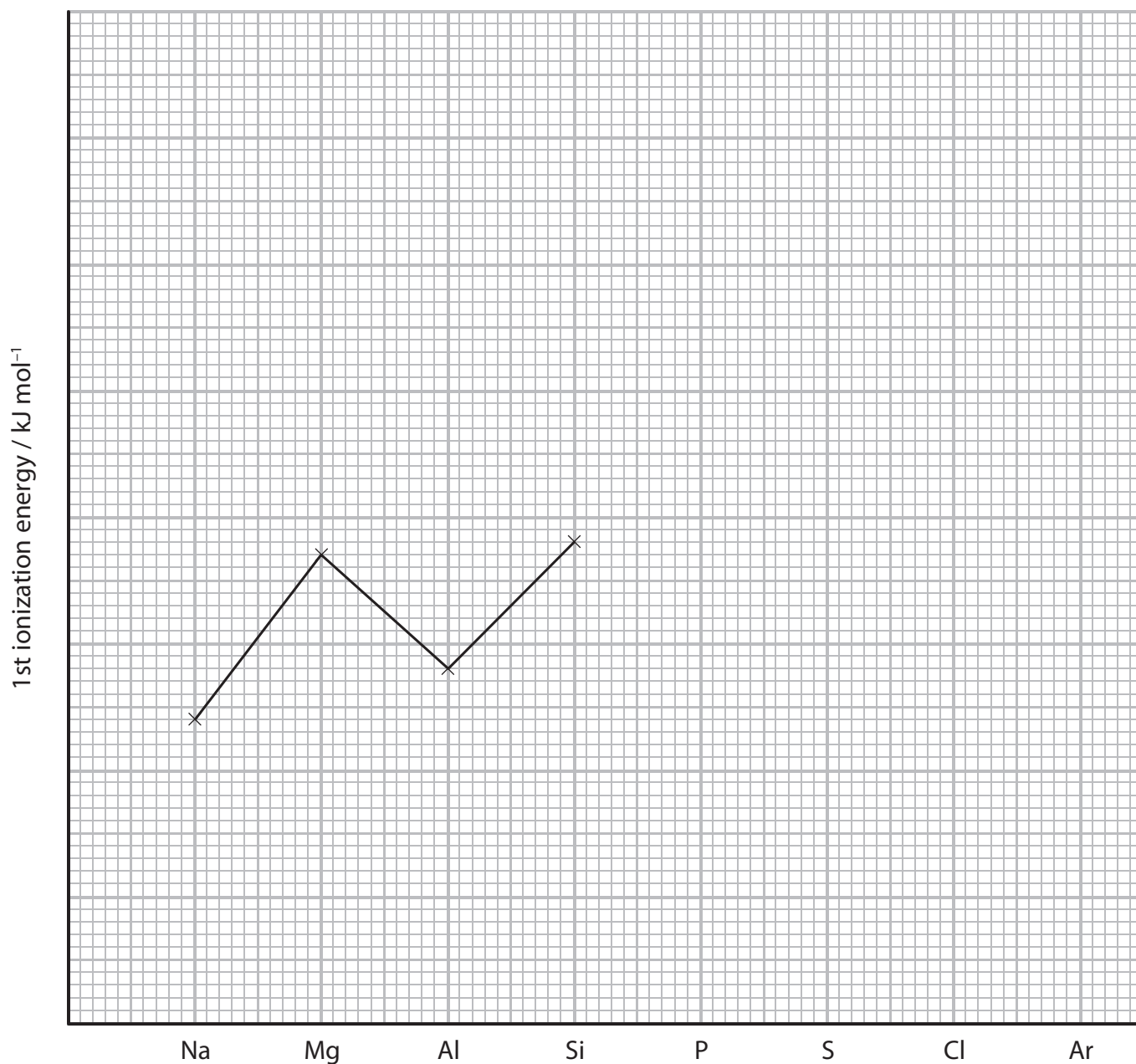
(2)

- (b) Complete the electronic configuration for aluminium using s, p notation.

(1)

1s².....

- (c) The sketch graph below shows the first ionization energies of some of the elements in Period 3.



DO NOT WRITE IN THIS AREA

DO NOT WRITE IN THIS AREA

DO NOT WRITE IN THIS AREA



* (i) Explain why the values shown on the graph go down from magnesium to aluminium, and then rise again going from aluminium to silicon.

(3)

(ii) Complete the sketch graph for the elements from phosphorus to argon. Explain why one of these elements does not follow the general trend.

(3)

(d) Draw a dot and cross diagram for silicon tetrachloride, SiCl_4 , showing outer shell electrons only. Use a cross (\times) for silicon electrons and a dot (\bullet) for chlorine electrons.

(2)

DO NOT WRITE IN THIS AREA

DO NOT WRITE IN THIS AREA

DO NOT WRITE IN THIS AREA



DO NOT WRITE IN THIS AREA

DO NOT WRITE IN THIS AREA

DO NOT WRITE IN THIS AREA

(e) Sodium and magnesium are both in Period 3. In sodium iodide, the ions are not polarized but in magnesium iodide some polarization occurs.

*(i) Explain the term **polarization** as it applies to magnesium iodide, and state how it arises.

(3)

.....

.....

.....

.....

.....

.....

.....

.....

.....

(ii) State how thermochemical data could be used to show that there is polarization in magnesium iodide.

(1)

.....

.....

.....

(Total for Question 19 = 15 marks)



DO NOT WRITE IN THIS AREA

DO NOT WRITE IN THIS AREA

DO NOT WRITE IN THIS AREA

BLANK PAGE



P 4 6 6 5 6 A 0 1 5 2 4

20 Fractional distillation is used in industry to obtain alkanes from crude oil.

(a) (i) On what physical property of alkanes does this process depend? (1)

(ii) The alkanes are then processed by **cracking** or **reforming** to produce other hydrocarbons.

Explain the meaning of these terms. (2)

Cracking

Reforming

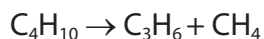
DO NOT WRITE IN THIS AREA

DO NOT WRITE IN THIS AREA

DO NOT WRITE IN THIS AREA



(iii) The equation for a cracking reaction of butane is



Use the following standard enthalpy changes of combustion to calculate the enthalpy change of this cracking reaction. Show your method, which may involve the use of a Hess cycle. Include a sign and units in your answer.

Compound	Standard enthalpy change of combustion / kJ mol^{-1}
butane	-2877
propene	-2058
methane	-890

(3)

(iv) Butane can also be cracked to form products other than propene and methane. Write an equation for this reaction.

(1)



- (b) (i) The enthalpy change of combustion of a liquid hydrocarbon, pentane, was determined in an experiment.

A sample of pentane was burned in a spirit burner and the energy produced used to heat water in a calorimeter.

The results of the experiment are as follows:

Mass of spirit burner and pentane at start	85.6 g
Mass of spirit burner and pentane after burning	84.6 g
Mass of water in calorimeter	200 g
Initial temperature of water	22.0 °C
Final temperature of water	56.0 °C
Mass of 1 mole of pentane	72.0 g

Heat energy transferred (J) = mass of water \times temperature change \times 4.18

Calculate the enthalpy change of combustion of pentane. Include a sign and units in your answer.

(3)

- (ii) Give **one** reason, other than heat loss, why the enthalpy change determined in this experiment differs substantially from the Data Booklet value.

(1)

.....

.....

.....



(iii) Suggest a reason why this experiment would be too hazardous to carry out in a school laboratory.

(1)

(c) (i) Write an equation for the complete combustion of pentane. State symbols are not required.

(1)

(ii) Identify the type and number of bonds broken and formed during the combustion of a molecule of pentane.

(2)

(iii) Explain why the enthalpy change of combustion of pentane is exothermic.

(1)

(Total for Question 20 = 16 marks)

DO NOT WRITE IN THIS AREA

DO NOT WRITE IN THIS AREA

DO NOT WRITE IN THIS AREA



DO NOT WRITE IN THIS AREA

DO NOT WRITE IN THIS AREA

DO NOT WRITE IN THIS AREA

BLANK PAGE



21 This question is about ethane and ethene.

(a) Ethane reacts with chlorine by a free radical mechanism.

(i) Explain what is meant by the term **free radical**.

(1)

(ii) Complete the equation for the formation of free radicals from one molecule of chlorine. Use appropriate curly arrows to show electron movements.

(1)



(iii) Write an equation for the reaction between ethane and a chlorine free radical, and name the type of step in the mechanism where this occurs. Curly arrows are not required.

(2)

Type of step

(iv) Give an equation for a termination step in this mechanism in which an **organic** compound other than chloroethane is formed.

(1)



(b) Ethene contains a carbon-carbon double bond.

- (i) Complete the diagram below showing the σ and π bonds in the carbon-carbon double bond in ethene.

(2)



- *(ii) Describe and explain what happens to the σ and π bonds in ethene in an addition reaction.

(3)

.....

.....

.....

.....

.....

.....

- (iii) One test for a carbon-carbon double bond is the reaction with acidified potassium manganate(VII), KMnO_4 .

Give the colour change if this reaction was carried out with ethene. Draw the **displayed** formula of the product.

(2)

From to

Displayed formula

- (iv) Describe another test for a carbon-carbon double bond and give the colour change for the positive result.

(2)

Test.....

From to



- (v) Ethene reacts with hydrogen bromide. Write the mechanism for this reaction, showing any relevant dipoles.

(4)

Mechanism:

- (c) But-1-ene is an alkene with properties similar to ethene.

Write an equation, using **skeletal** formulae for the organic compounds, showing the conversion of but-1-ene to butane. State the essential condition needed.

(2)

Condition.....

(Total for Question 21 = 20 marks)

TOTAL FOR SECTION B = 60 MARKS

TOTAL FOR PAPER = 80 MARKS



The Periodic Table of Elements

	1	2	Key										0 (8)																																																																																																																																																																																																																																																																																																																																																																																																																																																																																																																																																																																																																																																																																																																																																																																																																																																																																																																																																																																																																				
	(1)	(2)	(3)	(4)	(5)	(6)	(7)	(8)	(9)	(10)	(11)	(12)	(13)	(14)	(15)	(16)	(17)	(18)																																																																																																																																																																																																																																																																																																																																																																																																																																																																																																																																																																																																																																																																																																																																																																																																																																																																																																																																																																																																															
			relative atomic mass atomic symbol name atomic (proton) number																																																																																																																																																																																																																																																																																																																																																																																																																																																																																																																																																																																																																																																																																																																																																																																																																																																																																																																																																																																																																														
6.9	Li lithium 3	9.0	Be beryllium 4	11	12	13	14	15	16	17	18	19	20	21	22	23	24	25	26	27	28	29	30	31	32	33	34	35	36	37	38	39	40	41	42	43	44	45	46	47	48	49	50	51	52	53	54	55	56	57	58	59	60	61	62	63	64	65	66	67	68	69	70	71	72	73	74	75	76	77	78	79	80	81	82	83	84	85	86	87	88	89	90	91	92	93	94	95	96	97	98	99	100	101	102	103	104	105	106	107	108	109	110	111	112	113	114	115	116	117	118	119	120	121	122	123	124	125	126	127	128	129	130	131	132	133	134	135	136	137	138	139	140	141	142	143	144	145	146	147	148	149	150	151	152	153	154	155	156	157	158	159	160	161	162	163	164	165	166	167	168	169	170	171	172	173	174	175	176	177	178	179	180	181	182	183	184	185	186	187	188	189	190	191	192	193	194	195	196	197	198	199	200	201	202	203	204	205	206	207	208	209	210	211	212	213	214	215	216	217	218	219	220	221	222	223	224	225	226	227	228	229	230	231	232	233	234	235	236	237	238	239	240	241	242	243	244	245	246	247	248	249	250	251	252	253	254	255	256	257	258	259	260	261	262	263	264	265	266	267	268	269	270	271	272	273	274	275	276	277	278	279	280	281	282	283	284	285	286	287	288	289	290	291	292	293	294	295	296	297	298	299	300	301	302	303	304	305	306	307	308	309	310	311	312	313	314	315	316	317	318	319	320	321	322	323	324	325	326	327	328	329	330	331	332	333	334	335	336	337	338	339	340	341	342	343	344	345	346	347	348	349	350	351	352	353	354	355	356	357	358	359	360	361	362	363	364	365	366	367	368	369	370	371	372	373	374	375	376	377	378	379	380	381	382	383	384	385	386	387	388	389	390	391	392	393	394	395	396	397	398	399	400	401	402	403	404	405	406	407	408	409	410	411	412	413	414	415	416	417	418	419	420	421	422	423	424	425	426	427	428	429	430	431	432	433	434	435	436	437	438	439	440	441	442	443	444	445	446	447	448	449	450	451	452	453	454	455	456	457	458	459	460	461	462	463	464	465	466	467	468	469	470	471	472	473	474	475	476	477	478	479	480	481	482	483	484	485	486	487	488	489	490	491	492	493	494	495	496	497	498	499	500	501	502	503	504	505	506	507	508	509	510	511	512	513	514	515	516	517	518	519	520	521	522	523	524	525	526	527	528	529	530	531	532	533	534	535	536	537	538	539	540	541	542	543	544	545	546	547	548	549	550	551	552	553	554	555	556	557	558	559	560	561	562	563	564	565	566	567	568	569	570	571	572	573	574	575	576	577	578	579	580	581	582	583	584	585	586	587	588	589	590	591	592	593	594	595	596	597	598	599	600	601	602	603	604	605	606	607	608	609	610	611	612	613	614	615	616	617	618	619	620	621	622	623	624	625	626	627	628	629	630	631	632	633	634	635	636	637	638	639	640	641	642	643	644	645	646	647	648	649	650	651	652	653	654	655	656	657	658	659	660	661	662	663	664	665	666	667	668	669	670	671	672	673	674	675	676	677	678	679	680	681	682	683	684	685	686	687	688	689	690	691	692	693	694	695	696	697	698	699	700	701	702	703	704	705	706	707	708	709	710	711	712	713	714	715	716	717	718	719	720	721	722	723	724	725	726	727	728	729	730	731	732	733	734	735	736	737	738	739	740	741	742	743	744	745	746	747	748	749	750	751	752	753	754	755	756	757	758	759	760	761	762	763	764	765	766	767	768	769	770	771	772	773	774	775	776	777	778	779	780	781	782	783	784	785	786	787	788	789	790	791	792	793	794	795	796	797	798	799	800	801	802	803	804	805	806	807	808	809	810	811	812	813	814	815	816	817	818	819	820	821	822	823	824	825	826	827	828	829	830	831	832	833	834	835	836	837	838	839	840	841	842	843	844	845	846	847	848	849	850	851	852	853	854	855	856	857	858	859	860	861	862	863	864	865	866	867	868	869	870	871	872	873	874	875	876	877	878	879	880	881	882	883	884	885	886	887	888	889	890	891	892	893	894	895	896	897	898	899	900	901	902	903	904	905	906	907	908	909	910	911	912	913	914	915	916	917	918	919	920	921	922	923	924	925	926	927	928	929	930	931	932	933	934	935	936	937	938	939	940	941	942	943	944	945	946	947	948	949	950	951	952	953	954	955	956	957	958	959	960	961	962	963	964	965	966	967	968	969	970	971	972	973	974	975	976	977	978	979	980	981	982	983	984	985	986	987	988	989	990	991	992	993	994	995	996	997	998	999	1000

Elements with atomic numbers 112-116 have been reported but not fully authenticated

* Lanthanide series
* Actinide series



DO NOT WRITE IN THIS AREA

DO NOT WRITE IN THIS AREA

DO NOT WRITE IN THIS AREA