

Write your name here

Surname

Other names

Pearson Edexcel
International
Advanced Level

Centre Number

--	--	--	--	--	--

Candidate Number

--	--	--	--	--

Mechanics M1

Advanced/Advanced Subsidiary

Tuesday 20 January 2015 – Morning
Time: 1 hour 30 minutes

Paper Reference

WME01/01**You must have:**

Mathematical Formulae and Statistical Tables (Blue)

Total Marks

--

Candidates may use any calculator allowed by the regulations of the Joint Council for Qualifications. Calculators must not have the facility for symbolic algebra manipulation, differentiation and integration, or have retrievable mathematical formulae stored in them.

Instructions

- Use **black** ink or ball-point pen.
- If pencil is used for diagrams/sketches/graphs it must be dark (HB or B). Coloured pencils and highlighter pens must not be used.
- **Fill in the boxes** at the top of this page with your name, centre number and candidate number.
- Answer **all** questions and ensure that your answers to parts of questions are clearly labelled.
- Answer the questions in the spaces provided
– *there may be more space than you need.*
- You should show sufficient working to make your methods clear. Answers without working may not gain full credit.
- Whenever a numerical value of g is required, take $g = 9.8 \text{ m s}^{-2}$, and give your answer to either two significant figures or three significant figures.
- When a calculator is used, the answer should be given to an appropriate degree of accuracy.

Information

- The total mark for this paper is 75.
- The marks for **each** question are shown in brackets
– *use this as a guide as to how much time to spend on each question.*

Advice

- Read each question carefully before you start to answer it.
- Try to answer every question.
- Check your answers if you have time at the end.

Turn over ►

P45061A

©2015 Pearson Education Ltd.

1/5/5/5/



PEARSON

1. A railway truck A of mass m and a second railway truck B of mass $4m$ are moving in opposite directions on a smooth straight horizontal track when they collide directly. Immediately before the collision the speed of truck A is $3u$ and the speed of truck B is $2u$. In the collision the trucks join together. Modelling the trucks as particles, find

(a) the speed of A immediately after the collision, **(3)**

(b) the direction of motion of A immediately after the collision, **(1)**

(c) the magnitude of the impulse exerted by A on B in the collision. **(3)**



2.

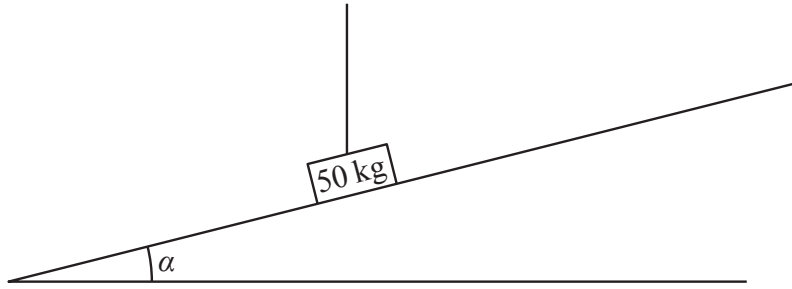


Figure 1

A block of mass 50 kg lies on a rough plane which is inclined to the horizontal at an angle α , where $\tan \alpha = \frac{7}{24}$. The block is held at rest by a vertical rope, as shown in

Figure 1, and is on the point of sliding down the plane. The block is modelled as a particle and the rope is modelled as a light inextensible string. Given that the friction force acting on the block has magnitude 65.8 N, find

(a) the tension in the rope, (4)

(b) the coefficient of friction between the block and the plane. (4)



Question 2 continued

Lined writing area for the answer to Question 2, consisting of approximately 30 horizontal lines.



Leave blank

Question 2 continued

Lined writing area for question response

(Total 8 marks)

Q2 []



Leave
blank

Question 3 continued

Lined area for writing the answer to Question 3.

(Total 7 marks)

Q3



Leave blank

Question 4 continued

Handwriting practice area containing 31 horizontal lines.



P 4 5 0 6 1 A 0 1 3 3 2

Leave
blank

Question 4 continued

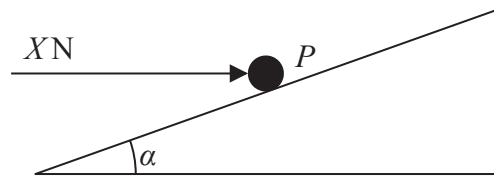
Lined area for writing the answer to Question 4.

(Total 7 marks)

Q4



5.

**Figure 2**

A particle P of mass 2 kg is pushed up a line of greatest slope of a rough plane by a horizontal force of magnitude X newtons, as shown in Figure 2. The force acts in the vertical plane which contains P and a line of greatest slope of the plane. The plane is

inclined to the horizontal at an angle α , where $\tan \alpha = \frac{3}{4}$

The coefficient of friction between P and the plane is 0.5

Given that the acceleration of P is 1.45 m s^{-2} , find the value of X .

(10)



Leave blank

Question 5 continued

Horizontal lines for writing the answer to Question 5.

(Total 10 marks)

Q5

Grade boxes for marking Q5.



8.

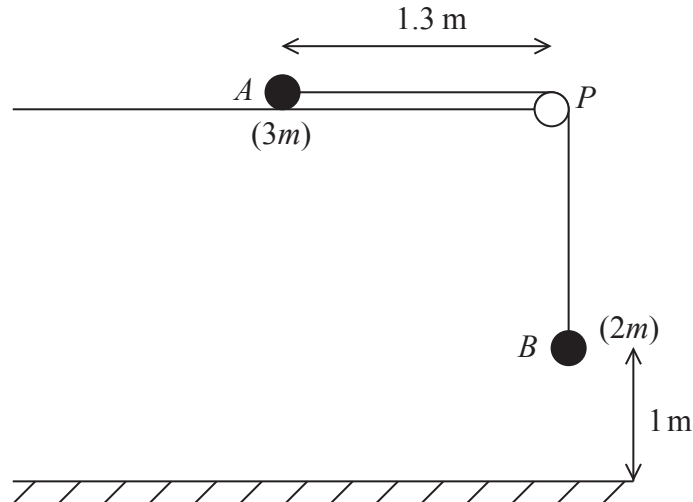


Figure 3

A particle A of mass $3m$ is held at rest on a rough horizontal table. The particle is attached to one end of a light inextensible string. The string passes over a small smooth pulley P which is fixed at the edge of the table. The other end of the string is attached to a particle B of mass $2m$, which hangs freely, vertically below P . The system is released from rest, with the string taut, when A is 1.3 m from P and B is 1 m above the horizontal floor, as shown in Figure 3.

Given that B hits the floor 2 s after release and does not rebound,

- (a) find the acceleration of A during the first two seconds, (2)
- (b) find the coefficient of friction between A and the table, (8)
- (c) determine whether A reaches the pulley. (6)



