

Centre No.						Paper Reference				Surname		Initial(s)		
Candidate No.						6	6	7	8	/	0	1	Signature	

Paper Reference(s)

6678/01

Edexcel GCE

Mechanics M2

Advanced/Advanced Subsidiary

Friday 11 June 2010 – Morning

Time: 1 hour 30 minutes

Examiner's use only

--	--	--

Team Leader's use only

--	--	--

Question Number	Leave Blank
1	
2	
3	
4	
5	
6	
7	
8	
Total	

Materials required for examination

Mathematical Formulae (Pink)

Items included with question papers

Nil

Candidates may use any calculator allowed by the regulations of the Joint Council for Qualifications. Calculators must not have the facility for symbolic algebra manipulation, differentiation and integration, or have retrievable mathematical formulae stored in them.

Instructions to Candidates

In the boxes above, write your centre number, candidate number, your surname, initials and signature.

Check that you have the correct question paper.

Answer ALL the questions.

You must write your answer to each question in the space following the question.

Whenever a numerical value of g is required, take $g = 9.8 \text{ m s}^{-2}$.

When a calculator is used, the answer should be given to an appropriate degree of accuracy.

Information for Candidates

A booklet 'Mathematical Formulae and Statistical Tables' is provided.

Full marks may be obtained for answers to ALL questions.

The marks for individual questions and the parts of questions are shown in round brackets: e.g. (2).

There are 8 questions in this question paper. The total mark for this paper is 75.

There are 32 pages in this question paper. Any blank pages are indicated.

Advice to Candidates

You must ensure that your answers to parts of questions are clearly labelled.

You must show sufficient working to make your methods clear to the examiner.

Answers without working may not gain full credit.



Turn over

2. A particle P of mass 0.6 kg is released from rest and slides down a line of greatest slope of a rough plane. The plane is inclined at 30° to the horizontal. When P has moved 12 m , its speed is 4 m s^{-1} . Given that friction is the only non-gravitational resistive force acting on P , find

(a) the work done against friction as the speed of P increases from 0 m s^{-1} to 4 m s^{-1} , (4)

(b) the coefficient of friction between the particle and the plane. (4)



3.

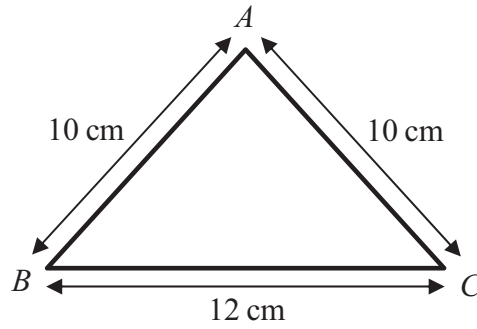


Figure 1

A triangular frame is formed by cutting a uniform rod into 3 pieces which are then joined to form a triangle ABC , where $AB = AC = 10$ cm and $BC = 12$ cm, as shown in Figure 1.

- (a) Find the distance of the centre of mass of the frame from BC . (5)

The frame has total mass M . A particle of mass M is attached to the frame at the mid-point of BC . The frame is then freely suspended from B and hangs in equilibrium.

- (b) Find the size of the angle between BC and the vertical. (4)



Question 4 continued

Ruled area with horizontal lines for writing answers.



6.

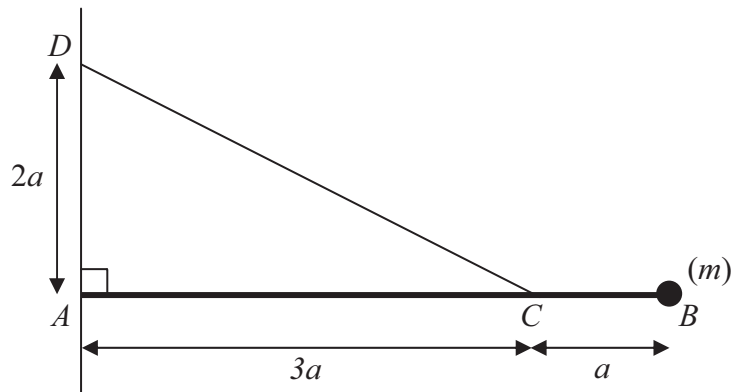
**Figure 2**

Figure 2 shows a uniform rod AB of mass m and length $4a$. The end A of the rod is freely hinged to a point on a vertical wall. A particle of mass m is attached to the rod at B . One end of a light inextensible string is attached to the rod at C , where $AC = 3a$. The other end of the string is attached to the wall at D , where $AD = 2a$ and D is vertically above A . The rod rests horizontally in equilibrium in a vertical plane perpendicular to the wall and the tension in the string is T .

(a) Show that $T = mg\sqrt{13}$. (5)

The particle of mass m at B is removed from the rod and replaced by a particle of mass M which is attached to the rod at B . The string breaks if the tension exceeds $2mg\sqrt{13}$. Given that the string does not break,

(b) show that $M \leq \frac{5}{2}m$. (3)



Question 6 continued

Lined writing area for the answer to Question 6.



7.

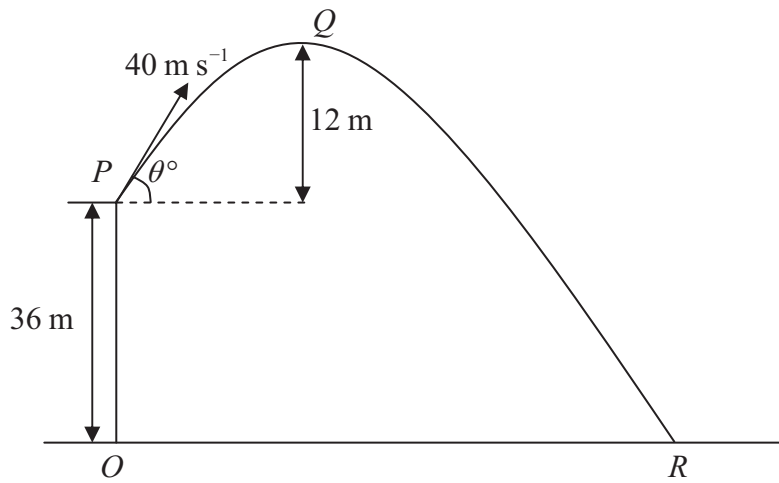


Figure 3

A ball is projected with speed 40 m s^{-1} from a point P on a cliff above horizontal ground. The point O on the ground is vertically below P and OP is 36 m. The ball is projected at an angle θ° to the horizontal. The point Q is the highest point of the path of the ball and is 12 m above the level of P . The ball moves freely under gravity and hits the ground at the point R , as shown in Figure 3. Find

- (a) the value of θ , (3)

- (b) the distance OR , (6)

- (c) the speed of the ball as it hits the ground at R . (3)



8. A small ball A of mass $3m$ is moving with speed u in a straight line on a smooth horizontal table. The ball collides directly with another small ball B of mass m moving with speed u towards A along the same straight line. The coefficient of restitution between A and B is $\frac{1}{2}$. The balls have the same radius and can be modelled as particles.

(a) Find

(i) the speed of A immediately after the collision,

(ii) the speed of B immediately after the collision.

(7)

After the collision B hits a smooth vertical wall which is perpendicular to the direction of motion of B . The coefficient of restitution between B and the wall is $\frac{2}{5}$.

(b) Find the speed of B immediately after hitting the wall.

(2)

The first collision between A and B occurred at a distance $4a$ from the wall. The balls collide again T seconds after the first collision.

(c) Show that $T = \frac{112a}{15u}$.

(6)



