

Cambridge
International
A Level

Cambridge International Examinations
Cambridge International Advanced Level

CANDIDATE
NAME

--

CENTRE
NUMBER

--	--	--	--	--

CANDIDATE
NUMBER

--	--	--	--

MATHEMATICS

9709/52

Paper 5 Mechanics 2 (**M2**)

May/June 2018

1 hour 15 minutes

Candidates answer on the Question Paper.

Additional Materials: List of Formulae (MF9)

READ THESE INSTRUCTIONS FIRST

Write your Centre number, candidate number and name in the spaces at the top of this page.

Write in dark blue or black pen.

You may use an HB pencil for any diagrams or graphs.

Do not use staples, paper clips, glue or correction fluid.

DO NOT WRITE IN ANY BARCODES.

Answer **all** the questions in the space provided. If additional space is required, you should use the lined page at the end of this booklet. The question number(s) must be clearly shown.

Give non-exact numerical answers correct to 3 significant figures, or 1 decimal place in the case of angles in degrees, unless a different level of accuracy is specified in the question.

Where a numerical value for the acceleration due to gravity is needed, use 10 m s^{-2} .

The use of an electronic calculator is expected, where appropriate.

You are reminded of the need for clear presentation in your answers.

At the end of the examination, fasten all your work securely together.

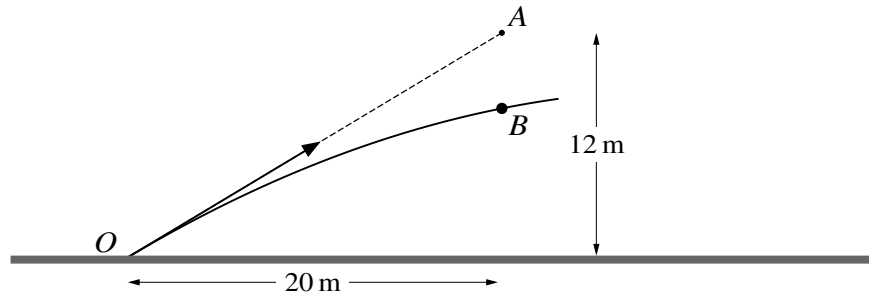
The number of marks is given in brackets [] at the end of each question or part question.

The total number of marks for this paper is 50.

This document consists of **14** printed pages and **2** blank pages.



1



A small ball B is projected from a point O on horizontal ground towards a point A 12 m above the ground. 0.9 s after projection B has travelled a horizontal distance of 20 m and is vertically below A (see diagram).

(i) Find the angle and the speed of projection of B . [4]

.....

.....

.....

.....

.....

.....

.....

.....

.....

.....

.....

.....

(ii) Calculate the distance AB when B is vertically below A . [2]

.....

.....

.....

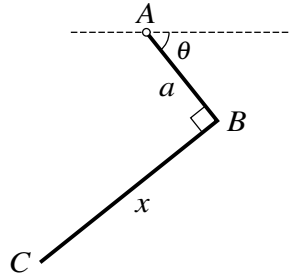
.....

.....

.....

.....

3



ABC is an object made from a uniform wire consisting of two straight portions AB and BC , in which $AB = a$, $BC = x$ and angle $ABC = 90^\circ$. When the object is freely suspended from A and in equilibrium, the angle between AB and the horizontal is θ (see diagram).

(i) Show that $x^2 \tan \theta - 2ax - a^2 = 0$. [3]

.....

.....

.....

.....

.....

.....

.....

.....

.....

.....

.....

.....

.....

.....

.....

.....

.....

.....

.....

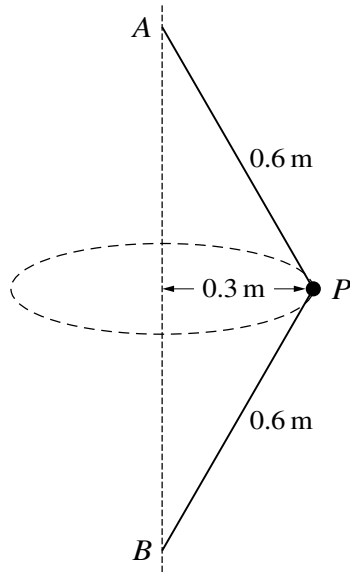
.....

.....

.....

.....

6



A particle P of mass 0.2 kg is attached to one end of a light inextensible string of length 0.6 m . The other end of the string is attached to a fixed point A . The particle P is also attached to one end of a second light inextensible string of length 0.6 m , the other end of which is attached to a fixed point B vertically below A . The particle moves in a horizontal circle of radius 0.3 m , which has its centre at the mid-point of AB , with both strings straight (see diagram).

- (i) Calculate the least possible angular speed of P . [4]

.....

.....

.....

.....

.....

.....

.....

.....

.....

.....

.....

.....

.....

.....

.....

.....

.....

.....

.....

.....

.....

.....

- 7 A particle P of mass 0.2 kg is released from rest at a point O above horizontal ground. At time t s after its release the velocity of P is v m s⁻¹ downwards. A vertically downwards force of magnitude $0.6t$ N acts on P . A vertically upwards force of magnitude ke^{-t} N, where k is a constant, also acts on P .

(i) Show that $\frac{dv}{dt} = 10 - 5ke^{-t} + 3t$. [2]

.....

.....

.....

.....

.....

.....

.....

.....

(ii) Find the greatest value of k for which P does not initially move upwards. [3]

.....

.....

.....

.....

.....

.....

.....

.....

.....

.....

.....

.....

.....

.....

.....

.....

.....

.....

.....

.....

.....

BLANK PAGE

BLANK PAGE

Permission to reproduce items where third-party owned material protected by copyright is included has been sought and cleared where possible. Every reasonable effort has been made by the publisher (UCLES) to trace copyright holders, but if any items requiring clearance have unwittingly been included, the publisher will be pleased to make amends at the earliest possible opportunity.

To avoid the issue of disclosure of answer-related information to candidates, all copyright acknowledgements are reproduced online in the Cambridge International Examinations Copyright Acknowledgements Booklet. This is produced for each series of examinations and is freely available to download at www.cie.org.uk after the live examination series.

Cambridge International Examinations is part of the Cambridge Assessment Group. Cambridge Assessment is the brand name of University of Cambridge Local Examinations Syndicate (UCLES), which is itself a department of the University of Cambridge.