

Cambridge
International
A Level

Cambridge International Examinations
Cambridge International Advanced Level

CANDIDATE
NAME

CENTRE
NUMBER

--	--	--	--	--

CANDIDATE
NUMBER

--	--	--	--



BIOLOGY

9700/53

Paper 5 Planning, Analysis and Evaluation

May/June 2015

1 hour 15 minutes

Candidates answer on the Question Paper.

No Additional Materials are required.

READ THESE INSTRUCTIONS FIRST

Write your Centre number, candidate number and name on all the work you hand in.

Write in dark blue or black pen.

You may use an HB pencil for any diagrams or graphs.

Do not use staples, paper clips, glue or correction fluid.

DO NOT WRITE IN ANY BARCODES.

Answer **all** questions.

Electronic calculators may be used.

You may lose marks if you do not show your working or if you do not use appropriate units.

At the end of the examination, fasten all your work securely together.

The number of marks is given in brackets [] at the end of each question or part question.

This document consists of **8** printed pages.

- 1 The information on the label of a bottle of one brand of cleaning solution for contact lenses states that it contains enzymes which remove protein from contact lenses.

The instructions for using the solution state that:

- The cleaning solution should be poured into the cleaning pot provided up to the marked level.
- The contact lenses should be left in the cleaning solution for a minimum of four hours.
- Before using the lenses, they should be washed in a sterile saline (sodium chloride) solution.

The contents of the solution are:

1. Subtilisin A, a protease with an optimum temperature of 60°C and an optimum pH of 7.0–7.5.
2. Buffered saline, a physiological solution with the same 'balance of ions' as body fluids.
3. Disodium EDTA, a preservative.

A student was asked to find out the actual concentration of the protease present in the contact lens cleaning solution.

The student found a web site that gave the concentration of subtilisin A in different brands of contact lens cleaning solutions. These range between $20\ \mu\text{g cm}^{-3}$ and $100\ \mu\text{g cm}^{-3}$.

The student simulated a dirty contact lens using the protein gelatin and a thin transparent plastic sheet. One side of the plastic sheet was dipped into melted gelatin containing a dye. The gelatin was then allowed to set.

Fig. 1.1 shows a simulated contact lens.

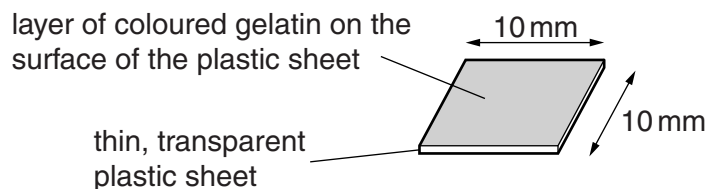


Fig. 1.1

The student tested the activity of subtilisin A by recording the time taken for the coloured gelatin to be removed, leaving the transparent plastic sheet.

Fig. 1.2 shows the apparatus the student used.

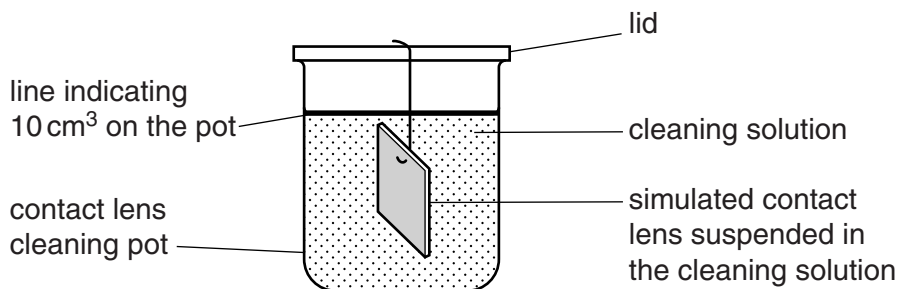


Fig. 1.2

Table 1.1 shows the results of trials to find the time taken for the coloured gelatin to be removed by the cleaning solution at 35 °C.

Table 1.1

trial	1	2	3
time/minutes	35	50	40

- (a) The student noticed that there was a large variation in the results. This may be because it was difficult to know when to stop the stopwatch.

Suggest two problems in deciding when to stop the stopwatch in this investigation.

1.

 2.
 [2]

- (b) The student made a stock cleaning solution containing 1 mg cm^{-3} of subtilisin A, disodium EDTA and a buffered saline solution. The disodium EDTA and the buffered saline solution were the same concentrations as used in the trials.

This solution was used to make a range of concentrations that could be used to find the concentration of subtilisin A in the contact lens cleaning solution.

- (i) Describe how the student could dilute the stock solution to make a range of concentrations to use in their investigation. The student decided to make 50 cm^3 of each concentration.

.....

 [3]

- (ii) State a solution the student should use as a control. Give a reason for your answer.

control solution
reason
 [2]

(c) The student used the apparatus shown in Fig. 1.2 to investigate the effect of different concentrations of subtilisin A on the rate of removal of coloured gelatin from the simulated lenses at 35°C.

(i) Identify the independent and dependent variables in this investigation.

independent variable

dependent variable [2]

(ii) Describe a method the student could use to find the effect of different concentrations of subtilisin A on the removal of protein from the simulated lenses.

Your method should be detailed enough for another person to follow and should not repeat any details from **(b) (i)** of how to dilute the stock cleaning solution.

.....

.....

.....

.....

.....

.....

.....

.....

.....

.....

.....

.....

.....

.....

.....

.....

.....

.....

.....

.....

.....

- 2 Alcohol is a small molecule that is able to pass from maternal blood into the blood of a fetus during pregnancy. Alcohol is thought to interfere with the development of the fetal nervous system. One possible effect of alcohol on the fetus is to change the speed of nerve conduction.

An investigation was carried out into the effect of pre-natal (before birth) alcohol exposure on the speed of nerve conduction in babies after birth. The babies were born to mothers aged 23 – 25 years old.

The speed of nerve conduction is measured by attaching surface electrodes to the skin. One electrode stimulates the skin and the other electrode records the presence of an action potential as it passes through a neurone. A meter records the time taken for the action potential to travel between the electrodes.

Fig. 2.1 shows a diagram of the apparatus.

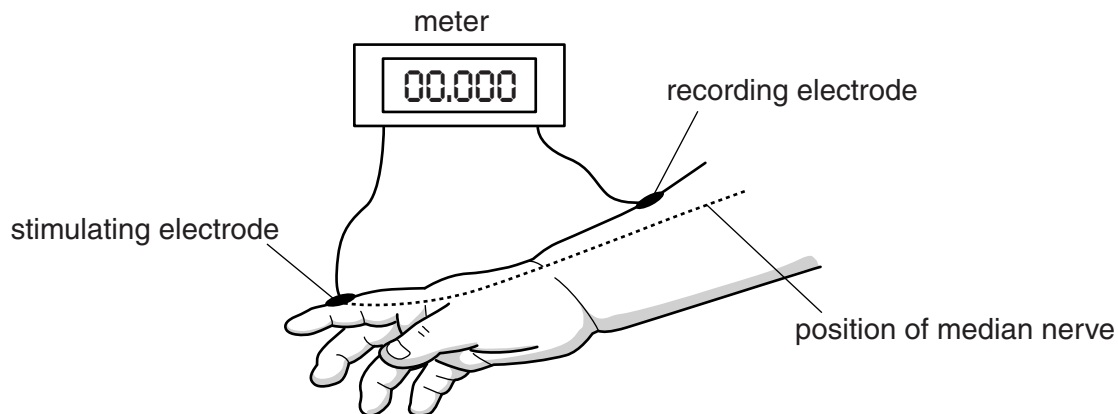


Fig. 2.1

The test shown in Fig. 2.1 was carried out on the median nerve. This nerve is found in the arm. Its sensory neurones supply the skin receptors in the hand and its motor neurones supply the muscles that move the arm and hand.

Two groups were tested.

- **Group 1** consisted of seventeen babies, seven male and ten female, who had been exposed to alcohol during pregnancy. The mothers of these babies all drank more than 32 mg of alcohol per day.
- **Group 2** consisted of thirteen babies, six male and seven female, who had not been exposed to alcohol during pregnancy. The mothers of these babies did not drink any alcohol.

Each group was tested:

- 20 days after birth
- 400 days after birth.

(a) Identify the **independent** variable in this investigation.

.....[1]

Table 2.1 shows the results of this investigation.

Table 2.1

type of neurones in the median nerve	mean speed of nerve conduction / ms ⁻¹ ± s			
	20 days		400 days	
	group 1 pre-natal alcohol exposure	group 2 no pre-natal alcohol exposure	group 1 pre-natal alcohol exposure	group 2 no pre-natal alcohol exposure
sensory neurones	31.14 ± 1.67	26.06 ± 2.10	44.51 ± 2.37	51.66 ± 1.77
motor neurones	27.54 ± 1.02	31.14 ± 3.12	46.51 ± 3.73	49.80 ± 0.38

s = standard deviation

- (b) (i)** What conclusions can be made about the effects of pre-natal alcohol exposure compared to no pre-natal alcohol exposure on the conduction velocity in the median nerve in the sensory neurones and in the motor neurones.

sensory neurones

.....

.....

motor neurones

.....

.....[2]

- (ii)** State **one** other conclusion about conduction velocity in the median nerve that can be made from these results.

.....

.....[1]

- (c)** Identify which of the results in Table 2.1 is the most reliable. Give a reason for your answer.

.....

.....

.....

.....[2]

(d) (i) State why the results for the sensory conduction velocity of the median nerve of **group 1** and **group 2** at 20 days and 400 days may be significant.

.....
.....[1]

(ii) There is a difference between the mean conduction speed in sensory neurones in the two groups of babies.

State **one** reason why the *t*-test is suitable to determine if this difference is significant.

.....
.....[1]

(iii) State a null hypothesis for this test.

.....
.....[1]

(e) Suggest two reasons why the results of this investigation may not be valid for **all babies** born to mothers who drank alcohol while they were pregnant.

1.
.....

2.
.....[2]

[Total: 11]

Permission to reproduce items where third-party owned material protected by copyright is included has been sought and cleared where possible. Every reasonable effort has been made by the publisher (UCLES) to trace copyright holders, but if any items requiring clearance have unwittingly been included, the publisher will be pleased to make amends at the earliest possible opportunity.

To avoid the issue of disclosure of answer-related information to candidates, all copyright acknowledgements are reproduced online in the Cambridge International Examinations Copyright Acknowledgements Booklet. This is produced for each series of examinations and is freely available to download at www.cie.org.uk after the live examination series.

Cambridge International Examinations is part of the Cambridge Assessment Group. Cambridge Assessment is the brand name of University of Cambridge Local Examinations Syndicate (UCLES), which is itself a department of the University of Cambridge.