



UNIVERSITY OF CAMBRIDGE INTERNATIONAL EXAMINATIONS
General Certificate of Education Ordinary Level


CANDIDATE
NAME

CENTRE
NUMBER

--	--	--	--	--

CANDIDATE
NUMBER

--	--	--	--



CHEMISTRY

Paper 2 Theory

5070/21

May/June 2011

1 hour 30 minutes

Candidates answer on the Question Paper.

No additional materials are required.

READ THESE INSTRUCTIONS FIRST

Write your Centre number, candidate number and name on all the work you hand in.

Write in dark blue or black pen.

You may use a soft pencil for any diagrams, graphs or rough working.

Do not use staples, paper clips, highlighters, glue or correction fluid.

DO NOT WRITE IN ANY BARCODES.

Section A

Answer **all** questions.

Write your answers in the spaces provided in the Question Paper.

Section B

Answer any **three** questions.

Write your answers in the spaces provided in the Question Paper.

A copy of the Periodic Table is printed on page 20.

At the end of the examination, fasten all your work securely together.

The number of marks is given in brackets [] at the end of each question or part question.

For Examiner's Use	
Section A	
B6	
B7	
B8	
B9	
Total	

This document consists of **17** printed pages and **3** blank pages.



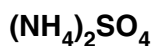
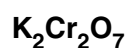
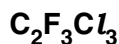
Section A

Answer **all** the questions in this section in the spaces provided.

The total mark for this section is 45.

For
Examiner's
Use

A1 Choose from the following formulae to answer the questions below.



Each formula can be used once, more than once, or not at all.

Which is the formula of a compound that

(a) is a catalyst in the Contact process,

.....[1]

(b) in aqueous solution reacts with aqueous sodium hydroxide to give a white precipitate that redissolves in excess sodium hydroxide,

.....[1]

(c) is an insoluble salt,

.....[1]

(d) is involved in ozone depletion in the upper atmosphere,

.....[1]

(e) in aqueous solution will react with aqueous barium chloride to make a white precipitate,

.....[1]

(f) is an alkane,

.....[1]

(g) is used as a fertiliser?

.....[1]

[Total: 7]

A2 Small pieces of copper were added to excess concentrated sulfuric acid and the mixture heated for 30 minutes. A colourless gas **Z** was formed. When **Z** was tested with filter paper dipped into acidified potassium dichromate(VI), there was a colour change from orange to green.

The reaction mixture was cooled and then diluted with water. A blue solution, **Y**, was formed. Aqueous sodium hydroxide was added drop by drop to the blue solution. Eventually a blue precipitate, **X**, was formed. On heating the blue precipitate turned black to form compound **V**. Analysis of **V** showed that it contained 79.9 % copper and 20.1 % oxygen by mass.

(a) Name gas **Z**.

.....[1]

(b) Name the blue solution **Y**.

.....[1]

(c) When aqueous sodium hydroxide was added to the cooled reaction mixture, it initially reacted with excess sulfuric acid.

Write the ionic equation for this reaction.

[1]

(d) (i) Name the blue precipitate **X**.

.....[1]

(ii) Write an ionic equation, including state symbols, to show the formation of this blue precipitate.

[2]

(e) Calculate the empirical formula of the black solid **V**.

empirical formula of **V** is [2]

[Total: 8]

A3 Uranium is a radioactive metal. It has two main isotopes, uranium-235 with a nucleon number of 235 and uranium-238 with a nucleon number of 238.

(a) (i) State one similarity, in terms of sub-atomic particles, between uranium-235 and uranium-238.

.....
.....[1]

(ii) State one difference, in terms of sub-atomic particles, between uranium-235 and uranium-238.

.....
.....[1]

(b) Uranium is manufactured from uranium(IV) oxide, UO_2 , in a two-step process.

Step 1 – uranium(IV) oxide is heated with hydrogen fluoride to make uranium(IV) fluoride, UF_4 , and water.

Step 2 – uranium(IV) fluoride is reduced by magnesium to give uranium and one other product.

(i) Construct the equation for step 1.

[1]

(ii) Construct the equation for step 2.

[1]

(iii) Step 2 involves a reduction.
Explain the meaning of the term *reduction*?

.....
.....
.....[1]

- (iv) Calculate the mass of uranium that can be made from 1.00 tonne of uranium(IV) oxide.

[One tonne is one million grams.]

For
Examiner's
Use

mass of uranium = tonnes [3]

- (c) Uranium reacts with dilute hydrochloric acid to form hydrogen.
Using this information and your knowledge of the reactivity of metals, suggest where in the following reactivity series you would place uranium.

most reactive

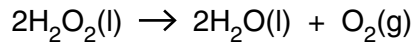
**potassium
sodium
calcium
magnesium
copper
silver**

least reactive

.....[1]

[Total: 9]

A4 Hydrogen peroxide, H₂O₂, is a covalent compound. Hydrogen peroxide decomposes to form water and oxygen.



(a) Draw a 'dot-and-cross' diagram for a molecule of hydrogen peroxide.

[2]

(b) The decomposition of hydrogen peroxide involves a change from the liquid state to the gaseous state. Describe the difference in both the movement and arrangement of particles in a liquid and in a gas.

.....
.....
.....
.....[2]

(c) At room temperature pure hydrogen peroxide decomposes much faster than dilute aqueous hydrogen peroxide. Explain why in terms of collision theory.

.....
.....
.....
.....[2]

(d) When aqueous iron(II) ions are warmed with aqueous hydrogen peroxide, iron(III) ions are formed.

(i) Construct an ionic equation for the oxidation of iron(II) ions to iron(III) ions.

[1]

- (ii) Describe a chemical test that can be used to confirm that iron(II) ions have been oxidised to form iron(III) ions.

For
Examiner's
Use

.....
.....
.....
.....[2]

- (e) Aqueous hydrogen peroxide was added to acidified aqueous potassium manganate(VII). The purple solution turned colourless.

Aqueous hydrogen peroxide was added to acidified aqueous potassium iodide. The colourless solution turned brown.

What deductions can you make about hydrogen peroxide from these two observations? Explain your answer.

.....
.....
.....
.....[2]

[Total: 11]

A5 Clean, dry air contains a mixture of gases including oxygen, nitrogen, carbon dioxide and the noble gases.

(a) Give the percentage by volume of nitrogen in clean, dry air.

.....[1]

(b) State and explain how oxygen is extracted from air.

.....
.....
.....
.....
.....
.....[3]

(c) Explain how the carbon cycle helps to keep the composition of air relatively constant.

.....
.....
.....
.....
.....
.....
.....
.....
.....
.....
.....[4]

(d) Many electricity power stations burn fossil fuels. Sulfur dioxide is a pollutant produced during the burning of fossil fuels. Sulfur dioxide causes acid rain.

Describe **two** ways in which calcium carbonate can be used to reduce the effects of burning fossil fuels.

1

.....

2

.....[2]

[Total: 10]

Section B

Answer **three** questions from this section in the spaces provided.

The total mark for this section is 30.

*For
Examiner's
Use*

B6 Electrolysis involves the chemical decomposition of a compound, either when molten or in aqueous solution, by the passage of an electric current.

(a) Explain why aqueous calcium nitrate can be electrolysed but liquid pentane cannot.

.....
.....
.....
.....[2]

(b) State the products of the electrolysis of molten sodium chloride.

.....[1]

(c) State the products of the electrolysis of concentrated aqueous sodium chloride.

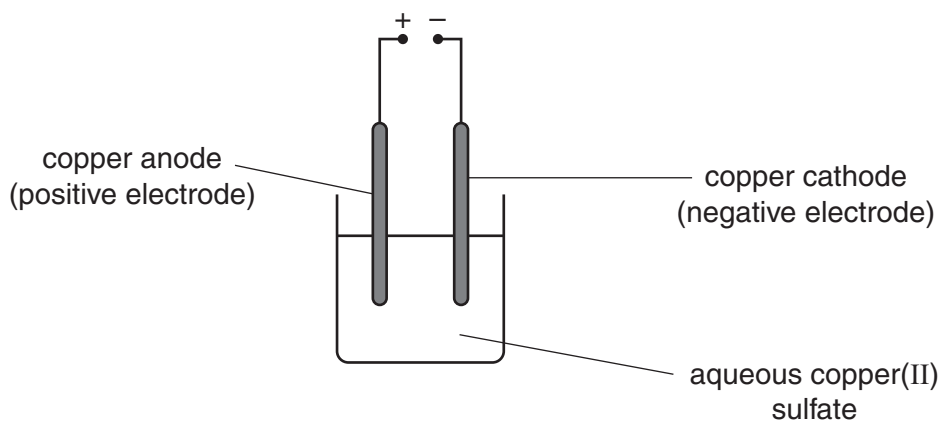
.....[1]

(d) Describe the essential details of the manufacture of aluminium by electrolysis.

.....
.....
.....
.....[2]

- (e) A student investigates the electrolysis of aqueous copper(II) sulfate using the apparatus shown below.

For
Examiner's
Use



The student weighs the copper cathode before and after the electrolysis.

experiment number	current used / A	time taken / s	mass of cathode	
			before starting / g	after electrolysis / g
1	2.0	180	1.24	1.36
2	4.0	180	1.20	1.44
3	2.0	360	1.34	1.58

- (i) Explain, with the aid of an equation, why the cathode increases in mass.

.....

[2]

- (ii) In experiment 2 the student measures the mass of the anode both before and after the electrolysis.

At the start the anode has a mass of 1.45g.

Determine the mass of the anode at the end of the electrolysis.

mass of anode at end = g [1]

- (iii) The student does a fourth experiment, this time using a current of 8.0A for 90 seconds. At the start the cathode has a mass of 1.51 g. Predict the mass of the cathode at the end of the electrolysis.

*For
Examiner's
Use*

mass of cathode at end = g [1]

[Total: 10]

- B7** Alcohols are a homologous series of organic compounds.
The table shows some information about the first five alcohols.

For
Examiner's
Use

name	molecular formula
methanol	CH ₄ O
ethanol	C ₂ H ₆ O
	C ₃ H ₈ O
butanol	C ₄ H ₁₀ O
pentanol	C ₅ H ₁₂ O

- (a) Suggest the name of the alcohol with the molecular formula C₃H₈O.

.....[1]

- (b) Draw the structure of an alcohol with the molecular formula C₄H₁₀O and explain why this alcohol is saturated.

.....
.....[2]

- (c) Deduce the molecular formula of an alcohol that contains seven carbon atoms.

.....[1]

- (d) Ethanol reacts with ethanoic acid to form ethyl ethanoate.

- (i) Draw the structure of ethyl ethanoate.

[1]

- (ii) Suggest a use for ethyl ethanoate.

.....[1]

(e) Describe, with the aid of an equation, how ethanol is manufactured by fermentation.

For
Examiner's
Use

.....
.....
.....
.....
.....[3]

(f) When ethanol is heated with concentrated sulfuric acid a colourless gas, **A**, is produced. Gas **A** will decolourise aqueous bromine.

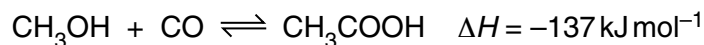
Identify gas **A**.

.....[1]

[Total: 10]

- B8** Ethanoic acid is manufactured by a reaction between methanol, CH_3OH , and carbon monoxide.

For
Examiner's
Use



This reaction is exothermic.

- (a) The reaction is carried out at a pressure of 30 atmospheres and a temperature of 180°C .

- (i) Predict and explain the effect on the position of equilibrium if the reaction is carried out at 30 atmospheres pressure and 20°C rather than 180°C .

.....

[2]

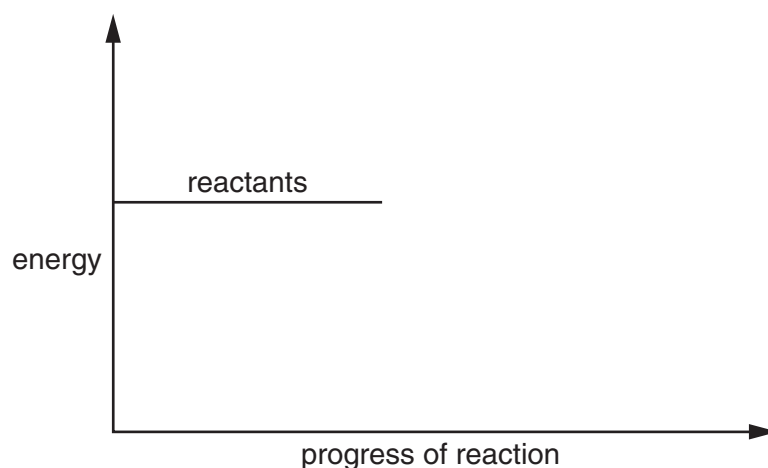
- (ii) Suggest one reason why the reaction is carried out at 180°C rather than 20°C .

.....
[1]

- (b) Complete the energy profile diagram for the reaction between methanol and carbon monoxide.

On your diagram label the

- product,
- activation energy, E_a ,
- enthalpy change for the reaction, ΔH .



[3]

- (c) The manufacture of ethanoic acid from methanol also uses a catalyst to increase the speed of reaction.

Explain how a catalyst increases the speed of reaction.

.....
.....[1]

- (d) In an investigation 10.0 moles of methanol are mixed with 20.0 moles of carbon monoxide.

At the end of the reaction 9.8 moles of ethanoic acid are formed.

Calculate the percentage yield of ethanoic acid.

percentage yield = % [2]

- (e) Ethanoic acid reacts with ammonia to form a salt.

Give the formula of this salt.

.....[1]

[Total: 10]

B9 Sulfamic acid, SO_3NH_2 , is a weak acid used to remove limescale from kettles.

(a) Explain the meaning of the term *weak acid*?

.....
[1]

(b) The pH of an aqueous solution of sulfamic acid can be determined using a pH meter. Describe another way of estimating the pH of a solution of sulfamic acid.

.....

[2]

(c) A 0.105 g sample of sulfamic acid is dissolved in 25.0cm^3 of water. The sulfamic acid solution requires 10.8cm^3 of 0.100mol dm^{-3} potassium hydroxide for complete neutralisation.

Calculate the number of moles of sulfamic acid that react with one mole of potassium hydroxide.

number of moles of sulfamic acid = [3]

(d) Aqueous sulfamic acid reacts with magnesium to form magnesium sulfamate, $\text{Mg}(\text{SO}_3\text{NH}_2)_2$.

(i) Write an equation for this reaction.

[1]

(ii) Limescale contains calcium carbonate. Describe, with the aid of an equation, how aqueous sulfamic acid reacts with calcium carbonate.

.....[2]

(e) Sulfamic acid reacts with sodium nitrite, NaNO_2 , to form water, sodium hydrogensulfate, NaHSO_4 , and a colourless gas. Suggest the identity of the colourless gas.

.....[1]

[Total: 10]

BLANK PAGE

BLANK PAGE

BLANK PAGE

Permission to reproduce items where third-party owned material protected by copyright is included has been sought and cleared where possible. Every reasonable effort has been made by the publisher (UCLES) to trace copyright holders, but if any items requiring clearance have unwittingly been included, the publisher will be pleased to make amends at the earliest possible opportunity.

University of Cambridge International Examinations is part of the Cambridge Assessment Group. Cambridge Assessment is the brand name of University of Cambridge Local Examinations Syndicate (UCLES), which is itself a department of the University of Cambridge.

DATA SHEET
The Periodic Table of the Elements

Group		I	II	III	IV	V	VI	VII	0								
		1 H Hydrogen 1							4 He Helium 2								
7 Li Lithium 3	9 Be Beryllium 4							16 O Oxygen 8	19 F Fluorine 9	20 Ne Neon 10							
23 Na Sodium 11	24 Mg Magnesium 12	27 Al Aluminium 13	28 Si Silicon 14	31 P Phosphorus 15	32 S Sulfur 16	35.5 Cl Chlorine 17			40 Ar Argon 18								
39 K Potassium 19	40 Ca Calcium 20	45 Sc Scandium 21	48 Ti Titanium 22	55 Mn Manganese 25	56 Fe Iron 26	59 Ni Nickel 28	64 Cu Copper 29	65 Zn Zinc 30	73 Ge Germanium 32	75 As Arsenic 33	77 Se Selenium 34	80 Br Bromine 35	84 Kr Krypton 36				
85 Rb Rubidium 37	88 Sr Strontium 38	89 Y Yttrium 39	91 Zr Zirconium 40	93 Nb Niobium 41	101 Ru Ruthenium 44	103 Rh Rhodium 45	106 Pd Palladium 46	108 Ag Silver 47	112 Cd Cadmium 48	115 In Indium 49	119 Sn Tin 50	122 Sb Antimony 51	127 Te Tellurium 52	131 Xe Xenon 54			
133 Cs Caesium 55	137 Ba Barium 56	139 La Lanthanum 57	178 Hf Hafnium 72	181 Ta Tantalum 73	186 Re Rhenium 75	188 Os Osmium 76	192 Ir Iridium 77	195 Pt Platinum 78	197 Au Gold 79	201 Hg Mercury 80	204 Tl Thallium 81	207 Pb Lead 82	209 Bi Bismuth 83	210 Po Polonium 84	222 Rn Radon 86		
223 Fr Francium 87	226 Ra Radium 88	227 Ac Actinium 89							159 Tb Terbium 65	162 Dy Dysprosium 66	165 Ho Holmium 67	167 Er Erbium 68	169 Tm Thulium 69	173 Yb Ytterbium 70	175 Lu Lutetium 71		
				140 Ce Cerium 58	141 Pr Praseodymium 59	144 Nd Neodymium 60	147 Pm Promethium 61	150 Sm Samarium 62	152 Eu Europium 63	157 Gd Gadolinium 64	159 Tb Terbium 65	162 Dy Dysprosium 66	165 Ho Holmium 67	167 Er Erbium 68	169 Tm Thulium 69	173 Yb Ytterbium 70	175 Lu Lutetium 71
		232 Th Thorium 90	231 Pa Protactinium 91	238 U Uranium 92	237 Np Neptunium 93	244 Pu Plutonium 94	243 Am Americium 95	247 Cm Curium 96	251 Bk Berkelium 97	251 Cf Californium 98	251 Cf Californium 98	257 Fm Fermium 100	257 Fm Fermium 100	258 Md Mendelevium 101	259 No Nobelium 102	260 Lr Lawrencium 103	260 Lr Lawrencium 103

* 58–71 Lanthanoid series
† 90–103 Actinoid series

Key

a	X
b	†

a = relative atomic mass
X = atomic symbol
b = atomic (proton) number

The volume of one mole of any gas is 24 dm³ at room temperature and pressure (r.t.p.).