

Write your name here

Surname

Other names

Pearson Edexcel Certificate

Centre Number

Candidate Number

**Pearson Edexcel
International GCSE**

Chemistry

Unit: KCH0/4CH0**Science (Double Award) KSC0/4SC0****Paper: 1C**

Thursday 18 May 2017 – Morning

Time: 2 hours

Paper Reference

**KCH0/1C 4CH0/1C
KSC0/1C 4SC0/1C****You must have:**

Calculator, ruler

Total Marks

Instructions

- Use **black** ink or ball-point pen.
- **Fill in the boxes** at the top of this page with your name, centre number and candidate number.
- Answer **all** questions.
- Answer the questions in the spaces provided
– *there may be more space than you need.*
- Show all the steps in any calculations and state the units.
- Some questions must be answered with a cross in a box ☒. If you change your mind about an answer, put a line through the box ☒ and then mark your new answer with a cross ☒.

Information

- The total mark for this paper is 120.
- The marks for **each** question are shown in brackets
– *use this as a guide as to how much time to spend on each question.*

Advice

- Read each question carefully before you start to answer it.
- Write your answers neatly and in good English.
- Try to answer every question.
- Check your answers if you have time at the end.

Turn over ►

P48084RA

©2017 Pearson Education Ltd.

1/1/1/1/1/



P 4 8 0 8 4 R A 0 1 3 6



Pearson

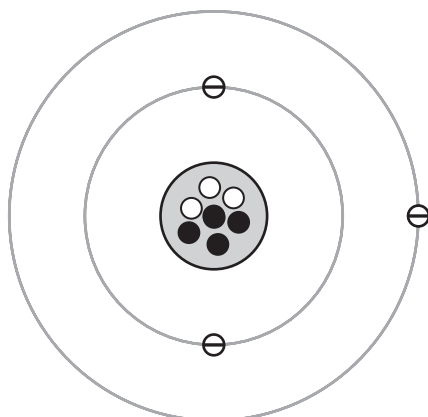
THE PERIODIC TABLE

Period 1 2 3 4 5 6 7 0

1	1	2	3	4	5	6	7	0																																																																																																																																																																																																																																																																																																																																																																																							
1	7 Li Lithium 3	8 Be Beryllium 4	9 B Boron 5	10 C Carbon 6	11 N Nitrogen 7	12 O Oxygen 8	13 F Fluorine 9	14 Ne Neon 10																																																																																																																																																																																																																																																																																																																																																																																							
2	19 K Potassium 19	20 Ca Calcium 20	21 Sc Scandium 21	22 Ti Titanium 22	23 V Vanadium 23	24 Cr Chromium 24	25 Mn Manganese 25	26 Fe Iron 26	27 Co Cobalt 27	28 Ni Nickel 28	29 Cu Copper 29	30 Zn Zinc 30	31 Ga Gallium 31	32 Ge Germanium 32	33 As Arsenic 33	34 Se Selenium 34	35 Br Bromine 35	36 Kr Krypton 36																																																																																																																																																																																																																																																																																																																																																																													
3	39 Y Yttrium 39	40 Zr Zirconium 40	41 Nb Niobium 41	42 Mo Molybdenum 42	43 Tc Technetium 43	44 Ru Ruthenium 44	45 Rh Rhodium 45	46 Pd Palladium 46	47 Ag Silver 47	48 Cd Cadmium 48	49 In Indium 49	50 Sn Tin 50	51 Sb Antimony 51	52 Te Tellurium 52	53 I Iodine 53	54 Xe Xenon 54																																																																																																																																																																																																																																																																																																																																																																															
4	87 Fr Francium 87	88 Ra Radium 88	89 Ac Actinium 89	91 La Lanthanum 57	92 Ce Cerium 58	93 Pr Praseodymium 59	94 Nd Neodymium 60	95 Pm Promethium 61	96 Sm Samarium 62	97 Eu Europium 63	98 Gd Gadolinium 64	99 Tb Terbium 65	100 Dy Dysprosium 66	101 Ho Holmium 67	102 Er Erbium 68	103 Tm Thulium 69	104 Yb Ytterbium 70	105 Lu Lutetium 71	106 Hf Hafnium 72	107 Ta Tantalum 73	108 W Tungsten 74	109 Re Rhenium 75	110 Os Osmium 76	111 Ir Iridium 77	112 Pt Platinum 78	113 Au Gold 79	114 Hg Mercury 80	115 Tl Thallium 81	116 Pb Lead 82	117 Bi Bismuth 83	118 Po Polonium 84	119 At Astatine 85	120 Rn Radon 86																																																																																																																																																																																																																																																																																																																																																														
5	133 Cs Caesium 55	137 Ba Barium 56	138 La Lanthanum 57	139 Ce Cerium 58	140 Pr Praseodymium 59	141 Nd Neodymium 60	142 Pm Promethium 61	143 Sm Samarium 62	144 Eu Europium 63	145 Gd Gadolinium 64	146 Tb Terbium 65	147 Dy Dysprosium 66	148 Ho Holmium 67	149 Er Erbium 68	150 Tm Thulium 69	151 Yb Ytterbium 70	152 Lu Lutetium 71	153 Hf Hafnium 72	154 Ta Tantalum 73	155 W Tungsten 74	156 Re Rhenium 75	157 Os Osmium 76	158 Ir Iridium 77	159 Pt Platinum 78	160 Au Gold 79	161 Hg Mercury 80	162 Tl Thallium 81	163 Pb Lead 82	164 Bi Bismuth 83	165 Po Polonium 84	166 At Astatine 85	167 Rn Radon 86																																																																																																																																																																																																																																																																																																																																																															
6	223 Fr Francium 87	226 Ra Radium 88	227 Ac Actinium 89	228 Th Thorium 90	232 U Uranium 92	238 Pu Plutonium 94	244 Cm Curium 96	254 Fm Fermium 100	262 No Nobelium 102	264 Lr Lawrencium 103	265 Rf Rutherfordium 104	266 Db Dubnium 105	267 Sg Seaborgium 106	268 Bh Bohrium 107	269 Hs Hassium 108	270 Mt Meitnerium 109	271 Ds Darmstadtium 110	272 Rg Roentgenium 111	273 Og Oganesson 112	274 Nh Nihonium 113	275 Fl Flerovium 114	276 Mc Moscovium 115	277 Lv Livermorium 116	278 Ts Tennessine 117	279 Og Oganesson 118	280 Nh Nihonium 113	281 Fl Flerovium 114	282 Mc Moscovium 115	283 Lv Livermorium 116	284 Ts Tennessine 117	285 Og Oganesson 118																																																																																																																																																																																																																																																																																																																																																																
7	287 Uu Ununseptium 117	288 Uub Ununbium 118	289 Uut Ununtrium 119	290 Uuq Ununquadium 120	291 Uuq Ununquadium 120	292 Uub Ununbium 118	293 Uut Ununtrium 119	294 Uuq Ununquadium 120	295 Uub Ununbium 118	296 Uut Ununtrium 119	297 Uuq Ununquadium 120	298 Uub Ununbium 118	299 Uut Ununtrium 119	300 Uuq Ununquadium 120	301 Uub Ununbium 118	302 Uut Ununtrium 119	303 Uuq Ununquadium 120	304 Uub Ununbium 118	305 Uut Ununtrium 119	306 Uuq Ununquadium 120	307 Uub Ununbium 118	308 Uut Ununtrium 119	309 Uuq Ununquadium 120	310 Uub Ununbium 118	311 Uut Ununtrium 119	312 Uuq Ununquadium 120	313 Uub Ununbium 118	314 Uut Ununtrium 119	315 Uuq Ununquadium 120	316 Uub Ununbium 118	317 Uut Ununtrium 119	318 Uuq Ununquadium 120	319 Uub Ununbium 118	320 Uut Ununtrium 119	321 Uuq Ununquadium 120	322 Uub Ununbium 118	323 Uut Ununtrium 119	324 Uuq Ununquadium 120	325 Uub Ununbium 118	326 Uut Ununtrium 119	327 Uuq Ununquadium 120	328 Uub Ununbium 118	329 Uut Ununtrium 119	330 Uuq Ununquadium 120	331 Uub Ununbium 118	332 Uut Ununtrium 119	333 Uuq Ununquadium 120	334 Uub Ununbium 118	335 Uut Ununtrium 119	336 Uuq Ununquadium 120	337 Uub Ununbium 118	338 Uut Ununtrium 119	339 Uuq Ununquadium 120	340 Uub Ununbium 118	341 Uut Ununtrium 119	342 Uuq Ununquadium 120	343 Uub Ununbium 118	344 Uut Ununtrium 119	345 Uuq Ununquadium 120	346 Uub Ununbium 118	347 Uut Ununtrium 119	348 Uuq Ununquadium 120	349 Uub Ununbium 118	350 Uut Ununtrium 119	351 Uuq Ununquadium 120	352 Uub Ununbium 118	353 Uut Ununtrium 119	354 Uuq Ununquadium 120	355 Uub Ununbium 118	356 Uut Ununtrium 119	357 Uuq Ununquadium 120	358 Uub Ununbium 118	359 Uut Ununtrium 119	360 Uuq Ununquadium 120	361 Uub Ununbium 118	362 Uut Ununtrium 119	363 Uuq Ununquadium 120	364 Uub Ununbium 118	365 Uut Ununtrium 119	366 Uuq Ununquadium 120	367 Uub Ununbium 118	368 Uut Ununtrium 119	369 Uuq Ununquadium 120	370 Uub Ununbium 118	371 Uut Ununtrium 119	372 Uuq Ununquadium 120	373 Uub Ununbium 118	374 Uut Ununtrium 119	375 Uuq Ununquadium 120	376 Uub Ununbium 118	377 Uut Ununtrium 119	378 Uuq Ununquadium 120	379 Uub Ununbium 118	380 Uut Ununtrium 119	381 Uuq Ununquadium 120	382 Uub Ununbium 118	383 Uut Ununtrium 119	384 Uuq Ununquadium 120	385 Uub Ununbium 118	386 Uut Ununtrium 119	387 Uuq Ununquadium 120	388 Uub Ununbium 118	389 Uut Ununtrium 119	390 Uuq Ununquadium 120	391 Uub Ununbium 118	392 Uut Ununtrium 119	393 Uuq Ununquadium 120	394 Uub Ununbium 118	395 Uut Ununtrium 119	396 Uuq Ununquadium 120	397 Uub Ununbium 118	398 Uut Ununtrium 119	399 Uuq Ununquadium 120	400 Uub Ununbium 118	401 Uut Ununtrium 119	402 Uuq Ununquadium 120	403 Uub Ununbium 118	404 Uut Ununtrium 119	405 Uuq Ununquadium 120	406 Uub Ununbium 118	407 Uut Ununtrium 119	408 Uuq Ununquadium 120	409 Uub Ununbium 118	410 Uut Ununtrium 119	411 Uuq Ununquadium 120	412 Uub Ununbium 118	413 Uut Ununtrium 119	414 Uuq Ununquadium 120	415 Uub Ununbium 118	416 Uut Ununtrium 119	417 Uuq Ununquadium 120	418 Uub Ununbium 118	419 Uut Ununtrium 119	420 Uuq Ununquadium 120	421 Uub Ununbium 118	422 Uut Ununtrium 119	423 Uuq Ununquadium 120	424 Uub Ununbium 118	425 Uut Ununtrium 119	426 Uuq Ununquadium 120	427 Uub Ununbium 118	428 Uut Ununtrium 119	429 Uuq Ununquadium 120	430 Uub Ununbium 118	431 Uut Ununtrium 119	432 Uuq Ununquadium 120	433 Uub Ununbium 118	434 Uut Ununtrium 119	435 Uuq Ununquadium 120	436 Uub Ununbium 118	437 Uut Ununtrium 119	438 Uuq Ununquadium 120	439 Uub Ununbium 118	440 Uut Ununtrium 119	441 Uuq Ununquadium 120	442 Uub Ununbium 118	443 Uut Ununtrium 119	444 Uuq Ununquadium 120	445 Uub Ununbium 118	446 Uut Ununtrium 119	447 Uuq Ununquadium 120	448 Uub Ununbium 118	449 Uut Ununtrium 119	450 Uuq Ununquadium 120	451 Uub Ununbium 118	452 Uut Ununtrium 119	453 Uuq Ununquadium 120	454 Uub Ununbium 118	455 Uut Ununtrium 119	456 Uuq Ununquadium 120	457 Uub Ununbium 118	458 Uut Ununtrium 119	459 Uuq Ununquadium 120	460 Uub Ununbium 118	461 Uut Ununtrium 119	462 Uuq Ununquadium 120	463 Uub Ununbium 118	464 Uut Ununtrium 119	465 Uuq Ununquadium 120	466 Uub Ununbium 118	467 Uut Ununtrium 119	468 Uuq Ununquadium 120	469 Uub Ununbium 118	470 Uut Ununtrium 119	471 Uuq Ununquadium 120	472 Uub Ununbium 118	473 Uut Ununtrium 119	474 Uuq Ununquadium 120	475 Uub Ununbium 118	476 Uut Ununtrium 119	477 Uuq Ununquadium 120	478 Uub Ununbium 118	479 Uut Ununtrium 119	480 Uuq Ununquadium 120	481 Uub Ununbium 118	482 Uut Ununtrium 119	483 Uuq Ununquadium 120	484 Uub Ununbium 118	485 Uut Ununtrium 119	486 Uuq Ununquadium 120	487 Uub Ununbium 118	488 Uut Ununtrium 119	489 Uuq Ununquadium 120	490 Uub Ununbium 118	491 Uut Ununtrium 119	492 Uuq Ununquadium 120	493 Uub Ununbium 118	494 Uut Ununtrium 119	495 Uuq Ununquadium 120	496 Uub Ununbium 118	497 Uut Ununtrium 119	498 Uuq Ununquadium 120	499 Uub Ununbium 118	500 Uut Ununtrium 119	501 Uuq Ununquadium 120	502 Uub Ununbium 118	503 Uut Ununtrium 119	504 Uuq Ununquadium 120	505 Uub Ununbium 118	506 Uut Ununtrium 119	507 Uuq Ununquadium 120	508 Uub Ununbium 118	509 Uut Ununtrium 119	510 Uuq Ununquadium 120	511 Uub Ununbium 118	512 Uut Ununtrium 119	513 Uuq Ununquadium 120	514 Uub Ununbium 118	515 Uut Ununtrium 119	516 Uuq Ununquadium 120	517 Uub Ununbium 118	518 Uut Ununtrium 119	519 Uuq Ununquadium 120	520 Uub Ununbium 118	521 Uut Ununtrium 119	522 Uuq Ununquadium 120	523 Uub Ununbium 118	524 Uut Ununtrium 119	525 Uuq Ununquadium 120	526 Uub Ununbium 118	527 Uut Ununtrium 119	528 Uuq Ununquadium 120	529 Uub Ununbium 118	530 Uut Ununtrium 119	531 Uuq Ununquadium 120	532 Uub Ununbium 118	533 Uut Ununtrium 119	534 Uuq Ununquadium 120	535 Uub Ununbium 118	536 Uut Ununtrium 119	537 Uuq Ununquadium 120	538 Uub Ununbium 118	539 Uut Ununtrium 119	540 Uuq Ununquadium 120	541 Uub Ununbium 118	542 Uut Ununtrium 119	543 Uuq Ununquadium 120	544 Uub Ununbium 118	545 Uut Ununtrium 119	546 Uuq Ununquadium 120	547 Uub Ununbium 118	548 Uut Ununtrium 119	549 Uuq Ununquadium 120	550 Uub Ununbium 118	551 Uut Ununtrium 119	552 Uuq Ununquadium 120	553 Uub Ununbium 118	554 Uut Ununtrium 119	555 Uuq Ununquadium 120	556 Uub Ununbium 118	557 Uut Ununtrium 119	558 Uuq Ununquadium 120	559 Uub Ununbium 118	560 Uut Ununtrium 119	561 Uuq Ununquadium 120	562 Uub Ununbium 118	563 Uut Ununtrium 119	564 Uuq Ununquadium 120	565 Uub Ununbium 118	566 Uut Ununtrium 119	567 Uuq Ununquadium 120	568 Uub Ununbium 118	569 Uut Ununtrium 119	570 Uuq Ununquadium 120	571 Uub Ununbium 118	572 Uut Ununtrium 119	573 Uuq Ununquadium 120	574 Uub Ununbium 118	575 Uut Ununtrium 119	576 Uuq Ununquadium 120	577 Uub Ununbium 118	578 Uut Ununtrium 119	579 Uuq Ununquadium 120	580 Uub Ununbium 118	581 Uut Ununtrium 119	582 Uuq Ununquadium 120	583 Uub Ununbium 118	584 Uut Ununtrium 119	585 Uuq Ununquadium 120	586 Uub Ununbium 118	587 Uut Ununtrium 119	588 Uuq Ununquadium 120	589 Uub Ununbium 118	590 Uut Ununtrium 119	591 Uuq Ununquadium 120	592 Uub Ununbium 118	593 Uut Ununtrium 119	594 Uuq Ununquadium 120	595 Uub Ununbium 118	596 Uut Ununtrium 119	597 Uuq Ununquadium 120	598 Uub Ununbium 118	599 Uut Ununtrium 119	600 Uuq Ununquadium 120	601 Uub Ununbium 118	602 Uut Ununtrium 119	603 Uuq Ununquadium 120	604 Uub Ununbium 118	605 Uut Ununtrium 119	606 Uuq Ununquadium 120	607 Uub Ununbium 118	608 Uut Ununtrium 119	609 Uuq Ununquadium 120	610 Uub Ununbium 118	611 Uut Ununtrium 119	612 Uuq Ununquadium 120	613 Uub Ununbium 118	614 Uut Ununtrium 119	615 Uuq Ununquadium 120	616 Uub Ununbium 118	617 Uut Ununtrium 119	618 Uuq Ununquadium 120	619 Uub Ununbium 118	620 Uut Ununtrium 119	621 Uuq Ununquadium 120	622 Uub Ununbium 118	623 Uut Ununtrium 119	624 Uuq Ununquadium 120	625 Uub Ununbium 118	626 Uut Ununtrium 119	627 Uuq Ununquadium 120	628 Uub Ununbium 118	629 Uut Ununtrium 119	630 Uuq Ununquadium 120	631 Uub Ununbium 118	632 Uut Ununtrium 119	633 Uuq Ununquadium 120	634 Uub Ununbium 118	635 Uut Ununtrium 119	636 Uuq Ununquadium 120	637 Uub Ununbium 118	638 Uut Ununtrium 119	639 Uuq Ununquadium 120	640 Uub Ununbium 118	641 Uut Ununtrium 119	642 Uuq Ununquadium 120	643 Uub Ununbium 118	644 Uut Ununtrium 119	645 Uuq Ununquadium 120	646 Uub Ununbium 118	647 Uut Ununtrium 119	648 Uuq Ununquadium 120	649 Uub Ununbium 118	650 Uut Ununtrium 119	651 Uuq Ununquadium 120	652 Uub Ununbium 118	653 Uut Ununtrium 119	654 Uuq Ununquadium 120	655 Uub Ununbium 118	656 Uut Ununtrium 119	657 Uuq Ununquadium 120	658 Uub Ununbium 118	659 Uut Ununtrium 119	660 Uuq Ununquadium 120	661 Uub Ununbium 118	662 Uut Ununtrium 119	663 Uuq Ununquadium 120	664 Uub Ununbium 118	665 Uut Ununtrium 119	666 Uuq Ununquadium 120	667 Uub Ununbium 118	668 Uut Ununtrium 119	669 Uuq Ununquadium

Answer ALL questions.

1 The diagram represents an atom of an element.



Key:

- ⊖ electron
- proton
- neutron

Use numbers from the box to complete the table.

You may use each number once, more than once or not at all.

1	2	3	4	5	6	7
---	---	---	---	---	---	---

(5)

atomic number of the atom	
number of shells shown	
mass number of the atom	
number of protons in an isotope of this element	
group where the element is found in the Periodic Table	

(Total for Question 1 = 5 marks)

DO NOT WRITE IN THIS AREA

DO NOT WRITE IN THIS AREA

DO NOT WRITE IN THIS AREA



2 Substances can be classified as elements, compounds or mixtures.

(a) Which of these is the formula for a molecule of an element?

(1)

- A H
- B H₂
- C H₂O
- D H₂O₂

(b) Which of these is a mixture?

(1)

- A sodium
- B chlorine
- C sodium chloride
- D sodium chloride solution

(c) Which method can be used to separate the dyes in a food colouring?

(1)

- A chromatography
- B crystallisation
- C evaporation
- D filtration

DO NOT WRITE IN THIS AREA


DO NOT WRITE IN THIS AREA

DO NOT WRITE IN THIS AREA




(d) A student adds a large crystal of sodium chloride to some water in a beaker and leaves the beaker for a day.

The diagram shows the beaker immediately after adding the crystal, and after one day.



immediately after adding crystal



after a day

After a day, the student takes a sample from the top of the liquid and tests it to see if it contains chloride ions.

The test is positive.

(i) Describe how the student should do the test.

Include the observation for a positive test in your answer.

(3)

.....

.....

.....

.....

.....

.....

(ii) Name the process by which chloride ions move from the crystal to the top of the liquid.

(1)

.....

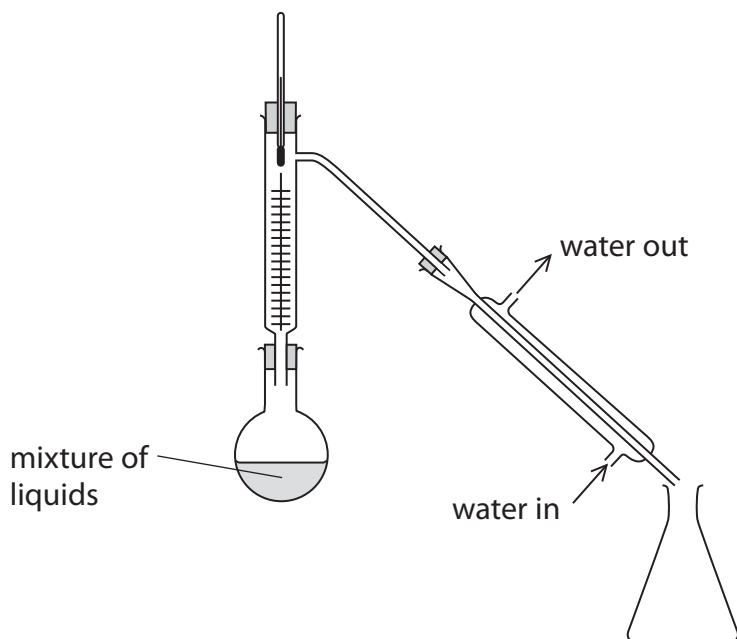
DO NOT WRITE IN THIS AREA

DO NOT WRITE IN THIS AREA

DO NOT WRITE IN THIS AREA



(e) This apparatus is used in a laboratory to separate a mixture of liquids with similar boiling points.



(i) The passage describes what happens when the apparatus is used.

Use words from the box to complete the passage.

You may use each word once, more than once or not at all.

(3)

beaker	burette	column
condenser	flask	thermometer

The mixture of liquids is placed in the

During heating, part of the mixture boils and passes up the

Water is used to cool the vapour in the



(ii) Which of these changes of state occurs in the separation?

(1)

A (s) → (aq)

B (l) → (s)

C (g) → (l)

D (aq) → (s)

(Total for Question 2 = 11 marks)

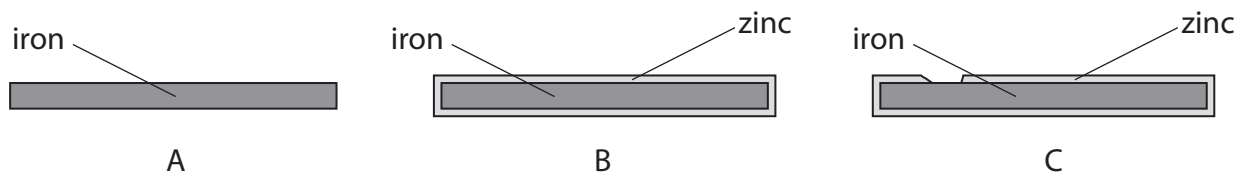
DO NOT WRITE IN THIS AREA

DO NOT WRITE IN THIS AREA

DO NOT WRITE IN THIS AREA



3 The diagram shows three pieces of iron.



A is a piece of iron.

B is a piece of iron with a thin coating of zinc.

C is a piece of iron with some of the zinc coating missing.

(a) Name the process used to coat iron with zinc.

(1)

(b) The three pieces of iron are left in separate troughs of water and exposed to the atmosphere for several weeks.

The table shows the appearance of the pieces of iron after several weeks.

	Appearance
A	covered in a brown solid
B	shiny and unchanged in appearance
C	shiny and unchanged in appearance

(i) The brown solid contains hydrated iron(III) oxide.

What is the common name for this brown solid?

(1)

(ii) Identify the two substances that react with iron to form the brown solid.

(2)

1

2

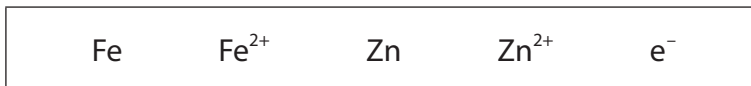
DO NOT WRITE IN THIS AREA

DO NOT WRITE IN THIS AREA

DO NOT WRITE IN THIS AREA



(iii) Explain, with reference to the symbols in the box, why the brown solid does not form on C.



(3)

.....

.....

.....

.....

.....

.....

(Total for Question 3 = 7 marks)

DO NOT WRITE IN THIS AREA

DO NOT WRITE IN THIS AREA

DO NOT WRITE IN THIS AREA



4 The table shows the formulae of some positive and negative ions.

It also shows the formulae of some compounds containing these ions.

	Cu^{2+}	Fe^{3+}	NH_4^+
Cl^-		FeCl_3	NH_4Cl
SO_4^{2-}	CuSO_4	$\text{Fe}_2(\text{SO}_4)_3$	
CO_3^{2-}	CuCO_3		$(\text{NH}_4)_2\text{CO}_3$

(a) Complete the table by giving the formulae of the three missing compounds.

(3)

(b) The correct name of the compound with the formula CuSO_4 is

(1)

- A copper(I) sulfate
- B copper(I) sulfite
- C copper(II) sulfate
- D copper(II) sulfite

(c) Which of these descriptions is correct for $\text{NH}_4\text{Cl(s)}$ and for $\text{NH}_4\text{Cl(aq)}$?

(1)

	$\text{NH}_4\text{Cl(s)}$	$\text{NH}_4\text{Cl(aq)}$
<input type="checkbox"/> A	colourless	colourless
<input type="checkbox"/> B	colourless	white
<input type="checkbox"/> C	white	colourless
<input type="checkbox"/> D	white	white

DO NOT WRITE IN THIS AREA

DO NOT WRITE IN THIS AREA

DO NOT WRITE IN THIS AREA



(d) These tests are carried out on two separate samples of iron(III) sulfate solution.

test 1 add sodium hydroxide solution

test 2 add dilute hydrochloric acid, then add barium chloride solution

(i) Which observation is correct for test 1?

(1)

- A brown precipitate
- B brown solution
- C green precipitate
- D green solution

(ii) Give the names of the two products formed in test 1.

(2)

..... and

(iii) In test 2, there is no visible change after adding dilute hydrochloric acid.

State why the acid is added.

(1)

(iv) In test 2, barium sulfate is formed after adding barium chloride solution.

State the observation that is made.

(1)

DO NOT WRITE IN THIS AREA

DO NOT WRITE IN THIS AREA

DO NOT WRITE IN THIS AREA



(e) Describe a test to show that a sample of CuCO_3 contains the CO_3^{2-} ion.

(3)

.....

.....

.....

.....

.....

.....

(Total for Question 4 = 13 marks)

DO NOT WRITE IN THIS AREA

DO NOT WRITE IN THIS AREA

DO NOT WRITE IN THIS AREA



DO NOT WRITE IN THIS AREA

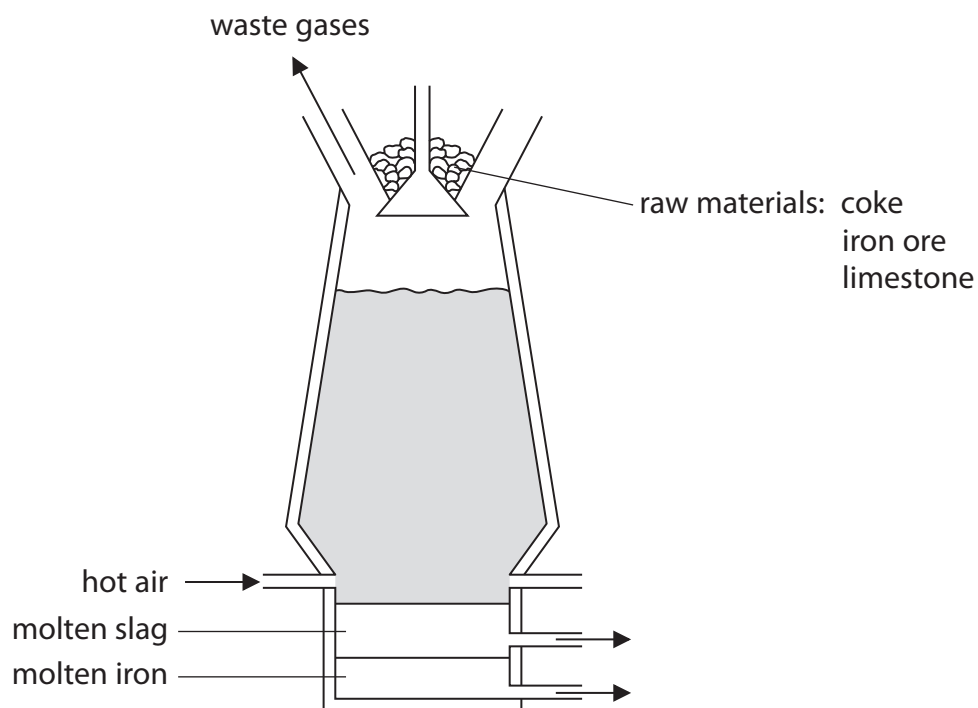
DO NOT WRITE IN THIS AREA

DO NOT WRITE IN THIS AREA


BLANK PAGE



5 The diagram shows a blast furnace used to extract iron from its ore.



(a) State the purpose of these reactions in the blast furnace.



.....

.....



.....

.....

DO NOT WRITE IN THIS AREA

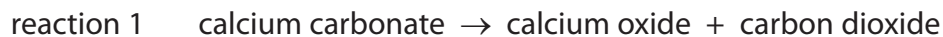
DO NOT WRITE IN THIS AREA

DO NOT WRITE IN THIS AREA



- (b) Iron ore contains the impurity silicon dioxide. The purpose of the limestone is to remove this impurity.

The word equations for the reactions that occur are



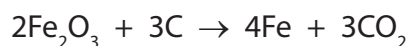
Write a chemical equation for each of these reactions.

(2)

reaction 1

reaction 2

- (c) The equation for a reaction that occurs in the blast furnace is



Explain, with reference to the reactants in this equation, why this is a redox reaction.

(2)

.....

.....

.....

.....

(Total for Question 5 = 6 marks)

DO NOT WRITE IN THIS AREA

DO NOT WRITE IN THIS AREA

DO NOT WRITE IN THIS AREA



6 Poly(ethene) is a common polymer. It is obtained from crude oil by fractional distillation, cracking and polymerisation.

(a) The passage is about the fractional distillation of crude oil.

Use words from the box to complete the passage.

You may use each word once, more than once or not at all.

(4)

boiling point	condensation	melting point
sublimation	temperature	vaporisation

The crude oil is heated so that occurs. The column has a gradient. The compounds in the crude oil pass up the column and occurs at different heights depending on the of each fraction.

(b) The table lists some statements about cracking.

Place ticks (✓) in the boxes to show the three correct statements.

(3)

the molecules that are cracked are hydrocarbons	
catalytic cracking uses iron as the catalyst	
cracking is used because of different demands for hydrocarbons	
cracking reactions are examples of addition reactions	
cracking produces molecules with shorter chains	
$\text{CH}_4 + 2\text{O}_2 \rightarrow \text{CO}_2 + 2\text{H}_2\text{O}$ is an equation for a cracking reaction	

DO NOT WRITE IN THIS AREA

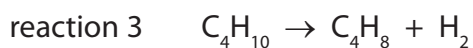
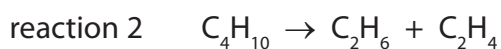
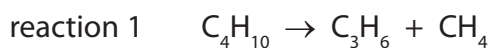
DO NOT WRITE IN THIS AREA

DO NOT WRITE IN THIS AREA



(c) When one molecule of butane is cracked, there are three possible reactions.

The equations for these reactions are



(i) One product in each of these reactions is an alkene.

What is the general formula for the homologous series of alkenes?

(1)

(ii) What are the names of the products of reaction 1?

(2)

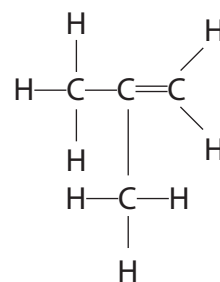
and

(iii) Draw the displayed formula of the saturated product of reaction 2.

(1)

(iv) The hydrocarbon formed in reaction 3 has three isomers.

The displayed formula for one of the isomers is



Draw the displayed formula for each of the two other isomers.

(2)

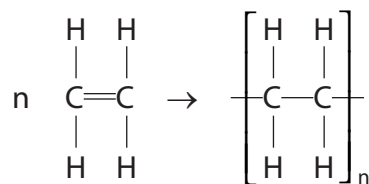
isomer 1

isomer 2

--	--



(d) The reaction used to make poly(ethene) can be represented by this equation.



Describe the differences between the reactant and product in this reaction.

In your answer, you should refer to carbon chain length, type of bond and state of matter.

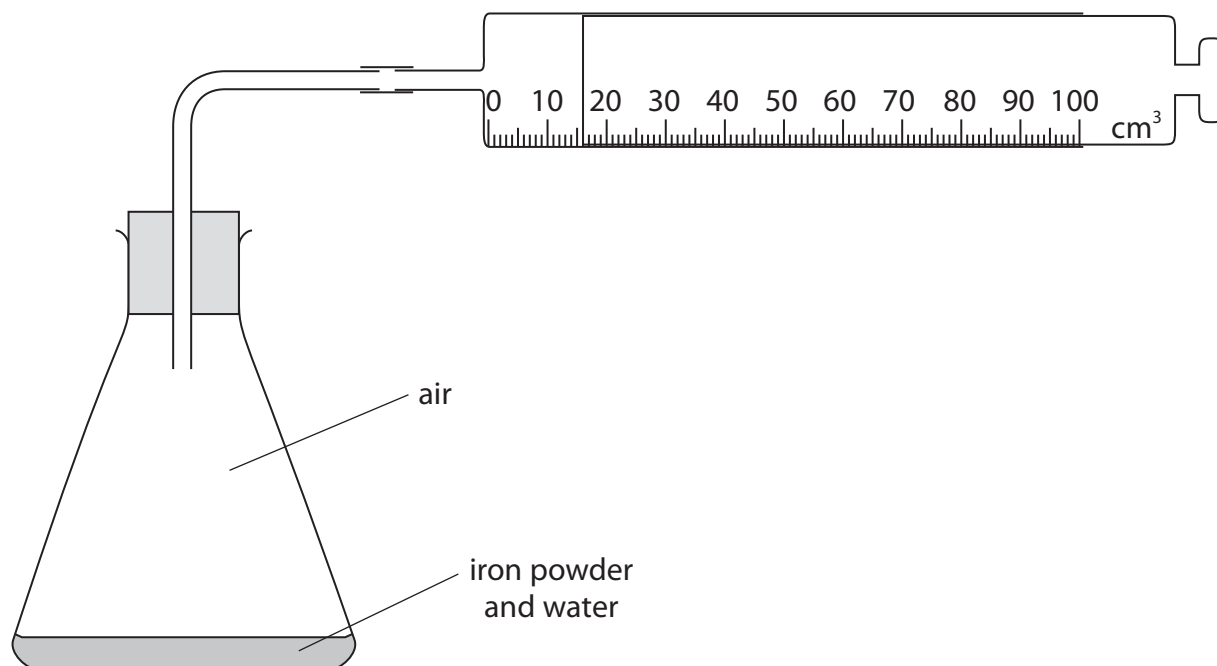
(3)

(Total for Question 6 = 16 marks)



- 7 A student uses the reaction between iron and oxygen in an experiment to find the percentage by volume of oxygen in air.

The diagram shows his apparatus.



- (a) State the advantage of using iron powder rather than pieces of iron.

(1)

.....

.....

- (b) Why is it necessary for the student to mix the iron powder with water?

(1)

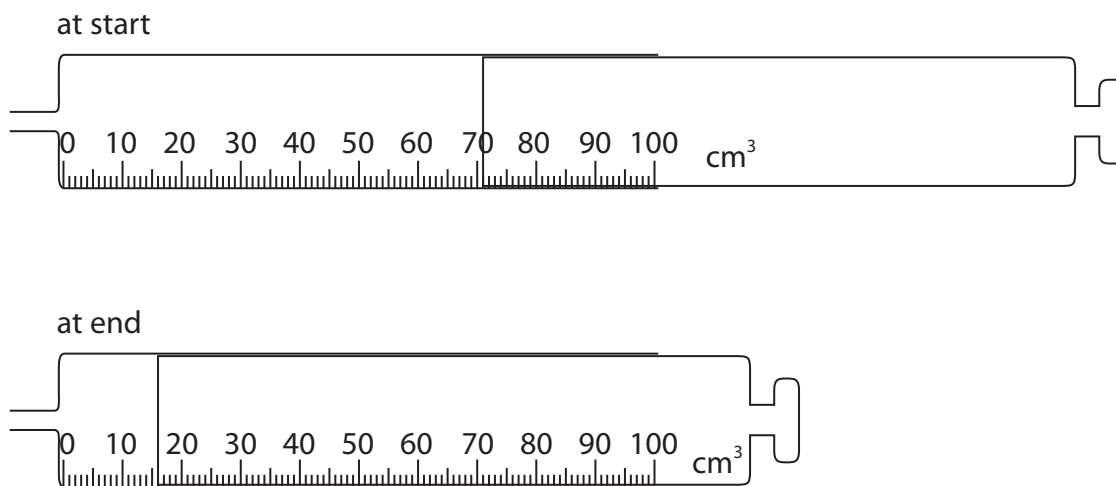
.....

.....



- (c) The student records the reading on the syringe at the start of the experiment. He then records the reading every day until there is no further change.

The diagram shows the syringe at the start and at the end of the experiment.



Use the readings to complete the table, entering all values to the nearest 1 cm³.

(3)

volume reading at start in cm ³	
volume reading at end in cm ³	
change in volume in cm ³	

- (d) The student repeats the experiment but obtains a much smaller change in volume.

Which of these could be a reason for the smaller change in volume?

(1)

- A** he uses 10 cm³ of water instead of 5 cm³
- B** he leaves the apparatus for a longer time
- C** he leaves the apparatus in a warmer place
- D** he uses a smaller mass of iron powder



(e) During another experiment, the student writes down these values.

volume of air in conical flask and glass tube	250 cm ³
syringe reading at start	90
syringe reading at end	20
volume of oxygen reacting	70 cm ³

The student incorrectly calculates the percentage by volume of oxygen in air.

This is his working.

$$\frac{70 \times 100}{90} = 78\%$$

(i) Identify the mistake in his working.

(1)

(ii) Use values from the table to correctly calculate the percentage by volume of oxygen in air.

(2)

percentage = %

(Total for Question 7 = 9 marks)

DO NOT WRITE IN THIS AREA

DO NOT WRITE IN THIS AREA

DO NOT WRITE IN THIS AREA

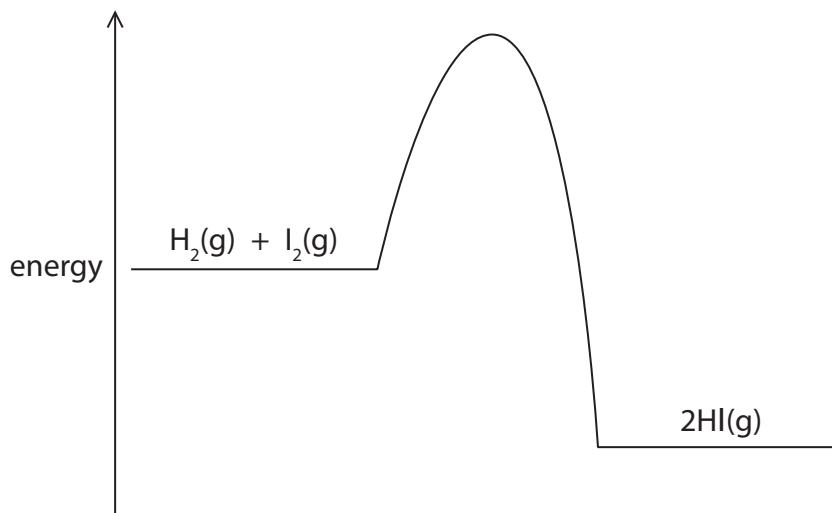


- 8 Hydrogen iodide can be manufactured from its elements using this reaction.



A temperature of 500°C , a pressure of 4 atm and a platinum catalyst are used in this manufacturing process.

- (a) The diagram shows the reaction profile if a catalyst is not used.



- (i) On the diagram, draw the reaction profile when a platinum catalyst is used. (1)
- (ii) Label the diagram to show the enthalpy change (ΔH) and the activation energy (E_{cat}) for the reaction with the catalyst. (2)
- (b) A manufacturer carries out this reaction using the same catalyst, a pressure of 4 atm, but a temperature of 400°C .
- (i) State the effect of this change in temperature on the rate of the reaction. (1)

- (ii) Explain the effect of this change on the yield of hydrogen iodide. (2)

DO NOT WRITE IN THIS AREA

DO NOT WRITE IN THIS AREA

DO NOT WRITE IN THIS AREA



(c) The manufacturer then carries out this reaction using the same catalyst, a temperature of 500 °C, but a pressure of 2 atm.

(i) Suggest what effect this change in pressure would have on the rate of the reaction. (1)

.....

.....

(ii) Explain the effect of this change on the yield of hydrogen iodide. (2)

.....

.....

.....

.....

(Total for Question 8 = 9 marks)

DO NOT WRITE IN THIS AREA

DO NOT WRITE IN THIS AREA

DO NOT WRITE IN THIS AREA



9 Bromine, chlorine and iodine are elements in Group 7 of the Periodic Table.

(a) Place ticks (✓) in the boxes to show the three correct statements about the elements in Group 7.

(3)

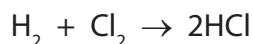
the elements can be obtained by electrolysis of molten metal halides	
the elements with paler colours are lower down the group	
the boiling points decrease down the group	
the elements form covalent compounds with other non-metals	
their molecules contain two atoms	
all are gases at room temperature	

(b) Group 7 elements are called halogens because they react with metals to form salts.

Write a chemical equation to show the formation of the salt potassium iodide from a metal and a halogen.

(1)

(c) The equation for the reaction between hydrogen and chlorine is



At room temperature, hydrogen chloride and hydrochloric acid can both be represented by the formula HCl.

Insert the state symbol after each formula.

(2)

hydrogen chloride, HCl(.....)

hydrochloric acid, HCl(.....)

DO NOT WRITE IN THIS AREA

DO NOT WRITE IN THIS AREA

DO NOT WRITE IN THIS AREA



(d) Hydrogen chloride is dissolved in methylbenzene.

When a piece of magnesium ribbon is then added to this solution there is no reaction.

When water is added to this mixture and it is shaken, a reaction occurs.

Explain the observation in this reaction.

(3)

.....

.....

.....

.....

.....

.....

.....

.....

.....

.....

(e) Halogens can take part in displacement reactions with halides.

The table gives information about the addition of halogen solutions to halide solutions.

Test	Halogen solution added	Halide solution	Result
1	bromine	sodium iodide	displacement reaction occurs
2	chlorine	sodium chloride	no reaction
3	iodine	sodium chloride	no reaction

(i) Explain which test gives a result that **cannot** be used to compare the reactivities of halogens.

(2)

.....

.....

.....

.....

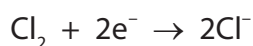


(ii) Which observation shows that a displacement reaction occurs in test 1? (1)

- A effervescence is seen
- B purple fumes appear
- C the solution becomes darker
- D a white precipitate forms

(f) Astatine is an element in Group 7 that could also be involved in displacement reactions.

The ionic half-equations for one of these reactions would be



(i) Write an ionic equation for this displacement reaction. (1)

(ii) Explain, with reference to the appropriate species and to electrons, why this reaction is described as a redox reaction. (2)

(Total for Question 9 = 15 marks)

DO NOT WRITE IN THIS AREA

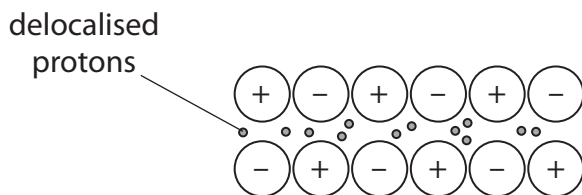
DO NOT WRITE IN THIS AREA

DO NOT WRITE IN THIS AREA



10 This question is about magnesium and its compounds.

(a) A student draws this labelled diagram to show the particles in magnesium metal.



He makes two mistakes.

State the two corrections he should make to his labelled diagram.

(2)

1

2

(b) Explain why magnesium metal is malleable and a good conductor of electricity.

(4)

.....

.....

.....

.....

.....

.....

.....

.....

.....

.....

DO NOT WRITE IN THIS AREA

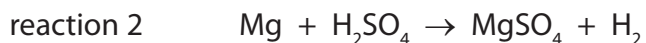
DO NOT WRITE IN THIS AREA

DO NOT WRITE IN THIS AREA



- (c) Magnesium is a reactive metal. Its reactivity can be seen in its reactions with oxygen and dilute sulfuric acid.

The chemical equations for these reactions are



- (i) In reaction 1, some magnesium is ignited and then placed in a jar of oxygen gas.

State two observations that would be made.

(2)

1

2

- (ii) Which of these is a correct statement about the gas formed in reaction 2?

(1)

- A** it makes a squeaky pop with a lighted splint
- B** it relights a glowing splint
- C** it turns damp blue litmus paper red
- D** it turns limewater milky



(d) The student used this method to obtain a sample of magnesium sulfate crystals from the solution formed in reaction 2.

- heat the solution in a beaker for several minutes
- dip a glass rod into the hot solution for a few seconds and then remove it
- allow the solution to cool to room temperature
- filter off the crystals and then dry them

(i) Why does the student heat the solution?

(1)

(ii) Explain why the student dips a glass rod into the heated solution.

(2)

(iii) Give the formulae of the two compounds that pass through the filter paper.

(2)

1

2

DO NOT WRITE IN THIS AREA

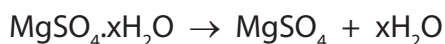
DO NOT WRITE IN THIS AREA

DO NOT WRITE IN THIS AREA



- (e) After drying the crystals, the student weighs them and then heats them until they reach a constant mass.

This equation represents the change that occurs during heating.



These are the student's results.

mass of dry crystals before heating = 17.2 g

mass of crystals after heating to a constant mass = 8.3 g

Use these results to find the value of x in the formula of $\text{MgSO}_4 \cdot x\text{H}_2\text{O}$

[M_r values: $\text{MgSO}_4 = 120$, $\text{H}_2\text{O} = 18$]

(4)

value of $x = \dots\dots\dots$

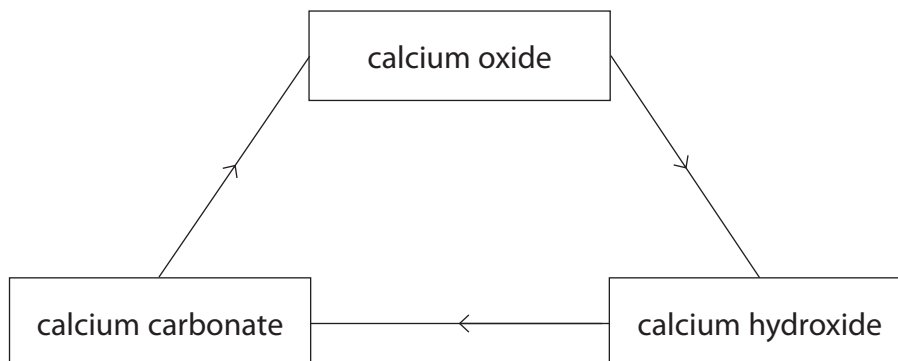
(Total for Question 10 = 18 marks)



11 This question is about calcium compounds.

- (a) The diagram gives information about the reactions of some calcium compounds used to make mortar.

Mortar contains calcium hydroxide and is used to join bricks together when building walls.

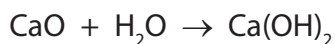


These reactions occur when the calcium hydroxide in mortar is obtained from calcium carbonate.

- calcium carbonate is strongly heated to form calcium oxide
- water is added to calcium oxide to form calcium hydroxide

The calcium hydroxide in mortar reacts with carbon dioxide from the atmosphere to form calcium carbonate.

- (i) The equation for one of these reactions is



Calculate the mass of water needed to react exactly with 28 kg of calcium oxide.

(3)

mass of water =

- (ii) Explain why the reaction between carbon dioxide and calcium hydroxide can be described as neutralisation.

(2)

.....

.....

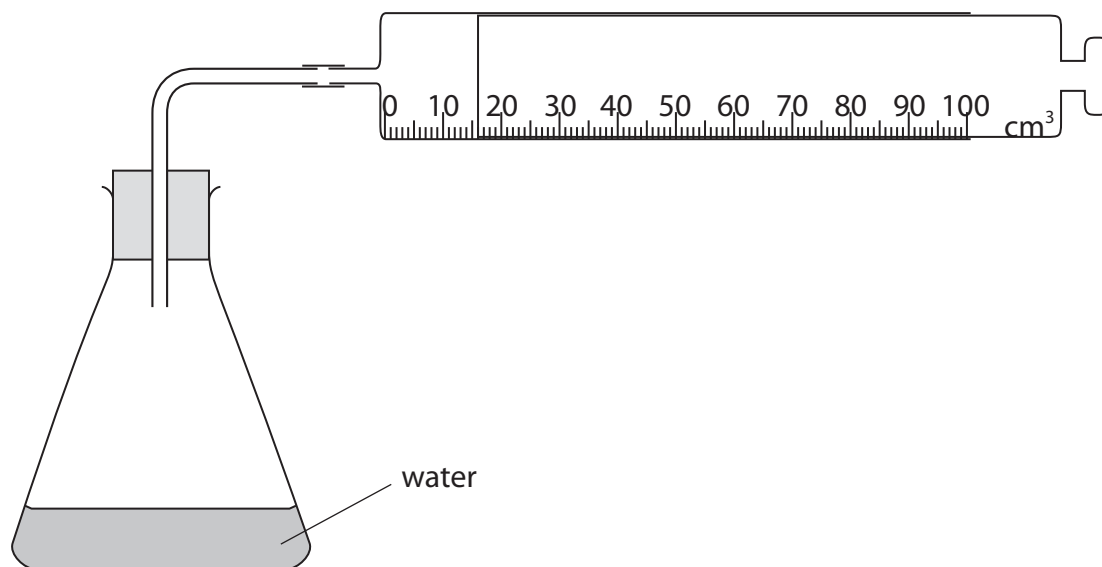
.....

.....



(b) Calcium carbide is a reactive solid. When water is added to it, a gas (ethyne) is formed.

A teacher uses this apparatus to investigate the rate of reaction between calcium carbide and water.



This is the teacher's method.

- record the temperature of the water in the flask
- add a known mass of calcium carbide and replace the bung in the flask
- record the time taken to collect 100 cm^3 of gas in the syringe

The teacher repeats the experiment using the same volume of water and the same mass of calcium carbide, but with the water at different temperatures.

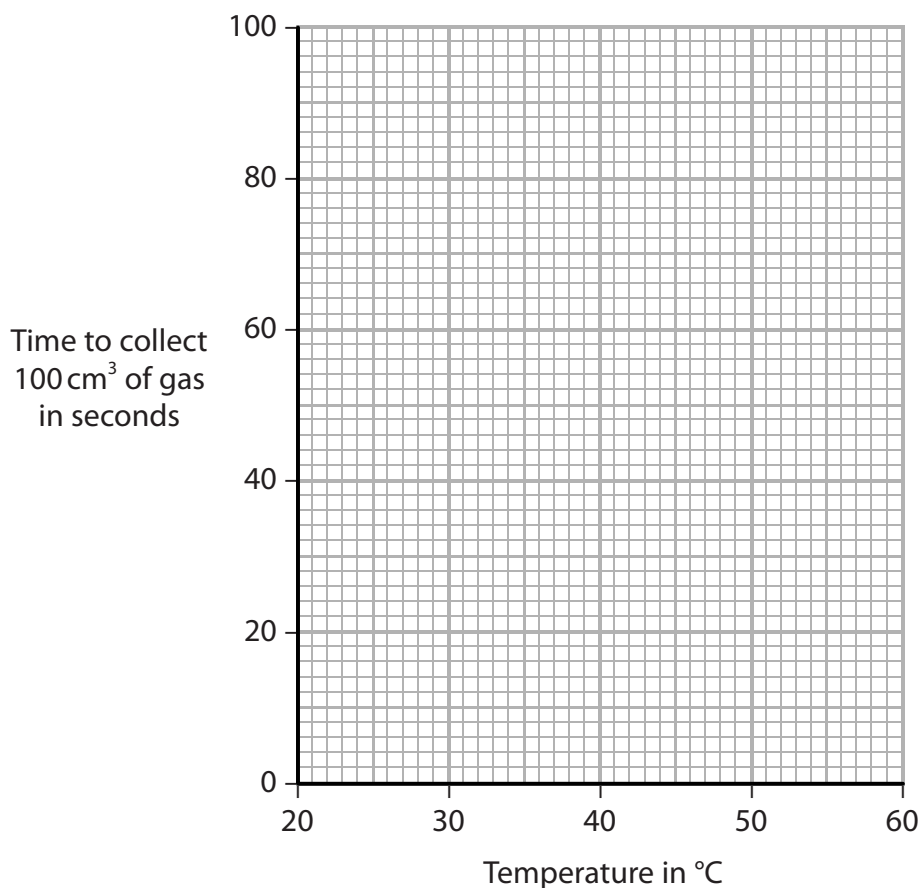


The table shows the results for six different temperatures.

Temperature of water in °C	21	32	40	49	56	60
Time to collect 100 cm³ of gas in seconds	100	59	38	24	14	10

Plot these results on the grid and draw a curve of best fit.

(3)



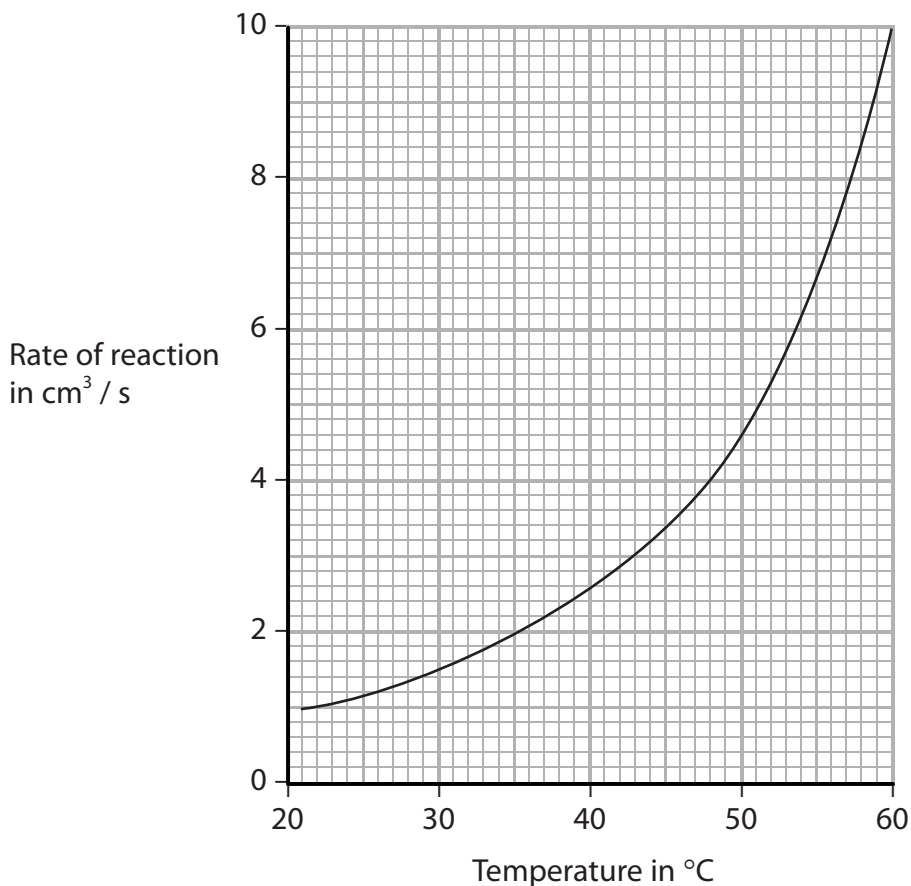
DO NOT WRITE IN THIS AREA

DO NOT WRITE IN THIS AREA

DO NOT WRITE IN THIS AREA



(c) The teacher plots this graph to show how the rate of reaction varies with temperature.



Her graph shows that the rate of reaction is not directly proportional to temperature.

There are two reasons why the rate of reaction increases as the temperature increases.

One reason is that the water molecules move more quickly and collide more frequently with calcium carbide particles.

Explain the other reason for the increase in the rate of reaction.

(3)

.....

.....

.....

.....

.....

.....

.....

(Total for Question 11 = 11 marks)

TOTAL FOR PAPER = 120 MARKS



DO NOT WRITE IN THIS AREA

DO NOT WRITE IN THIS AREA

DO NOT WRITE IN THIS AREA

BLANK PAGE



DO NOT WRITE IN THIS AREA

DO NOT WRITE IN THIS AREA

DO NOT WRITE IN THIS AREA

BLANK PAGE

Every effort has been made to contact copyright holders to obtain their permission for the use of copyright material. Pearson Education Ltd. will, if notified, be happy to rectify any errors or omissions and include any such rectifications in future editions.

