



Cambridge International Examinations
Cambridge International General Certificate of Secondary Education

CHEMISTRY**0620/12**

Paper 1 Multiple Choice

May/June 2015**45 Minutes**

Additional Materials: Multiple Choice Answer Sheet
 Soft clean eraser
 Soft pencil (type B or HB is recommended)

* 8 0 7 1 1 5 1 3 7 7 *



READ THESE INSTRUCTIONS FIRST

Write in soft pencil.

Do not use staples, paper clips, glue or correction fluid.

Write your name, Centre number and candidate number on the Answer Sheet in the spaces provided unless this has been done for you.

DO NOT WRITE IN ANY BARCODES.There are **forty** questions on this paper. Answer **all** questions. For each question there are four possible answers **A, B, C** and **D**.Choose the **one** you consider correct and record your choice in **soft pencil** on the separate Answer Sheet.**Read the instructions on the Answer Sheet very carefully.**

Each correct answer will score one mark. A mark will not be deducted for a wrong answer.

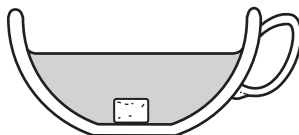
Any rough working should be done in this booklet.

A copy of the Periodic Table is printed on page 16.

Electronic calculators may be used.

The syllabus is approved for use in England, Wales and Northern Ireland as a Cambridge International Level 1/Level 2 Certificate.This document consists of **15** printed pages and **1** blank page.

- 1 The diagram shows a sugar lump in a cup of tea.



Which two processes must happen to spread the sugar evenly in the tea?

	first process	second process
A	diffusion	dissolving
B	dissolving	diffusion
C	dissolving	melting
D	melting	diffusion

- 2 The results of some tests on a colourless liquid X are shown.

- Boiling point = 102 °C
- Universal Indicator turns green

What is X?

- A** ethanol
B hydrochloric acid
C pure water
D sodium chloride (salt) solution

- 3 The atomic structures of four particles are shown.

particle	electrons	neutrons	protons
W	8	9	8
X	7	9	7
Y	8	10	8
Z	9	10	9

Which two particles are isotopes?

- A** W and X **B** W and Y **C** X and Z **D** Y and Z

4 Q^+ is an ion of element Q.

What has the highest value in the ion?

- A the nucleon number
- B the number of electrons
- C the number of neutrons
- D the proton number

5 Which statements comparing the properties of electrons, neutrons and protons are correct?

	neutrons and protons are both heavier than electrons	only electrons and neutrons are charged
A	✓	✓
B	✓	✗
C	✗	✓
D	✗	✗

6 Graphite is a form of carbon.

Why can graphite be used as a lubricant?

- A Graphite contains delocalised electrons which move throughout the structure.
- B Graphite contains weak covalent bonds so the atoms move easily.
- C Graphite has a low melting point so it easily turns into a liquid.
- D Graphite has weak forces of attraction between layers so they can move.

7 In which compounds are pairs of electrons shared between atoms?

- 1 methane
- 2 lead bromide
- 3 sodium chloride

- A 1 only
- B 2 only
- C 1 and 3
- D 1, 2 and 3

- 8 A molecule, Z, contains two atoms of oxygen, six atoms of hydrogen and three atoms of carbon.

What is the formula of Z?

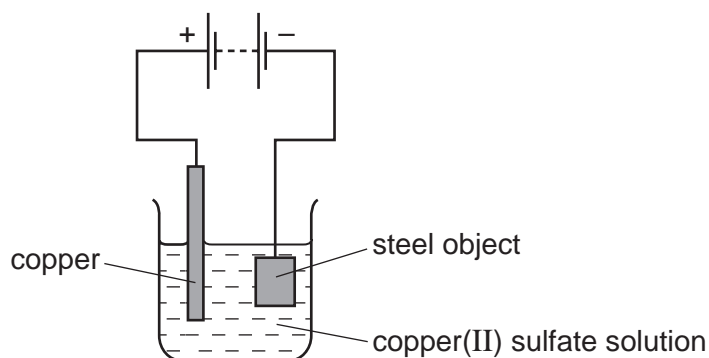
- A** $\text{CH}_3\text{CH}_2\text{CHO}$
B CH_3COCH_3
C $\text{C}_2\text{H}_5\text{CO}_2\text{H}$
D $\text{C}_3\text{H}_6\text{CO}_2\text{H}$

- 9 Copper and hydrogen can each be formed by electrolysis.

At which electrodes are these elements formed?

	copper	hydrogen
A	anode	anode
B	anode	cathode
C	cathode	anode
D	cathode	cathode

- 10 The diagram shows the electroplating of a steel object.



A student made the following statements.

- 1 The object turns a reddish-brown colour.
- 2 The copper sulfate solution changes to a paler blue colour.
- 3 The copper electrode becomes smaller.

Which statements are correct?

- A** 1, 2 and 3 **B** 1 and 2 only **C** 1 and 3 only **D** 2 and 3 only

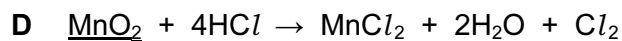
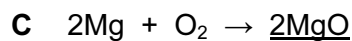
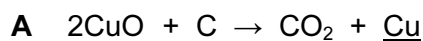
- 11 The elements hydrogen and uranium are used as fuels.

The compound ethanol is also used as a fuel.

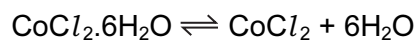
Which fuels require oxygen in order to produce heat energy?

	hydrogen	uranium	ethanol
A	✓	✓	✓
B	✓	✓	x
C	✓	x	✓
D	x	✓	✓

- 12 In which equation does the oxidation of the underlined compound occur?



- 13 When pink crystals of cobalt(II) chloride are heated, steam is given off and the colour of the solid changes to blue.



What happens when water is added to the blue solid?

	colour	temperature
A	changes to pink	decreases
B	changes to pink	increases
C	remains blue	decreases
D	remains blue	increases

14 A simple way of making bread includes

- 1 Mixing flour with a small amount of yeast and some water to make a 'dough'.
- 2 Leaving the dough in a warm place for the yeast to act on the dough to form carbon dioxide which increases the volume of the dough.

Which factors affecting a reaction rate are involved in bread making?

	temperature	use of an enzyme
A	✓	✓
B	✓	x
C	x	✓
D	x	x

15 Which statement is **not** correct?

- A** When a base reacts with an ammonium salt, ammonia is given off.
- B** When an acid reacts with a base, neutralisation takes place.
- C** When an acid reacts with a carbonate, carbon dioxide is given off.
- D** When the acidity of a solution increases, the pH increases.

16 Hydrochloric acid is used to clean metals.

The acid reacts with the oxide layer on the surface of the metal, forming a salt and water.

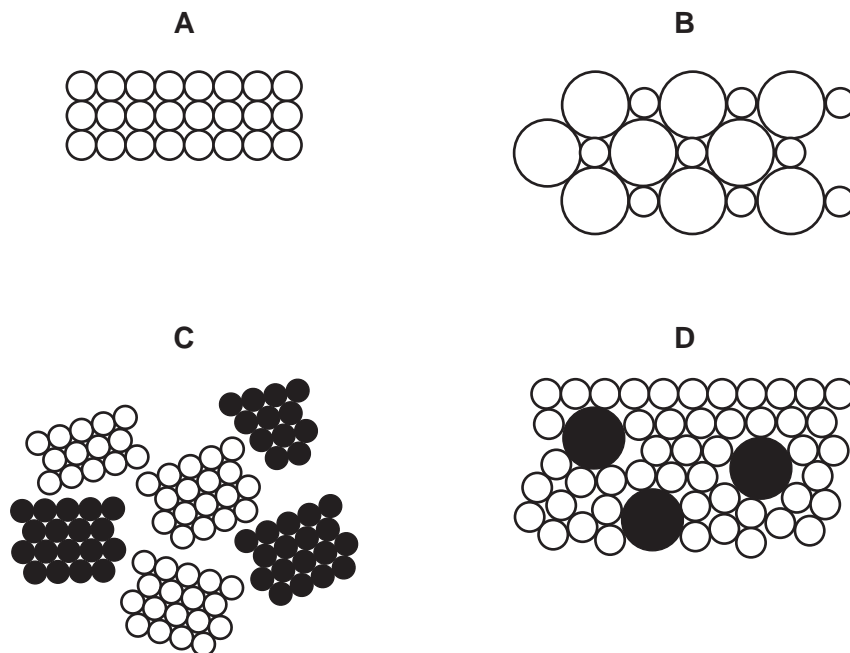
Which word describes the metal oxide?

- A** alloy
- B** base
- C** element
- D** indicator

17 Which method is used to make the salt copper sulfate?

- A** dilute acid + alkali
- B** dilute acid + carbonate
- C** dilute acid + metal
- D** dilute acid + non-metal oxide

23 Which diagram represents an alloy?



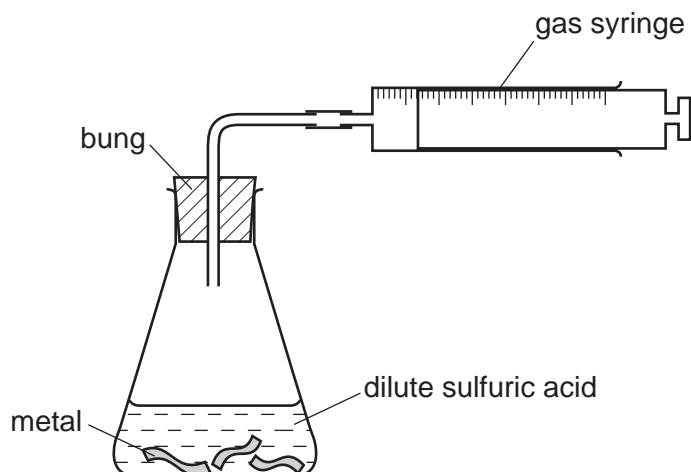
24 Which statement is **not** correct?

- A** Aluminium is used in food containers because of its resistance to corrosion.
- B** Aluminium is used in the manufacture of aircraft because of its strength and low density.
- C** Mild steel is used in car bodies because of its strength and low density.
- D** Stainless steel is used in chemical plant because of its strength and resistance to corrosion.

25 Which row describes the conditions used to make steel from the iron produced by a blast furnace?

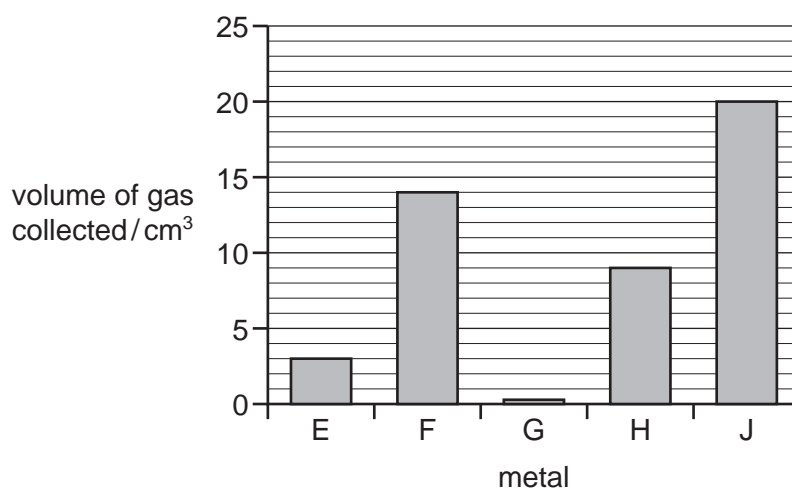
	calcium oxide (lime)	oxygen	heat
A	✓	✓	✓
B	✓	✓	✗
C	✗	✓	✓
D	✗	✓	✗

- 26 Samples of five different metals, E, F, G, H and J were reacted with dilute sulfuric acid using the apparatus shown.



The volume of hydrogen gas collected after one minute was measured.

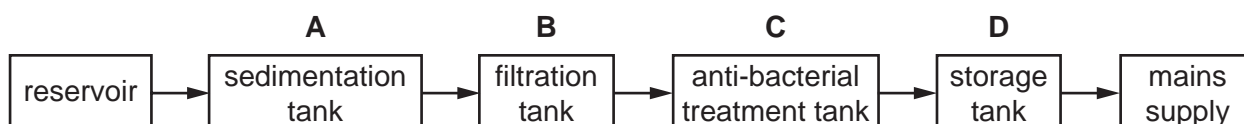
The results are shown on the bar chart.



What is the order of reactivity of the metals (most reactive first)?

- A** E, F, G, H, J
B G, E, H, F, J
C J, F, H, E, G
D J, H, G, F, E
- 27 The diagram shows stages in producing drinking water.

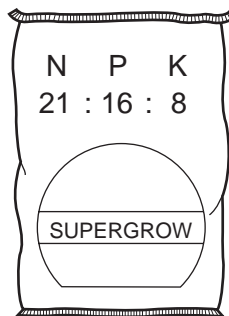
In which tank is chlorine added to the water?



28 Which gas is **not** present in a sample of clean air?

- A carbon dioxide
- B chlorine
- C oxygen
- D water vapour

29 Which combination of chemical compounds could be used to produce the fertiliser shown?



- A $(\text{NH}_4)_3\text{PO}_4$, KCl
- B NH_4NO_3 , $\text{Ca}_3(\text{PO}_4)_2$
- C NH_4NO_3 , $\text{CO}(\text{NH}_2)_2$
- D NH_4NO_3 , K_2SO_4 , $(\text{NH}_4)_2\text{SO}_4$

30 Carbon monoxide is given out from the exhaust of vehicles that burn fossil fuels.

Which row shows why carbon monoxide is a pollutant?

	acidic	toxic
A	no	no
B	no	yes
C	yes	no
D	yes	yes

31 A steel bicycle which had been left outdoors for several months was starting to rust.

What would **not** reduce the rate of corrosion?

- A Remove the rust and paint the bicycle.
- B Remove the rust and store the bicycle in a dry shed.
- C Remove the rust and wipe the bicycle with a clean damp cloth.
- D Remove the rust and wipe the bicycle with an oily cloth.

32 Carbon dioxide and methane are 'greenhouse gases' which contribute to global warming.

Which process does **not** increase global warming?

- A burning fossil fuels
- B decay of organic waste
- C farming cattle for beef
- D growing crops such as sugar cane

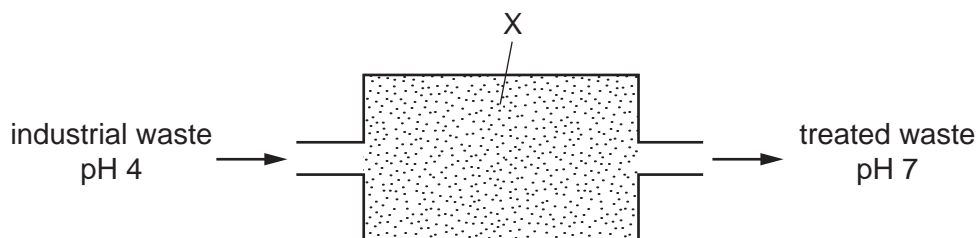
33 A zinc compound forms carbon dioxide in two different reactions.

- 1 It is heated strongly.
- 2 It is added to hydrochloric acid.

Which type of reaction occurs in 1 and 2?

	1	2
A	combustion	neutralisation
B	combustion	oxidation
C	thermal decomposition	neutralisation
D	thermal decomposition	oxidation

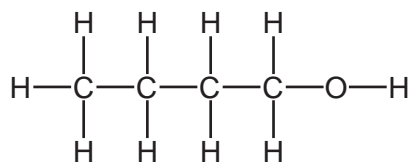
34 Substance X is used to treat industrial waste.



What is X and which type of reaction occurs during the treatment?

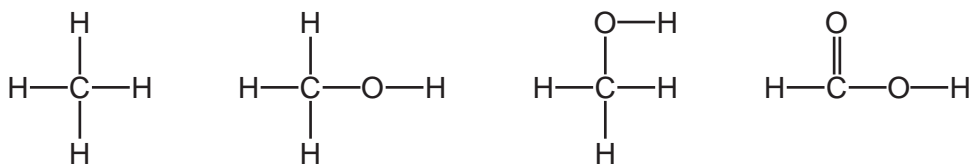
	X	type of reaction
A	calcium oxide (lime)	neutralisation
B	calcium oxide (lime)	redox
C	carbon	neutralisation
D	carbon	redox

35 An organic compound has the molecular structure shown.



Which type of organic compound is this?

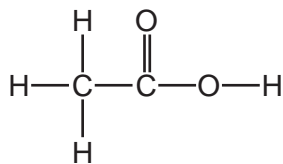
- A** alcohol
B alkane
C alkene
D carboxylic acid
- 36 Which statement about petroleum is **not** correct?
- A** It can be separated into useful substances by fractional distillation.
B It consists mainly of hydrocarbons.
C It is found underground in many parts of the world.
D Its main use is for making lubricants and polishes.
- 37 The structures of four different organic compounds are shown.



How many different homologous series are represented by these compounds?

- A** 1 **B** 2 **C** 3 **D** 4

38 The structure of a compound, Y, is shown.



Which row describes some of the physical properties of Y?

	colourless	characteristic smell	dissolves in water
A	no	no	no
B	no	no	yes
C	yes	yes	no
D	yes	yes	yes

39 A hydrocarbon A is cracked to make B and hydrogen.

Compound C is formed by the addition polymerisation of B.

To which homologous series do A, B and C belong?

	alkene	alkane
A	A	B and C
B	B	A and C
C	C	A and B
D	–	A and C

40 Which row correctly describes the production of ethanol and its properties?

	can be made from glucose	can be made from ethene	is used as a fuel	is used as a solvent
A	✓	✓	✓	✓
B	✓	x	✓	✓
C	x	✓	✓	x
D	x	✓	x	✓

BLANK PAGE

DATA SHEET
The Periodic Table of the Elements

		Group																											
		I	II	III	IV	V	VI	VII	0																				
		<table style="width: 100%; border-collapse: collapse;"> <tr> <td style="width: 10%; text-align: center;">1 H Hydrogen 1</td> <td colspan="10"></td> </tr> </table>										1 H Hydrogen 1																	
1 H Hydrogen 1																													
		<table style="width: 100%; border-collapse: collapse;"> <tr> <td style="width: 10%; text-align: center;">9 Be Beryllium 4</td> <td colspan="10"></td> </tr> </table>										9 Be Beryllium 4																	
9 Be Beryllium 4																													
		<table style="width: 100%; border-collapse: collapse;"> <tr> <td style="width: 10%; text-align: center;">23 Na Sodium 11</td> <td style="width: 10%; text-align: center;">24 Mg Magnesium 12</td> <td colspan="8"></td> <td style="width: 10%; text-align: center;">19 K Potassium 19</td> <td style="width: 10%; text-align: center;">20 Ca Calcium 20</td> </tr> </table>										23 Na Sodium 11	24 Mg Magnesium 12									19 K Potassium 19	20 Ca Calcium 20						
23 Na Sodium 11	24 Mg Magnesium 12									19 K Potassium 19	20 Ca Calcium 20																		
		<table style="width: 100%; border-collapse: collapse;"> <tr> <td style="width: 10%; text-align: center;">39 K Potassium 19</td> <td style="width: 10%; text-align: center;">40 Ca Calcium 20</td> <td style="width: 10%; text-align: center;">45 Sc Scandium 21</td> <td style="width: 10%; text-align: center;">48 Ti Titanium 22</td> <td style="width: 10%; text-align: center;">51 V Vanadium 23</td> <td style="width: 10%; text-align: center;">52 Cr Chromium 24</td> <td style="width: 10%; text-align: center;">55 Mn Manganese 25</td> <td style="width: 10%; text-align: center;">56 Fe Iron 26</td> <td style="width: 10%; text-align: center;">59 Co Cobalt 27</td> <td style="width: 10%; text-align: center;">59 Ni Nickel 28</td> <td style="width: 10%; text-align: center;">64 Cu Copper 29</td> <td style="width: 10%; text-align: center;">65 Zn Zinc 30</td> <td style="width: 10%; text-align: center;">70 Ga Gallium 31</td> <td style="width: 10%; text-align: center;">73 Ge Germanium 32</td> <td style="width: 10%; text-align: center;">75 As Arsenic 33</td> <td style="width: 10%; text-align: center;">79 Se Selenium 34</td> <td style="width: 10%; text-align: center;">80 Br Bromine 35</td> <td style="width: 10%; text-align: center;">84 Kr Krypton 36</td> </tr> </table>										39 K Potassium 19	40 Ca Calcium 20	45 Sc Scandium 21	48 Ti Titanium 22	51 V Vanadium 23	52 Cr Chromium 24	55 Mn Manganese 25	56 Fe Iron 26	59 Co Cobalt 27	59 Ni Nickel 28	64 Cu Copper 29	65 Zn Zinc 30	70 Ga Gallium 31	73 Ge Germanium 32	75 As Arsenic 33	79 Se Selenium 34	80 Br Bromine 35	84 Kr Krypton 36
39 K Potassium 19	40 Ca Calcium 20	45 Sc Scandium 21	48 Ti Titanium 22	51 V Vanadium 23	52 Cr Chromium 24	55 Mn Manganese 25	56 Fe Iron 26	59 Co Cobalt 27	59 Ni Nickel 28	64 Cu Copper 29	65 Zn Zinc 30	70 Ga Gallium 31	73 Ge Germanium 32	75 As Arsenic 33	79 Se Selenium 34	80 Br Bromine 35	84 Kr Krypton 36												
		<table style="width: 100%; border-collapse: collapse;"> <tr> <td style="width: 10%; text-align: center;">85 Rb Rubidium 37</td> <td style="width: 10%; text-align: center;">88 Sr Strontium 38</td> <td style="width: 10%; text-align: center;">89 Y Yttrium 39</td> <td style="width: 10%; text-align: center;">91 Zr Zirconium 40</td> <td style="width: 10%; text-align: center;">93 Nb Niobium 41</td> <td style="width: 10%; text-align: center;">96 Mo Molybdenum 42</td> <td style="width: 10%; text-align: center;">101 Ru Ruthenium 44</td> <td style="width: 10%; text-align: center;">106 Pd Palladium 46</td> <td style="width: 10%; text-align: center;">108 Ag Silver 47</td> <td style="width: 10%; text-align: center;">112 Cd Cadmium 48</td> <td style="width: 10%; text-align: center;">115 In Indium 49</td> <td style="width: 10%; text-align: center;">122 Sb Antimony 51</td> <td style="width: 10%; text-align: center;">128 Te Tellurium 52</td> <td style="width: 10%; text-align: center;">131 Xe Xenon 54</td> </tr> </table>										85 Rb Rubidium 37	88 Sr Strontium 38	89 Y Yttrium 39	91 Zr Zirconium 40	93 Nb Niobium 41	96 Mo Molybdenum 42	101 Ru Ruthenium 44	106 Pd Palladium 46	108 Ag Silver 47	112 Cd Cadmium 48	115 In Indium 49	122 Sb Antimony 51	128 Te Tellurium 52	131 Xe Xenon 54				
85 Rb Rubidium 37	88 Sr Strontium 38	89 Y Yttrium 39	91 Zr Zirconium 40	93 Nb Niobium 41	96 Mo Molybdenum 42	101 Ru Ruthenium 44	106 Pd Palladium 46	108 Ag Silver 47	112 Cd Cadmium 48	115 In Indium 49	122 Sb Antimony 51	128 Te Tellurium 52	131 Xe Xenon 54																
		<table style="width: 100%; border-collapse: collapse;"> <tr> <td style="width: 10%; text-align: center;">133 Cs Caesium 55</td> <td style="width: 10%; text-align: center;">137 Ba Barium 56</td> <td style="width: 10%; text-align: center;">139 La Lanthanum 57</td> <td style="width: 10%; text-align: center;">178 Hf Hafnium 72</td> <td style="width: 10%; text-align: center;">181 Ta Tantalum 73</td> <td style="width: 10%; text-align: center;">184 W Tungsten 74</td> <td style="width: 10%; text-align: center;">190 Os Osmium 76</td> <td style="width: 10%; text-align: center;">195 Pt Platinum 78</td> <td style="width: 10%; text-align: center;">197 Au Gold 79</td> <td style="width: 10%; text-align: center;">201 Hg Mercury 80</td> <td style="width: 10%; text-align: center;">204 Tl Thallium 81</td> <td style="width: 10%; text-align: center;">209 Pb Lead 82</td> <td style="width: 10%; text-align: center;">210 Bi Bismuth 83</td> <td style="width: 10%; text-align: center;">210 Po Polonium 84</td> <td style="width: 10%; text-align: center;">210 At Astatine 85</td> <td style="width: 10%; text-align: center;">210 Rn Radon 86</td> </tr> </table>										133 Cs Caesium 55	137 Ba Barium 56	139 La Lanthanum 57	178 Hf Hafnium 72	181 Ta Tantalum 73	184 W Tungsten 74	190 Os Osmium 76	195 Pt Platinum 78	197 Au Gold 79	201 Hg Mercury 80	204 Tl Thallium 81	209 Pb Lead 82	210 Bi Bismuth 83	210 Po Polonium 84	210 At Astatine 85	210 Rn Radon 86		
133 Cs Caesium 55	137 Ba Barium 56	139 La Lanthanum 57	178 Hf Hafnium 72	181 Ta Tantalum 73	184 W Tungsten 74	190 Os Osmium 76	195 Pt Platinum 78	197 Au Gold 79	201 Hg Mercury 80	204 Tl Thallium 81	209 Pb Lead 82	210 Bi Bismuth 83	210 Po Polonium 84	210 At Astatine 85	210 Rn Radon 86														
		<table style="width: 100%; border-collapse: collapse;"> <tr> <td style="width: 10%; text-align: center;">226 Ra Radium 88</td> <td style="width: 10%; text-align: center;">227 Ac Actinium 89</td> <td colspan="14"></td> </tr> </table>										226 Ra Radium 88	227 Ac Actinium 89																
226 Ra Radium 88	227 Ac Actinium 89																												
		<table style="width: 100%; border-collapse: collapse;"> <tr> <td style="width: 10%; text-align: center;">140 Ce Cerium 58</td> <td style="width: 10%; text-align: center;">141 Pr Praseodymium 59</td> <td style="width: 10%; text-align: center;">144 Nd Neodymium 60</td> <td style="width: 10%; text-align: center;">150 Sm Samarium 62</td> <td style="width: 10%; text-align: center;">152 Eu Europium 63</td> <td style="width: 10%; text-align: center;">157 Gd Gadolinium 64</td> <td style="width: 10%; text-align: center;">159 Tb Terbium 65</td> <td style="width: 10%; text-align: center;">162 Dy Dysprosium 66</td> <td style="width: 10%; text-align: center;">165 Ho Holmium 67</td> <td style="width: 10%; text-align: center;">167 Er Erbium 68</td> <td style="width: 10%; text-align: center;">169 Tm Thulium 69</td> <td style="width: 10%; text-align: center;">173 Yb Ytterbium 70</td> <td style="width: 10%; text-align: center;">175 Lu Lutetium 71</td> </tr> </table>										140 Ce Cerium 58	141 Pr Praseodymium 59	144 Nd Neodymium 60	150 Sm Samarium 62	152 Eu Europium 63	157 Gd Gadolinium 64	159 Tb Terbium 65	162 Dy Dysprosium 66	165 Ho Holmium 67	167 Er Erbium 68	169 Tm Thulium 69	173 Yb Ytterbium 70	175 Lu Lutetium 71					
140 Ce Cerium 58	141 Pr Praseodymium 59	144 Nd Neodymium 60	150 Sm Samarium 62	152 Eu Europium 63	157 Gd Gadolinium 64	159 Tb Terbium 65	162 Dy Dysprosium 66	165 Ho Holmium 67	167 Er Erbium 68	169 Tm Thulium 69	173 Yb Ytterbium 70	175 Lu Lutetium 71																	
		<table style="width: 100%; border-collapse: collapse;"> <tr> <td style="width: 10%; text-align: center;">232 Th Thorium 90</td> <td style="width: 10%; text-align: center;">238 U Uranium 92</td> <td style="width: 10%; text-align: center;">238 Np Neptunium 93</td> <td style="width: 10%; text-align: center;">238 Pu Plutonium 94</td> <td style="width: 10%; text-align: center;">238 Am Americium 95</td> <td style="width: 10%; text-align: center;">238 Cm Curium 96</td> <td style="width: 10%; text-align: center;">238 Bk Berkelium 97</td> <td style="width: 10%; text-align: center;">238 Cf Californium 98</td> <td style="width: 10%; text-align: center;">238 Es Einsteinium 99</td> <td style="width: 10%; text-align: center;">238 Fm Fermium 100</td> <td style="width: 10%; text-align: center;">238 Md Mendelevium 101</td> <td style="width: 10%; text-align: center;">238 No Nobelium 102</td> <td style="width: 10%; text-align: center;">238 Lr Lawrencium 103</td> </tr> </table>										232 Th Thorium 90	238 U Uranium 92	238 Np Neptunium 93	238 Pu Plutonium 94	238 Am Americium 95	238 Cm Curium 96	238 Bk Berkelium 97	238 Cf Californium 98	238 Es Einsteinium 99	238 Fm Fermium 100	238 Md Mendelevium 101	238 No Nobelium 102	238 Lr Lawrencium 103					
232 Th Thorium 90	238 U Uranium 92	238 Np Neptunium 93	238 Pu Plutonium 94	238 Am Americium 95	238 Cm Curium 96	238 Bk Berkelium 97	238 Cf Californium 98	238 Es Einsteinium 99	238 Fm Fermium 100	238 Md Mendelevium 101	238 No Nobelium 102	238 Lr Lawrencium 103																	

The volume of one mole of any gas is 24 dm³ at room temperature and pressure (r.t.p.).

a	X	a = relative atomic mass
b	X	X = atomic symbol
	X	b = proton (atomic) number

*58-71 Lanthanoid series
†90-103 Actinoid series